

$$\begin{array}{r} 0 \\ +0 \\ \hline \end{array}$$

$$\begin{array}{r} 1 \\ +0 \\ \hline \end{array}$$

$$\begin{array}{r} 0 \\ +1 \\ \hline \end{array}$$

$$\begin{array}{r} 2 \\ +0 \\ \hline \end{array}$$

$$\begin{array}{r} 1 \\ +1 \\ \hline \end{array}$$

$$\begin{array}{r} 0 \\ +2 \\ \hline \end{array}$$

$$\begin{array}{r} 3 \\ +0 \\ \hline \end{array}$$

$$\begin{array}{r} 2 \\ +1 \\ \hline \end{array}$$

$$\begin{array}{r} 1 \\ +2 \\ \hline \end{array}$$

$$\begin{array}{r} 0 \\ + 3 \\ \hline \end{array}$$

$$\begin{array}{r} 4 \\ + 0 \\ \hline \end{array}$$

$$\begin{array}{r} 3 \\ + 1 \\ \hline \end{array}$$

$$\begin{array}{r} 2 \\ + 2 \\ \hline \end{array}$$

$$\begin{array}{r} 1 \\ + 3 \\ \hline \end{array}$$

$$\begin{array}{r} 0 \\ + 4 \\ \hline \end{array}$$

$$\begin{array}{r} 5 \\ + 0 \\ \hline \end{array}$$

$$\begin{array}{r} 4 \\ + 1 \\ \hline \end{array}$$

$$\begin{array}{r} 3 \\ + 2 \\ \hline \end{array}$$

$$\begin{array}{r} 2 \\ + 3 \\ \hline \end{array}$$

$$\begin{array}{r} 1 \\ + 4 \\ \hline \end{array}$$

$$\begin{array}{r} 0 \\ + 5 \\ \hline \end{array}$$

$$\begin{array}{r} 6 \\ + 0 \\ \hline \end{array}$$

$$\begin{array}{r} 5 \\ + 1 \\ \hline \end{array}$$

$$\begin{array}{r} 4 \\ + 2 \\ \hline \end{array}$$

$$\begin{array}{r} 3 \\ + 3 \\ \hline \end{array}$$

$$\begin{array}{r} 2 \\ + 4 \\ \hline \end{array}$$

$$\begin{array}{r} 1 \\ + 5 \\ \hline \end{array}$$

$$\begin{array}{r} 0 \\ +6 \\ \hline \end{array}$$

$$\begin{array}{r} 7 \\ +0 \\ \hline \end{array}$$

$$\begin{array}{r} 6 \\ +1 \\ \hline \end{array}$$

$$\begin{array}{r} 5 \\ +2 \\ \hline \end{array}$$

$$\begin{array}{r} 4 \\ +3 \\ \hline \end{array}$$

$$\begin{array}{r} 3 \\ +4 \\ \hline \end{array}$$

$$\begin{array}{r} 2 \\ +5 \\ \hline \end{array}$$

$$\begin{array}{r} 1 \\ +6 \\ \hline \end{array}$$

$$\begin{array}{r} 0 \\ +7 \\ \hline \end{array}$$

$$\begin{array}{r} 8 \\ + 0 \\ \hline \end{array}$$

$$\begin{array}{r} 7 \\ + 1 \\ \hline \end{array}$$

$$\begin{array}{r} 6 \\ + 2 \\ \hline \end{array}$$

$$\begin{array}{r} 5 \\ + 3 \\ \hline \end{array}$$

$$\begin{array}{r} 4 \\ + 4 \\ \hline \end{array}$$

$$\begin{array}{r} 3 \\ + 5 \\ \hline \end{array}$$

$$\begin{array}{r} 2 \\ + 6 \\ \hline \end{array}$$

$$\begin{array}{r} 1 \\ + 7 \\ \hline \end{array}$$

$$\begin{array}{r} 0 \\ + 8 \\ \hline \end{array}$$

$$\begin{array}{r} 9 \\ +0 \\ \hline \end{array}$$

$$\begin{array}{r} 8 \\ +1 \\ \hline \end{array}$$

$$\begin{array}{r} 7 \\ +2 \\ \hline \end{array}$$

$$\begin{array}{r} 6 \\ +3 \\ \hline \end{array}$$

$$\begin{array}{r} 5 \\ +4 \\ \hline \end{array}$$

$$\begin{array}{r} 4 \\ +5 \\ \hline \end{array}$$

$$\begin{array}{r} 3 \\ +6 \\ \hline \end{array}$$

$$\begin{array}{r} 2 \\ +7 \\ \hline \end{array}$$

$$\begin{array}{r} 1 \\ +8 \\ \hline \end{array}$$

$$\begin{array}{r} 0 \\ + 9 \\ \hline \end{array}$$

$$\begin{array}{r} 10 \\ + 0 \\ \hline \end{array}$$

$$\begin{array}{r} 9 \\ + 1 \\ \hline \end{array}$$

$$\begin{array}{r} 8 \\ + 2 \\ \hline \end{array}$$

$$\begin{array}{r} 7 \\ + 3 \\ \hline \end{array}$$

$$\begin{array}{r} 6 \\ + 4 \\ \hline \end{array}$$

$$\begin{array}{r} 5 \\ + 5 \\ \hline \end{array}$$

$$\begin{array}{r} 4 \\ + 6 \\ \hline \end{array}$$

$$\begin{array}{r} 3 \\ + 7 \\ \hline \end{array}$$

$$\begin{array}{r} 2 \\ +8 \\ \hline \end{array}$$

$$\begin{array}{r} 1 \\ +9 \\ \hline \end{array}$$

$$\begin{array}{r} 0 \\ +10 \\ \hline \end{array}$$

$$\begin{array}{r} 10 \\ +1 \\ \hline \end{array}$$

$$\begin{array}{r} 9 \\ +2 \\ \hline \end{array}$$

$$\begin{array}{r} 8 \\ +3 \\ \hline \end{array}$$

$$\begin{array}{r} 7 \\ +4 \\ \hline \end{array}$$

$$\begin{array}{r} 6 \\ +5 \\ \hline \end{array}$$

$$\begin{array}{r} 5 \\ +6 \\ \hline \end{array}$$

$$\begin{array}{r} 4 \\ +7 \\ \hline \end{array}$$

$$\begin{array}{r} 3 \\ +8 \\ \hline \end{array}$$

$$\begin{array}{r} 2 \\ +9 \\ \hline \end{array}$$

$$\begin{array}{r} 1 \\ +10 \\ \hline \end{array}$$

$$\begin{array}{r} 10 \\ +2 \\ \hline \end{array}$$

$$\begin{array}{r} 9 \\ +3 \\ \hline \end{array}$$

$$\begin{array}{r} 8 \\ +4 \\ \hline \end{array}$$

$$\begin{array}{r} 7 \\ +5 \\ \hline \end{array}$$

$$\begin{array}{r} 6 \\ +6 \\ \hline \end{array}$$

$$\begin{array}{r} 5 \\ +7 \\ \hline \end{array}$$

$$\begin{array}{r} 4 \\ +8 \\ \hline \end{array}$$

$$\begin{array}{r} 3 \\ +9 \\ \hline \end{array}$$

$$\begin{array}{r} 2 \\ +10 \\ \hline \end{array}$$

$$\begin{array}{r} 10 \\ +3 \\ \hline \end{array}$$

$$\begin{array}{r} 9 \\ +4 \\ \hline \end{array}$$

$$\begin{array}{r} 8 \\ +5 \\ \hline \end{array}$$

$$\begin{array}{r} 7 \\ +6 \\ \hline \end{array}$$

$$\begin{array}{r} 6 \\ +7 \\ \hline \end{array}$$

$$\begin{array}{r} 5 \\ + 8 \\ \hline \end{array}$$

$$\begin{array}{r} 4 \\ + 9 \\ \hline \end{array}$$

$$\begin{array}{r} 3 \\ + 10 \\ \hline \end{array}$$

$$\begin{array}{r} 10 \\ + 4 \\ \hline \end{array}$$

$$\begin{array}{r} 9 \\ + 5 \\ \hline \end{array}$$

$$\begin{array}{r} 8 \\ + 6 \\ \hline \end{array}$$

$$\begin{array}{r} 7 \\ + 7 \\ \hline \end{array}$$

$$\begin{array}{r} 6 \\ + 8 \\ \hline \end{array}$$

$$\begin{array}{r} 5 \\ + 9 \\ \hline \end{array}$$

$$\begin{array}{r} 4 \\ +10 \\ \hline \end{array}$$

$$\begin{array}{r} 10 \\ +5 \\ \hline \end{array}$$

$$\begin{array}{r} 9 \\ +6 \\ \hline \end{array}$$

$$\begin{array}{r} 8 \\ +7 \\ \hline \end{array}$$

$$\begin{array}{r} 7 \\ +8 \\ \hline \end{array}$$

$$\begin{array}{r} 6 \\ +9 \\ \hline \end{array}$$

$$\begin{array}{r} 5 \\ +10 \\ \hline \end{array}$$

$$\begin{array}{r} 10 \\ +6 \\ \hline \end{array}$$

$$\begin{array}{r} 9 \\ +7 \\ \hline \end{array}$$

$$\begin{array}{r} 8 \\ +8 \\ \hline \end{array}$$

$$\begin{array}{r} 7 \\ +9 \\ \hline \end{array}$$

$$\begin{array}{r} 6 \\ +10 \\ \hline \end{array}$$

$$\begin{array}{r} 10 \\ +7 \\ \hline \end{array}$$

$$\begin{array}{r} 9 \\ +8 \\ \hline \end{array}$$

$$\begin{array}{r} 8 \\ +9 \\ \hline \end{array}$$

$$\begin{array}{r} 7 \\ +10 \\ \hline \end{array}$$

$$\begin{array}{r} 10 \\ +8 \\ \hline \end{array}$$

$$\begin{array}{r} 9 \\ +9 \\ \hline \end{array}$$




$$\begin{array}{r} 8 \\ +10 \\ \hline \end{array}$$





$$\begin{array}{r} 10 \\ +9 \\ \hline \end{array}$$

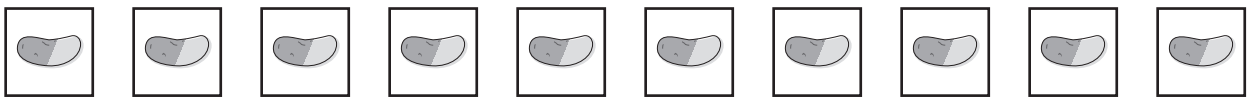
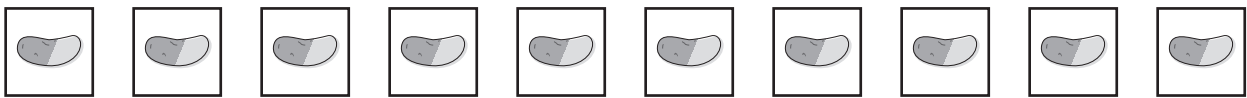
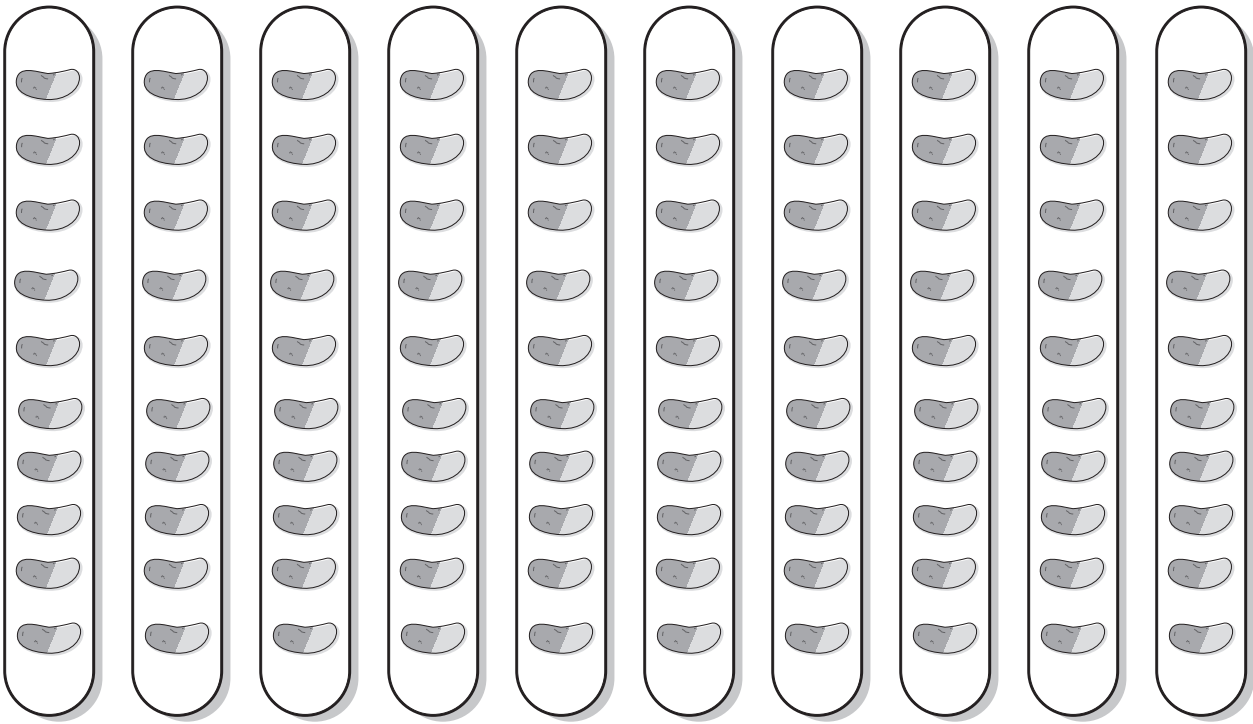
$$\begin{array}{r} 9 \\ +10 \\ \hline \end{array}$$


$$\begin{array}{r} 10 \\ +10 \\ \hline \end{array}$$

+	0	1	2	3	4	5	6	7	8	9	10
0											
1											
2											
3											
4											
5											
6											
7											
8											
9											
10											










||




+




||

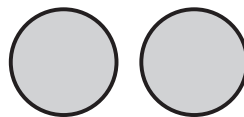


|

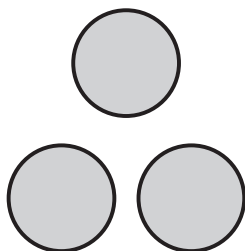




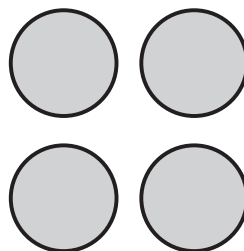
1



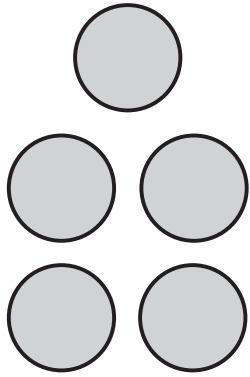
2



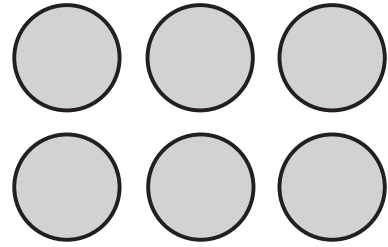
3



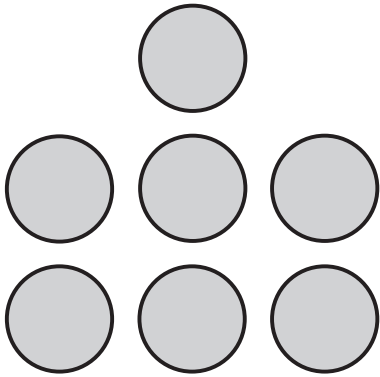
4



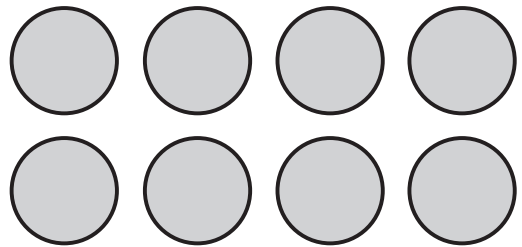
5



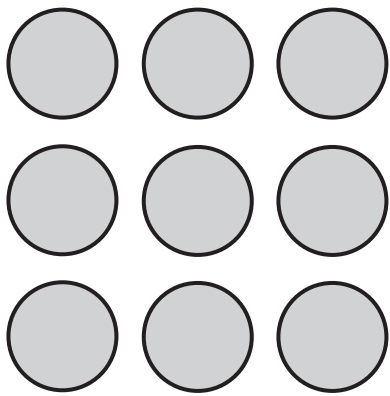
6




7





8





9





10





11



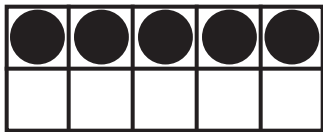

12



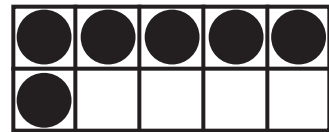

13





14





15





16





17





18






19



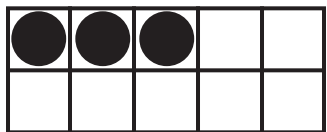


20



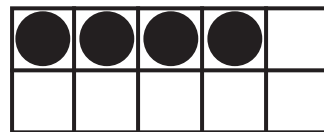


21






22






23



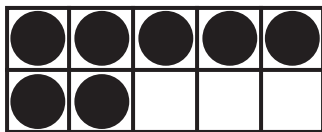


24



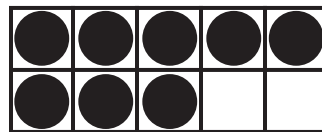


25






26






27







28




29

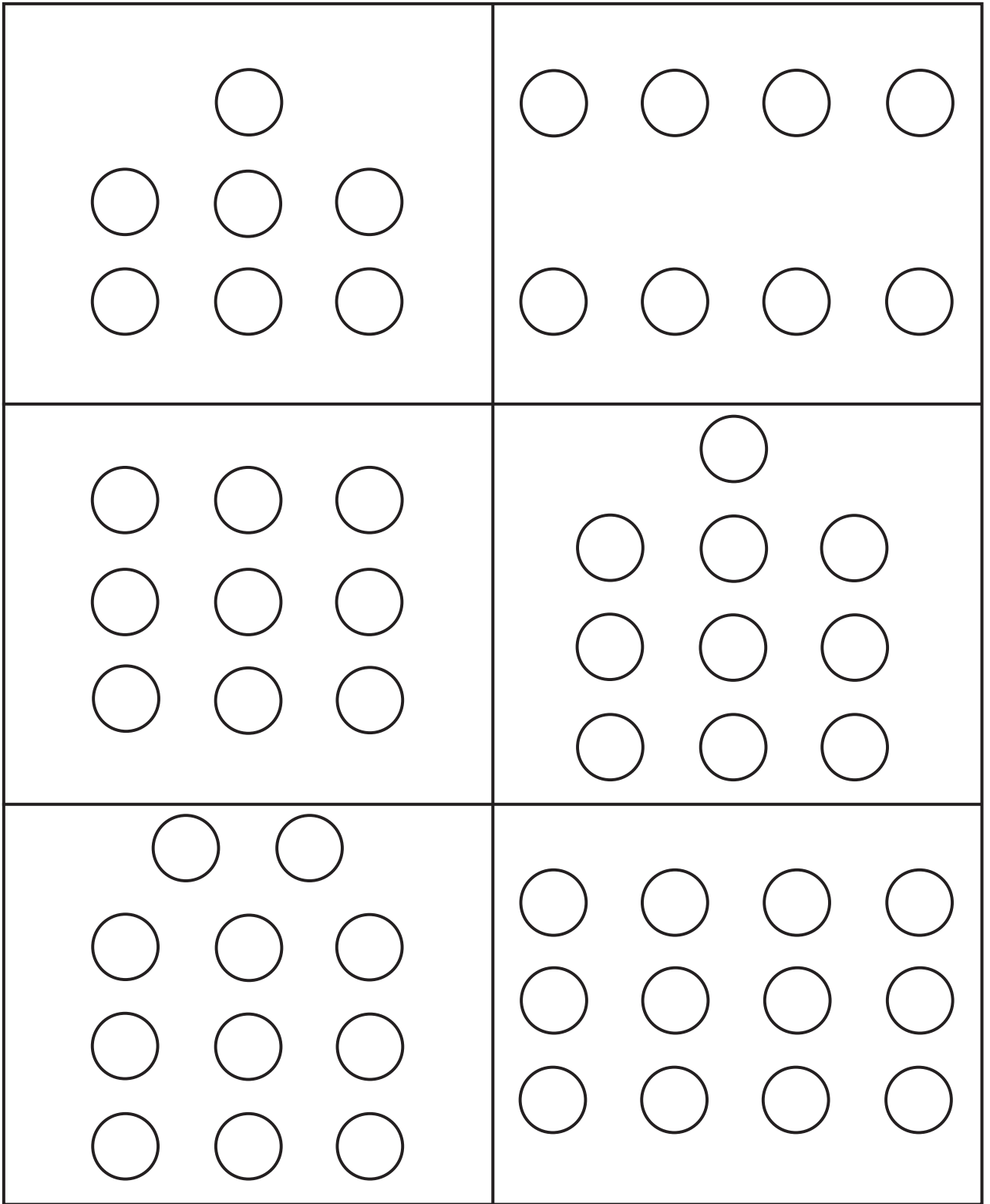


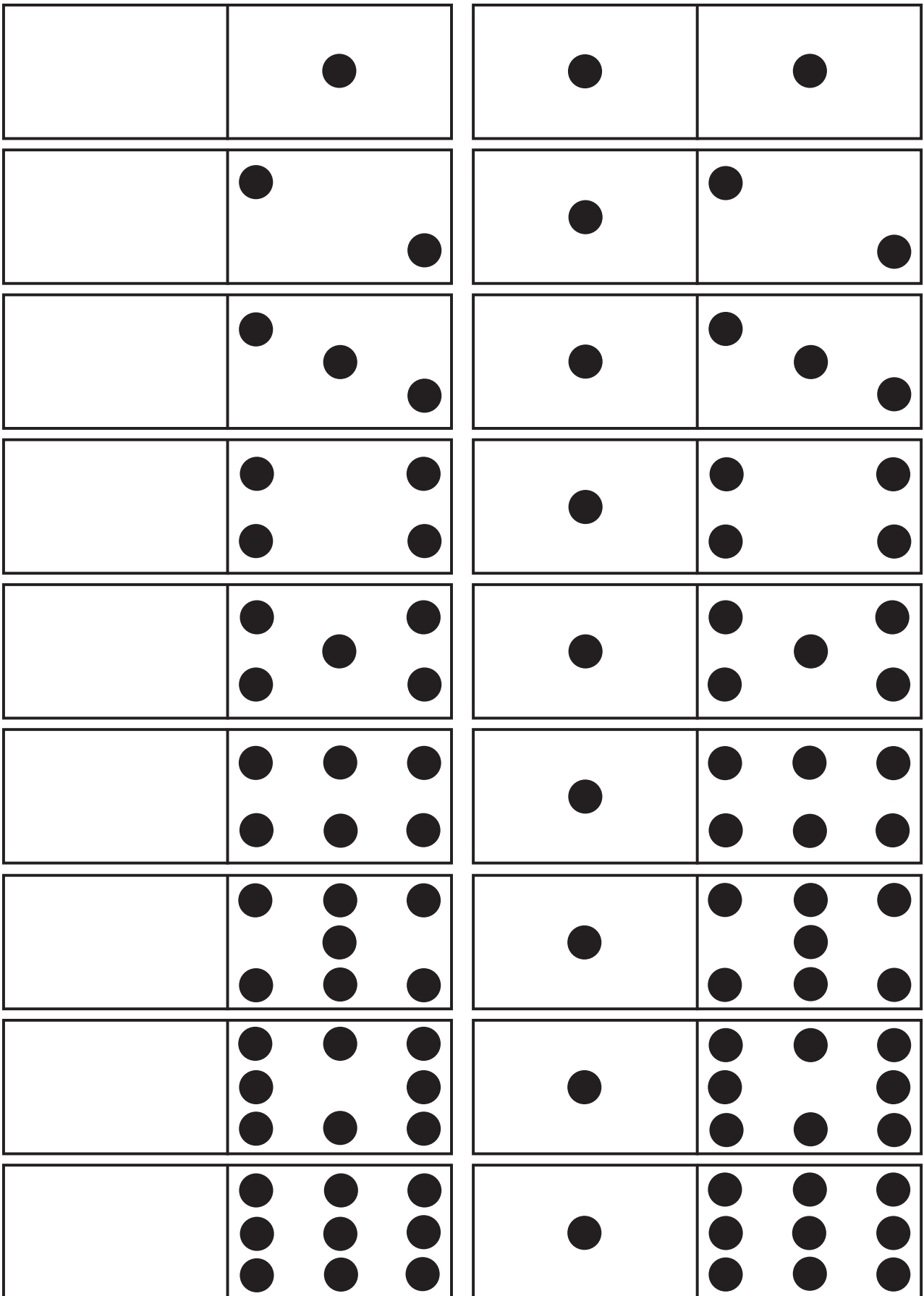
30

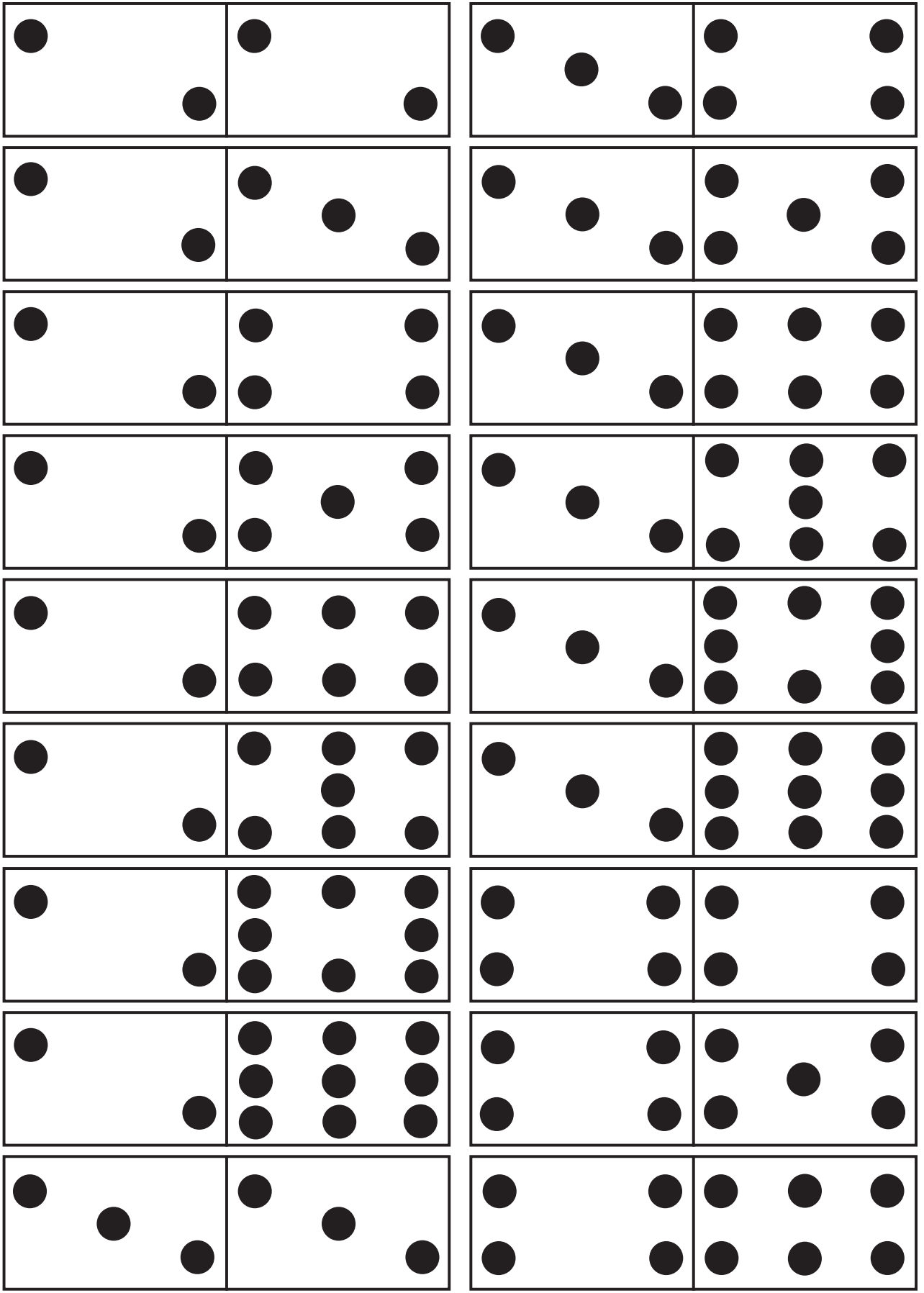



31















Each dot is a 1.
Each strip (link) is a 10.
Ten strips (links) make a chain.
Each chain is 100.

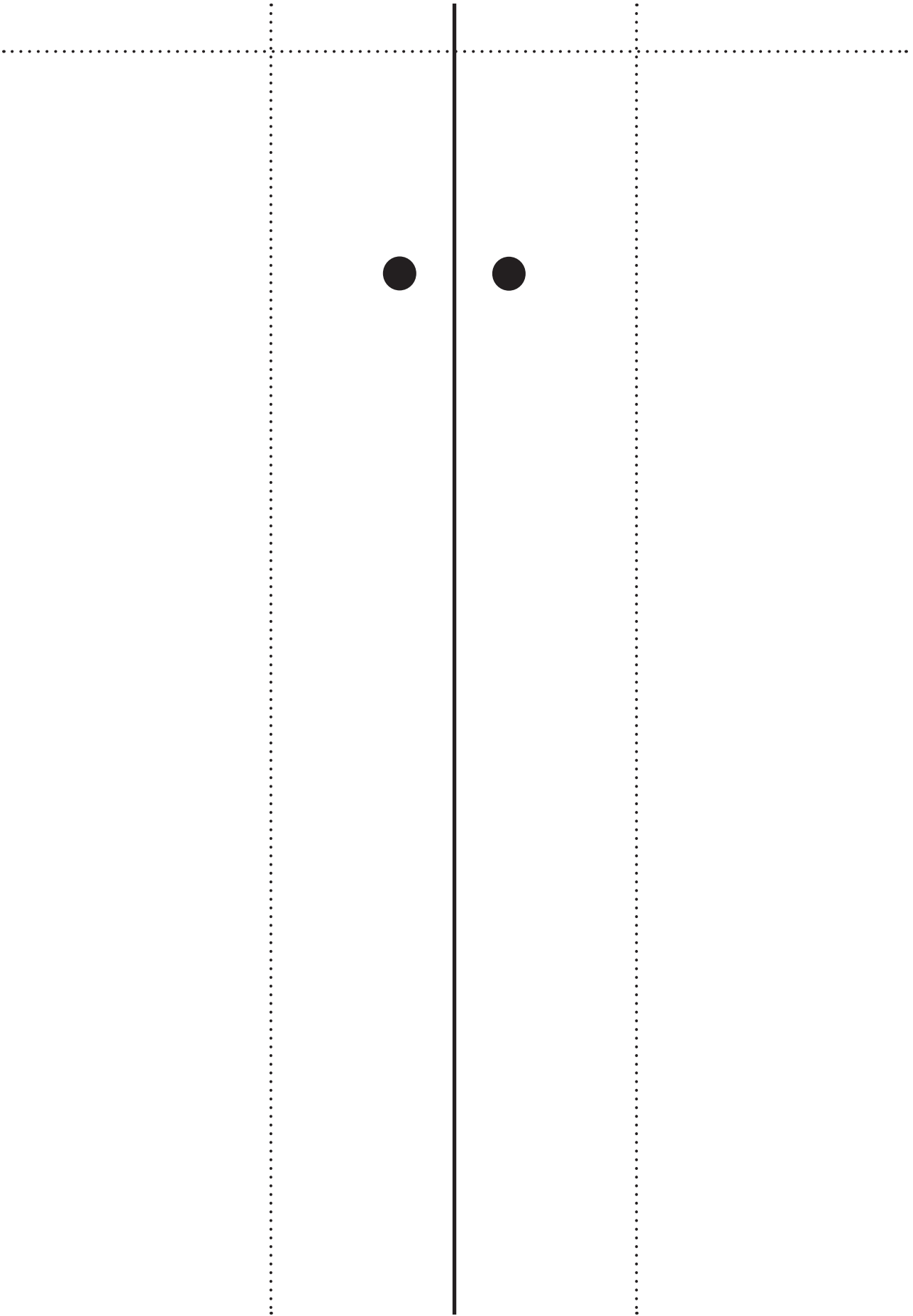


Cada punto es una unidad.

Cada tira (eslabón) es una decena.

Diez tiras (eslabones) forman una cadena.

Cada cadena es una centena.



1	2	3	4	5	6	7	8	9	10
11	12	13	14	15	16	17	18	19	20
21	22	23	24	25	26	27	28	29	30
31	32	33	34	35	36	37	38	39	40
41	42	43	44	45	46	47	48	49	50
51	52	53	54	55	56	57	58	59	60
61	62	63	64	65	66	67	68	69	70
71	72	73	74	75	76	77	78	79	80
81	82	83	84	85	86	87	88	89	90
91	92	93	94	95	96	97	98	99	100

0 + 1 = 1 0 + 3 = 3 0 + 5 = 5

0 - 2 = -2 0 - 4 = -4 0 - 6 = -6

0 + 0 = 0 0 + 2 = 2 0 + 4 = 4 0 + 6 = 6

0 + 7 = 7 0 + 9 = 9 1 + 2 = 3 1 + 4 = 5

7 - 8 = -1 6 - 2 = 4 3 - 4 = -1 5 - 4 = 1

0 + 8 = 8 1 + 1 = 2 1 + 3 = 4

1 + 9 = 10 1 + 8 = 9 2 + 2 = 4 2 + 5 = 7

6 - 8 = -2 8 - 10 = -2 10 - 5 = 5

7 - 6 = 1 6 - 4 = 2 4 - 3 = 1 2 - 2 = 0

1 + 5 = 6 1 + 7 = 8 1 + 9 = 10 3 + 2 = 5

4 + 2 = 6 6 + 2 = 8 8 + 2 = 10 3 + 3 = 6

7 - 7 = 0 9 - 6 = 3 10 - 10 = 0

9 - 8 = 1 8 - 0 = 8 9 - 9 = 0

5 + 2 = 7 7 + 2 = 9 5 + 5 = 10

zero

one

two

three

four

five

six

seven

eight

nine

ten

twenty

cero

uno

dos

tres

cuatro

cinco

seis

siete

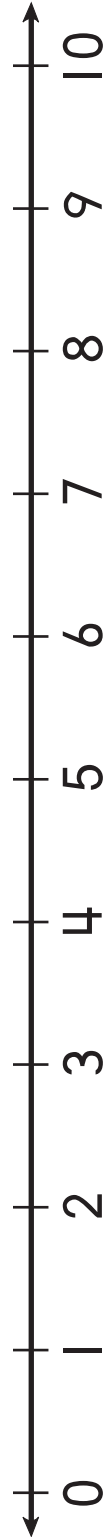
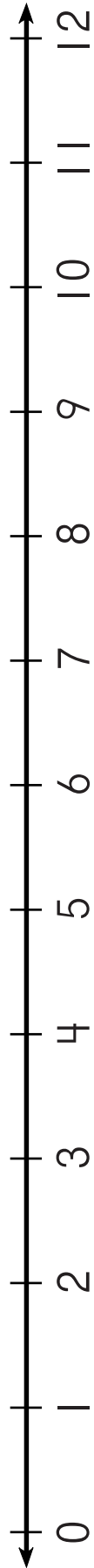
ocho

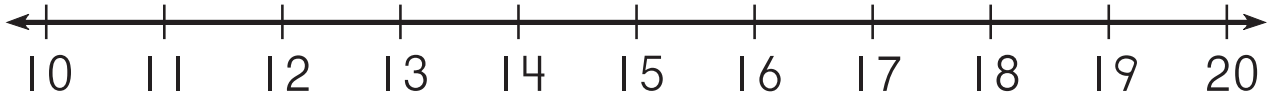
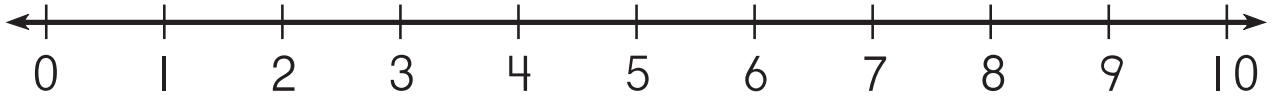
nueve

diez

veinte







4

0

5

1

6

2

7

3

12	8
13	9
14	10
15	11

16

17

18

19

20

21

22

23

24

25

26

27

28

29

30

31

36

32

37


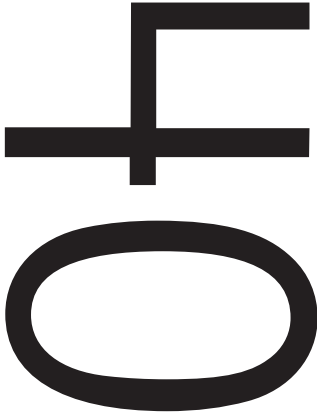
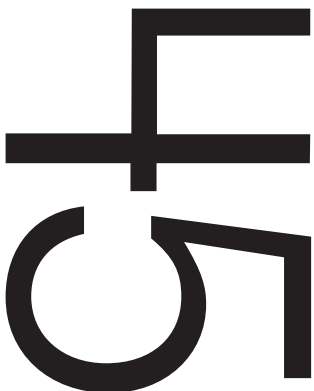




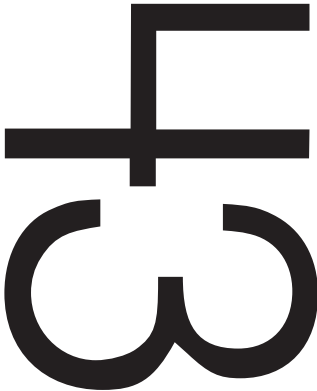
33

38

34

39

35

+

48

-

49

=

50

Ø

0 0

1 1

2 2

3 3

4 4

5 5

6 6

7 7

8 8

9 9

10 10

first

second

third

fourth

fifth

sixth

seventh

eighth

ninth

tenth

eleventh

twelfth

thirteenth

fourteenth

fifteenth

sixteenth

seventeenth

eighteenth

nineteenth

twentieth

séptimo

octavo

noveno

décimo

decimoprimerero

decimosegundo

séptimo

octavo

noveno

décimo

decimoprimerero

decimosegundo

decimotercero

decimocuarto

decimoquinto

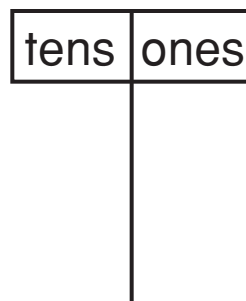
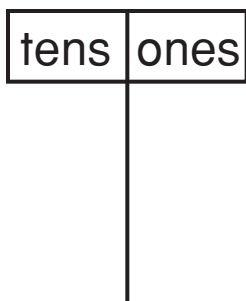
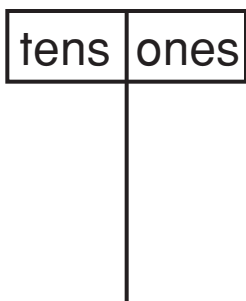
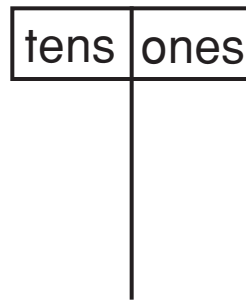
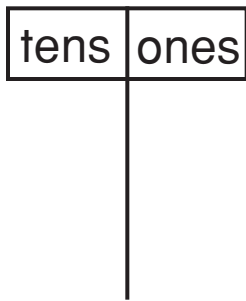
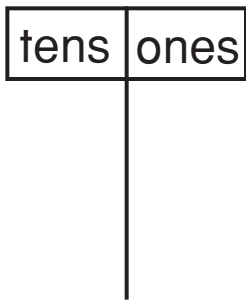
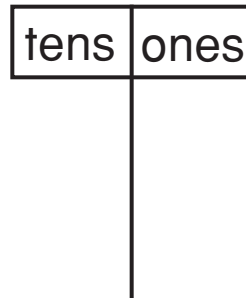
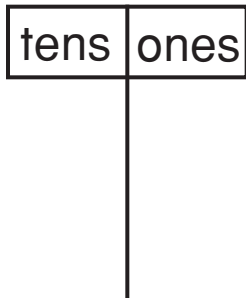
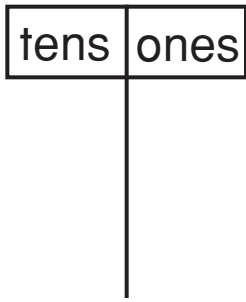
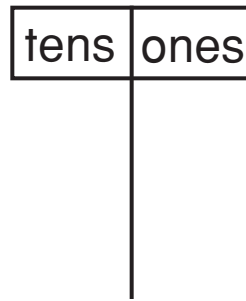
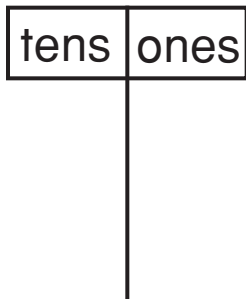
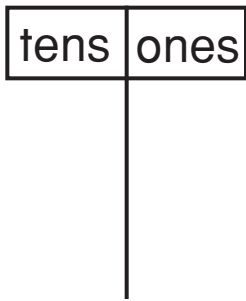
decimosexto

decimoséptimo

decimoctavo

decimonoveno

vigésimo



hundreds	tens	ones

hundreds	tens	ones

hundreds	tens	ones

hundreds	tens	ones

hundreds	tens	ones

hundreds	tens	ones

hundreds	tens	ones

hundreds	tens	ones

thousands	hundreds	tens	ones

thousands	hundreds	tens	ones

thousands	hundreds	tens	ones

thousands	hundreds	tens	ones

decenas	unidades	decenas	unidades	decenas	unidades

decenas	unidades	decenas	unidades	decenas	unidades

decenas	unidades	decenas	unidades	decenas	unidades

decenas	unidades	decenas	unidades	decenas	unidades

centenas	decenas	unidades	centenas	decenas	unidades

centenas	decenas	unidades	centenas	decenas	unidades

centenas	decenas	unidades	centenas	decenas	unidades


centenas	decenas	unidades	centenas	decenas	unidades


millares	centenas	decenas	unidades

millares	centenas	decenas	unidades

millares	centenas	decenas	unidades

millares	centenas	decenas	unidades





10

1

0

20

2

0

30

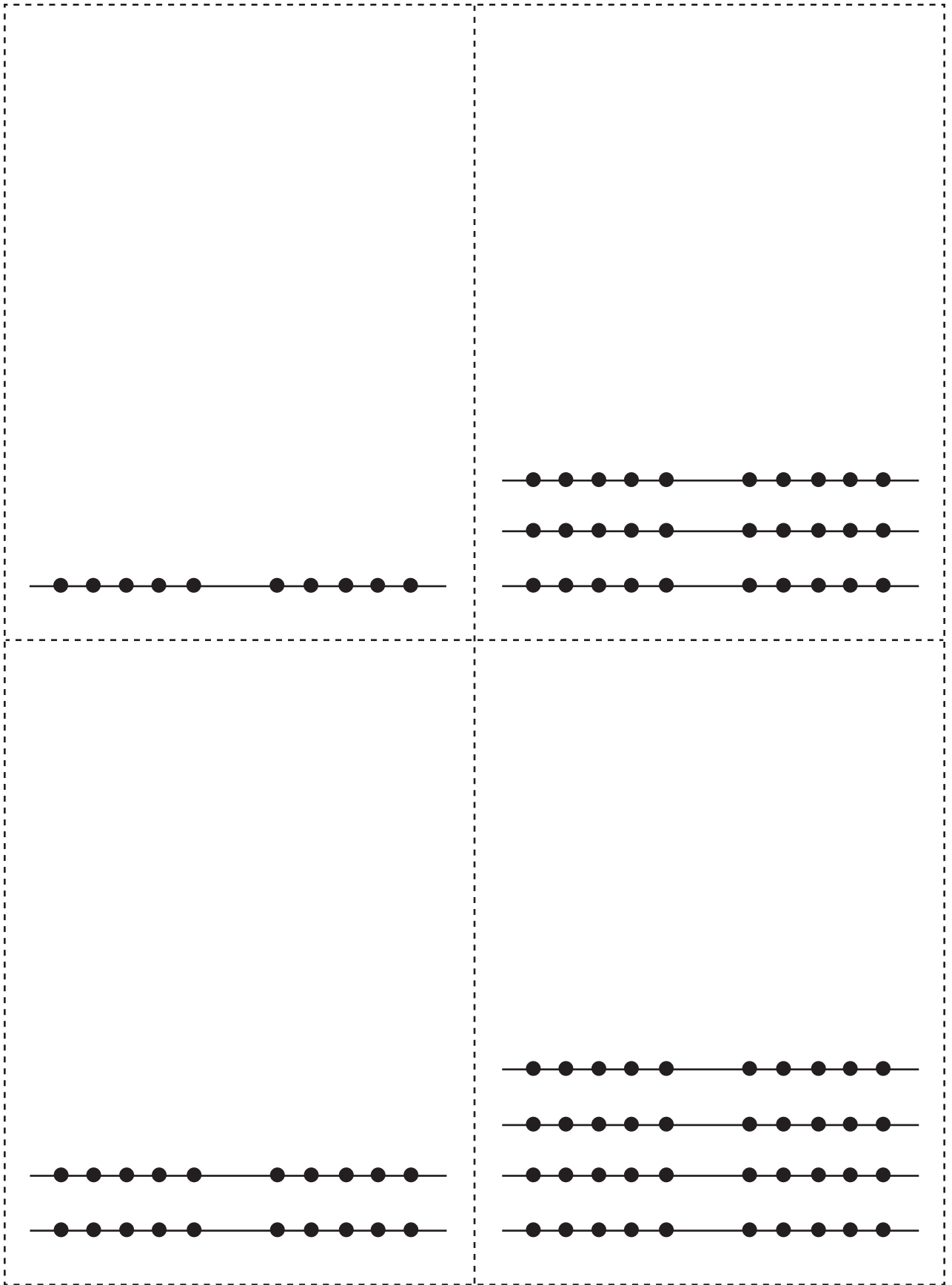
3

0

40

4

0



50

5

0

60

6

0

70


7

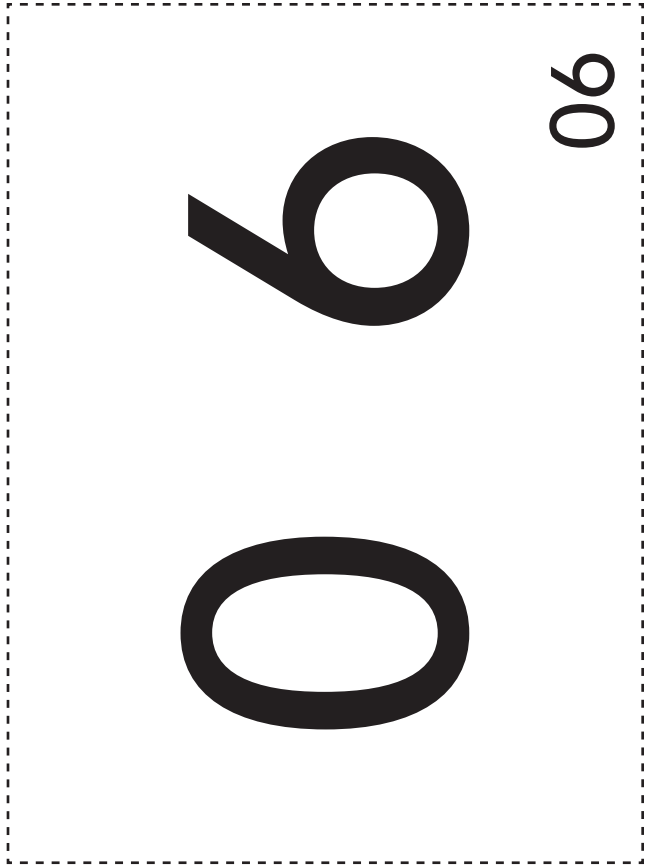
0

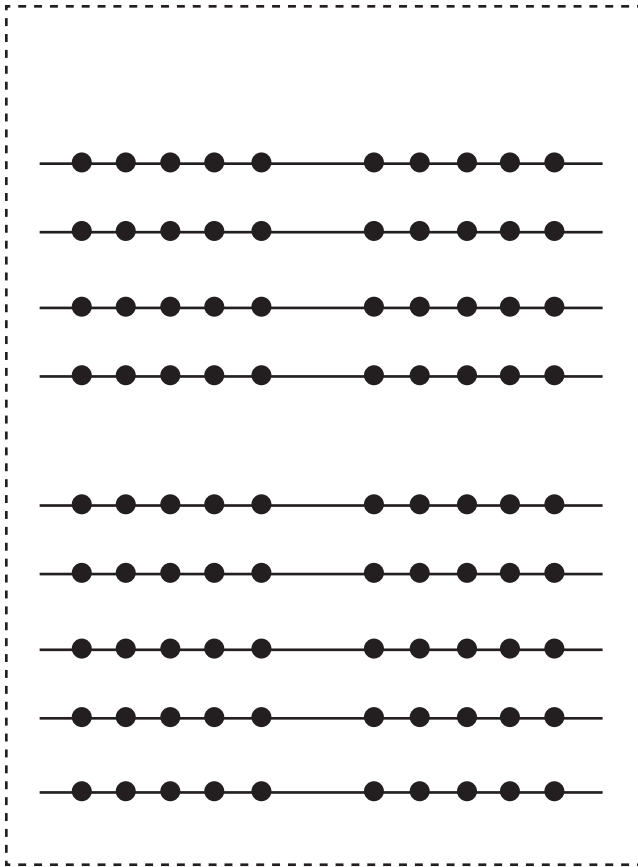
80

8

0







100

1

0

0

1

1

200

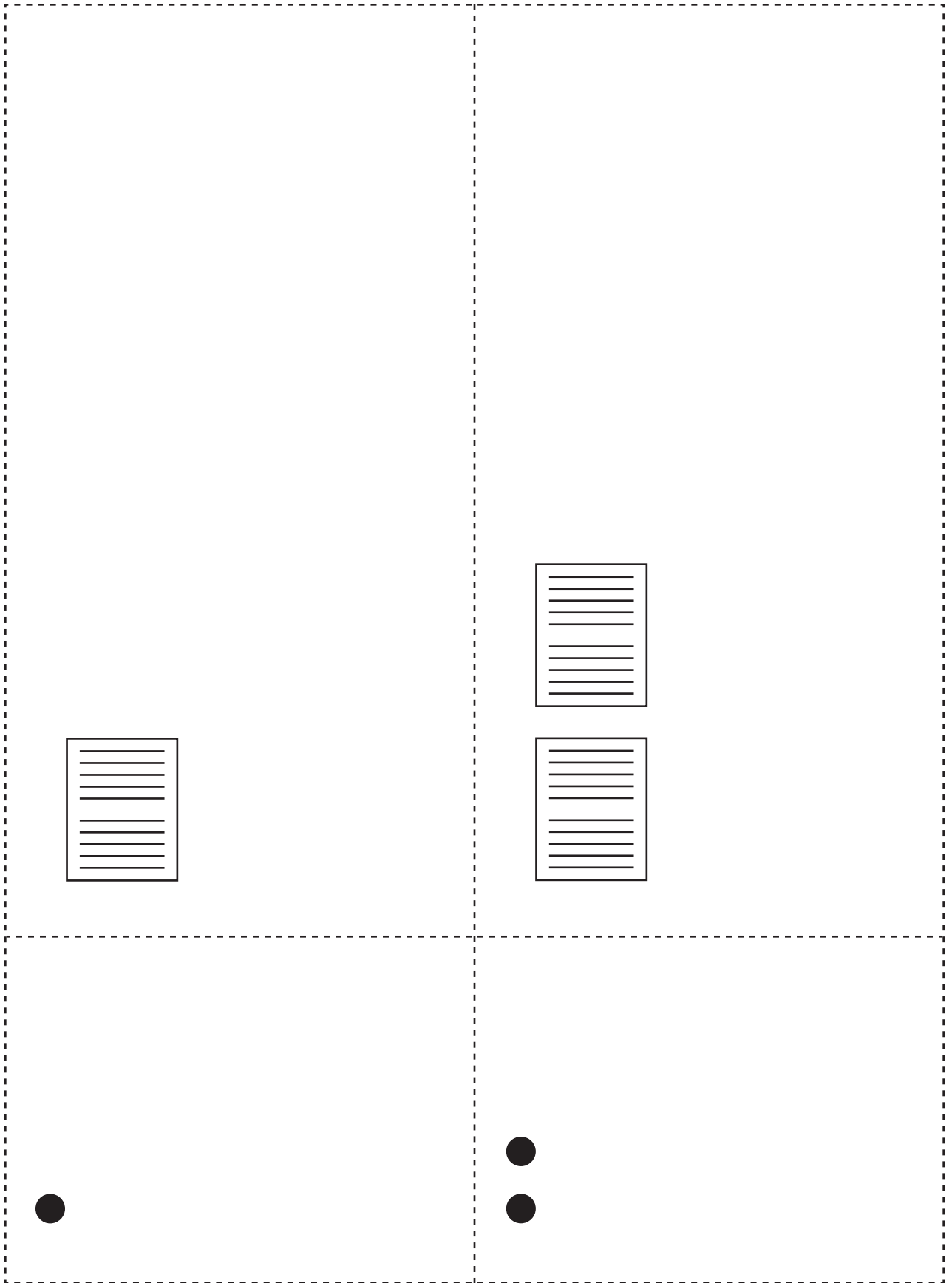
2

0

0

2

2



300

3

0

0

3

3

400

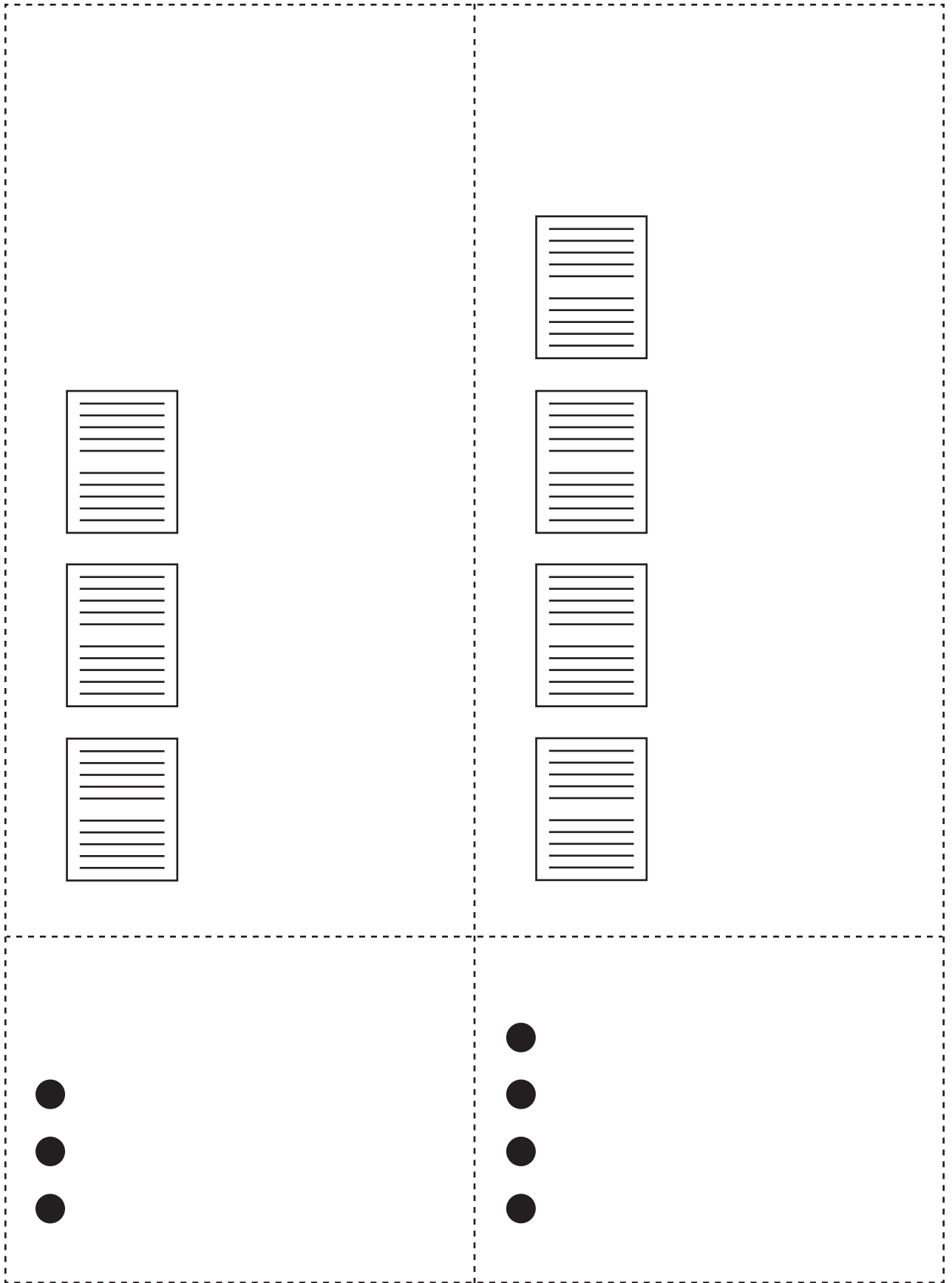
4

0

0

4

4



500

5

0

0

5

5

600

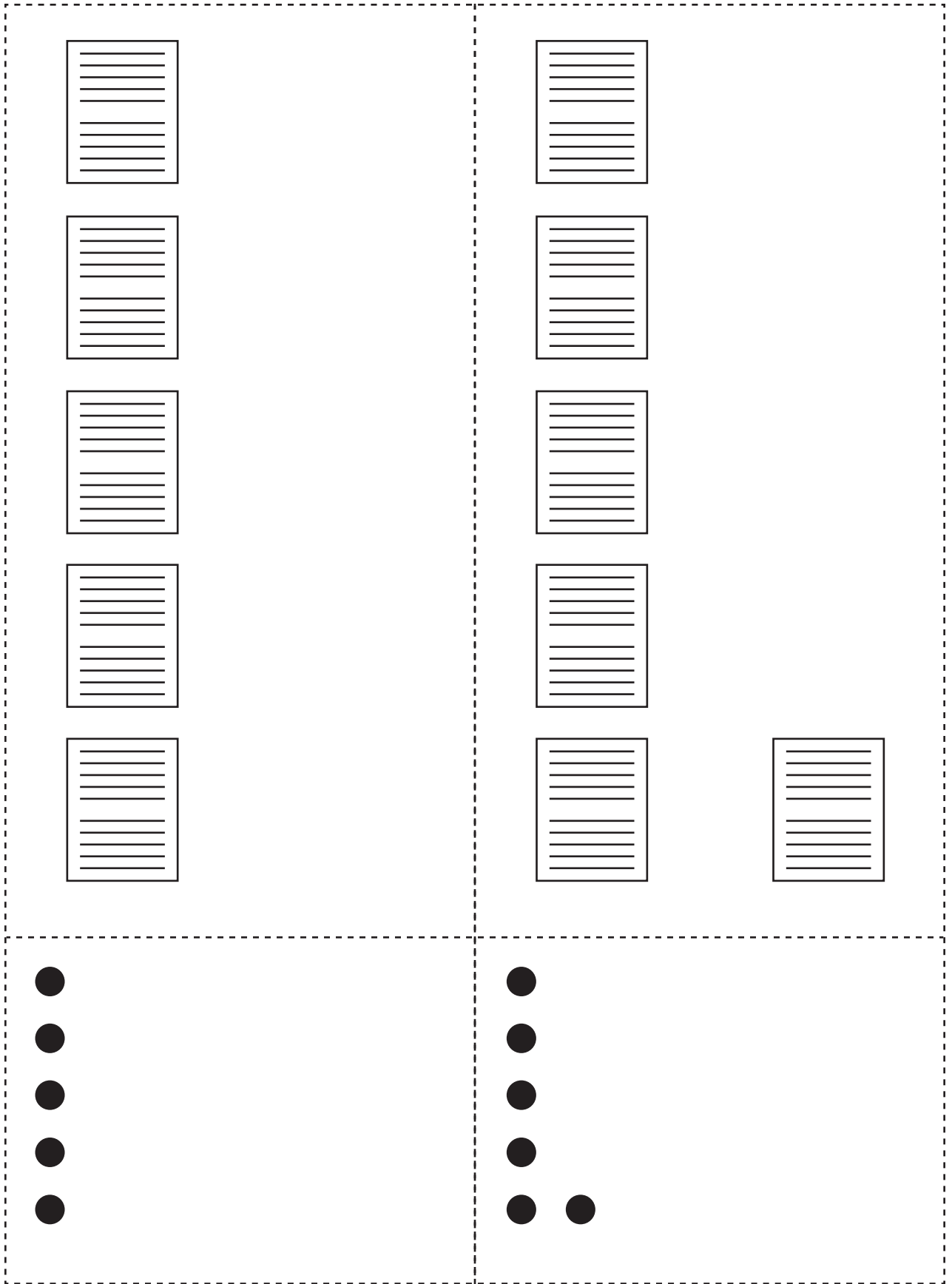
6

0

0

6

6



700

7

0

0

7

7

800

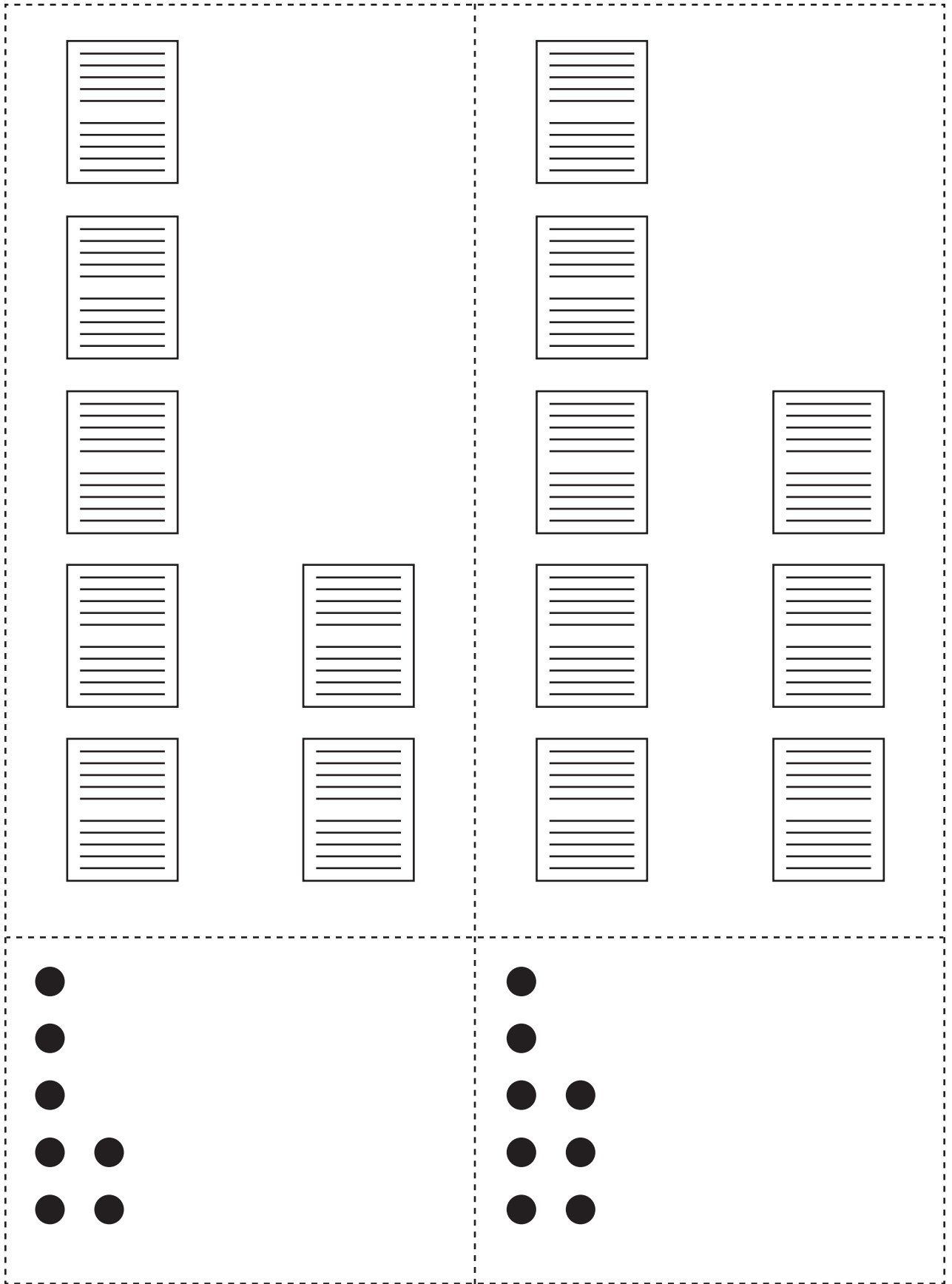
8

0

0

8

8



O

O

O

I

1000

9

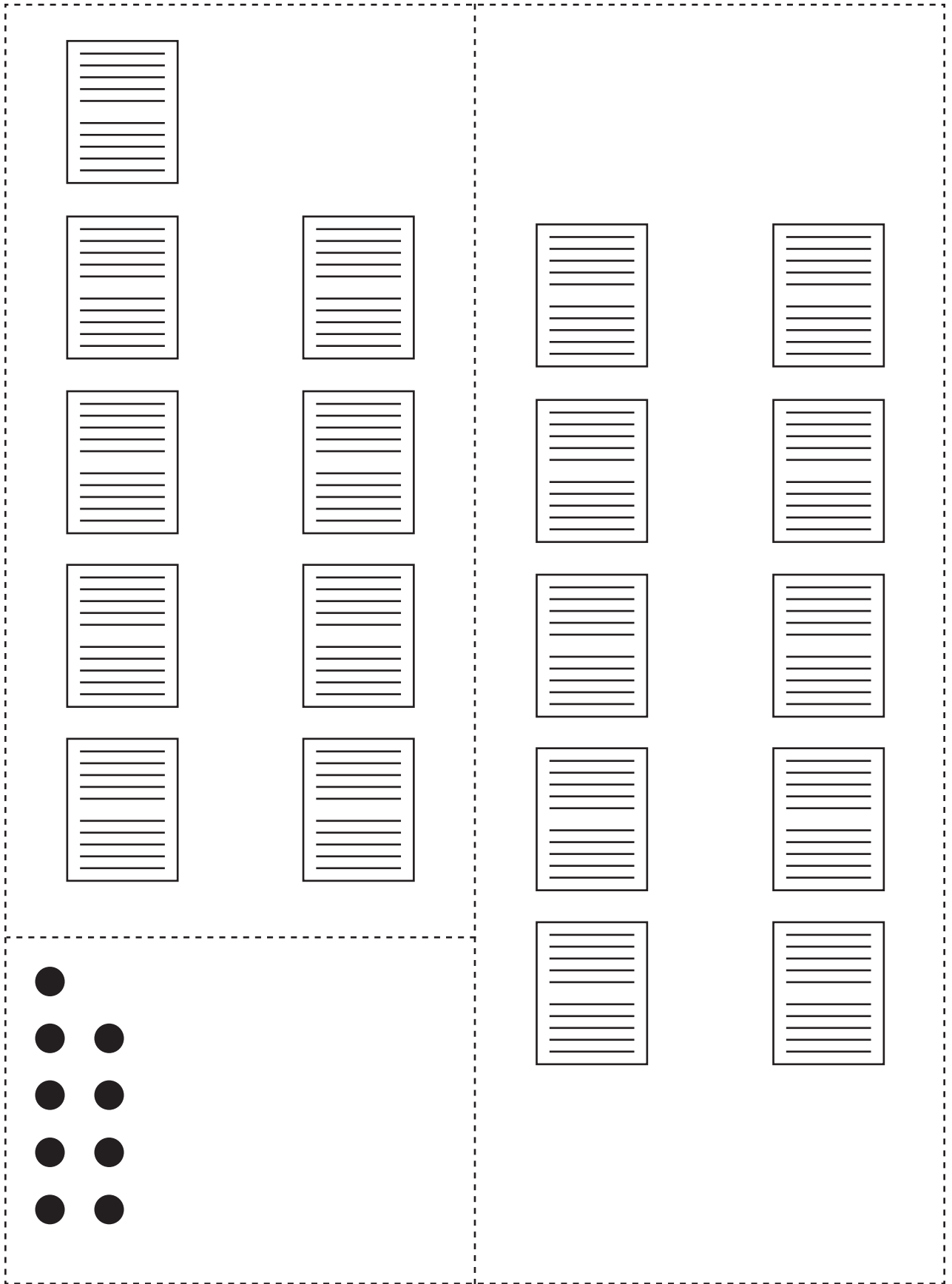
O

O

6

9

006



1

1

2

2

10

1

0

20

2

0

3

3

4

4

30

3

0

40

4

0

5

5

6

6

50

5

0

60

6

0

7

7

8

8

70

7

0

80

8

0

9

9

90

9

0

100

1

0

0





200

2 0 0

300

3 0 0

400

4 0 0

500

5 0 0

600

6 0 0

700

7 0 0

800

8 0 0

900

9 0 0

1000

1 0 0 0



30 Secret Code Cards (200-1000) arranged in a grid. Each card contains a unique pattern of vertical bars.

1000	1001
1002	1003
1004	1005
1006	1007
1008	1009
1010	1011
1012	1013
1014	1015
1016	1017
1018	1019
1020	1021
1022	1023
1024	1025
1026	1027
1028	1029
1030	1031
1032	1033
1034	1035
1036	1037
1038	1039
1040	1041
1042	1043
1044	1045
1046	1047
1048	1049
1050	1051
1052	1053
1054	1055
1056	1057
1058	1059
1060	1061
1062	1063
1064	1065
1066	1067
1068	1069
1070	1071
1072	1073
1074	1075
1076	1077
1078	1079
1080	1081
1082	1083
1084	1085
1086	1087
1088	1089
1090	1091
1092	1093
1094	1095
1096	1097
1098	1099



$$\begin{array}{r} 0 \\ -0 \\ \hline \end{array}$$

$$\begin{array}{r} 1 \\ -0 \\ \hline \end{array}$$

$$\begin{array}{r} 2 \\ -0 \\ \hline \end{array}$$

$$\begin{array}{r} 3 \\ -0 \\ \hline \end{array}$$

$$\begin{array}{r} 4 \\ -0 \\ \hline \end{array}$$

$$\begin{array}{r} 5 \\ -0 \\ \hline \end{array}$$

$$\begin{array}{r} 6 \\ -0 \\ \hline \end{array}$$

$$\begin{array}{r} 7 \\ -0 \\ \hline \end{array}$$

$$\begin{array}{r} 8 \\ -0 \\ \hline \end{array}$$

$$\begin{array}{r} 1 \\ - 1 \\ \hline \end{array}$$

$$\begin{array}{r} 2 \\ - 1 \\ \hline \end{array}$$

$$\begin{array}{r} 3 \\ - 1 \\ \hline \end{array}$$

$$\begin{array}{r} 4 \\ - 1 \\ \hline \end{array}$$

$$\begin{array}{r} 5 \\ - 1 \\ \hline \end{array}$$

$$\begin{array}{r} 6 \\ - 1 \\ \hline \end{array}$$

$$\begin{array}{r} 7 \\ - 1 \\ \hline \end{array}$$

$$\begin{array}{r} 8 \\ - 1 \\ \hline \end{array}$$

$$\begin{array}{r} 2 \\ - 2 \\ \hline \end{array}$$

$$\begin{array}{r} 3 \\ -2 \\ \hline \end{array}$$

$$\begin{array}{r} 4 \\ -2 \\ \hline \end{array}$$

$$\begin{array}{r} 5 \\ -2 \\ \hline \end{array}$$

$$\begin{array}{r} 6 \\ -2 \\ \hline \end{array}$$

$$\begin{array}{r} 7 \\ -2 \\ \hline \end{array}$$

$$\begin{array}{r} 8 \\ -2 \\ \hline \end{array}$$

$$\begin{array}{r} 3 \\ -3 \\ \hline \end{array}$$

$$\begin{array}{r} 4 \\ -3 \\ \hline \end{array}$$

$$\begin{array}{r} 5 \\ -3 \\ \hline \end{array}$$

$$\begin{array}{r} 6 \\ -3 \\ \hline \end{array}$$

$$\begin{array}{r} 7 \\ -3 \\ \hline \end{array}$$

$$\begin{array}{r} 8 \\ -3 \\ \hline \end{array}$$

$$\begin{array}{r} 4 \\ -4 \\ \hline \end{array}$$

$$\begin{array}{r} 5 \\ -4 \\ \hline \end{array}$$

$$\begin{array}{r} 6 \\ -4 \\ \hline \end{array}$$

$$\begin{array}{r} 7 \\ -4 \\ \hline \end{array}$$

$$\begin{array}{r} 8 \\ -4 \\ \hline \end{array}$$

$$\begin{array}{r} 5 \\ -5 \\ \hline \end{array}$$

$$\begin{array}{r} 6 \\ -5 \\ \hline \end{array}$$

$$\begin{array}{r} 7 \\ -5 \\ \hline \end{array}$$

$$\begin{array}{r} 8 \\ -5 \\ \hline \end{array}$$

$$\begin{array}{r} 6 \\ -6 \\ \hline \end{array}$$

$$\begin{array}{r} 7 \\ -6 \\ \hline \end{array}$$

$$\begin{array}{r} 8 \\ -6 \\ \hline \end{array}$$

$$\begin{array}{r} 7 \\ -7 \\ \hline \end{array}$$

$$\begin{array}{r} 8 \\ -7 \\ \hline \end{array}$$

$$\begin{array}{r} 8 \\ -8 \\ \hline \end{array}$$

$$\begin{array}{r} 9 \\ -0 \\ \hline \end{array}$$

$$\begin{array}{r} 10 \\ -0 \\ \hline \end{array}$$

$$\begin{array}{r} 9 \\ -1 \\ \hline \end{array}$$

$$\begin{array}{r} 10 \\ -1 \\ \hline \end{array}$$

$$\begin{array}{r} 9 \\ -2 \\ \hline \end{array}$$

$$\begin{array}{r} 10 \\ -2 \\ \hline \end{array}$$

$$\begin{array}{r} 9 \\ -3 \\ \hline \end{array}$$

$$\begin{array}{r} 10 \\ -3 \\ \hline \end{array}$$

$$\begin{array}{r} 9 \\ -4 \\ \hline \end{array}$$

$$\begin{array}{r} 10 \\ -4 \\ \hline \end{array}$$

$$\begin{array}{r} 9 \\ -5 \\ \hline \end{array}$$

$$\begin{array}{r} 10 \\ -5 \\ \hline \end{array}$$

$$\begin{array}{r} 9 \\ -6 \\ \hline \end{array}$$

$$\begin{array}{r} 10 \\ -6 \\ \hline \end{array}$$

$$\begin{array}{r} 9 \\ -7 \\ \hline \end{array}$$

$$\begin{array}{r} 10 \\ -7 \\ \hline \end{array}$$

$$\begin{array}{r} 9 \\ -8 \\ \hline \end{array}$$

$$\begin{array}{r} 10 \\ -8 \\ \hline \end{array}$$

$$\begin{array}{r} 9 \\ -9 \\ \hline \end{array}$$

$$\begin{array}{r} 10 \\ -9 \\ \hline \end{array}$$

$$\begin{array}{r} 10 \\ -10 \\ \hline \end{array}$$

$$\begin{array}{r} 11 \\ -1 \\ \hline \end{array}$$

$$\begin{array}{r} 11 \\ -2 \\ \hline \end{array}$$

$$\begin{array}{r} 12 \\ -2 \\ \hline \end{array}$$

$$\begin{array}{r} 11 \\ -3 \\ \hline \end{array}$$

$$\begin{array}{r} 12 \\ -3 \\ \hline \end{array}$$

$$\begin{array}{r} 11 \\ -4 \\ \hline \end{array}$$

$$\begin{array}{r} 12 \\ -4 \\ \hline \end{array}$$

$$\begin{array}{r} 11 \\ -5 \\ \hline \end{array}$$

$$\begin{array}{r} 12 \\ -5 \\ \hline \end{array}$$

$$\begin{array}{r} 11 \\ -6 \\ \hline \end{array}$$

$$\begin{array}{r} 12 \\ -6 \\ \hline \end{array}$$

$$\begin{array}{r} 11 \\ -7 \\ \hline \end{array}$$

$$\begin{array}{r} 12 \\ -7 \\ \hline \end{array}$$

$$\begin{array}{r} 11 \\ -8 \\ \hline \end{array}$$

$$\begin{array}{r} 12 \\ -8 \\ \hline \end{array}$$

$$\begin{array}{r} 11 \\ -9 \\ \hline \end{array}$$

$$\begin{array}{r} 12 \\ -9 \\ \hline \end{array}$$

$$\begin{array}{r} 11 \\ -10 \\ \hline \end{array}$$

$$\begin{array}{r} 12 \\ -10 \\ \hline \end{array}$$

$$\begin{array}{r} 13 \\ -3 \\ \hline \end{array}$$

$$\begin{array}{r} 13 \\ -4 \\ \hline \end{array}$$

$$\begin{array}{r} 14 \\ -4 \\ \hline \end{array}$$

$$\begin{array}{r} 13 \\ -5 \\ \hline \end{array}$$

$$\begin{array}{r} 14 \\ -5 \\ \hline \end{array}$$

$$\begin{array}{r} 13 \\ -6 \\ \hline \end{array}$$

$$\begin{array}{r} 14 \\ -6 \\ \hline \end{array}$$

$$\begin{array}{r} 13 \\ -7 \\ \hline \end{array}$$

$$\begin{array}{r} 14 \\ -7 \\ \hline \end{array}$$

$$\begin{array}{r} 13 \\ -8 \\ \hline \end{array}$$

$$\begin{array}{r} 14 \\ -8 \\ \hline \end{array}$$

$$\begin{array}{r} 13 \\ -9 \\ \hline \end{array}$$

$$\begin{array}{r} 14 \\ -9 \\ \hline \end{array}$$

$$\begin{array}{r} 13 \\ -10 \\ \hline \end{array}$$

$$\begin{array}{r} 14 \\ -10 \\ \hline \end{array}$$

$$\begin{array}{r} 15 \\ -5 \\ \hline \end{array}$$

$$\begin{array}{r} 15 \\ -6 \\ \hline \end{array}$$

$$\begin{array}{r} 16 \\ -6 \\ \hline \end{array}$$

$$\begin{array}{r} 15 \\ -7 \\ \hline \end{array}$$

$$\begin{array}{r} 16 \\ -7 \\ \hline \end{array}$$

$$\begin{array}{r} 17 \\ -7 \\ \hline \end{array}$$

$$\begin{array}{r} 15 \\ -8 \\ \hline \end{array}$$

$$\begin{array}{r} 16 \\ -8 \\ \hline \end{array}$$

$$\begin{array}{r} 17 \\ -8 \\ \hline \end{array}$$

$$\begin{array}{r} 18 \\ -8 \\ \hline \end{array}$$

$$\begin{array}{r} 15 \\ -9 \\ \hline \end{array}$$

$$\begin{array}{r} 16 \\ -9 \\ \hline \end{array}$$

$$\begin{array}{r} 17 \\ -9 \\ \hline \end{array}$$

$$\begin{array}{r} 18 \\ -9 \\ \hline \end{array}$$

$$\begin{array}{r} 15 \\ -10 \\ \hline \end{array}$$

$$\begin{array}{r} 16 \\ -10 \\ \hline \end{array}$$

$$\begin{array}{r} 17 \\ -10 \\ \hline \end{array}$$

$$\begin{array}{r} 18 \\ -10 \\ \hline \end{array}$$

$$\begin{array}{r} 19 \\ -9 \\ \hline \end{array}$$


$$\begin{array}{r} 19 \\ -10 \\ \hline \end{array}$$


$$\begin{array}{r} 20 \\ -10 \\ \hline \end{array}$$















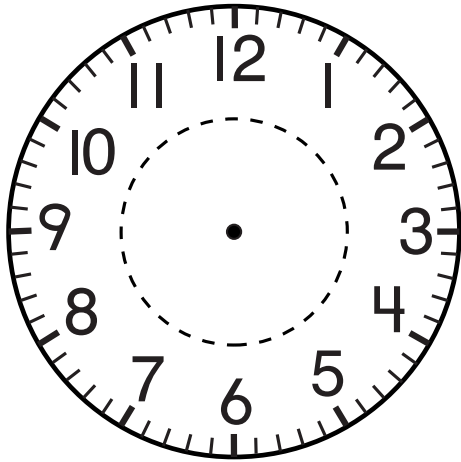




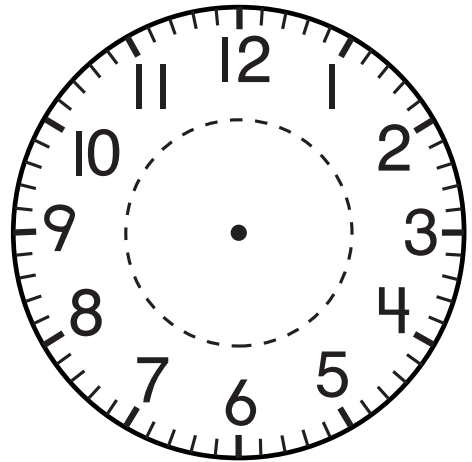





		
		
		
		



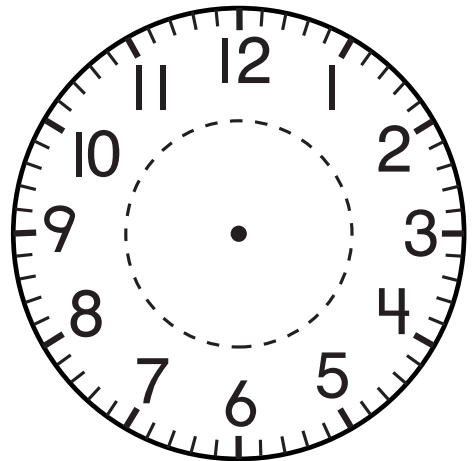
_____ : _____




_____ : _____



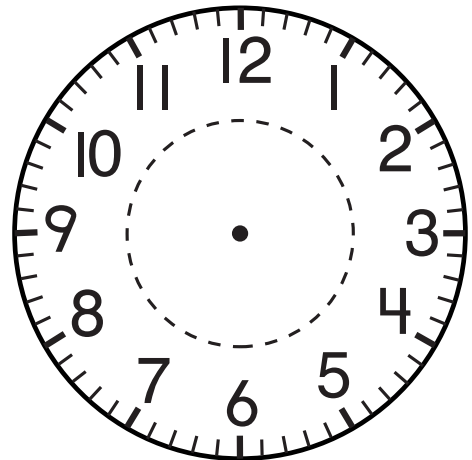
_____ : _____



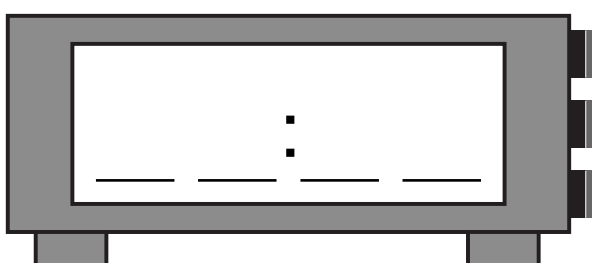
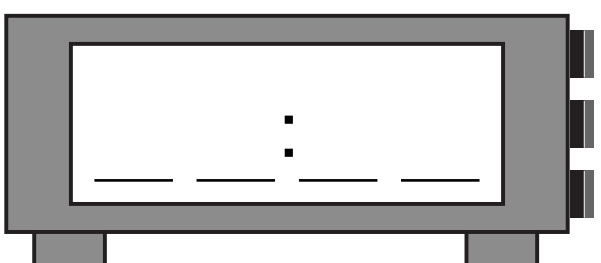
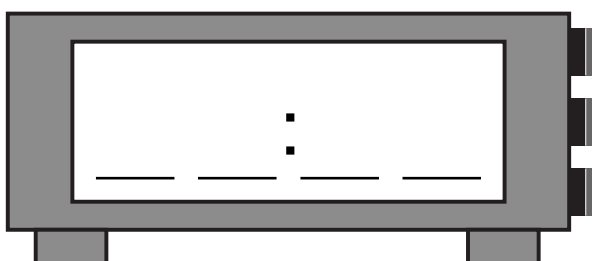
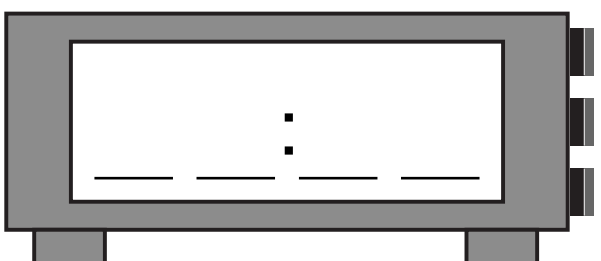
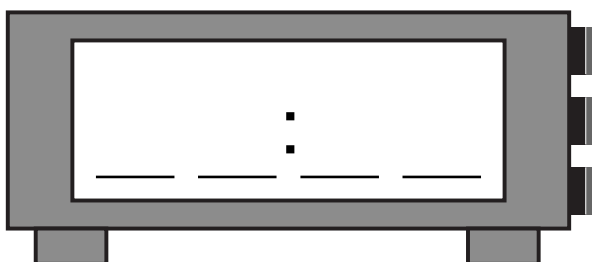
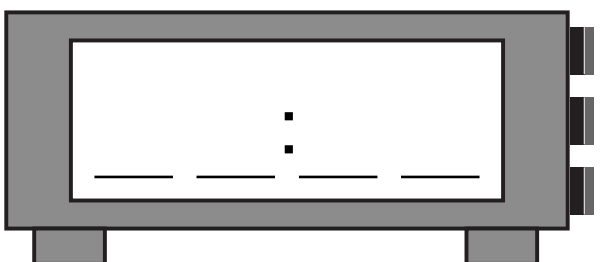
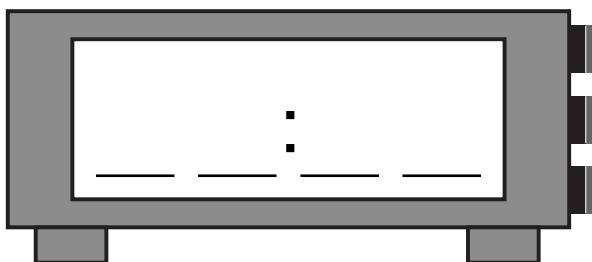
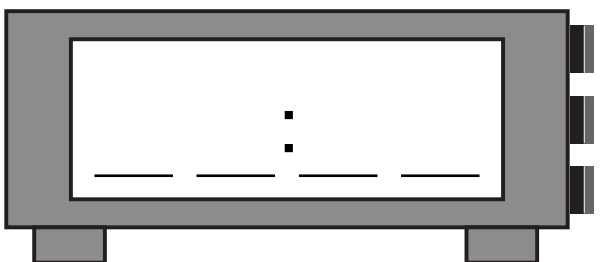
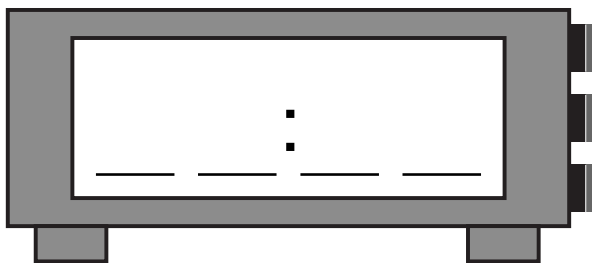
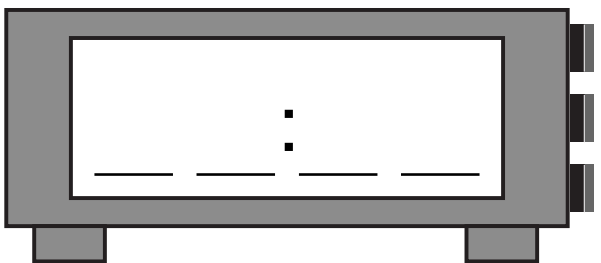
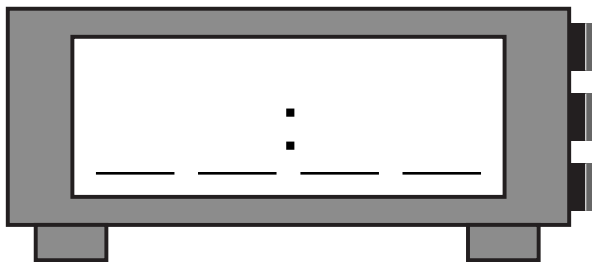
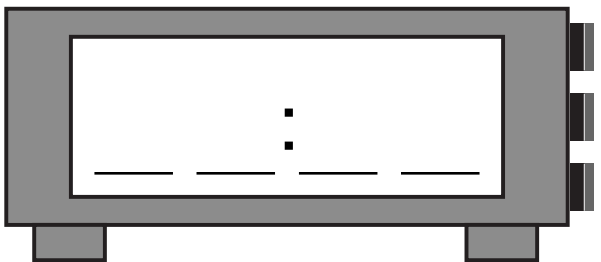
_____ : _____

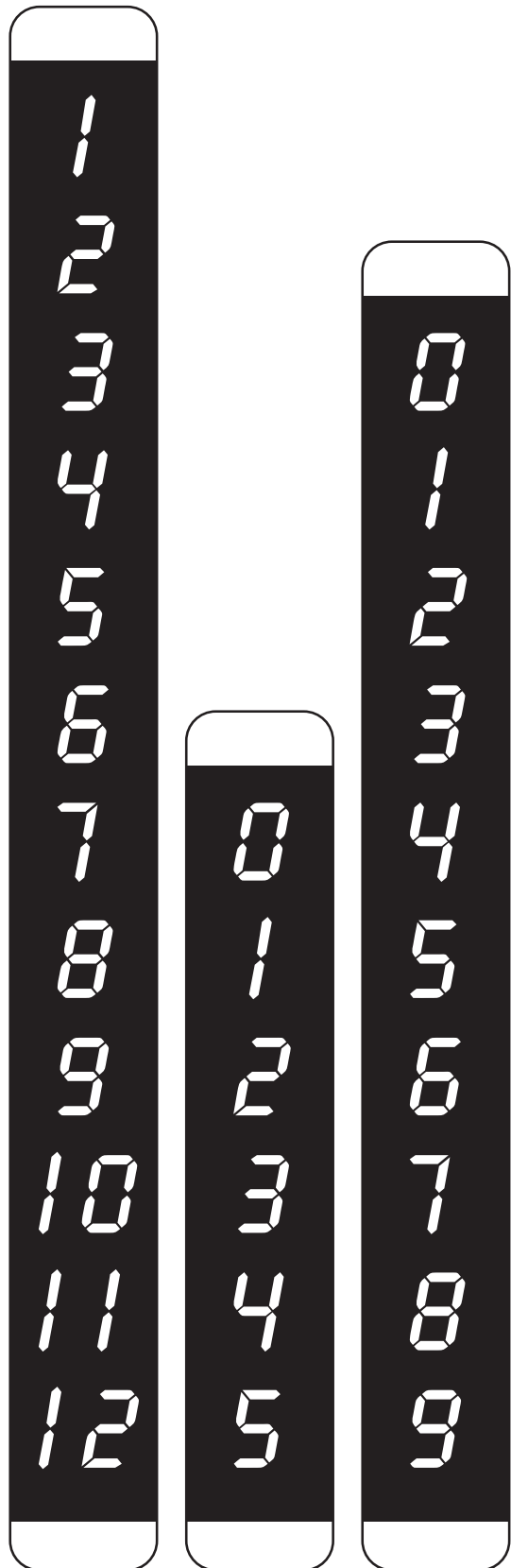
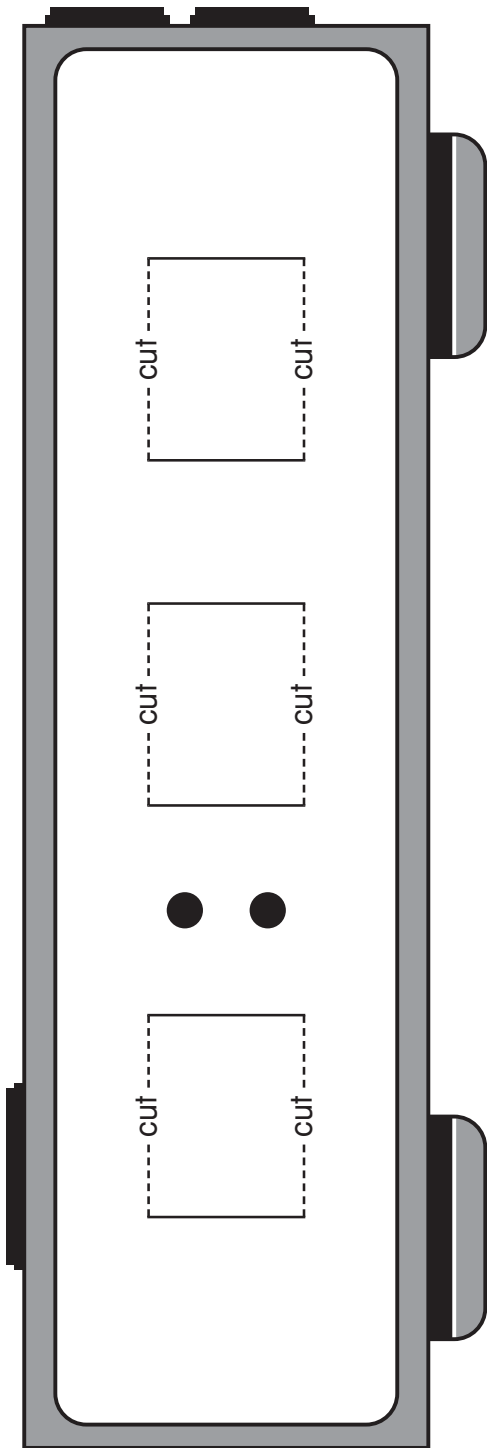


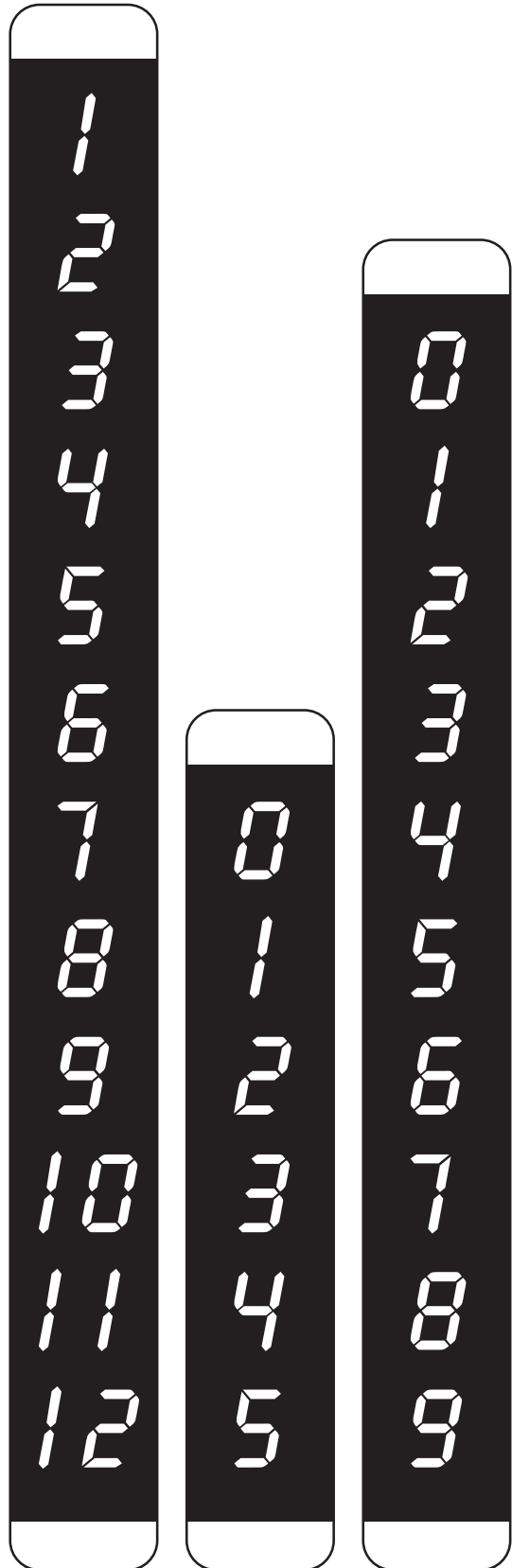
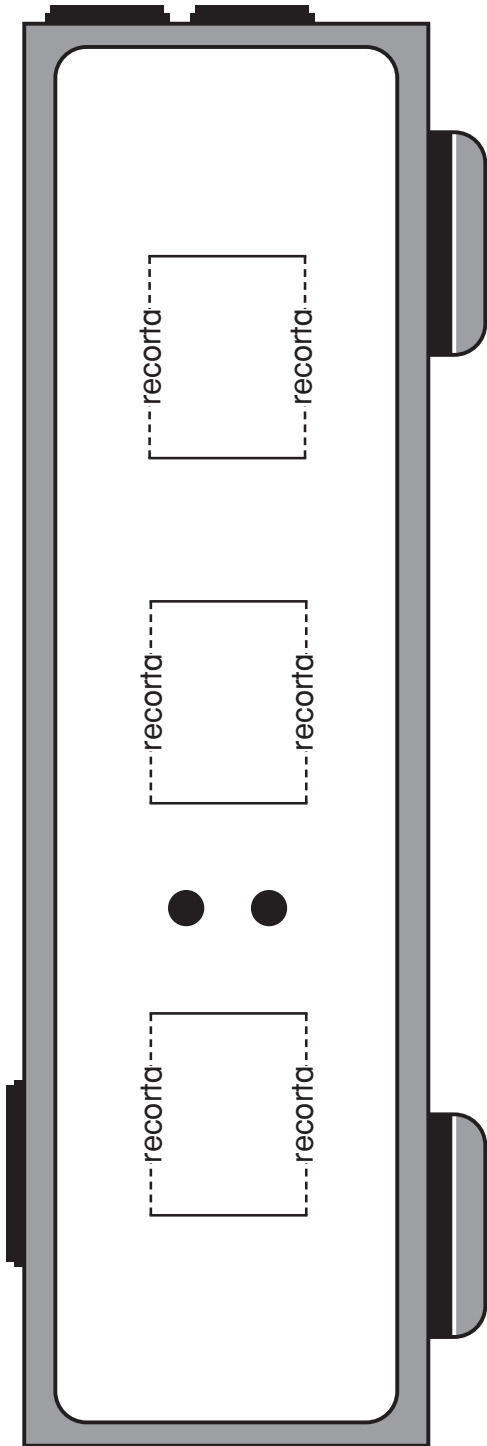
_____ : _____



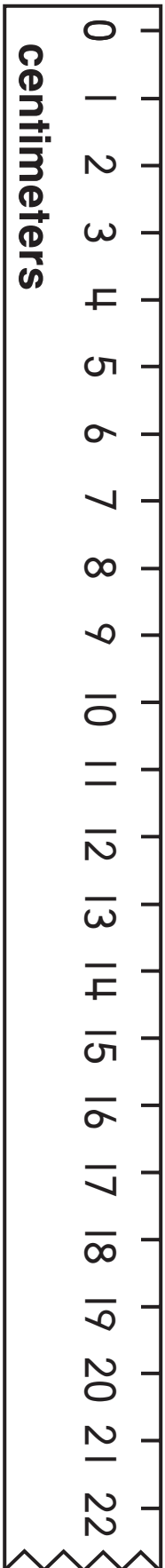
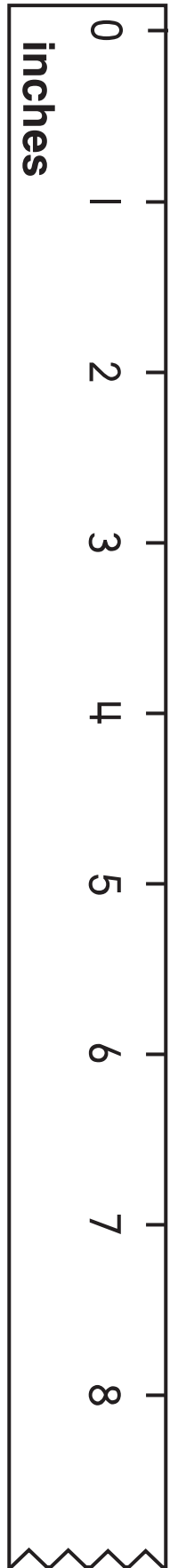
_____ : _____

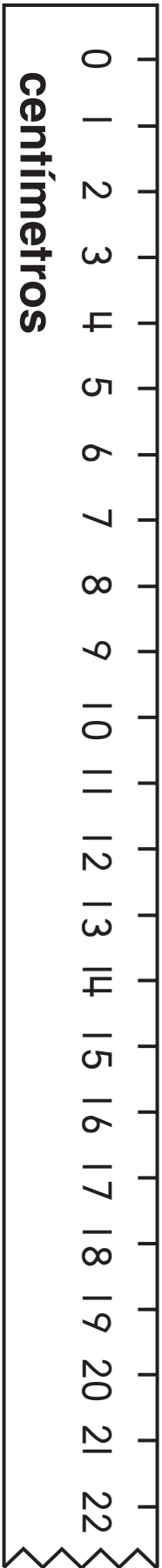
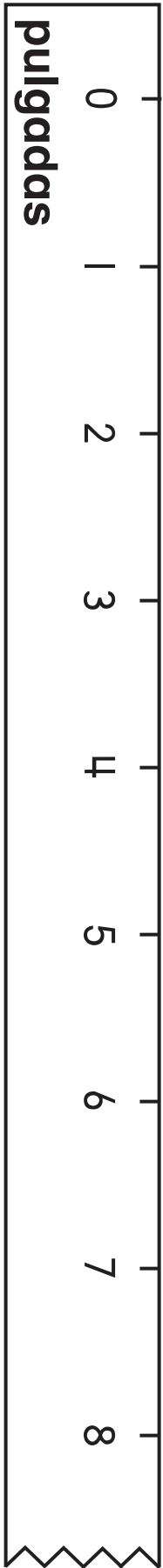







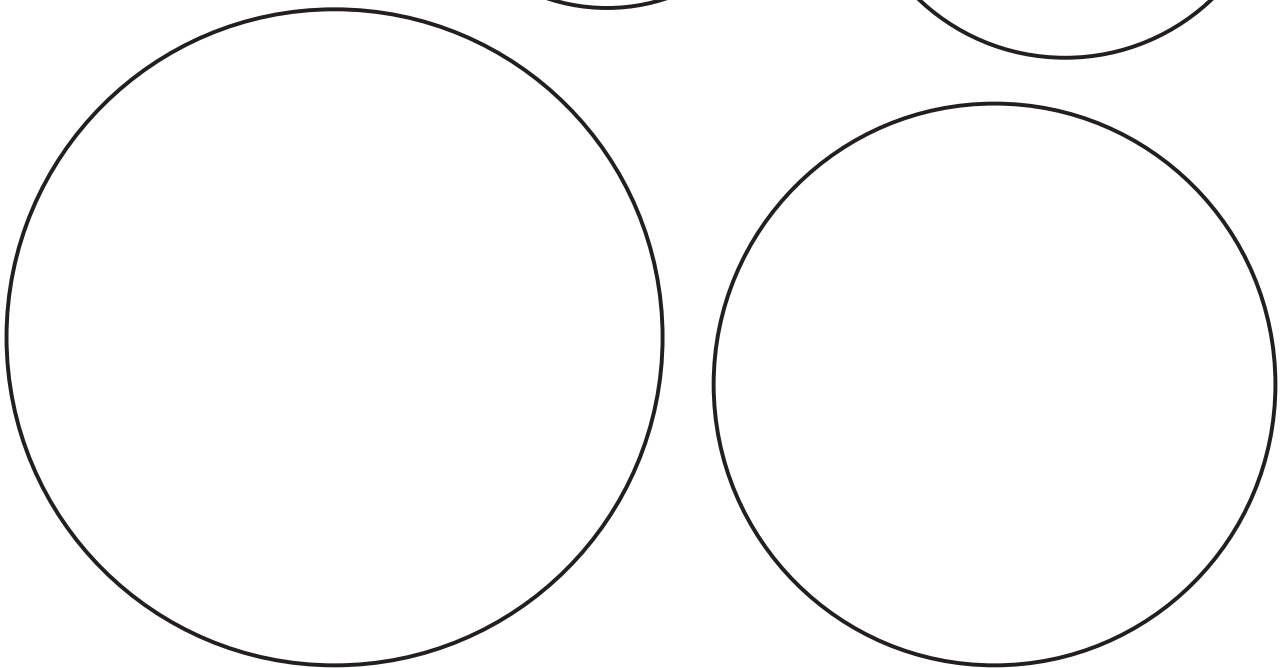

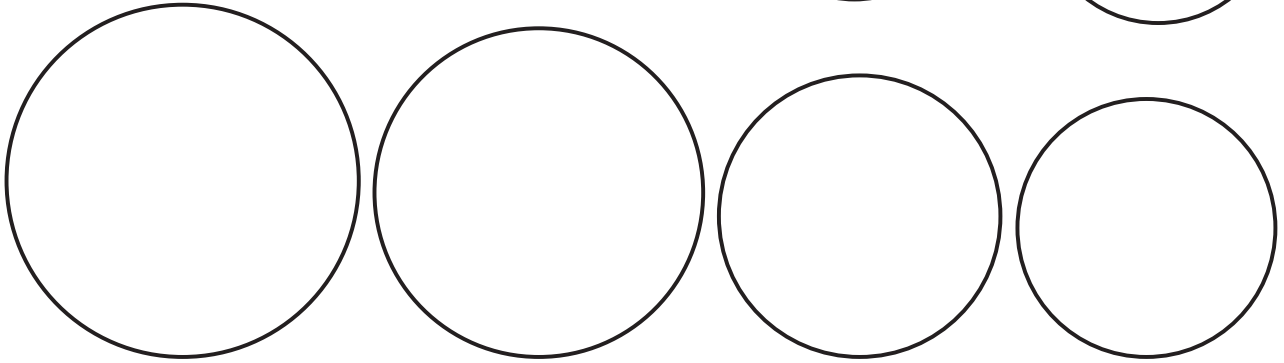


	domingo						
	lunes						
	martes						
	miércoles						
	jueves						
	viernes						
	sábado						




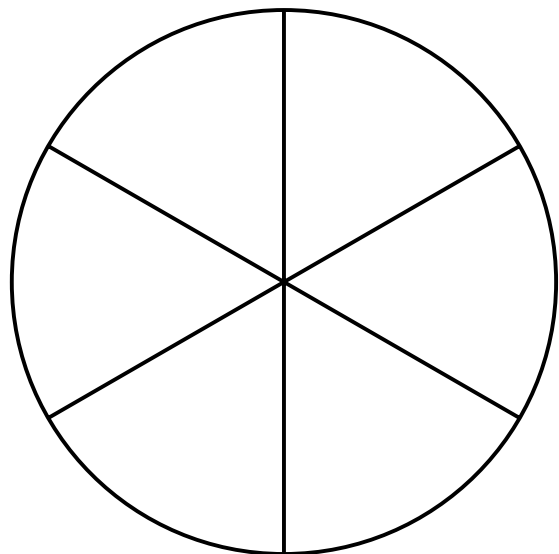
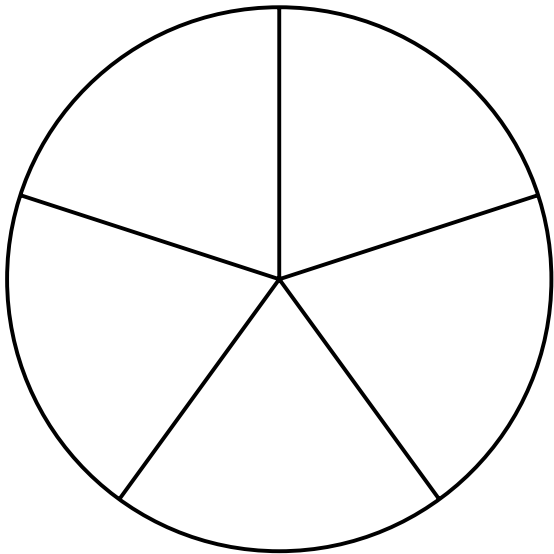
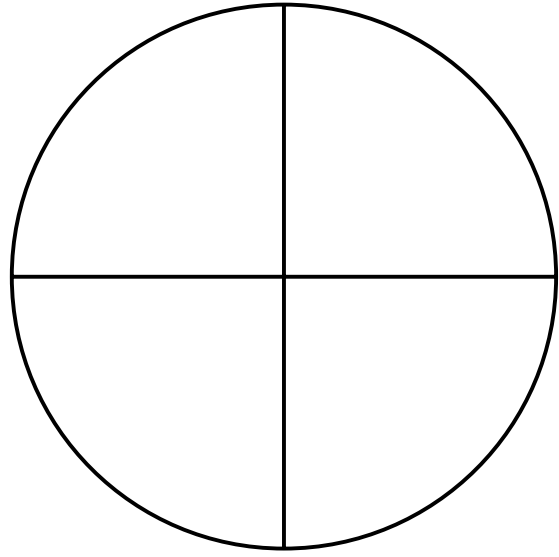
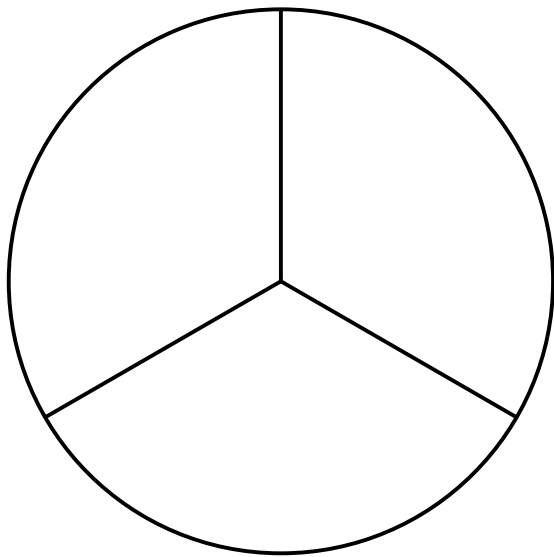
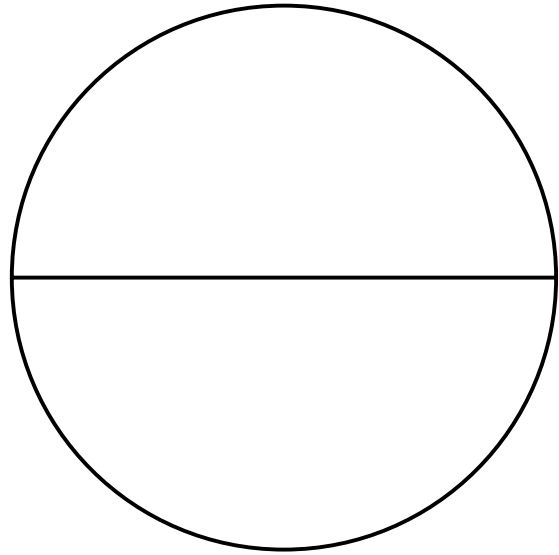



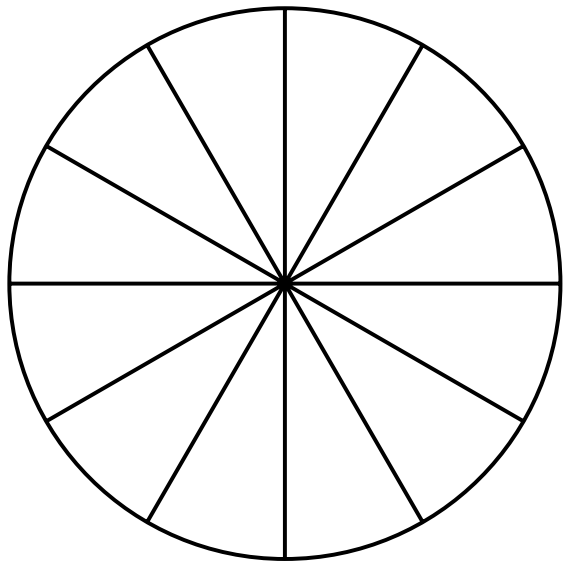
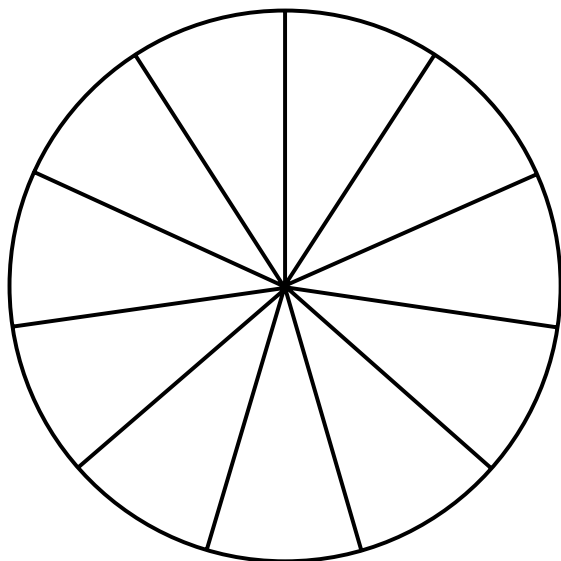
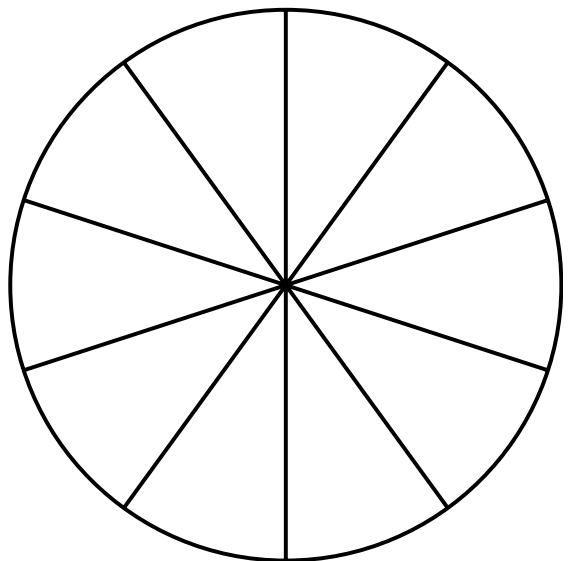
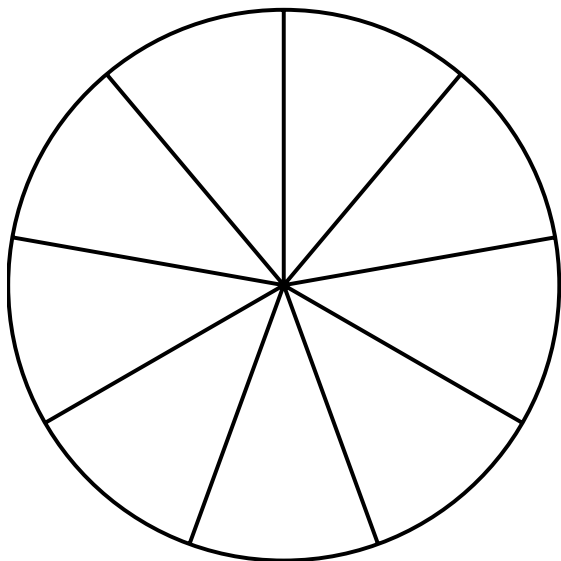
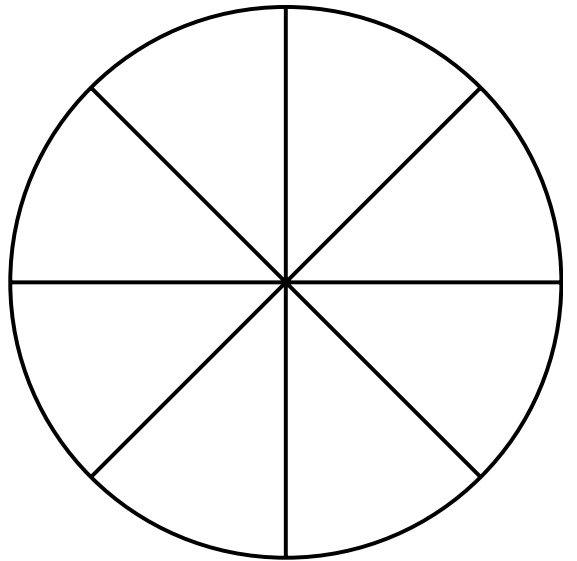
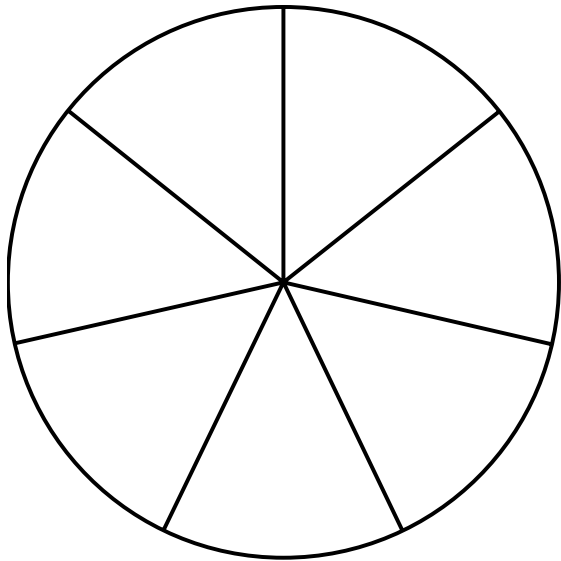




A single vertical rectangular box, completely blank and unpartitioned.A vertical rectangular box divided into 8 equal horizontal sections by 7 horizontal lines.A vertical rectangular box divided into 10 equal horizontal sections by 9 horizontal lines.A vertical rectangular box divided into 12 equal horizontal sections by 11 horizontal lines.A vertical rectangular box divided into 14 equal horizontal sections by 13 horizontal lines.

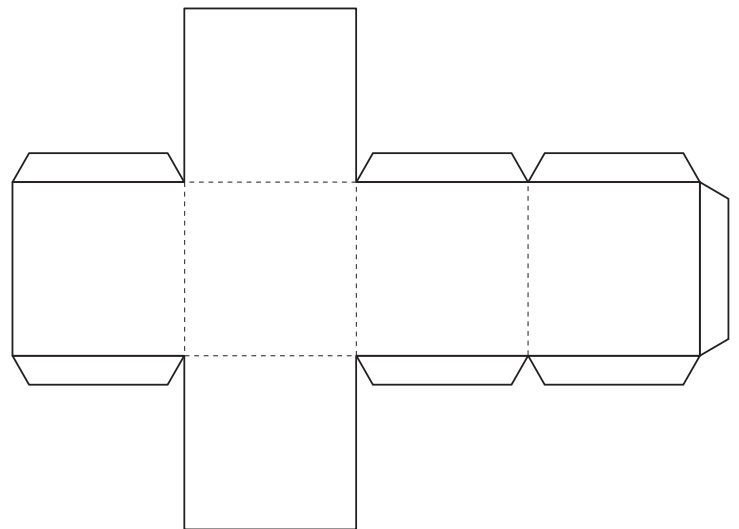
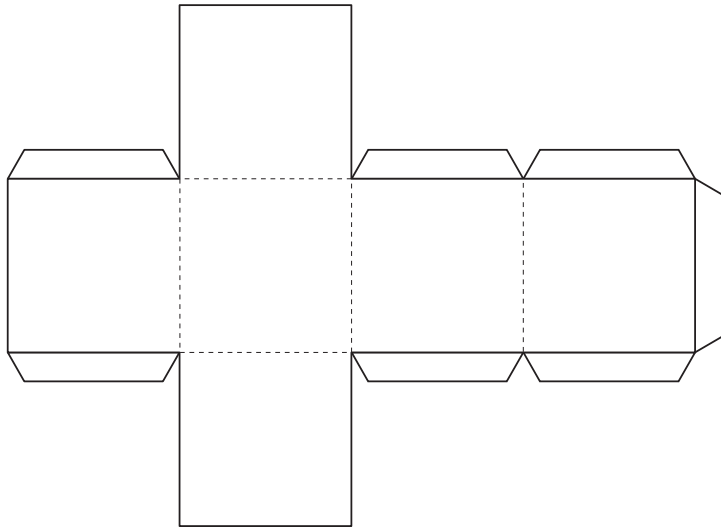
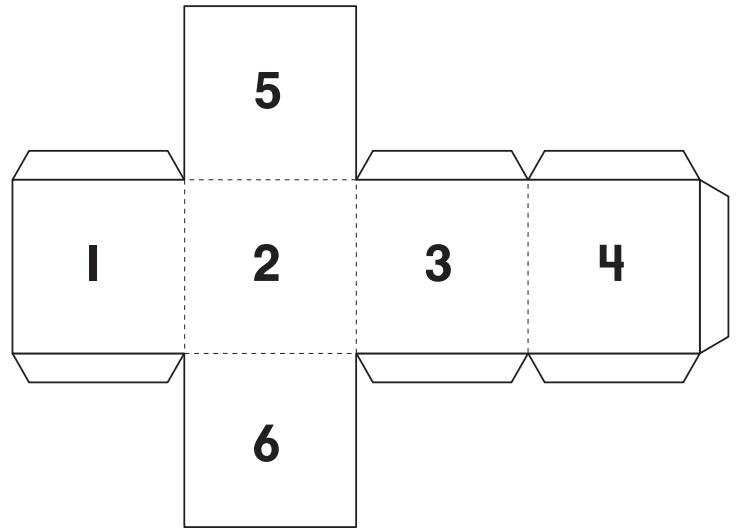
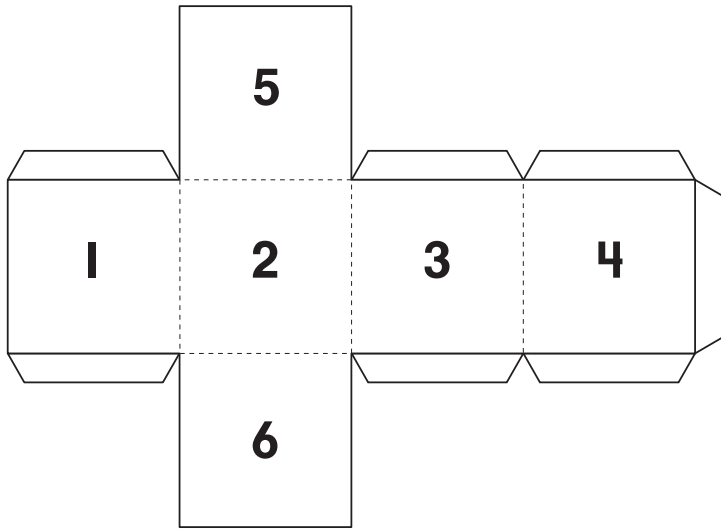



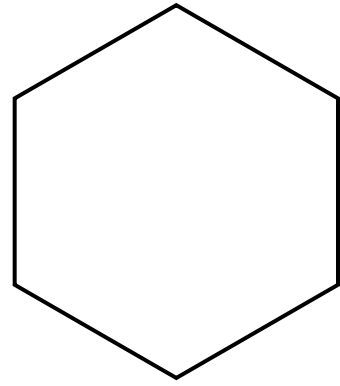

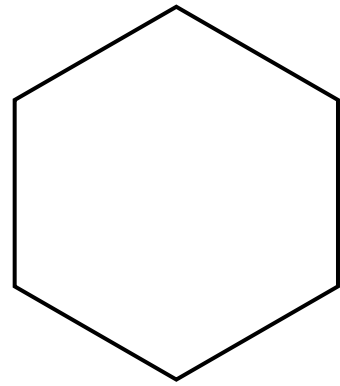
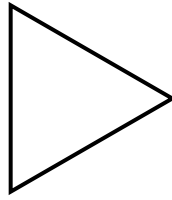
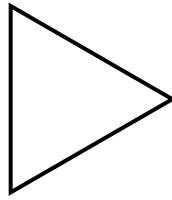
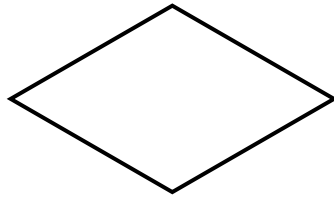
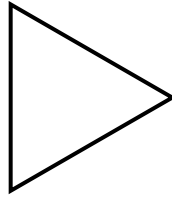
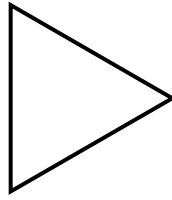
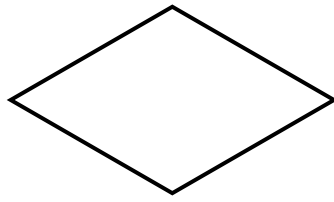
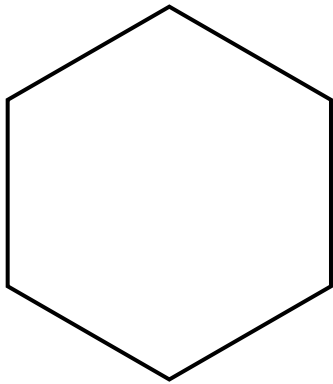
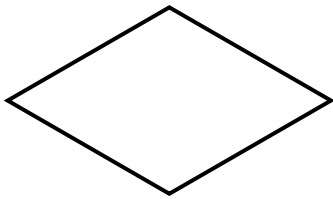
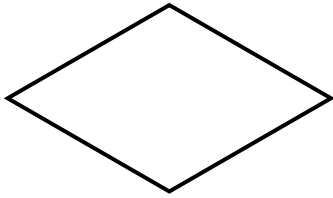
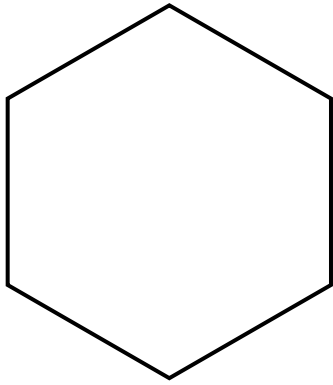
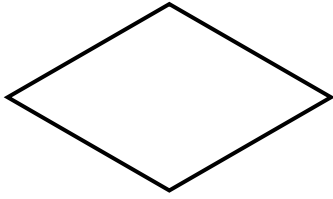
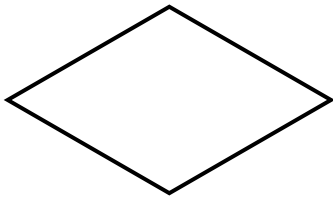


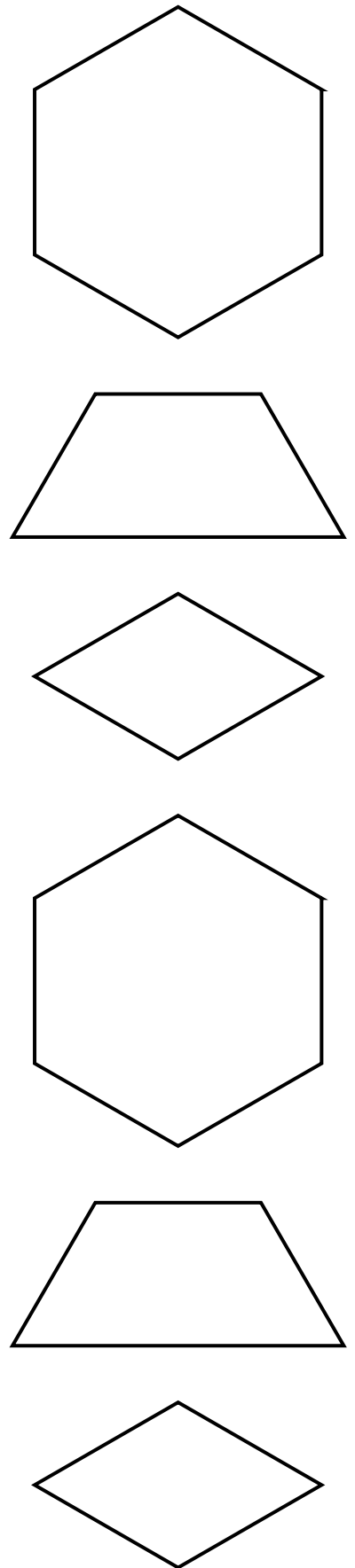
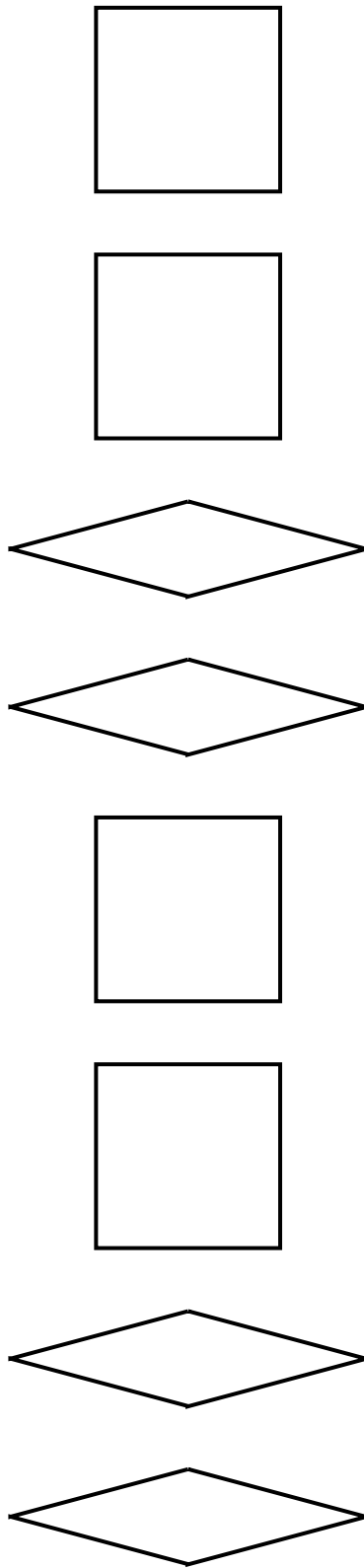
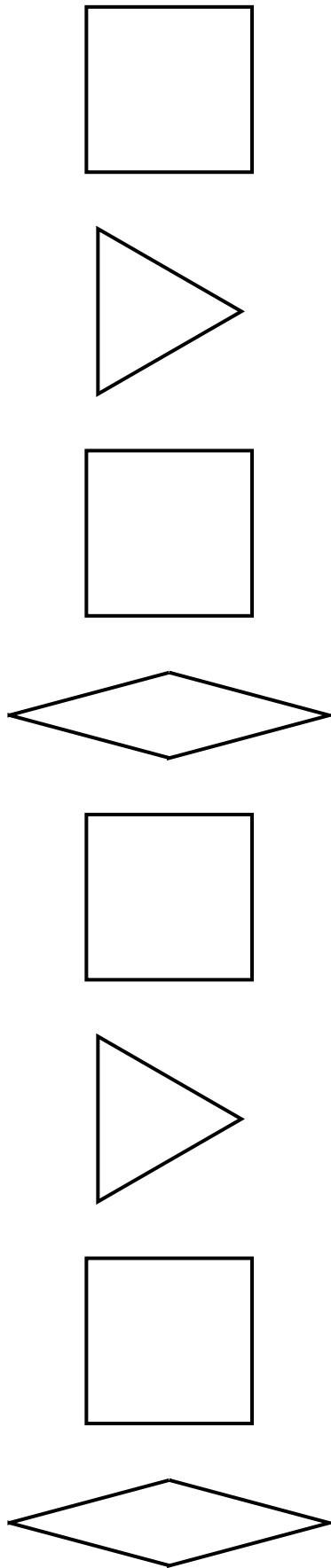




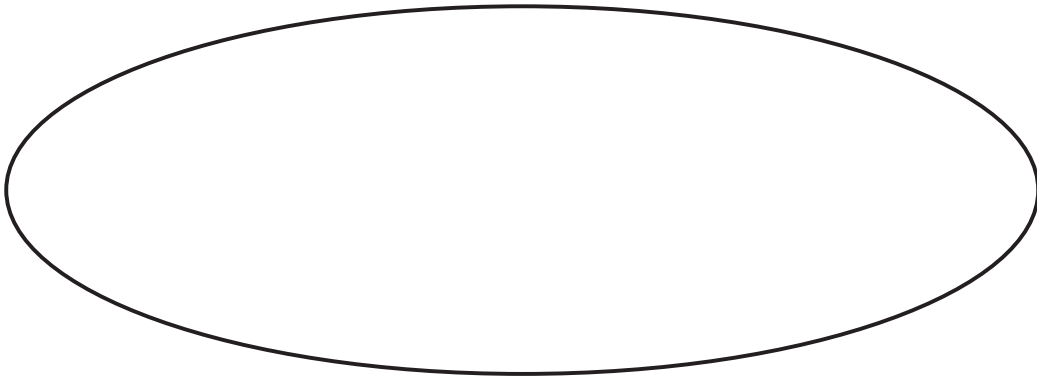
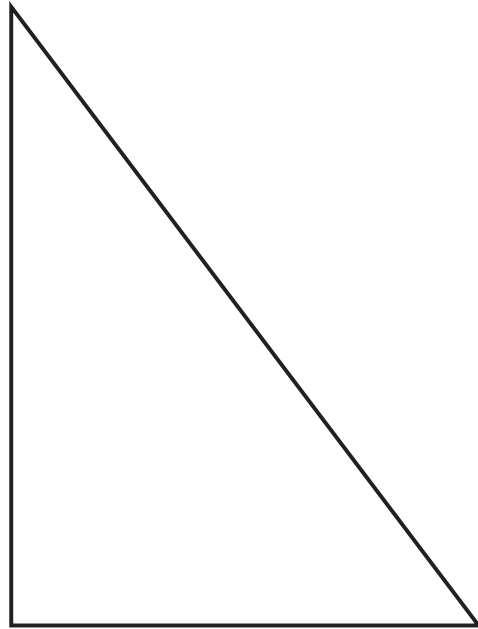




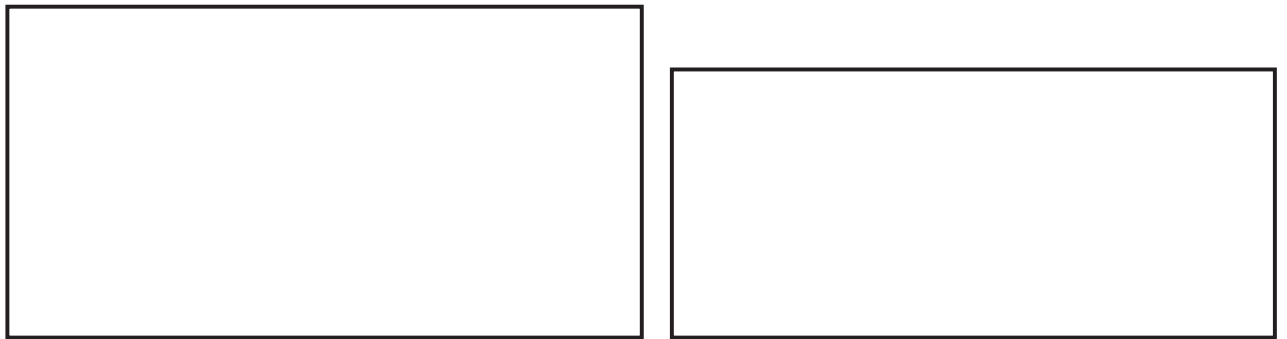
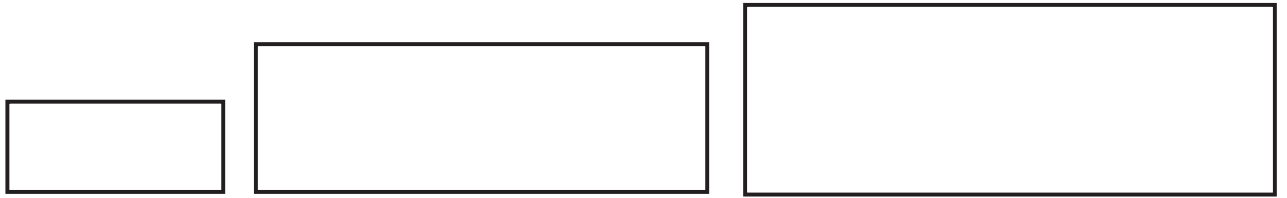
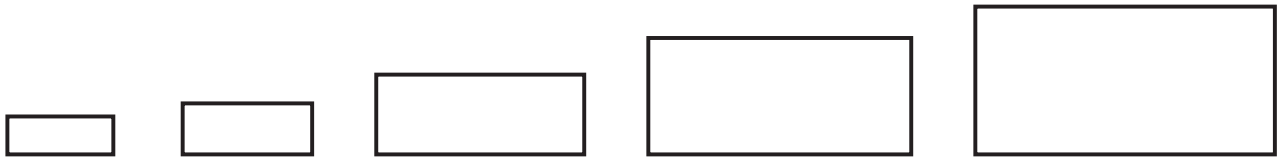



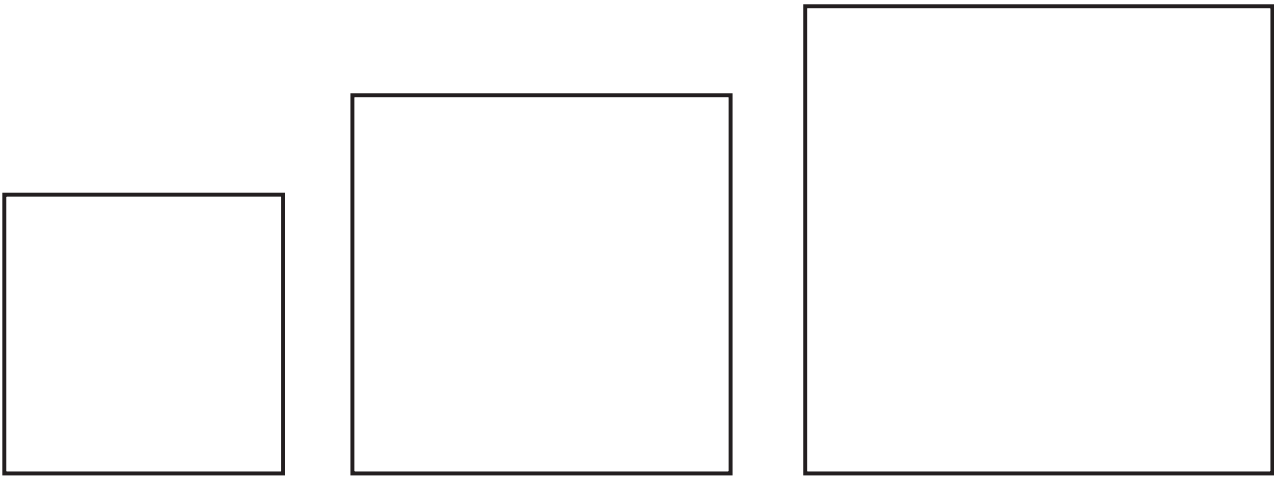
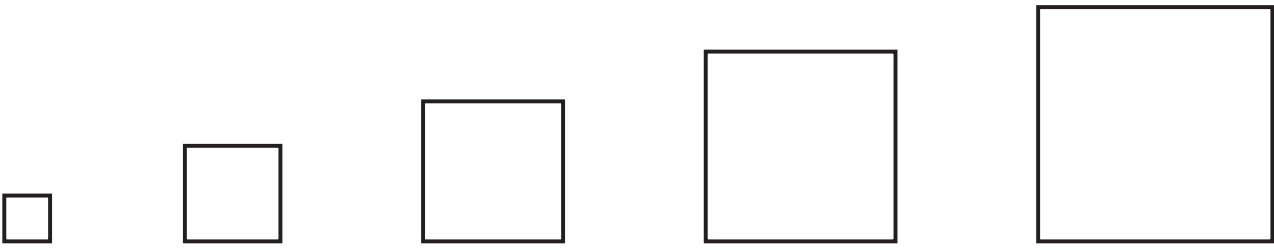


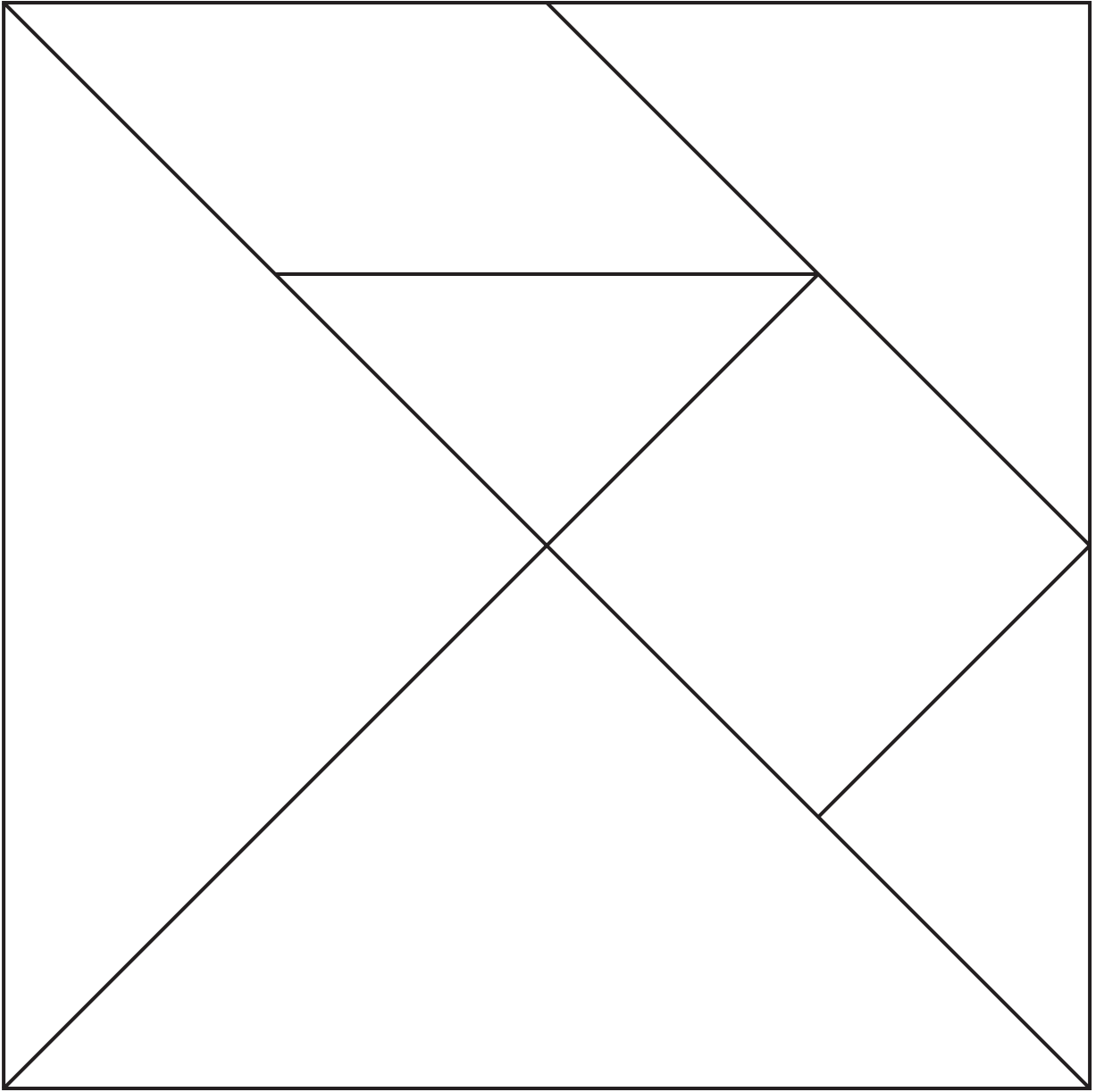


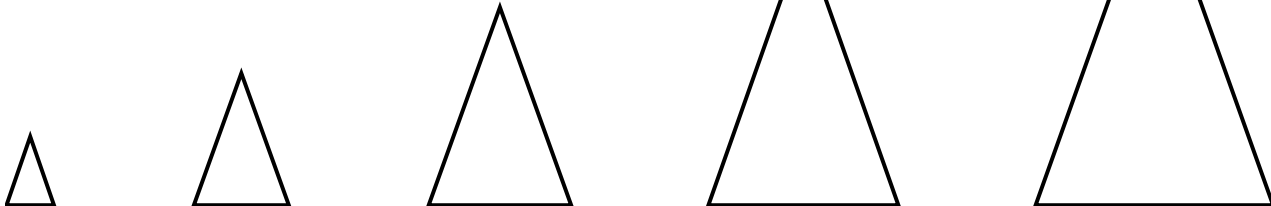
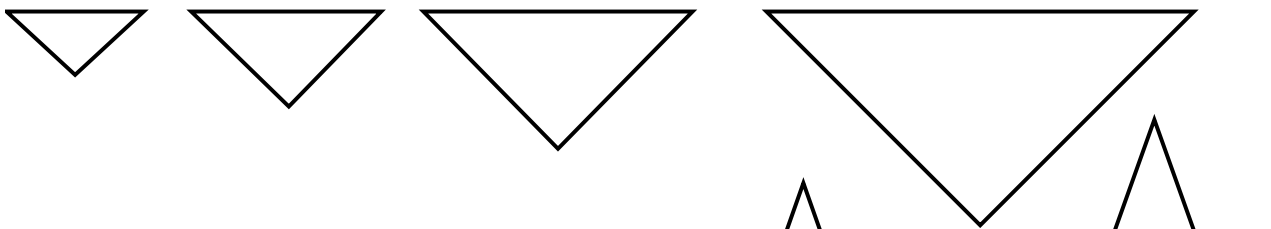
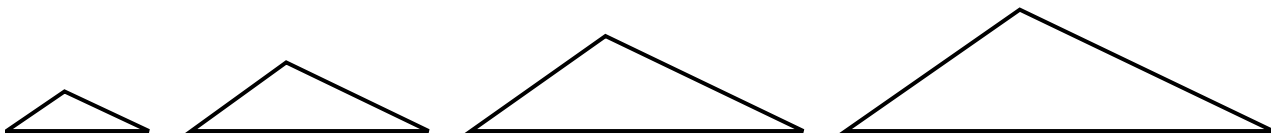
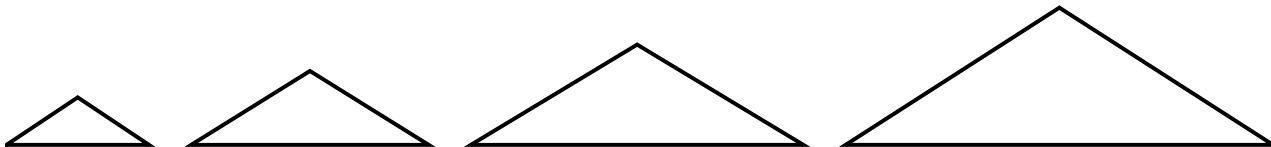
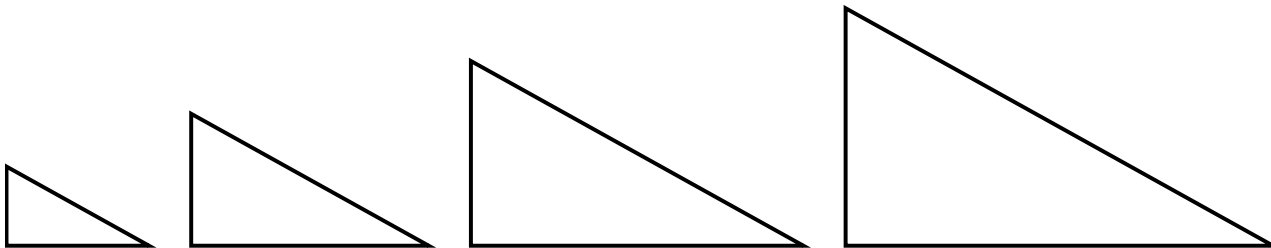
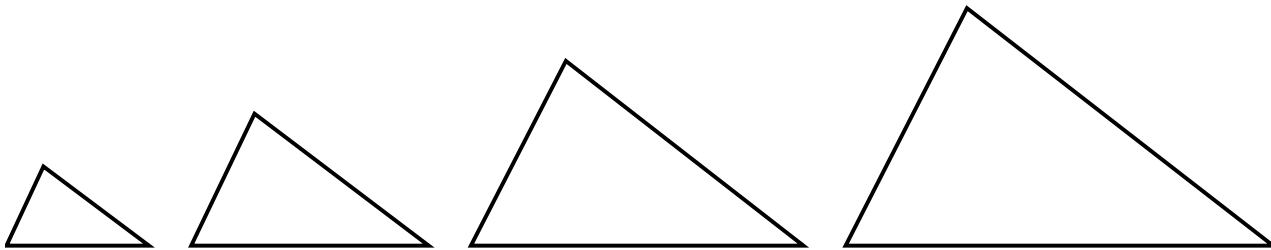
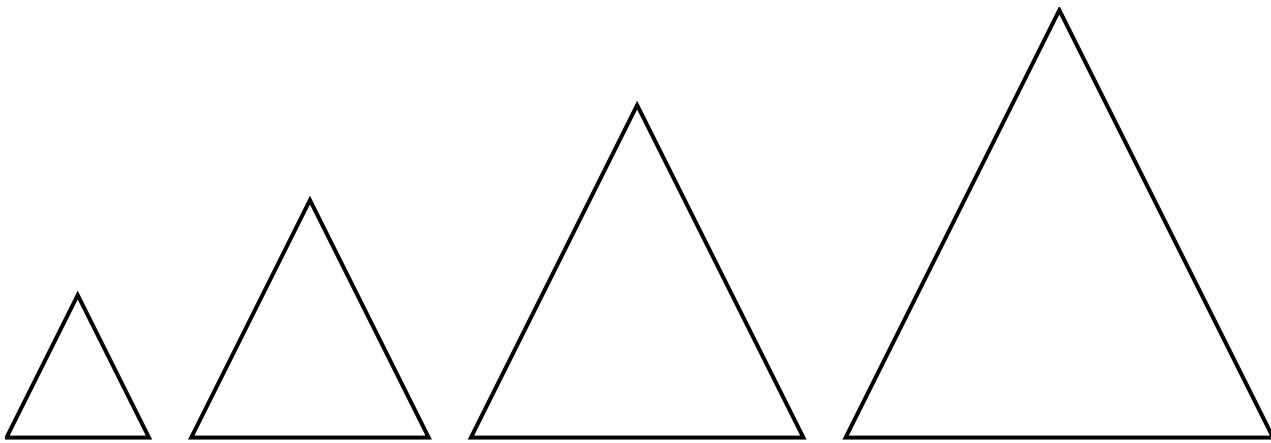





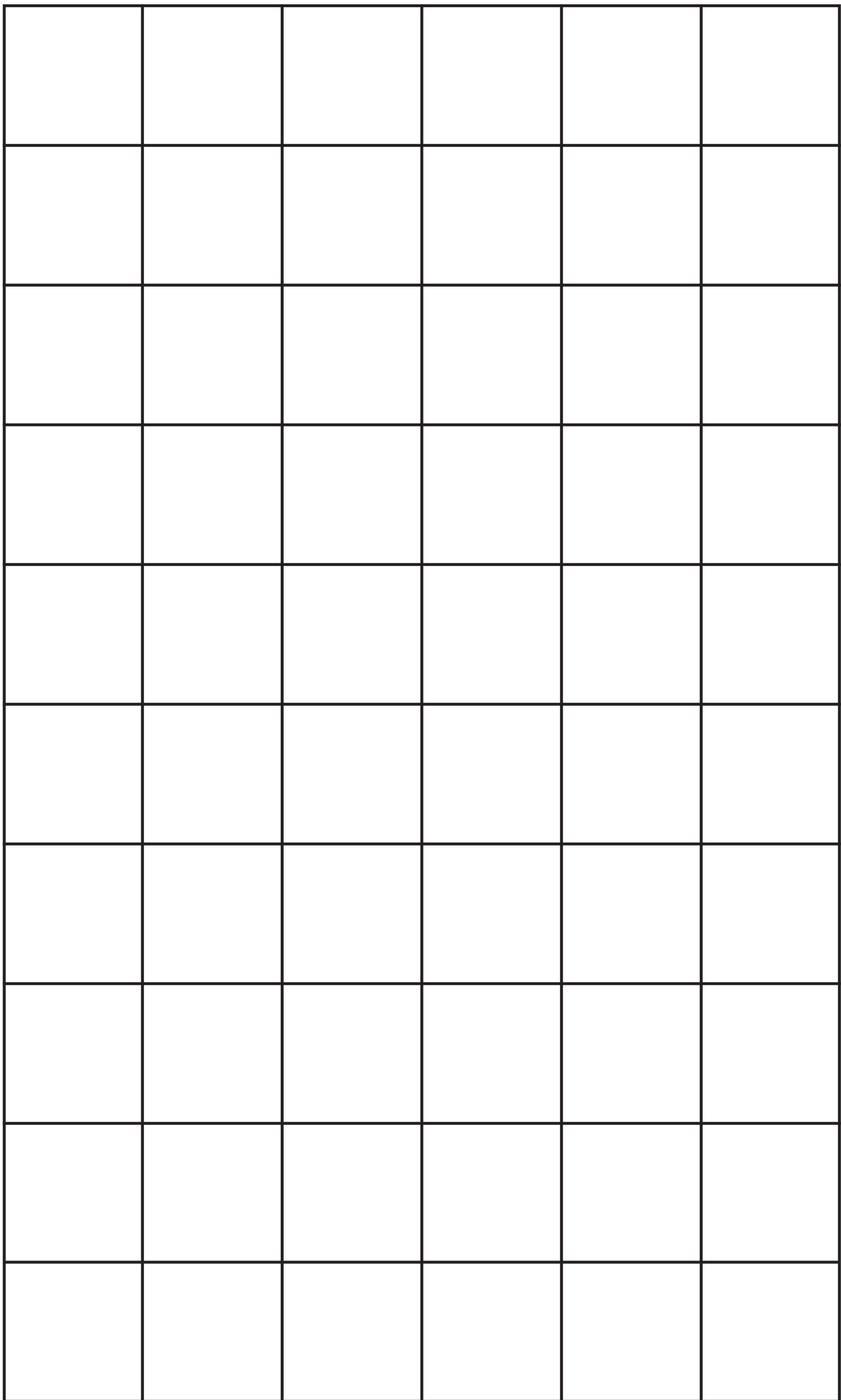





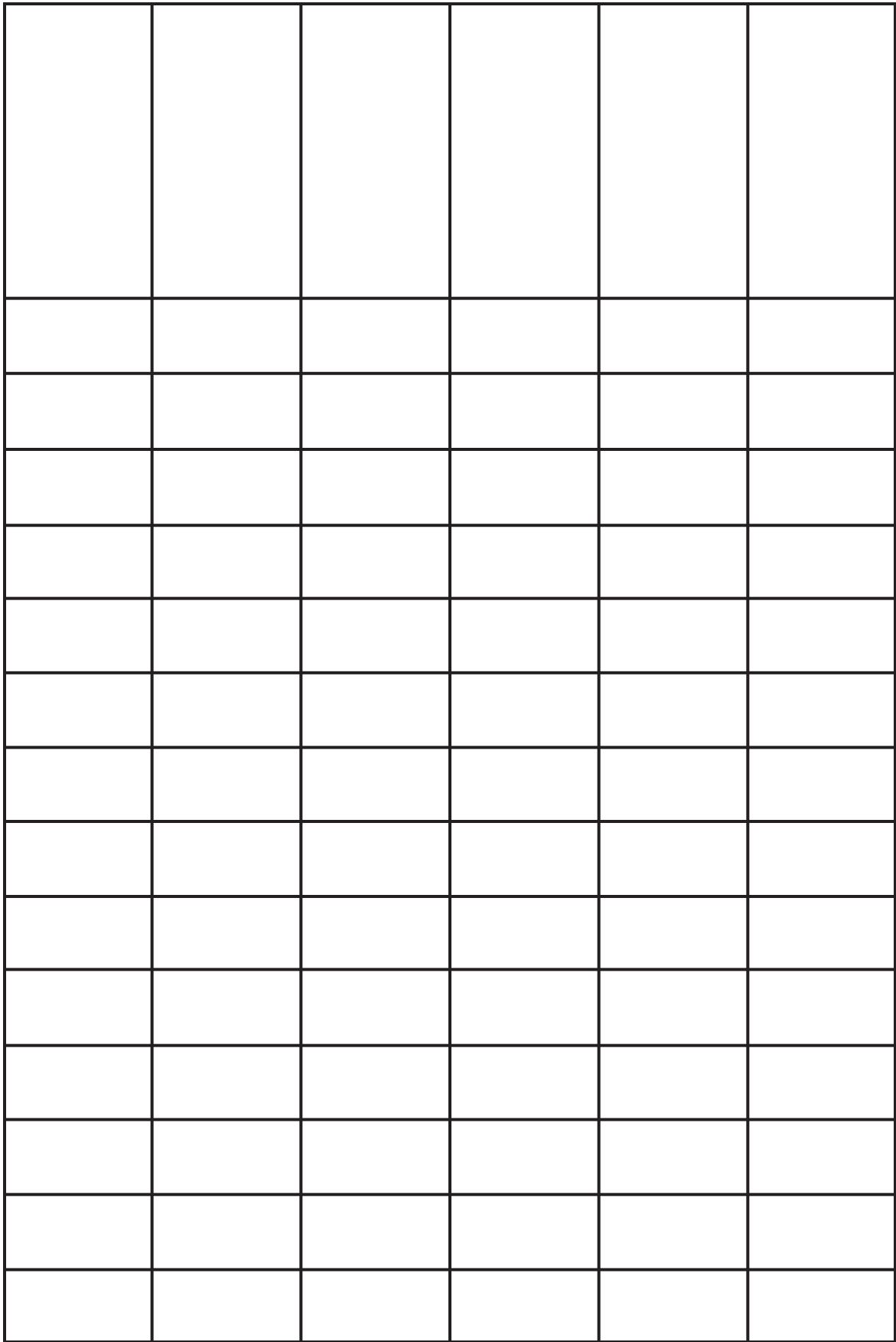


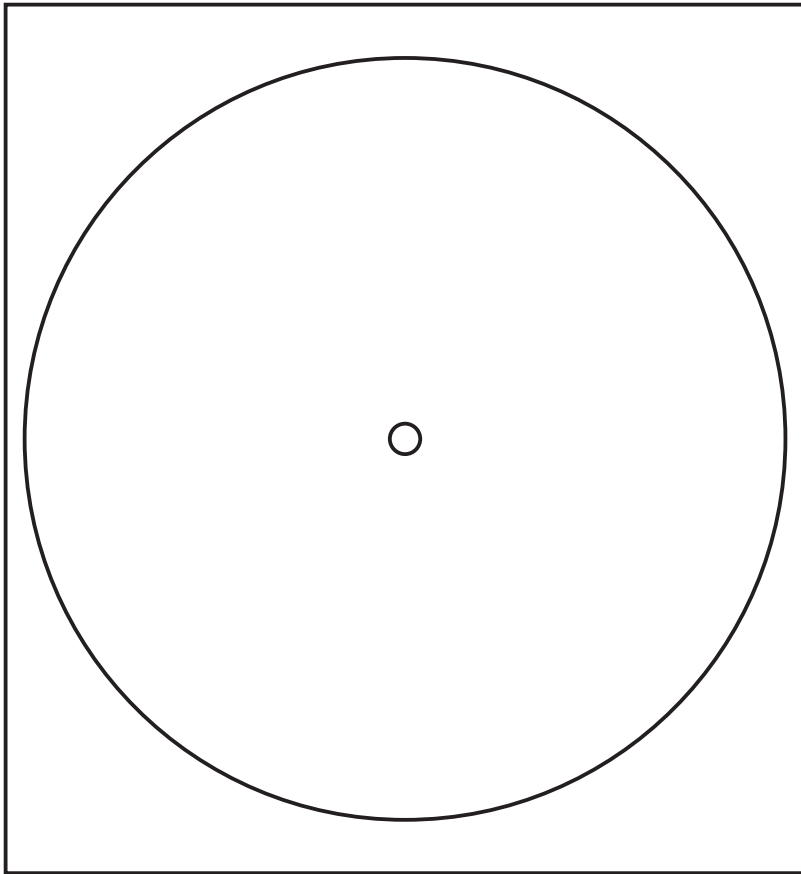












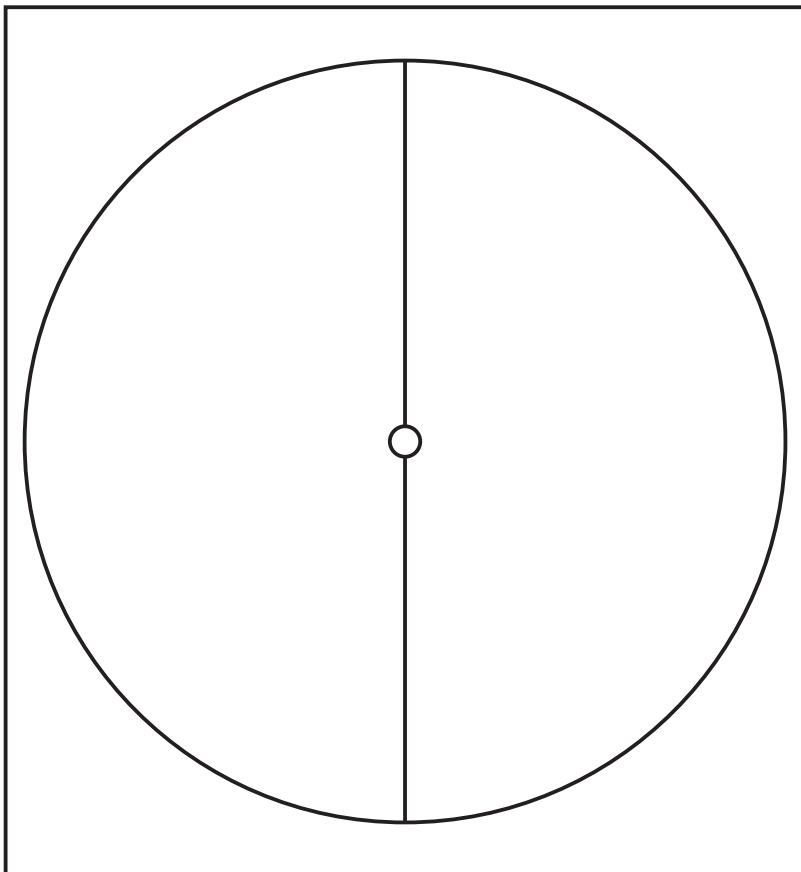
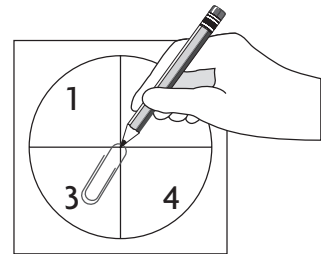
Spinner Tips

How to assemble spinner.

- Glue patterns to tagboard.
- Cut out and attach pointer with a fastener.

Alternative

- Students can use a paper clip and pencil instead.



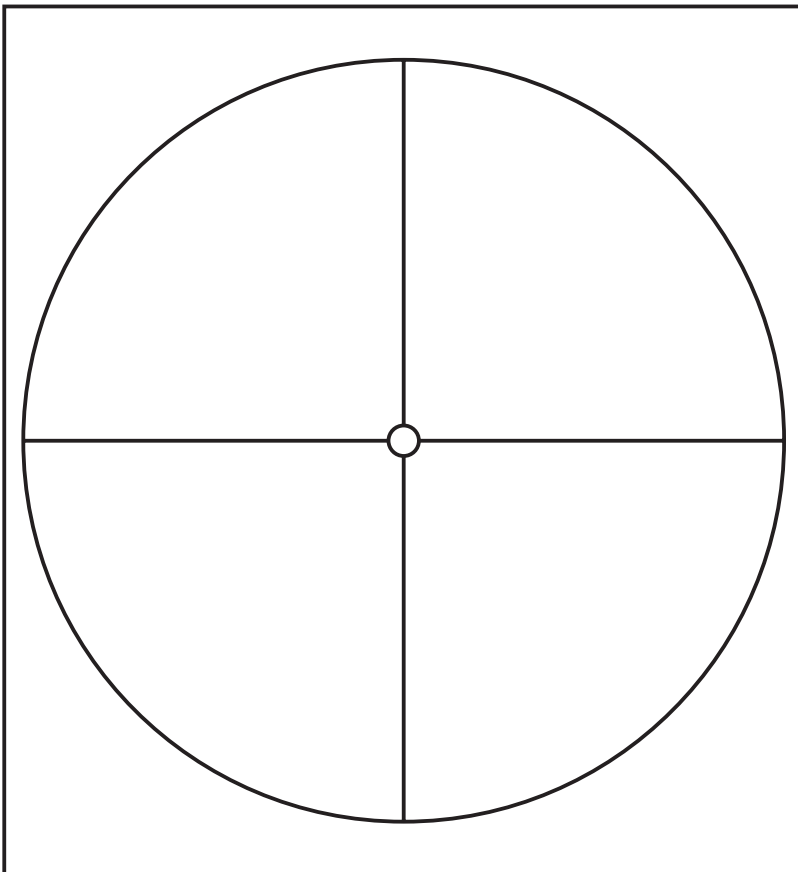
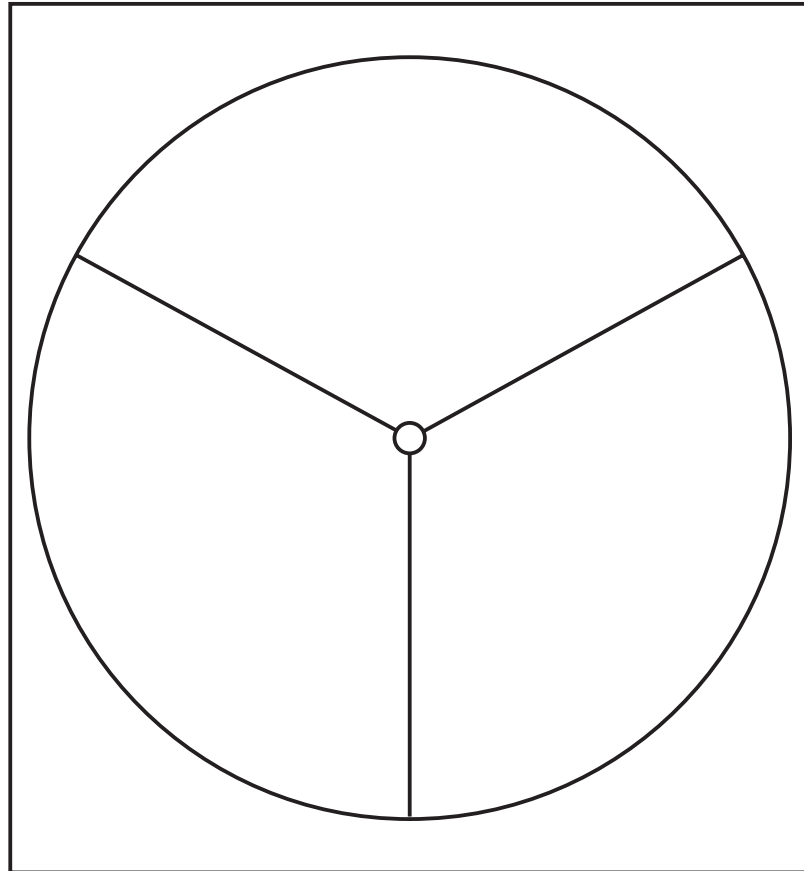
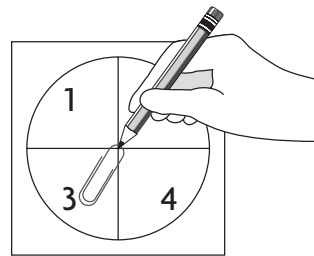
Spinner Tips

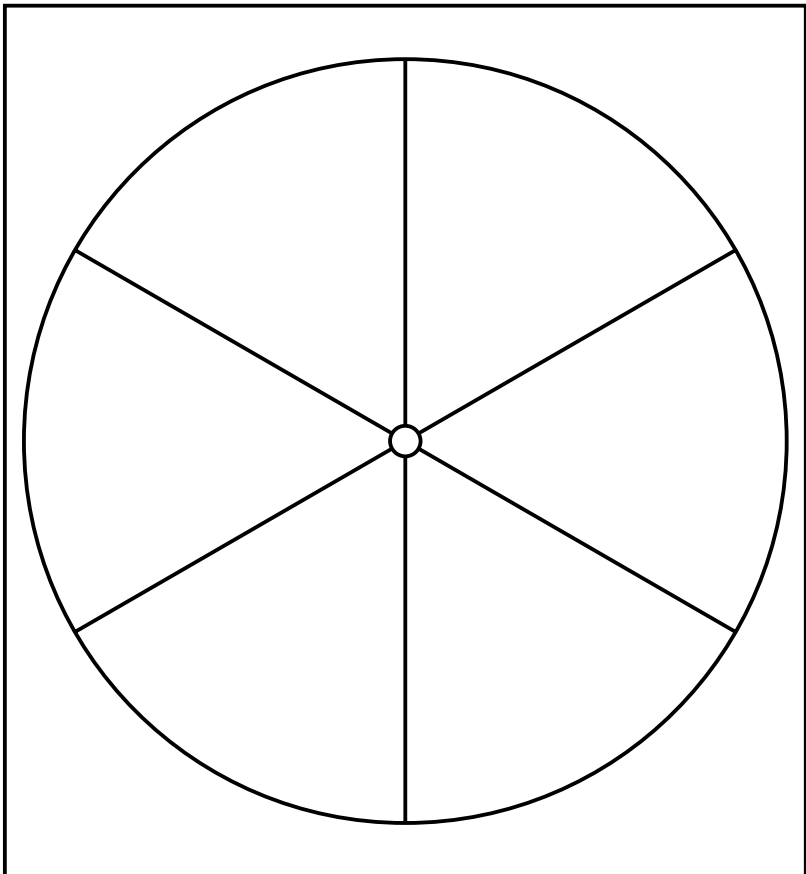
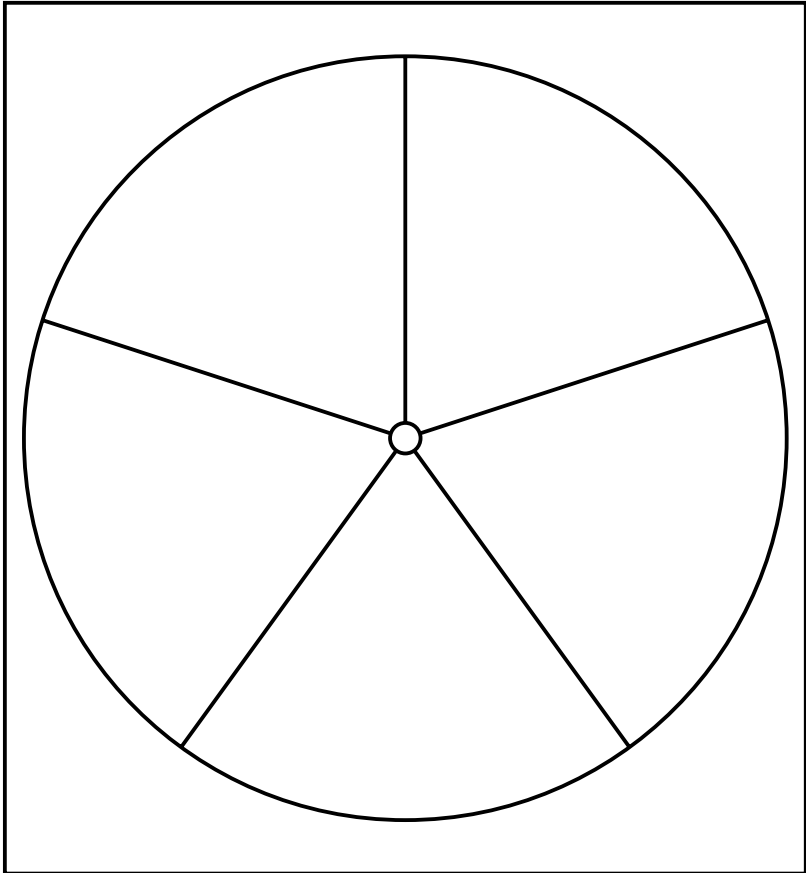
How to assemble spinner.

- Glue patterns to tagboard.
- Cut out and attach pointer with a fastener.

Alternative

- Students can use a paper clip and pencil instead.





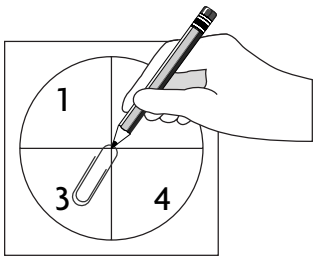
Spinner Tips

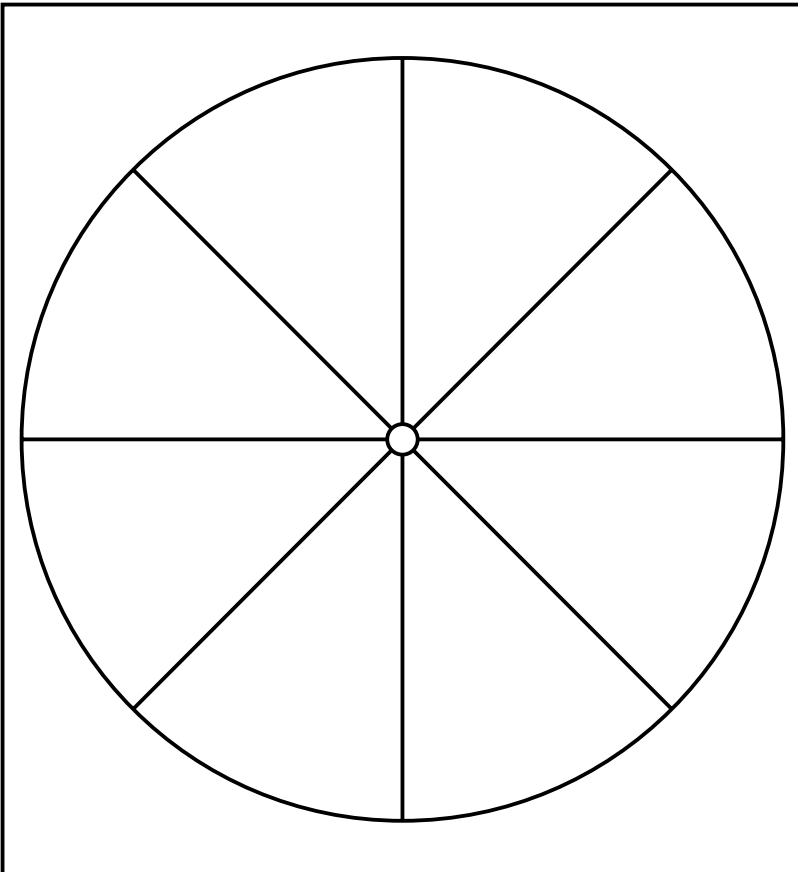
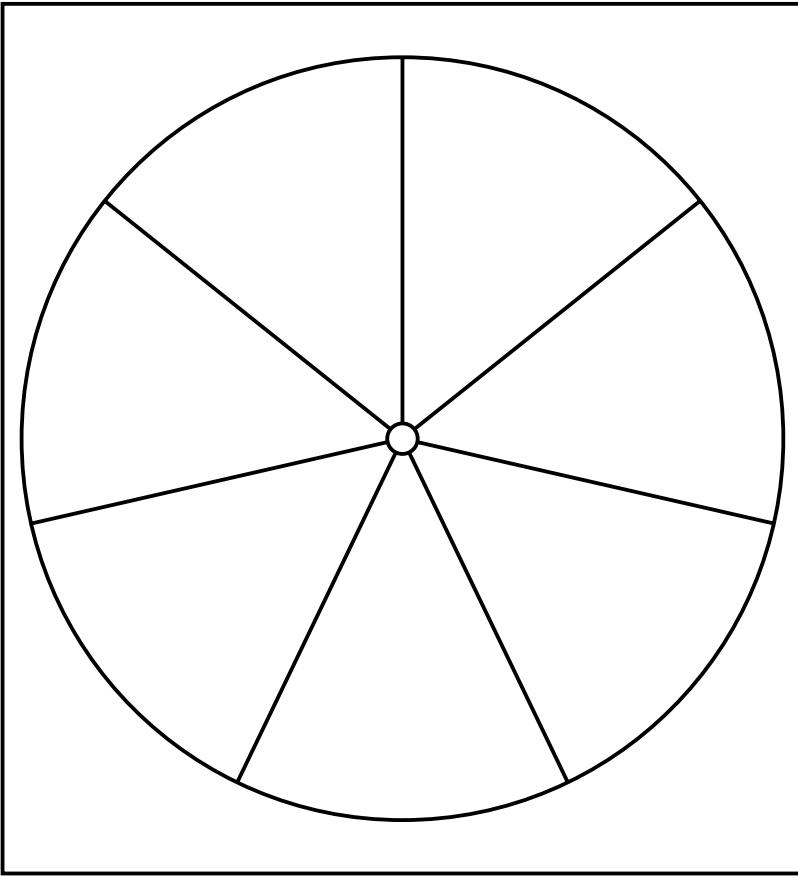
How to assemble spinner.

- Glue patterns to tagboard.
- Cut out and attach pointer with a fastener.

Alternative

- Children can use a paper clip and pencil instead.






Spinner Tips

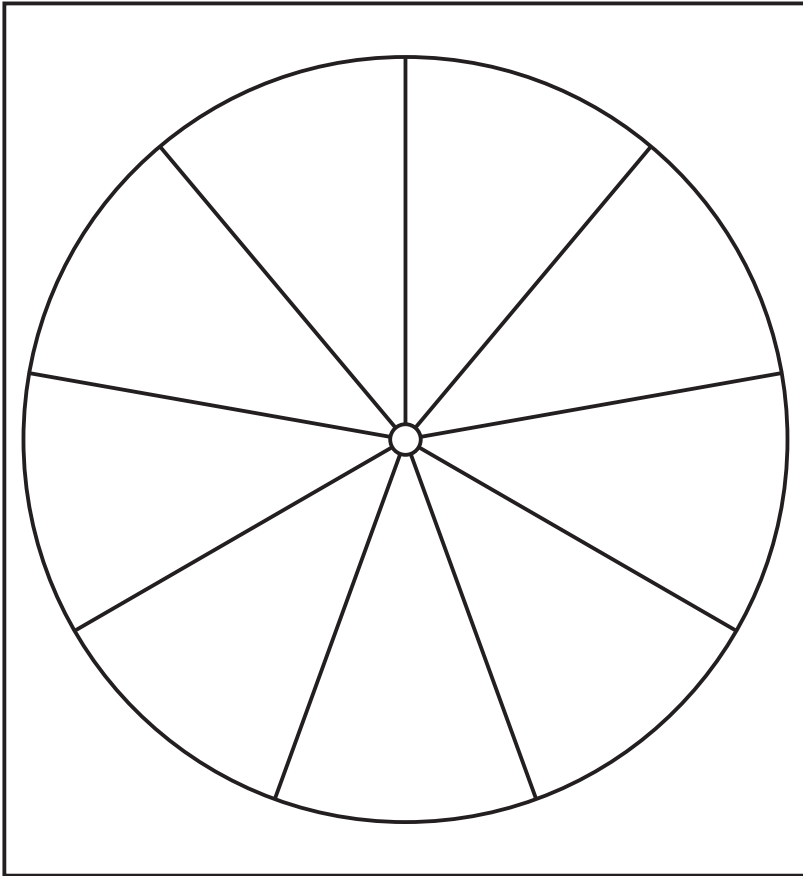
How to assemble spinner.

- Glue patterns to tagboard.
- Cut out and attach pointer with a fastener.

Alternative

- Children can use a paper clip and pencil instead.





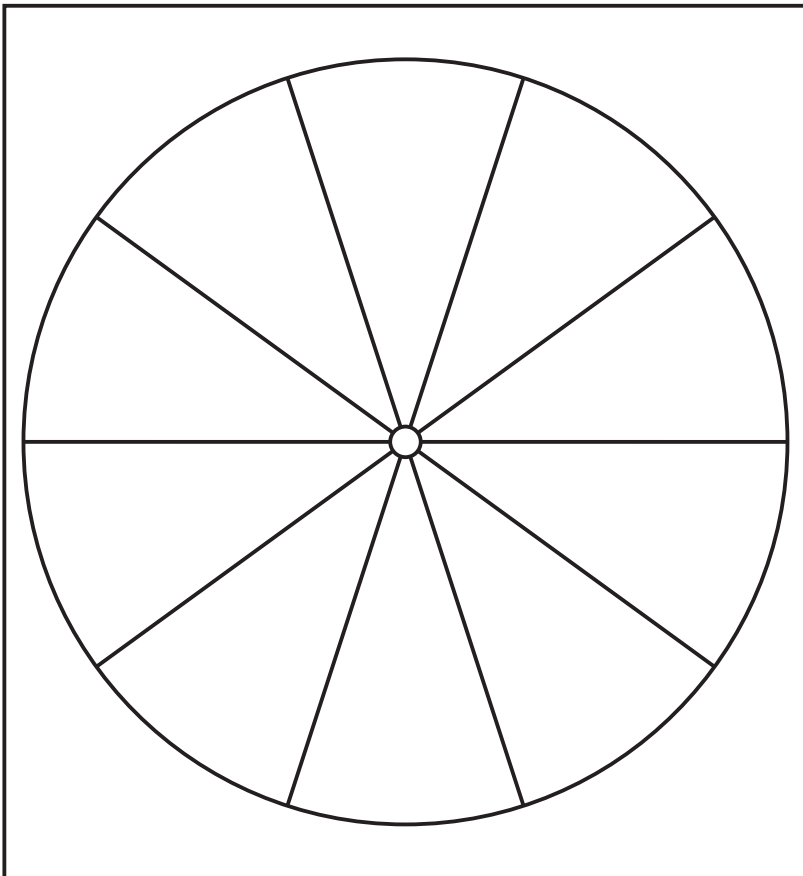
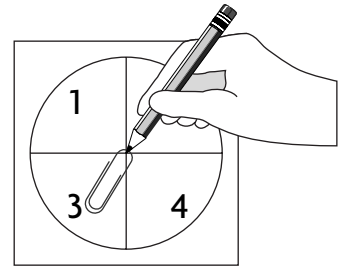
Spinner Tips

How to assemble spinner.

- Glue patterns to tagboard.
- Cut out and attach pointer with a fastener.

Alternative

- Children can use a paper clip and pencil instead.



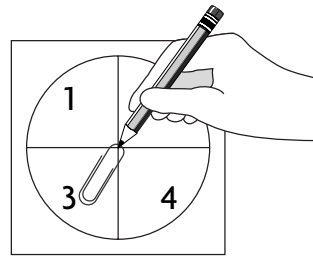
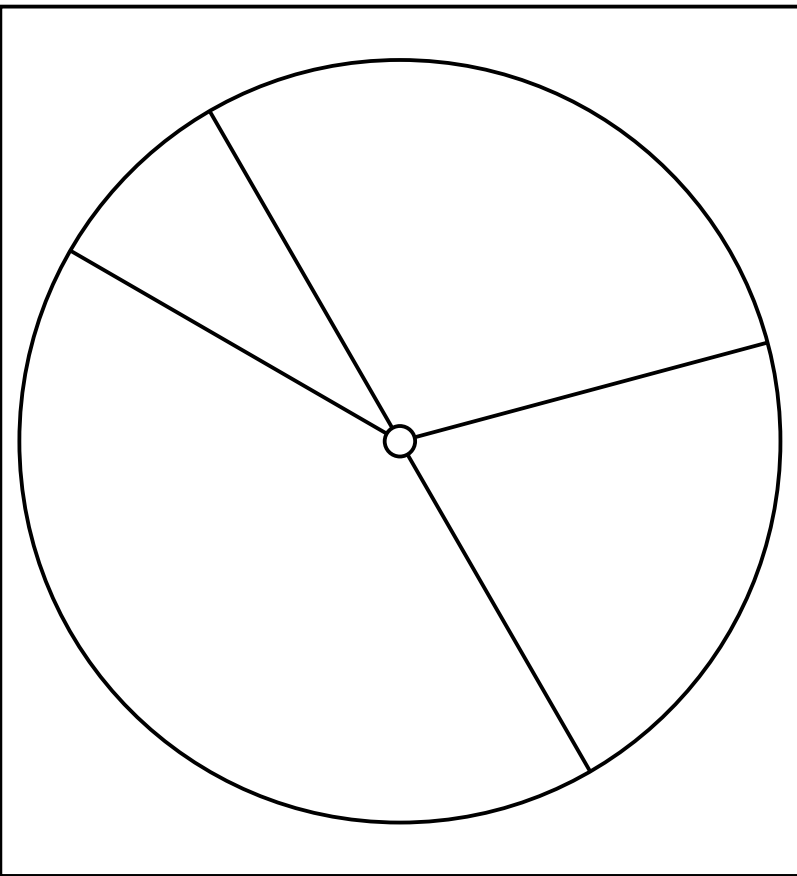
Spinner Tips

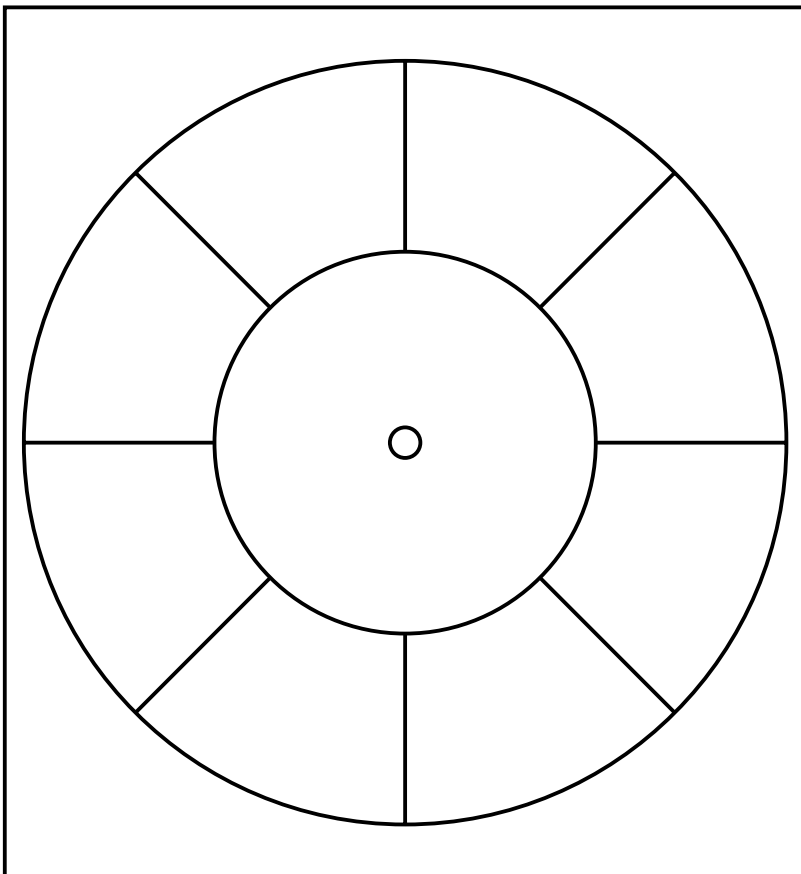
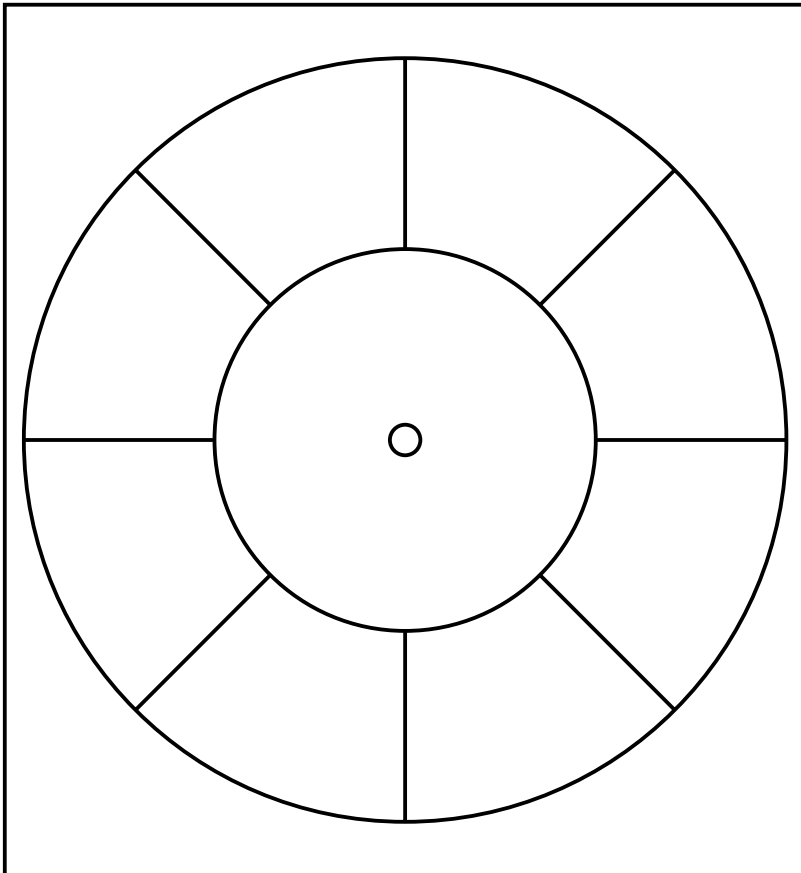
How to assemble spinner.

- Glue patterns to tagboard.
- Cut out and attach pointer with a fastener.

Alternative

- Children can use a paper clip and pencil instead.






Spinner Tips

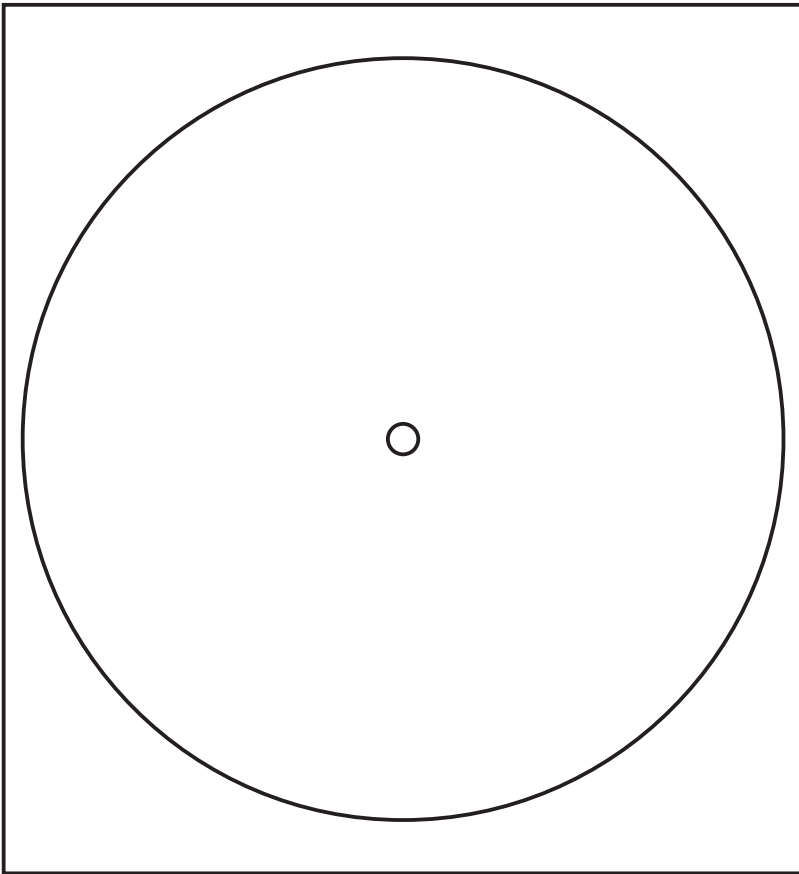
How to assemble spinner.

- Glue patterns to tagboard.
- Cut out and attach pointer with a fastener.

Alternative

- Children can use a paper clip and pencil instead.





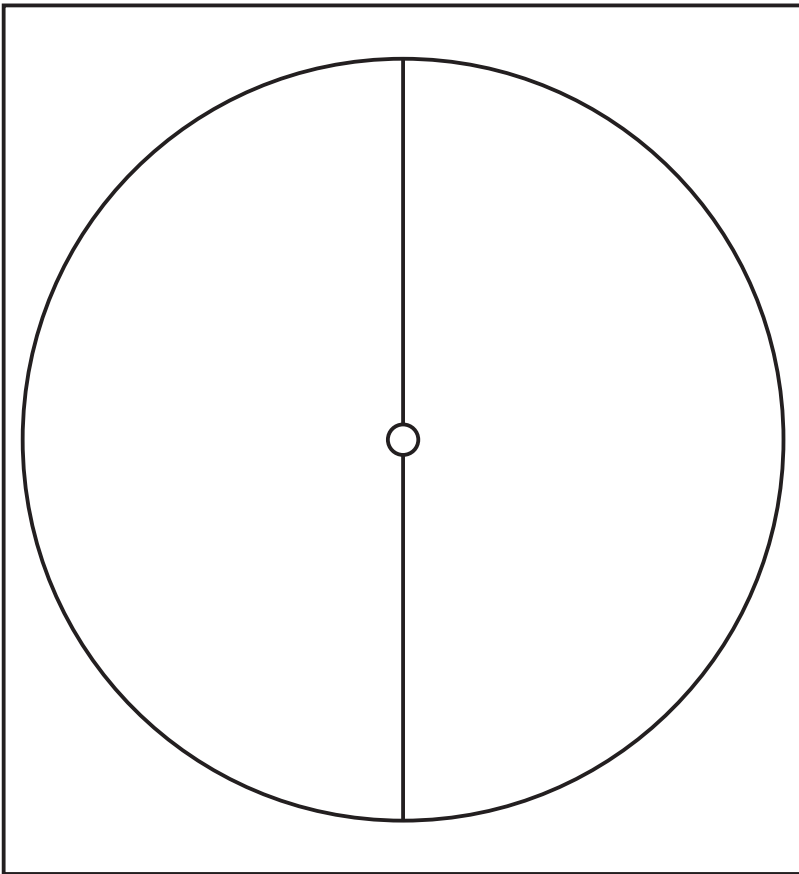
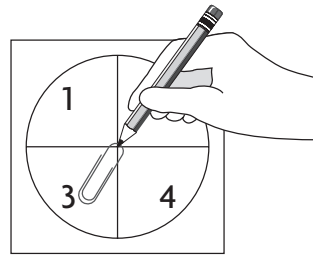
Spinner Tips

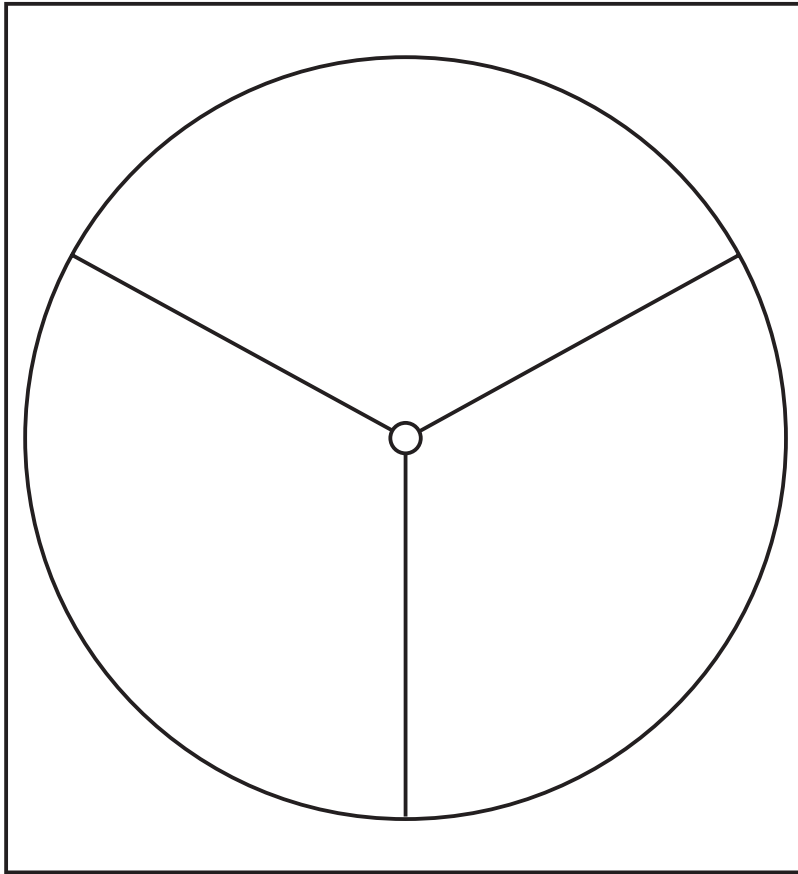
How to assemble spinner.

- Glue patterns to poster board.
- Cut out and attach pointer with a fastener.

Alternative

- Children can use a paper clip and pencil instead.





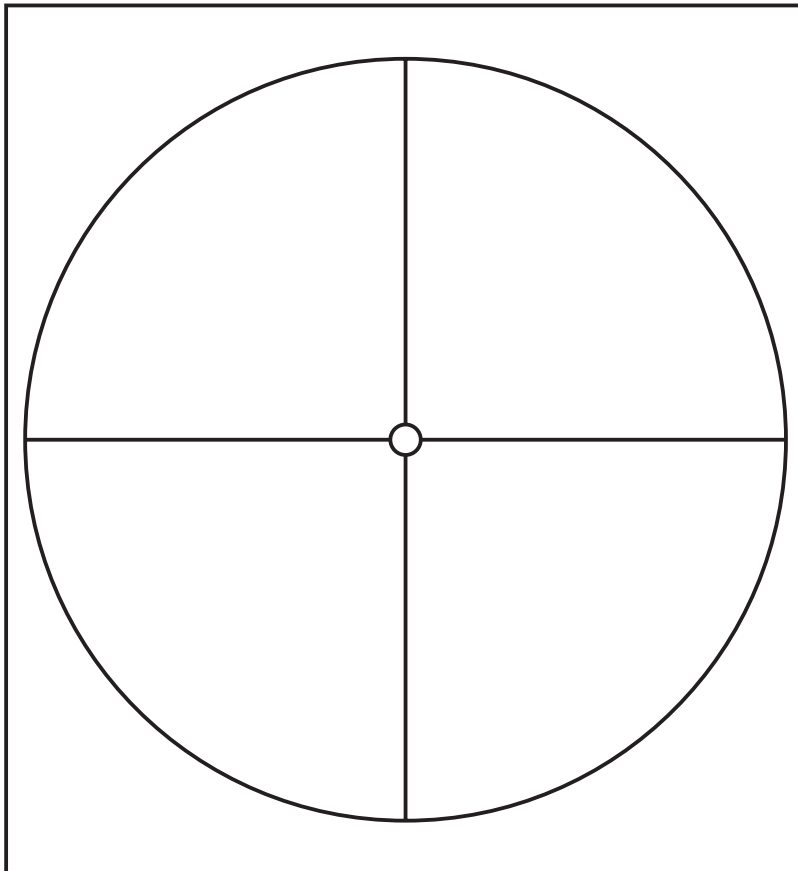
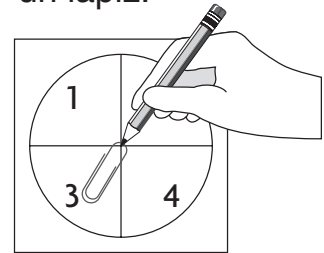
Sugerencias

Cómo armar la flecha giratoria

- Pegar estos patrones en una cartulina
- Recortarlos y fijar la flecha con un broche.

Alternativa

- En lugar del broche, pueden usar un clip y un lápiz.



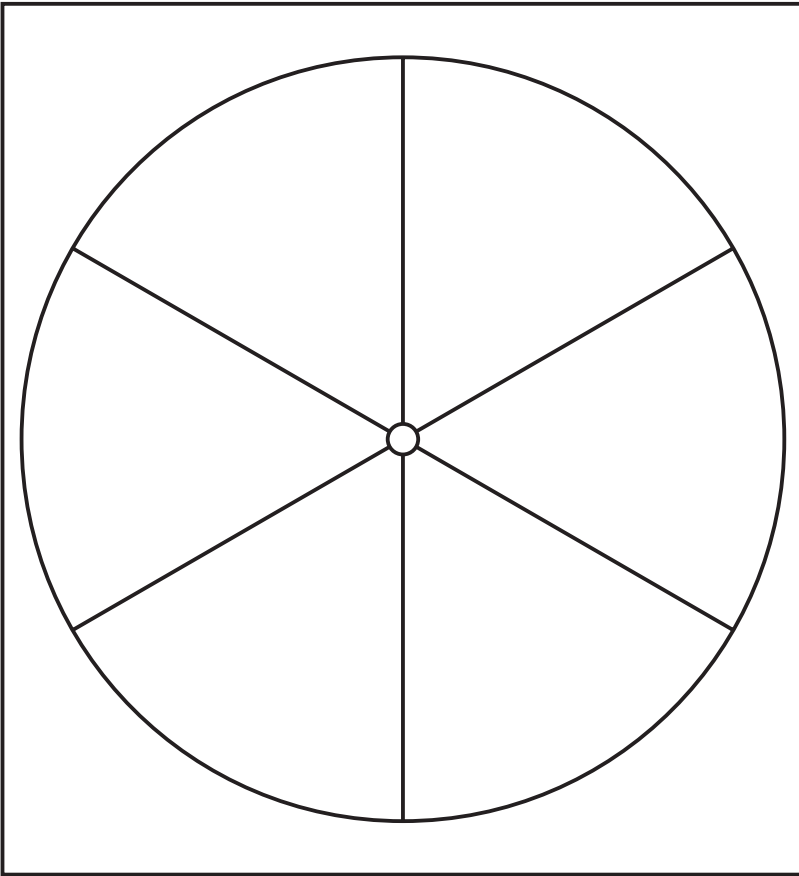
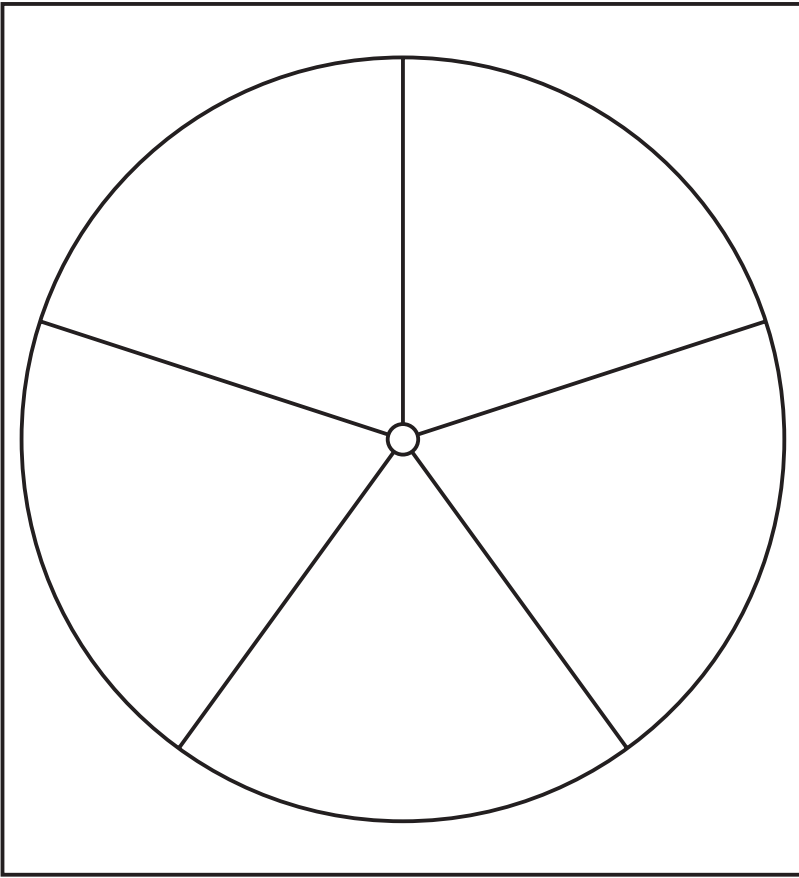
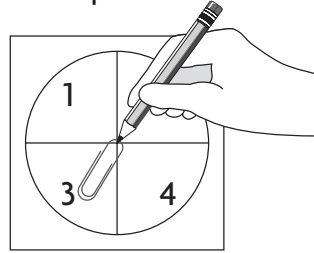
Sugerencias

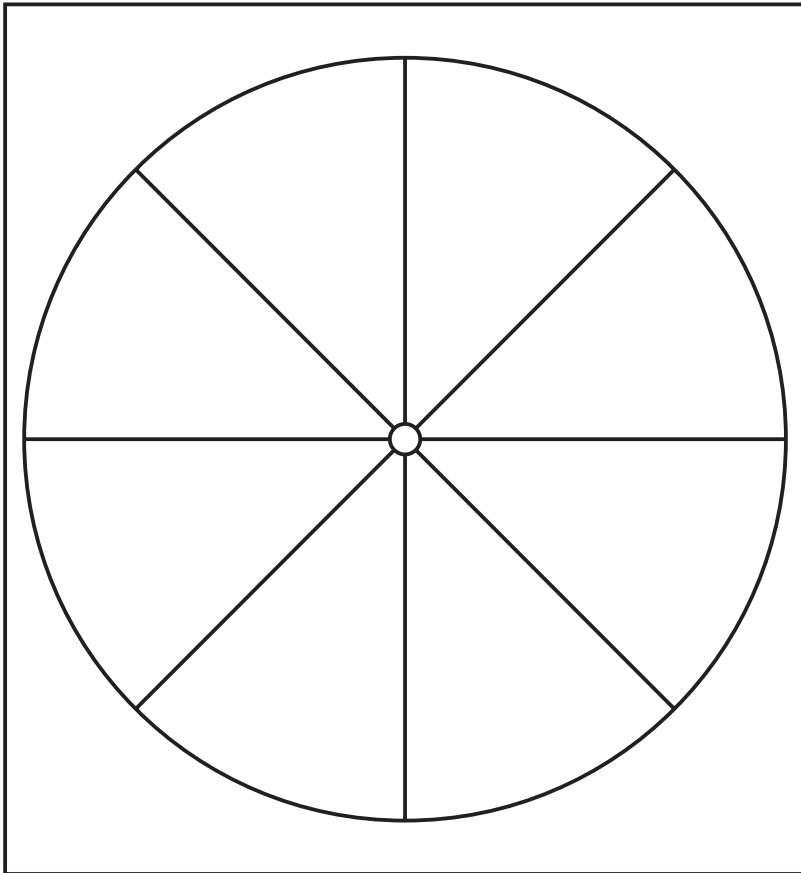
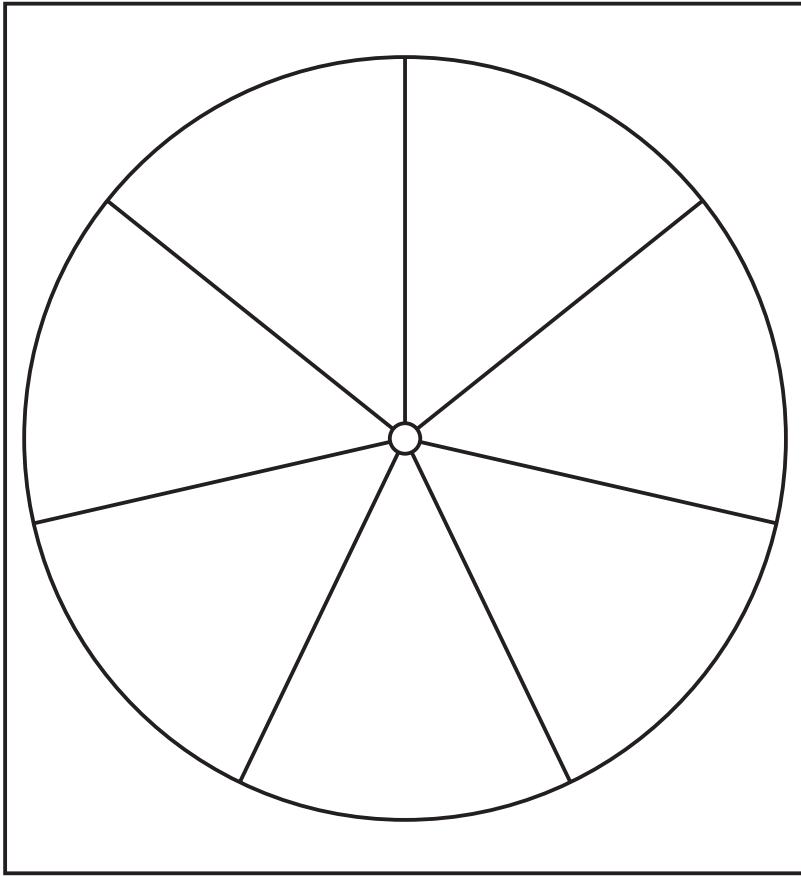
Cómo armar la flecha giratoria

- Pegar estos patrones en una cartulina
- Recortarlos y fijar la flecha con un broche.

Alternativa

- En lugar del broche, pueden usar un clip y un lápiz.





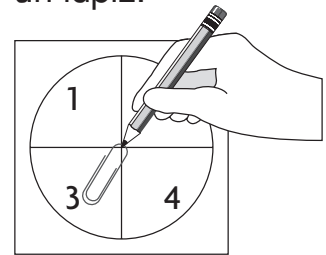
Sugerencias

Cómo armar la flecha giratoria

- Pegar estos patrones en una cartulina
- Recortarlos y fijar la flecha con un broche.

Alternativa

- En lugar del broche, pueden usar un clip y un lápiz.



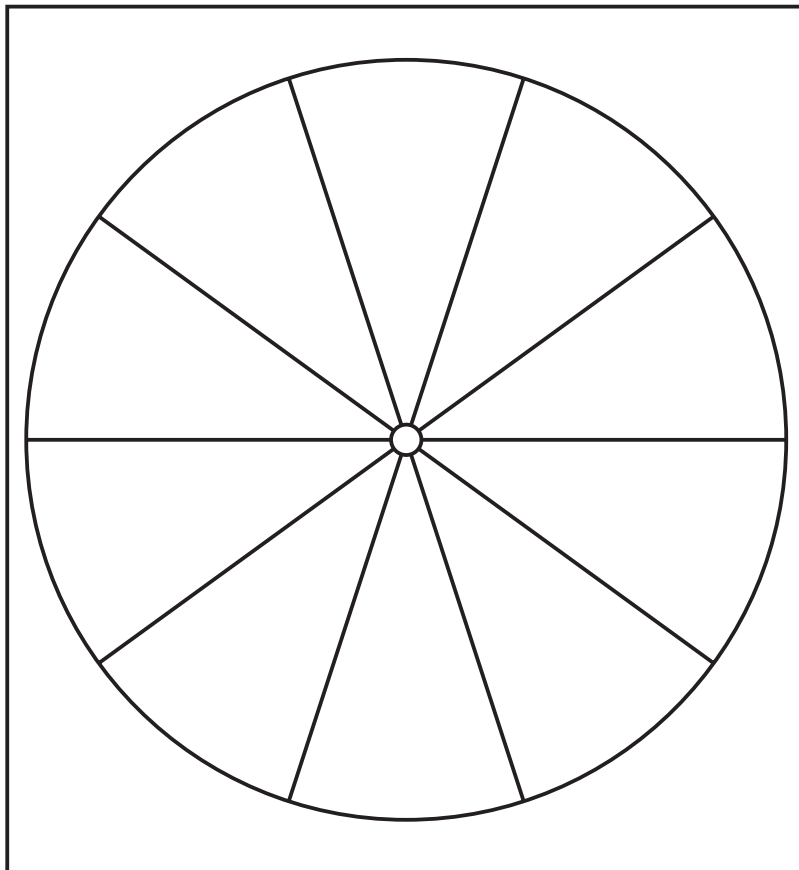
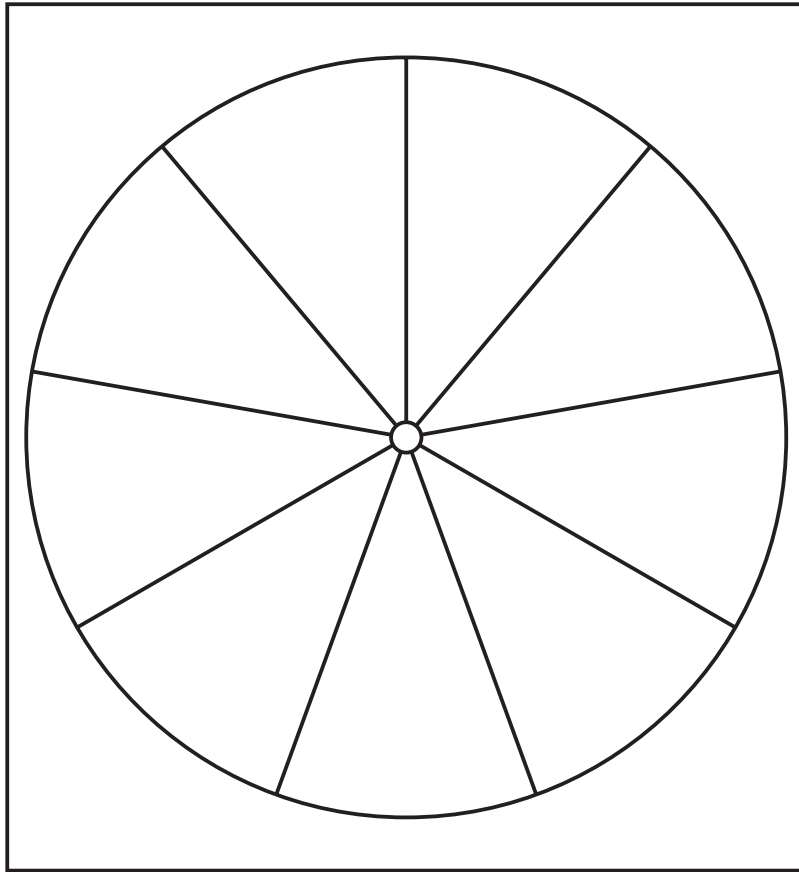
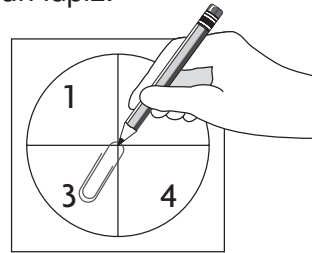
Sugerencias

Cómo armar la flecha giratoria

- Pegar estos patrones en una cartulina
- Recortarlos y fijar la flecha con un broche.

Alternativa

- En lugar del broche, pueden usar un clip y un lápiz.



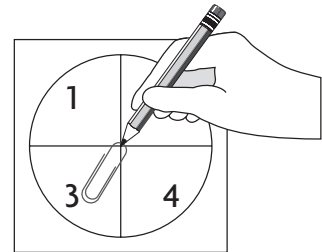
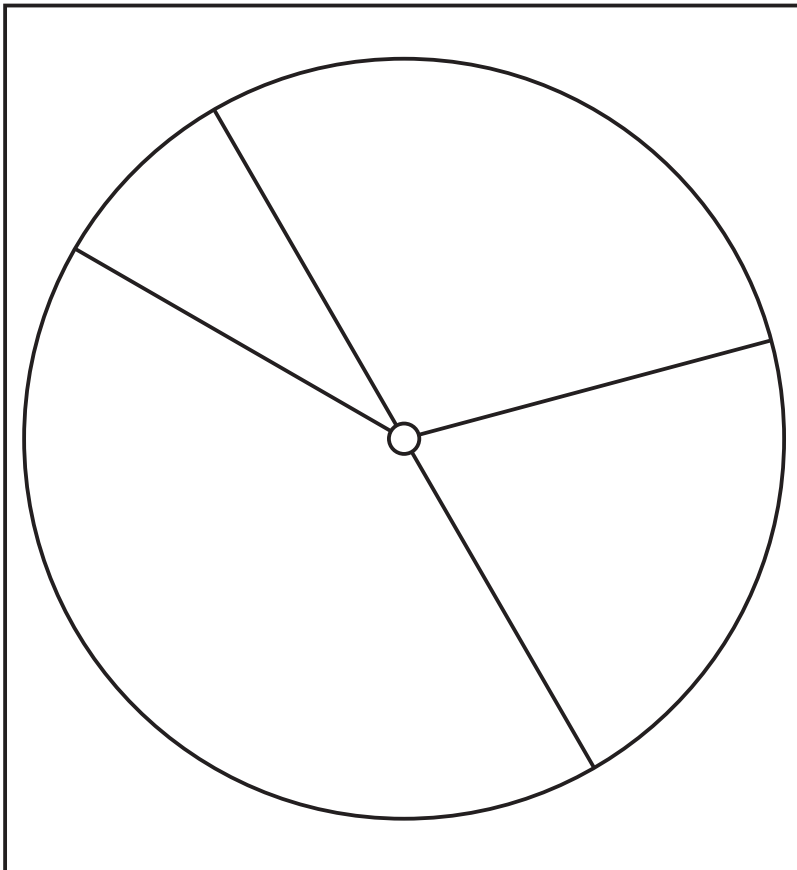
Sugerencias

Cómo armar la flecha giratoria

- Pegar estos patrones en una cartulina
- Recortarlos y fijar la flecha con un broche.

Alternativa

- En lugar del broche, pueden usar un clip y un lápiz.



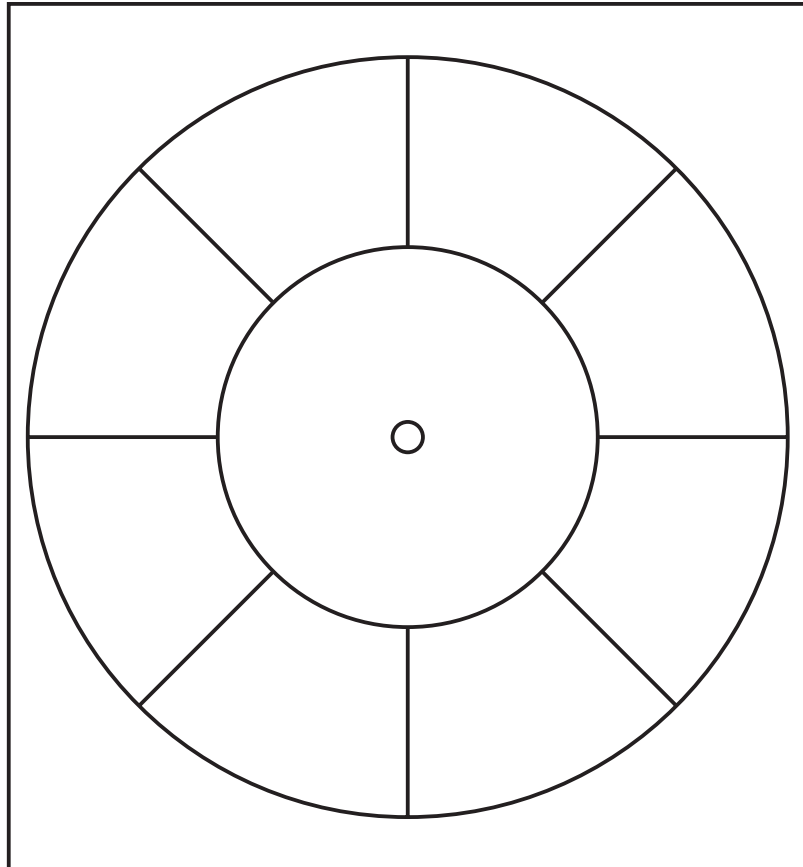
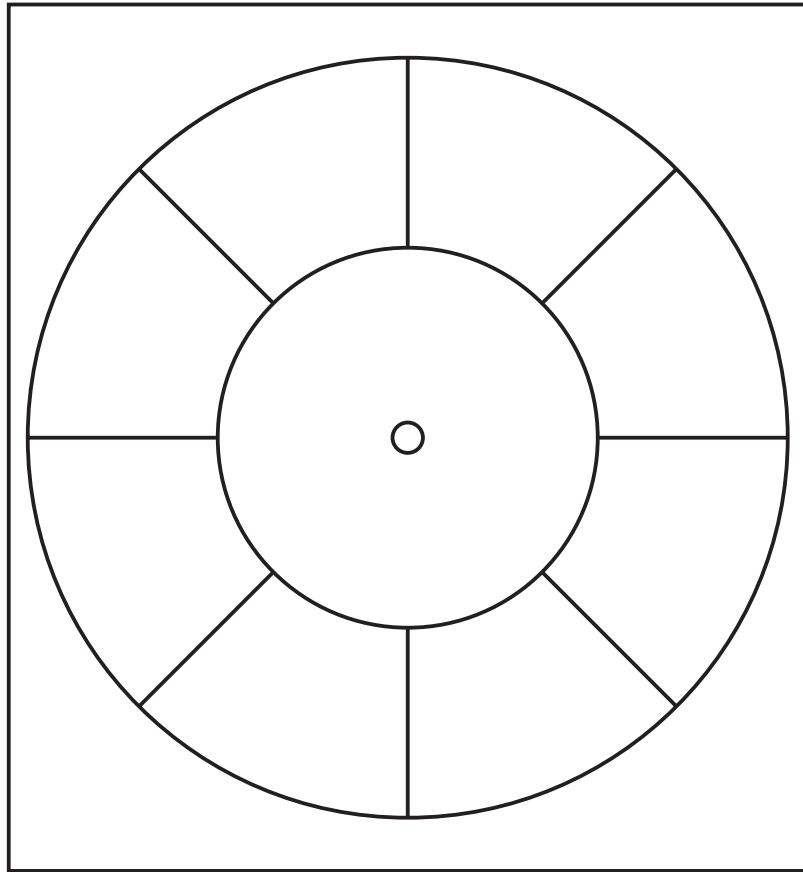
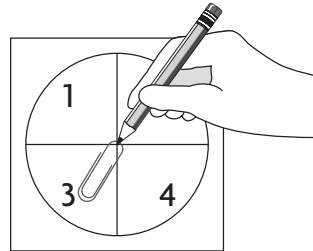
Sugerencias

Cómo armar la flecha giratoria

- Pegar estos patrones en una cartulina
- Recortarlos y fijar la flecha con un broche.

Alternativa

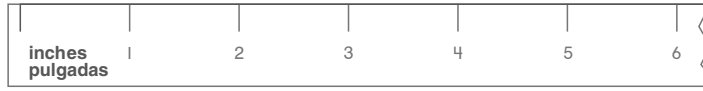
- En lugar del broche, pueden usar un clip y un lápiz.



 **Unlock the Problem**  **Soluciona el problema**

Read Lee	Plan Planea
<p>What information am I given? ¿Qué información tengo?</p> <p>Show how you solve the problem. Muestra cómo resuelves el problema.</p>	<p>What is my plan or strategy? ¿Cuál es mi plan o estrategia?</p>

Show how you know.
Muestra cómo lo sabes.




Quick Pictures ★ Share and Show ★ Essential Question
Mis dibujos ★ Muestra lo que aprendiste ★ Pregunta esencial



Side B
Lado B

Workmat 1



Workmat 2

A large rectangular workmat divided into two horizontal sections by a single line. The top section is approximately one-third of the total height, and the bottom section is approximately two-thirds. The entire mat is enclosed in a thick black border.

Workmat 3

Tens	Ones

Workmat 4



Quarter



Dime



Nickel



Penny

Workmat 5

Hundreds	Tens	Ones

Workmat 6

Workmat 7

Workmat 8

Workmat 9

Part

Part

Whole

Workmat 10

Whole

Part

Part

Workmat 11

Tens	Ones																				
	<table border="1"><tbody><tr><td></td><td></td><td></td><td></td><td></td></tr><tr><td></td><td></td><td></td><td></td><td></td></tr></tbody></table> <table border="1"><tbody><tr><td></td><td></td><td></td><td></td><td></td></tr><tr><td></td><td></td><td></td><td></td><td></td></tr></tbody></table>																				


Workmat 12

	0	1	2	3	4	5	6	7	8	9	10
0											
1											
2											
3											
4											
5											
6											
7											
8											
9											
10											

Tapete 1



Tapete 2



Tapete 3

Decenas	Unidades

Tapete 4



**Moneda
de 25¢**



**Moneda
de 10¢**



**Moneda
de 5¢**




**Moneda
de 1¢**

Tapete 5

Unidades	
Decenas	
Centenas	


Tapete 6



Tapete 7

Tapete 8

Tapete 9



Tapete 10

Entero

Parte

Parte

Tapete

Decenas

Unidades

Tapete 12

+	0	1	2	3	4	5	6	7	8	9	10
0											
1											
2											
3											
4											
5											
6											
7											
8											
9											
10											

Name _____

Date _____

Facts Practice

Add.

1. $3 + 2 = \underline{\quad}$

2. $2 + 3 = \underline{\quad}$

3. $4 + 5 = \underline{\quad}$

4. $5 + 4 = \underline{\quad}$

5. $6 + 3 = \underline{\quad}$

6. $3 + 6 = \underline{\quad}$

7.
$$\begin{array}{r} 1 \\ + 5 \\ \hline \end{array}$$

8.
$$\begin{array}{r} 5 \\ + 1 \\ \hline \end{array}$$

9.
$$\begin{array}{r} 4 \\ + 3 \\ \hline \end{array}$$

10.
$$\begin{array}{r} 3 \\ + 4 \\ \hline \end{array}$$

11.
$$\begin{array}{r} 6 \\ + 5 \\ \hline \end{array}$$

12.
$$\begin{array}{r} 5 \\ + 6 \\ \hline \end{array}$$

13.
$$\begin{array}{r} 0 \\ + 7 \\ \hline \end{array}$$

14.
$$\begin{array}{r} 7 \\ + 0 \\ \hline \end{array}$$

15.
$$\begin{array}{r} 2 \\ + 1 \\ \hline \end{array}$$

16.
$$\begin{array}{r} 1 \\ + 2 \\ \hline \end{array}$$

17.
$$\begin{array}{r} 7 \\ + 6 \\ \hline \end{array}$$

18.
$$\begin{array}{r} 6 \\ + 7 \\ \hline \end{array}$$

19.
$$\begin{array}{r} 4 \\ + 5 \\ \hline \end{array}$$

20.
$$\begin{array}{r} 5 \\ + 4 \\ \hline \end{array}$$

21.
$$\begin{array}{r} 9 \\ + 8 \\ \hline \end{array}$$

22.
$$\begin{array}{r} 4 \\ + 2 \\ \hline \end{array}$$

23.
$$\begin{array}{r} 2 \\ + 4 \\ \hline \end{array}$$

24.
$$\begin{array}{r} 5 \\ + 1 \\ \hline \end{array}$$

25.
$$\begin{array}{r} 1 \\ + 5 \\ \hline \end{array}$$

26.
$$\begin{array}{r} 3 \\ + 8 \\ \hline \end{array}$$

Práctica de operaciones

Suma.

1. $3 + 2 = \underline{\quad}$

2. $2 + 3 = \underline{\quad}$

3. $4 + 5 = \underline{\quad}$

4. $5 + 4 = \underline{\quad}$

5. $6 + 3 = \underline{\quad}$

6. $3 + 6 = \underline{\quad}$

7.
$$\begin{array}{r} 1 \\ + 5 \\ \hline \end{array}$$

8.
$$\begin{array}{r} 5 \\ + 1 \\ \hline \end{array}$$

9.
$$\begin{array}{r} 4 \\ + 3 \\ \hline \end{array}$$

10.
$$\begin{array}{r} 3 \\ + 4 \\ \hline \end{array}$$

11.
$$\begin{array}{r} 6 \\ + 5 \\ \hline \end{array}$$

12.
$$\begin{array}{r} 5 \\ + 6 \\ \hline \end{array}$$

13.
$$\begin{array}{r} 0 \\ + 7 \\ \hline \end{array}$$

14.
$$\begin{array}{r} 7 \\ + 0 \\ \hline \end{array}$$

15.
$$\begin{array}{r} 2 \\ + 1 \\ \hline \end{array}$$

16.
$$\begin{array}{r} 1 \\ + 2 \\ \hline \end{array}$$

17.
$$\begin{array}{r} 7 \\ + 6 \\ \hline \end{array}$$

18.
$$\begin{array}{r} 6 \\ + 7 \\ \hline \end{array}$$

19.
$$\begin{array}{r} 4 \\ + 5 \\ \hline \end{array}$$

20.
$$\begin{array}{r} 5 \\ + 4 \\ \hline \end{array}$$

21.
$$\begin{array}{r} 9 \\ + 8 \\ \hline \end{array}$$

22.
$$\begin{array}{r} 4 \\ + 2 \\ \hline \end{array}$$

23.
$$\begin{array}{r} 2 \\ + 4 \\ \hline \end{array}$$

24.
$$\begin{array}{r} 5 \\ + 1 \\ \hline \end{array}$$

25.
$$\begin{array}{r} 1 \\ + 5 \\ \hline \end{array}$$

26.
$$\begin{array}{r} 3 \\ + 8 \\ \hline \end{array}$$

Name _____

Date _____

Facts Practice

Count on to find the sum.

1. $3 + 1 = \underline{\quad}$

2. $2 + 1 = \underline{\quad}$

3. $5 + 2 = \underline{\quad}$

4. $4 + 1 = \underline{\quad}$

5. $1 + 6 = \underline{\quad}$

6. $2 + 3 = \underline{\quad}$

7.
$$\begin{array}{r} 1 \\ + 5 \\ \hline \end{array}$$

8.
$$\begin{array}{r} 5 \\ + 2 \\ \hline \end{array}$$

9.
$$\begin{array}{r} 2 \\ + 4 \\ \hline \end{array}$$

10.
$$\begin{array}{r} 7 \\ + 1 \\ \hline \end{array}$$

11.
$$\begin{array}{r} 2 \\ + 5 \\ \hline \end{array}$$

12.
$$\begin{array}{r} 8 \\ + 2 \\ \hline \end{array}$$

13.
$$\begin{array}{r} 1 \\ + 7 \\ \hline \end{array}$$

14.
$$\begin{array}{r} 2 \\ + 6 \\ \hline \end{array}$$

15.
$$\begin{array}{r} 2 \\ + 3 \\ \hline \end{array}$$

16.
$$\begin{array}{r} 1 \\ + 2 \\ \hline \end{array}$$

17.
$$\begin{array}{r} 7 \\ + 2 \\ \hline \end{array}$$

18.
$$\begin{array}{r} 9 \\ + 2 \\ \hline \end{array}$$

19.
$$\begin{array}{r} 1 \\ + 5 \\ \hline \end{array}$$

20.
$$\begin{array}{r} 1 \\ + 4 \\ \hline \end{array}$$

21.
$$\begin{array}{r} 2 \\ + 8 \\ \hline \end{array}$$

22.
$$\begin{array}{r} 2 \\ + 4 \\ \hline \end{array}$$

23.
$$\begin{array}{r} 1 \\ + 6 \\ \hline \end{array}$$

24.
$$\begin{array}{r} 9 \\ + 1 \\ \hline \end{array}$$

25.
$$\begin{array}{r} 5 \\ + 1 \\ \hline \end{array}$$

26.
$$\begin{array}{r} 9 \\ + 3 \\ \hline \end{array}$$

Práctica de operaciones

Cuenta hacia adelante para calcular la suma.

1. $3 + 1 = \underline{\quad}$

2. $2 + 1 = \underline{\quad}$

3. $5 + 2 = \underline{\quad}$

4. $4 + 1 = \underline{\quad}$

5. $1 + 6 = \underline{\quad}$

6. $2 + 3 = \underline{\quad}$

7.
$$\begin{array}{r} 1 \\ + 5 \\ \hline \end{array}$$

8.
$$\begin{array}{r} 5 \\ + 2 \\ \hline \end{array}$$

9.
$$\begin{array}{r} 2 \\ + 4 \\ \hline \end{array}$$

10.
$$\begin{array}{r} 7 \\ + 1 \\ \hline \end{array}$$

11.
$$\begin{array}{r} 2 \\ + 5 \\ \hline \end{array}$$

12.
$$\begin{array}{r} 8 \\ + 2 \\ \hline \end{array}$$

13.
$$\begin{array}{r} 1 \\ + 7 \\ \hline \end{array}$$

14.
$$\begin{array}{r} 2 \\ + 6 \\ \hline \end{array}$$

15.
$$\begin{array}{r} 2 \\ + 3 \\ \hline \end{array}$$

16.
$$\begin{array}{r} 1 \\ + 2 \\ \hline \end{array}$$

17.
$$\begin{array}{r} 7 \\ + 2 \\ \hline \end{array}$$

18.
$$\begin{array}{r} 9 \\ + 2 \\ \hline \end{array}$$

19.
$$\begin{array}{r} 1 \\ + 5 \\ \hline \end{array}$$

20.
$$\begin{array}{r} 1 \\ + 4 \\ \hline \end{array}$$

21.
$$\begin{array}{r} 2 \\ + 8 \\ \hline \end{array}$$

22.
$$\begin{array}{r} 2 \\ + 4 \\ \hline \end{array}$$

23.
$$\begin{array}{r} 1 \\ + 6 \\ \hline \end{array}$$

24.
$$\begin{array}{r} 9 \\ + 1 \\ \hline \end{array}$$

25.
$$\begin{array}{r} 5 \\ + 1 \\ \hline \end{array}$$

26.
$$\begin{array}{r} 9 \\ + 3 \\ \hline \end{array}$$

Name _____

Date _____

Facts Practice

Find the sum.

1. $2 + 2 = \underline{\quad}$

2. $3 + 3 = \underline{\quad}$

3. $4 + 5 = \underline{\quad}$

4. $5 + 5 = \underline{\quad}$

5. $6 + 6 = \underline{\quad}$

6. $4 + 4 = \underline{\quad}$

7.
$$\begin{array}{r} 8 \\ + 8 \\ \hline \end{array}$$

8.
$$\begin{array}{r} 6 \\ + 7 \\ \hline \end{array}$$

9.
$$\begin{array}{r} 4 \\ + 4 \\ \hline \end{array}$$

10.
$$\begin{array}{r} 3 \\ + 4 \\ \hline \end{array}$$

11.
$$\begin{array}{r} 6 \\ + 5 \\ \hline \end{array}$$

12.
$$\begin{array}{r} 6 \\ + 6 \\ \hline \end{array}$$

13.
$$\begin{array}{r} 7 \\ + 7 \\ \hline \end{array}$$

14.
$$\begin{array}{r} 5 \\ + 4 \\ \hline \end{array}$$

15.
$$\begin{array}{r} 2 \\ + 3 \\ \hline \end{array}$$

16.
$$\begin{array}{r} 2 \\ + 2 \\ \hline \end{array}$$

17.
$$\begin{array}{r} 7 \\ + 8 \\ \hline \end{array}$$

18.
$$\begin{array}{r} 6 \\ + 7 \\ \hline \end{array}$$

19.
$$\begin{array}{r} 4 \\ + 4 \\ \hline \end{array}$$

20.
$$\begin{array}{r} 1 \\ + 2 \\ \hline \end{array}$$

21.
$$\begin{array}{r} 9 \\ + 8 \\ \hline \end{array}$$

22.
$$\begin{array}{r} 3 \\ + 3 \\ \hline \end{array}$$

23.
$$\begin{array}{r} 9 \\ + 9 \\ \hline \end{array}$$

24.
$$\begin{array}{r} 4 \\ + 3 \\ \hline \end{array}$$

25.
$$\begin{array}{r} 8 \\ + 8 \\ \hline \end{array}$$

26.
$$\begin{array}{r} 7 \\ + 7 \\ \hline \end{array}$$

Práctica de operaciones

Calcula la suma.

1. $2 + 2 = \underline{\quad}$

2. $3 + 3 = \underline{\quad}$

3. $4 + 5 = \underline{\quad}$

4. $5 + 5 = \underline{\quad}$

5. $6 + 6 = \underline{\quad}$

6. $4 + 4 = \underline{\quad}$

7.
$$\begin{array}{r} 8 \\ + 8 \\ \hline \end{array}$$

8.
$$\begin{array}{r} 6 \\ + 7 \\ \hline \end{array}$$

9.
$$\begin{array}{r} 4 \\ + 4 \\ \hline \end{array}$$

10.
$$\begin{array}{r} 3 \\ + 4 \\ \hline \end{array}$$

11.
$$\begin{array}{r} 6 \\ + 5 \\ \hline \end{array}$$

12.
$$\begin{array}{r} 6 \\ + 6 \\ \hline \end{array}$$

13.
$$\begin{array}{r} 7 \\ + 7 \\ \hline \end{array}$$

14.
$$\begin{array}{r} 5 \\ + 4 \\ \hline \end{array}$$

15.
$$\begin{array}{r} 2 \\ + 3 \\ \hline \end{array}$$

16.
$$\begin{array}{r} 2 \\ + 2 \\ \hline \end{array}$$

17.
$$\begin{array}{r} 7 \\ + 8 \\ \hline \end{array}$$

18.
$$\begin{array}{r} 6 \\ + 7 \\ \hline \end{array}$$

19.
$$\begin{array}{r} 4 \\ + 4 \\ \hline \end{array}$$

20.
$$\begin{array}{r} 1 \\ + 2 \\ \hline \end{array}$$

21.
$$\begin{array}{r} 9 \\ + 8 \\ \hline \end{array}$$

22.
$$\begin{array}{r} 3 \\ + 3 \\ \hline \end{array}$$

23.
$$\begin{array}{r} 9 \\ + 9 \\ \hline \end{array}$$

24.
$$\begin{array}{r} 4 \\ + 3 \\ \hline \end{array}$$

25.
$$\begin{array}{r} 8 \\ + 8 \\ \hline \end{array}$$

26.
$$\begin{array}{r} 7 \\ + 7 \\ \hline \end{array}$$

Name _____

Date _____

Facts Practice

Add.

1. $3 + 8 = \underline{\quad}$

2. $2 + 9 = \underline{\quad}$

3. $6 + 6 = \underline{\quad}$

4. $5 + 7 = \underline{\quad}$

5. $6 + 5 = \underline{\quad}$

6. $9 + 4 = \underline{\quad}$

7.
$$\begin{array}{r} 4 \\ + 7 \\ \hline \end{array}$$

8.
$$\begin{array}{r} 8 \\ + 5 \\ \hline \end{array}$$

9.
$$\begin{array}{r} 7 \\ + 4 \\ \hline \end{array}$$

10.
$$\begin{array}{r} 2 \\ + 9 \\ \hline \end{array}$$

11.
$$\begin{array}{r} 4 \\ + 8 \\ \hline \end{array}$$

12.
$$\begin{array}{r} 9 \\ + 2 \\ \hline \end{array}$$

13.
$$\begin{array}{r} 8 \\ + 3 \\ \hline \end{array}$$

14.
$$\begin{array}{r} 7 \\ + 5 \\ \hline \end{array}$$

15.
$$\begin{array}{r} 2 \\ + 9 \\ \hline \end{array}$$

16.
$$\begin{array}{r} 8 \\ + 6 \\ \hline \end{array}$$

17.
$$\begin{array}{r} 7 \\ + 4 \\ \hline \end{array}$$

18.
$$\begin{array}{r} 8 \\ + 4 \\ \hline \end{array}$$

19.
$$\begin{array}{r} 6 \\ + 6 \\ \hline \end{array}$$

20.
$$\begin{array}{r} 4 \\ + 9 \\ \hline \end{array}$$

21.
$$\begin{array}{r} 4 \\ + 8 \\ \hline \end{array}$$

22.
$$\begin{array}{r} 6 \\ + 8 \\ \hline \end{array}$$

23.
$$\begin{array}{r} 9 \\ + 3 \\ \hline \end{array}$$

24.
$$\begin{array}{r} 5 \\ + 7 \\ \hline \end{array}$$

25.
$$\begin{array}{r} 8 \\ + 3 \\ \hline \end{array}$$

26.
$$\begin{array}{r} 5 \\ + 9 \\ \hline \end{array}$$

Práctica de operaciones

Suma.

1. $3 + 8 = \underline{\quad}$

2. $2 + 9 = \underline{\quad}$

3. $6 + 6 = \underline{\quad}$

4. $5 + 7 = \underline{\quad}$

5. $6 + 5 = \underline{\quad}$

6. $9 + 4 = \underline{\quad}$

7.
$$\begin{array}{r} 4 \\ + 7 \\ \hline \end{array}$$

8.
$$\begin{array}{r} 8 \\ + 5 \\ \hline \end{array}$$

9.
$$\begin{array}{r} 7 \\ + 4 \\ \hline \end{array}$$

10.
$$\begin{array}{r} 2 \\ + 9 \\ \hline \end{array}$$

11.
$$\begin{array}{r} 4 \\ + 8 \\ \hline \end{array}$$

12.
$$\begin{array}{r} 9 \\ + 2 \\ \hline \end{array}$$

13.
$$\begin{array}{r} 8 \\ + 3 \\ \hline \end{array}$$

14.
$$\begin{array}{r} 7 \\ + 5 \\ \hline \end{array}$$

15.
$$\begin{array}{r} 2 \\ + 9 \\ \hline \end{array}$$

16.
$$\begin{array}{r} 8 \\ + 6 \\ \hline \end{array}$$

17.
$$\begin{array}{r} 7 \\ + 4 \\ \hline \end{array}$$

18.
$$\begin{array}{r} 8 \\ + 4 \\ \hline \end{array}$$

19.
$$\begin{array}{r} 6 \\ + 6 \\ \hline \end{array}$$

20.
$$\begin{array}{r} 4 \\ + 9 \\ \hline \end{array}$$

21.
$$\begin{array}{r} 4 \\ + 8 \\ \hline \end{array}$$

22.
$$\begin{array}{r} 6 \\ + 8 \\ \hline \end{array}$$

23.
$$\begin{array}{r} 9 \\ + 3 \\ \hline \end{array}$$

24.
$$\begin{array}{r} 5 \\ + 7 \\ \hline \end{array}$$

25.
$$\begin{array}{r} 8 \\ + 3 \\ \hline \end{array}$$

26.
$$\begin{array}{r} 5 \\ + 9 \\ \hline \end{array}$$

Name _____

Date _____

Facts Practice

Subtract.

1. $7 - 3 = \underline{\quad}$

2. $7 - 4 = \underline{\quad}$

3. $5 - 2 = \underline{\quad}$

4. $5 - 3 = \underline{\quad}$

5. $6 - 2 = \underline{\quad}$

6. $6 - 4 = \underline{\quad}$

7.
$$\begin{array}{r} 10 \\ - 4 \\ \hline \end{array}$$

8.
$$\begin{array}{r} 10 \\ - 6 \\ \hline \end{array}$$

9.
$$\begin{array}{r} 8 \\ - 3 \\ \hline \end{array}$$

10.
$$\begin{array}{r} 8 \\ - 5 \\ \hline \end{array}$$

11.
$$\begin{array}{r} 9 \\ - 5 \\ \hline \end{array}$$

12.
$$\begin{array}{r} 8 \\ - 3 \\ \hline \end{array}$$

13.
$$\begin{array}{r} 8 \\ - 5 \\ \hline \end{array}$$

14.
$$\begin{array}{r} 3 \\ - 2 \\ \hline \end{array}$$

15.
$$\begin{array}{r} 7 \\ - 1 \\ \hline \end{array}$$

16.
$$\begin{array}{r} 9 \\ - 2 \\ \hline \end{array}$$

17.
$$\begin{array}{r} 9 \\ - 2 \\ \hline \end{array}$$

18.
$$\begin{array}{r} 9 \\ - 7 \\ \hline \end{array}$$

19.
$$\begin{array}{r} 4 \\ - 1 \\ \hline \end{array}$$

20.
$$\begin{array}{r} 4 \\ - 3 \\ \hline \end{array}$$

21.
$$\begin{array}{r} 7 \\ - 4 \\ \hline \end{array}$$

22.
$$\begin{array}{r} 7 \\ - 3 \\ \hline \end{array}$$

23.
$$\begin{array}{r} 8 \\ - 2 \\ \hline \end{array}$$

24.
$$\begin{array}{r} 8 \\ - 6 \\ \hline \end{array}$$

25.
$$\begin{array}{r} 7 \\ - 5 \\ \hline \end{array}$$

26.
$$\begin{array}{r} 7 \\ - 2 \\ \hline \end{array}$$

Práctica de operaciones

Resta.

1. $7 - 3 = \underline{\quad}$ | 2. $7 - 4 = \underline{\quad}$ | 3. $5 - 2 = \underline{\quad}$

4. $5 - 3 = \underline{\quad}$ | 5. $6 - 2 = \underline{\quad}$ | 6. $6 - 4 = \underline{\quad}$

7.
$$\begin{array}{r} 10 \\ - 4 \\ \hline \end{array}$$

8.
$$\begin{array}{r} 10 \\ - 6 \\ \hline \end{array}$$

9.
$$\begin{array}{r} 8 \\ - 3 \\ \hline \end{array}$$

10.
$$\begin{array}{r} 8 \\ - 5 \\ \hline \end{array}$$

11.
$$\begin{array}{r} 9 \\ - 5 \\ \hline \end{array}$$

12.
$$\begin{array}{r} 8 \\ - 3 \\ \hline \end{array}$$

13.
$$\begin{array}{r} 8 \\ - 5 \\ \hline \end{array}$$

14.
$$\begin{array}{r} 3 \\ - 2 \\ \hline \end{array}$$

15.
$$\begin{array}{r} 7 \\ - 1 \\ \hline \end{array}$$

16.
$$\begin{array}{r} 9 \\ - 2 \\ \hline \end{array}$$

17.
$$\begin{array}{r} 9 \\ - 2 \\ \hline \end{array}$$

18.
$$\begin{array}{r} 9 \\ - 7 \\ \hline \end{array}$$

19.
$$\begin{array}{r} 4 \\ - 1 \\ \hline \end{array}$$

20.
$$\begin{array}{r} 4 \\ - 3 \\ \hline \end{array}$$

21.
$$\begin{array}{r} 7 \\ - 4 \\ \hline \end{array}$$

22.
$$\begin{array}{r} 7 \\ - 3 \\ \hline \end{array}$$

23.
$$\begin{array}{r} 8 \\ - 2 \\ \hline \end{array}$$

24.
$$\begin{array}{r} 8 \\ - 6 \\ \hline \end{array}$$

25.
$$\begin{array}{r} 7 \\ - 5 \\ \hline \end{array}$$

26.
$$\begin{array}{r} 7 \\ - 2 \\ \hline \end{array}$$

Name _____

Date _____

Facts Practice

Count back to subtract.

1. $7 - 2 = \underline{\quad}$

2. $5 - 1 = \underline{\quad}$

3. $3 - 2 = \underline{\quad}$

4. $8 - 1 = \underline{\quad}$

5. $6 - 2 = \underline{\quad}$

6. $4 - 1 = \underline{\quad}$

7.
$$\begin{array}{r} 10 \\ - 2 \\ \hline \end{array}$$

8.
$$\begin{array}{r} 8 \\ - 2 \\ \hline \end{array}$$

9.
$$\begin{array}{r} 2 \\ - 1 \\ \hline \end{array}$$

10.
$$\begin{array}{r} 6 \\ - 1 \\ \hline \end{array}$$

11.
$$\begin{array}{r} 9 \\ - 2 \\ \hline \end{array}$$

12.
$$\begin{array}{r} 7 \\ - 2 \\ \hline \end{array}$$

13.
$$\begin{array}{r} 9 \\ - 1 \\ \hline \end{array}$$

14.
$$\begin{array}{r} 3 \\ - 2 \\ \hline \end{array}$$

15.
$$\begin{array}{r} 5 \\ - 1 \\ \hline \end{array}$$

16.
$$\begin{array}{r} 10 \\ - 2 \\ \hline \end{array}$$

17.
$$\begin{array}{r} 4 \\ - 2 \\ \hline \end{array}$$

18.
$$\begin{array}{r} 9 \\ - 3 \\ \hline \end{array}$$

19.
$$\begin{array}{r} 4 \\ - 1 \\ \hline \end{array}$$

20.
$$\begin{array}{r} 8 \\ - 1 \\ \hline \end{array}$$

21.
$$\begin{array}{r} 7 \\ - 3 \\ \hline \end{array}$$

22.
$$\begin{array}{r} 6 \\ - 3 \\ \hline \end{array}$$

23.
$$\begin{array}{r} 8 \\ - 2 \\ \hline \end{array}$$

24.
$$\begin{array}{r} 9 \\ - 2 \\ \hline \end{array}$$

25.
$$\begin{array}{r} 11 \\ - 3 \\ \hline \end{array}$$

26.
$$\begin{array}{r} 8 \\ - 3 \\ \hline \end{array}$$

Práctica de operaciones

Cuenta hacia atrás para restar.

1. $7 - 2 = \underline{\quad}$

2. $5 - 1 = \underline{\quad}$

3. $3 - 2 = \underline{\quad}$

4. $8 - 1 = \underline{\quad}$

5. $6 - 2 = \underline{\quad}$

6. $4 - 1 = \underline{\quad}$

7.
$$\begin{array}{r} 10 \\ - 2 \\ \hline \end{array}$$

8.
$$\begin{array}{r} 8 \\ - 2 \\ \hline \end{array}$$

9.
$$\begin{array}{r} 2 \\ - 1 \\ \hline \end{array}$$

10.
$$\begin{array}{r} 6 \\ - 1 \\ \hline \end{array}$$

11.
$$\begin{array}{r} 9 \\ - 2 \\ \hline \end{array}$$

12.
$$\begin{array}{r} 7 \\ - 2 \\ \hline \end{array}$$

13.
$$\begin{array}{r} 9 \\ - 1 \\ \hline \end{array}$$

14.
$$\begin{array}{r} 3 \\ - 2 \\ \hline \end{array}$$

15.
$$\begin{array}{r} 5 \\ - 1 \\ \hline \end{array}$$

16.
$$\begin{array}{r} 10 \\ - 2 \\ \hline \end{array}$$

17.
$$\begin{array}{r} 4 \\ - 2 \\ \hline \end{array}$$

18.
$$\begin{array}{r} 9 \\ - 3 \\ \hline \end{array}$$

19.
$$\begin{array}{r} 4 \\ - 1 \\ \hline \end{array}$$

20.
$$\begin{array}{r} 8 \\ - 1 \\ \hline \end{array}$$

21.
$$\begin{array}{r} 7 \\ - 3 \\ \hline \end{array}$$

22.
$$\begin{array}{r} 6 \\ - 3 \\ \hline \end{array}$$

23.
$$\begin{array}{r} 8 \\ - 2 \\ \hline \end{array}$$

24.
$$\begin{array}{r} 9 \\ - 2 \\ \hline \end{array}$$

25.
$$\begin{array}{r} 11 \\ - 3 \\ \hline \end{array}$$

26.
$$\begin{array}{r} 8 \\ - 3 \\ \hline \end{array}$$

Name _____

Date _____

Facts Practice

Add or subtract.

1. $9 - 7 = \underline{\quad}$

2. $7 + 2 = \underline{\quad}$

3. $9 - 2 = \underline{\quad}$

4. $1 + 4 = \underline{\quad}$

5. $5 - 1 = \underline{\quad}$

6. $5 - 4 = \underline{\quad}$

7.
$$\begin{array}{r} 7 \\ - 2 \\ \hline \end{array}$$

8.
$$\begin{array}{r} 5 \\ + 2 \\ \hline \end{array}$$

9.
$$\begin{array}{r} 7 \\ - 5 \\ \hline \end{array}$$

10.
$$\begin{array}{r} 6 \\ - 1 \\ \hline \end{array}$$

11.
$$\begin{array}{r} 6 \\ - 5 \\ \hline \end{array}$$

12.
$$\begin{array}{r} 5 \\ + 1 \\ \hline \end{array}$$

13.
$$\begin{array}{r} 9 \\ - 3 \\ \hline \end{array}$$

14.
$$\begin{array}{r} 9 \\ - 6 \\ \hline \end{array}$$

15.
$$\begin{array}{r} 2 \\ + 8 \\ \hline \end{array}$$

16.
$$\begin{array}{r} 10 \\ - 8 \\ \hline \end{array}$$

17.
$$\begin{array}{r} 10 \\ - 2 \\ \hline \end{array}$$

18.
$$\begin{array}{r} 8 \\ + 2 \\ \hline \end{array}$$

19.
$$\begin{array}{r} 4 \\ - 1 \\ \hline \end{array}$$

20.
$$\begin{array}{r} 3 \\ + 1 \\ \hline \end{array}$$

21.
$$\begin{array}{r} 4 \\ - 3 \\ \hline \end{array}$$

22.
$$\begin{array}{r} 6 \\ - 1 \\ \hline \end{array}$$

23.
$$\begin{array}{r} 5 \\ + 1 \\ \hline \end{array}$$

24.
$$\begin{array}{r} 6 \\ - 5 \\ \hline \end{array}$$

25.
$$\begin{array}{r} 11 \\ - 2 \\ \hline \end{array}$$

26.
$$\begin{array}{r} 2 \\ + 9 \\ \hline \end{array}$$

Práctica de operaciones

Suma o resta.

1. $9 - 7 = \underline{\quad}$	2. $7 + 2 = \underline{\quad}$	3. $9 - 2 = \underline{\quad}$
4. $1 + 4 = \underline{\quad}$	5. $5 - 1 = \underline{\quad}$	6. $5 - 4 = \underline{\quad}$

7. $\begin{array}{r} 7 \\ - 2 \\ \hline \end{array}$	8. $\begin{array}{r} 5 \\ + 2 \\ \hline \end{array}$	9. $\begin{array}{r} 7 \\ - 5 \\ \hline \end{array}$	10. $\begin{array}{r} 6 \\ - 1 \\ \hline \end{array}$	11. $\begin{array}{r} 6 \\ - 5 \\ \hline \end{array}$
--	--	--	---	---

12. $\begin{array}{r} 5 \\ + 1 \\ \hline \end{array}$	13. $\begin{array}{r} 9 \\ - 3 \\ \hline \end{array}$	14. $\begin{array}{r} 9 \\ - 6 \\ \hline \end{array}$	15. $\begin{array}{r} 2 \\ + 8 \\ \hline \end{array}$	16. $\begin{array}{r} 10 \\ - 8 \\ \hline \end{array}$
---	---	---	---	--

17. $\begin{array}{r} 10 \\ - 2 \\ \hline \end{array}$	18. $\begin{array}{r} 8 \\ + 2 \\ \hline \end{array}$	19. $\begin{array}{r} 4 \\ - 1 \\ \hline \end{array}$	20. $\begin{array}{r} 3 \\ + 1 \\ \hline \end{array}$	21. $\begin{array}{r} 4 \\ - 3 \\ \hline \end{array}$
--	---	---	---	---

22. $\begin{array}{r} 6 \\ - 1 \\ \hline \end{array}$	23. $\begin{array}{r} 5 \\ + 1 \\ \hline \end{array}$	24. $\begin{array}{r} 6 \\ - 5 \\ \hline \end{array}$	25. $\begin{array}{r} 11 \\ - 2 \\ \hline \end{array}$	26. $\begin{array}{r} 2 \\ + 9 \\ \hline \end{array}$
---	---	---	--	---

Name _____

Date _____

Facts Practice

Add.

1. $10 + 7 = \underline{\quad}$ | 2. $10 + 4 = \underline{\quad}$ | 3. $5 + 10 = \underline{\quad}$

4. $10 + 2 = \underline{\quad}$ | 5. $6 + 10 = \underline{\quad}$ | 6. $9 + 10 = \underline{\quad}$

7.
$$\begin{array}{r} 10 \\ + 10 \\ \hline \end{array}$$

8.
$$\begin{array}{r} 10 \\ + 5 \\ \hline \end{array}$$

9.
$$\begin{array}{r} 7 \\ + 10 \\ \hline \end{array}$$

10.
$$\begin{array}{r} 10 \\ + 9 \\ \hline \end{array}$$

11.
$$\begin{array}{r} 10 \\ + 6 \\ \hline \end{array}$$

12.
$$\begin{array}{r} 10 \\ + 8 \\ \hline \end{array}$$

13.
$$\begin{array}{r} 10 \\ + 3 \\ \hline \end{array}$$

14.
$$\begin{array}{r} 10 \\ + 5 \\ \hline \end{array}$$

15.
$$\begin{array}{r} 10 \\ + 8 \\ \hline \end{array}$$

16.
$$\begin{array}{r} 4 \\ + 6 \\ \hline \end{array}$$

17.
$$\begin{array}{r} 10 \\ + 7 \\ \hline \end{array}$$

18.
$$\begin{array}{r} 10 \\ + 2 \\ \hline \end{array}$$

19.
$$\begin{array}{r} 10 \\ + 6 \\ \hline \end{array}$$

20.
$$\begin{array}{r} 10 \\ + 9 \\ \hline \end{array}$$

21.
$$\begin{array}{r} 10 \\ + 8 \\ \hline \end{array}$$

22.
$$\begin{array}{r} 6 \\ + 10 \\ \hline \end{array}$$

23.
$$\begin{array}{r} 9 \\ + 10 \\ \hline \end{array}$$

24.
$$\begin{array}{r} 10 \\ + 7 \\ \hline \end{array}$$

25.
$$\begin{array}{r} 8 \\ + 10 \\ \hline \end{array}$$

26.
$$\begin{array}{r} 10 \\ + 5 \\ \hline \end{array}$$

Práctica de operaciones

Suma.

1. $10 + 7 = \underline{\quad}$ | 2. $10 + 4 = \underline{\quad}$ | 3. $5 + 10 = \underline{\quad}$

4. $10 + 2 = \underline{\quad}$ | 5. $6 + 10 = \underline{\quad}$ | 6. $9 + 10 = \underline{\quad}$

7.
$$\begin{array}{r} 10 \\ + 10 \\ \hline \end{array}$$

8.
$$\begin{array}{r} 10 \\ + 5 \\ \hline \end{array}$$

9.
$$\begin{array}{r} 7 \\ + 10 \\ \hline \end{array}$$

10.
$$\begin{array}{r} 10 \\ + 9 \\ \hline \end{array}$$

11.
$$\begin{array}{r} 10 \\ + 6 \\ \hline \end{array}$$

12.
$$\begin{array}{r} 10 \\ + 8 \\ \hline \end{array}$$

13.
$$\begin{array}{r} 10 \\ + 3 \\ \hline \end{array}$$

14.
$$\begin{array}{r} 10 \\ + 5 \\ \hline \end{array}$$

15.
$$\begin{array}{r} 10 \\ + 8 \\ \hline \end{array}$$

16.
$$\begin{array}{r} 4 \\ + 6 \\ \hline \end{array}$$

17.
$$\begin{array}{r} 10 \\ + 7 \\ \hline \end{array}$$

18.
$$\begin{array}{r} 10 \\ + 2 \\ \hline \end{array}$$

19.
$$\begin{array}{r} 10 \\ + 6 \\ \hline \end{array}$$

20.
$$\begin{array}{r} 10 \\ + 9 \\ \hline \end{array}$$

21.
$$\begin{array}{r} 10 \\ + 8 \\ \hline \end{array}$$

22.
$$\begin{array}{r} 6 \\ + 10 \\ \hline \end{array}$$

23.
$$\begin{array}{r} 9 \\ + 10 \\ \hline \end{array}$$

24.
$$\begin{array}{r} 10 \\ + 7 \\ \hline \end{array}$$

25.
$$\begin{array}{r} 8 \\ + 10 \\ \hline \end{array}$$

26.
$$\begin{array}{r} 10 \\ + 5 \\ \hline \end{array}$$

Name _____

Date _____

Facts Practice

Find the sum.

1. $12 + 7 = \underline{\quad}$

2. $19 + 1 = \underline{\quad}$

3. $5 + 10 = \underline{\quad}$

4. $14 + 2 = \underline{\quad}$

5. $16 + 4 = \underline{\quad}$

6. $13 + 7 = \underline{\quad}$

7.
$$\begin{array}{r} 10 \\ + 8 \\ \hline \end{array}$$

8.
$$\begin{array}{r} 15 \\ + 5 \\ \hline \end{array}$$

9.
$$\begin{array}{r} 17 \\ + 3 \\ \hline \end{array}$$

10.
$$\begin{array}{r} 11 \\ + 9 \\ \hline \end{array}$$

11.
$$\begin{array}{r} 14 \\ + 6 \\ \hline \end{array}$$

12.
$$\begin{array}{r} 10 \\ + 4 \\ \hline \end{array}$$

13.
$$\begin{array}{r} 17 \\ + 2 \\ \hline \end{array}$$

14.
$$\begin{array}{r} 19 \\ + 1 \\ \hline \end{array}$$

15.
$$\begin{array}{r} 12 \\ + 8 \\ \hline \end{array}$$

16.
$$\begin{array}{r} 15 \\ + 3 \\ \hline \end{array}$$

17.
$$\begin{array}{r} 16 \\ + 1 \\ \hline \end{array}$$

18.
$$\begin{array}{r} 18 \\ + 2 \\ \hline \end{array}$$

19.
$$\begin{array}{r} 14 \\ + 5 \\ \hline \end{array}$$

20.
$$\begin{array}{r} 11 \\ + 3 \\ \hline \end{array}$$

21.
$$\begin{array}{r} 13 \\ + 6 \\ \hline \end{array}$$

22.
$$\begin{array}{r} 14 \\ + 4 \\ \hline \end{array}$$

23.
$$\begin{array}{r} 19 \\ + 1 \\ \hline \end{array}$$

24.
$$\begin{array}{r} 10 \\ + 7 \\ \hline \end{array}$$

25.
$$\begin{array}{r} 17 \\ + 2 \\ \hline \end{array}$$

26.
$$\begin{array}{r} 12 \\ + 5 \\ \hline \end{array}$$

Práctica de operaciones

Calcula la suma.

1. $12 + 7 = \underline{\quad}$	2. $19 + 1 = \underline{\quad}$	3. $5 + 10 = \underline{\quad}$
---------------------------------	---------------------------------	---------------------------------

4. $14 + 2 = \underline{\quad}$	5. $16 + 4 = \underline{\quad}$	6. $13 + 7 = \underline{\quad}$
---------------------------------	---------------------------------	---------------------------------

7. $\begin{array}{r} 10 \\ + 8 \\ \hline \end{array}$

8. $\begin{array}{r} 15 \\ + 5 \\ \hline \end{array}$

9. $\begin{array}{r} 17 \\ + 3 \\ \hline \end{array}$

10. $\begin{array}{r} 11 \\ + 9 \\ \hline \end{array}$
--

11. $\begin{array}{r} 14 \\ + 6 \\ \hline \end{array}$
--

12. $\begin{array}{r} 10 \\ + 4 \\ \hline \end{array}$
--

13. $\begin{array}{r} 17 \\ + 2 \\ \hline \end{array}$
--

14. $\begin{array}{r} 19 \\ + 1 \\ \hline \end{array}$
--

15. $\begin{array}{r} 12 \\ + 8 \\ \hline \end{array}$
--

16. $\begin{array}{r} 15 \\ + 3 \\ \hline \end{array}$
--

17. $\begin{array}{r} 16 \\ + 1 \\ \hline \end{array}$
--

18. $\begin{array}{r} 18 \\ + 2 \\ \hline \end{array}$
--

19. $\begin{array}{r} 14 \\ + 5 \\ \hline \end{array}$
--

20. $\begin{array}{r} 11 \\ + 3 \\ \hline \end{array}$
--

21. $\begin{array}{r} 13 \\ + 6 \\ \hline \end{array}$
--

22. $\begin{array}{r} 14 \\ + 4 \\ \hline \end{array}$
--

23. $\begin{array}{r} 19 \\ + 1 \\ \hline \end{array}$
--

24. $\begin{array}{r} 10 \\ + 7 \\ \hline \end{array}$
--

25. $\begin{array}{r} 17 \\ + 2 \\ \hline \end{array}$
--

26. $\begin{array}{r} 12 \\ + 5 \\ \hline \end{array}$
--

Name _____

Date _____

Facts Practice

Subtract.

1. $17 - 6 = \underline{\quad}$ | 2. $15 - 5 = \underline{\quad}$ | 3. $13 - 2 = \underline{\quad}$

4. $18 - 3 = \underline{\quad}$ | 5. $16 - 4 = \underline{\quad}$ | 6. $14 - 6 = \underline{\quad}$

7.
$$\begin{array}{r} 10 \\ - 2 \\ \hline \end{array}$$

8.
$$\begin{array}{r} 18 \\ - 7 \\ \hline \end{array}$$

9.
$$\begin{array}{r} 14 \\ - 3 \\ \hline \end{array}$$

10.
$$\begin{array}{r} 16 \\ - 3 \\ \hline \end{array}$$

11.
$$\begin{array}{r} 19 \\ - 4 \\ \hline \end{array}$$

12.
$$\begin{array}{r} 17 \\ - 5 \\ \hline \end{array}$$

13.
$$\begin{array}{r} 11 \\ - 8 \\ \hline \end{array}$$

14.
$$\begin{array}{r} 13 \\ - 2 \\ \hline \end{array}$$

15.
$$\begin{array}{r} 15 \\ - 3 \\ \hline \end{array}$$

16.
$$\begin{array}{r} 10 \\ - 6 \\ \hline \end{array}$$

17.
$$\begin{array}{r} 14 \\ - 2 \\ \hline \end{array}$$

18.
$$\begin{array}{r} 19 \\ - 6 \\ \hline \end{array}$$

19.
$$\begin{array}{r} 14 \\ - 9 \\ \hline \end{array}$$

20.
$$\begin{array}{r} 18 \\ - 5 \\ \hline \end{array}$$

21.
$$\begin{array}{r} 17 \\ - 6 \\ \hline \end{array}$$

22.
$$\begin{array}{r} 16 \\ - 4 \\ \hline \end{array}$$

23.
$$\begin{array}{r} 18 \\ - 2 \\ \hline \end{array}$$

24.
$$\begin{array}{r} 19 \\ - 7 \\ \hline \end{array}$$

25.
$$\begin{array}{r} 12 \\ - 3 \\ \hline \end{array}$$

26.
$$\begin{array}{r} 18 \\ - 8 \\ \hline \end{array}$$

Práctica de operaciones

Resta.

1. $17 - 6 = \underline{\quad}$ | 2. $15 - 5 = \underline{\quad}$ | 3. $13 - 2 = \underline{\quad}$

4. $18 - 3 = \underline{\quad}$ | 5. $16 - 4 = \underline{\quad}$ | 6. $14 - 6 = \underline{\quad}$

7.
$$\begin{array}{r} 10 \\ - 2 \\ \hline \end{array}$$

8.
$$\begin{array}{r} 18 \\ - 7 \\ \hline \end{array}$$

9.
$$\begin{array}{r} 14 \\ - 3 \\ \hline \end{array}$$

10.
$$\begin{array}{r} 16 \\ - 3 \\ \hline \end{array}$$

11.
$$\begin{array}{r} 19 \\ - 4 \\ \hline \end{array}$$

12.
$$\begin{array}{r} 17 \\ - 5 \\ \hline \end{array}$$

13.
$$\begin{array}{r} 11 \\ - 8 \\ \hline \end{array}$$

14.
$$\begin{array}{r} 13 \\ - 2 \\ \hline \end{array}$$

15.
$$\begin{array}{r} 15 \\ - 3 \\ \hline \end{array}$$

16.
$$\begin{array}{r} 10 \\ - 6 \\ \hline \end{array}$$

17.
$$\begin{array}{r} 14 \\ - 2 \\ \hline \end{array}$$

18.
$$\begin{array}{r} 19 \\ - 6 \\ \hline \end{array}$$

19.
$$\begin{array}{r} 14 \\ - 9 \\ \hline \end{array}$$

20.
$$\begin{array}{r} 18 \\ - 5 \\ \hline \end{array}$$

21.
$$\begin{array}{r} 17 \\ - 6 \\ \hline \end{array}$$

22.
$$\begin{array}{r} 16 \\ - 4 \\ \hline \end{array}$$

23.
$$\begin{array}{r} 18 \\ - 2 \\ \hline \end{array}$$

24.
$$\begin{array}{r} 19 \\ - 7 \\ \hline \end{array}$$

25.
$$\begin{array}{r} 12 \\ - 3 \\ \hline \end{array}$$

26.
$$\begin{array}{r} 18 \\ - 8 \\ \hline \end{array}$$

Name _____

Date _____

Facts Practice

Add or subtract.

1. $17 - 6 = \underline{\quad}$ | 2. $15 + 5 = \underline{\quad}$ | 3. $13 - 2 = \underline{\quad}$

4. $17 - 3 = \underline{\quad}$ | 5. $16 + 4 = \underline{\quad}$ | 6. $14 - 3 = \underline{\quad}$

7.
$$\begin{array}{r} 9 \\ - 2 \\ \hline \end{array}$$

8.
$$\begin{array}{r} 18 \\ - 4 \\ \hline \end{array}$$

9.
$$\begin{array}{r} 17 \\ + 3 \\ \hline \end{array}$$

10.
$$\begin{array}{r} 16 \\ - 0 \\ \hline \end{array}$$

11.
$$\begin{array}{r} 19 \\ + 4 \\ \hline \end{array}$$

12.
$$\begin{array}{r} 17 \\ - 5 \\ \hline \end{array}$$

13.
$$\begin{array}{r} 11 \\ + 6 \\ \hline \end{array}$$

14.
$$\begin{array}{r} 15 \\ - 2 \\ \hline \end{array}$$

15.
$$\begin{array}{r} 12 \\ + 3 \\ \hline \end{array}$$

16.
$$\begin{array}{r} 10 \\ - 6 \\ \hline \end{array}$$

17.
$$\begin{array}{r} 14 \\ - 7 \\ \hline \end{array}$$

18.
$$\begin{array}{r} 16 \\ + 4 \\ \hline \end{array}$$

19.
$$\begin{array}{r} 14 \\ - 9 \\ \hline \end{array}$$

20.
$$\begin{array}{r} 18 \\ + 5 \\ \hline \end{array}$$

21.
$$\begin{array}{r} 19 \\ - 9 \\ \hline \end{array}$$

22.
$$\begin{array}{r} 16 \\ - 4 \\ \hline \end{array}$$

23.
$$\begin{array}{r} 18 \\ - 2 \\ \hline \end{array}$$

24.
$$\begin{array}{r} 19 \\ - 7 \\ \hline \end{array}$$

25.
$$\begin{array}{r} 12 \\ - 3 \\ \hline \end{array}$$

26.
$$\begin{array}{r} 18 \\ - 8 \\ \hline \end{array}$$

Práctica de operaciones

Multiplicar en cualquier orden.

1. $3 \times 2 = \underline{\quad}$ 2. $2 \times 3 = \underline{\quad}$ 3. $4 \times 1 = \underline{\quad}$

4. $1 \times 4 = \underline{\quad}$ 5. $5 \times 2 = \underline{\quad}$ 6. $2 \times 5 = \underline{\quad}$

7.
$$\begin{array}{r} 8 \\ \times 3 \\ \hline \end{array}$$
 8.
$$\begin{array}{r} 3 \\ \times 8 \\ \hline \end{array}$$
 9.
$$\begin{array}{r} 5 \\ \times 4 \\ \hline \end{array}$$
 10.
$$\begin{array}{r} 4 \\ \times 5 \\ \hline \end{array}$$
 11.
$$\begin{array}{r} 6 \\ \times 3 \\ \hline \end{array}$$

12.
$$\begin{array}{r} 3 \\ \times 6 \\ \hline \end{array}$$
 13.
$$\begin{array}{r} 7 \\ \times 1 \\ \hline \end{array}$$
 14.
$$\begin{array}{r} 1 \\ \times 7 \\ \hline \end{array}$$
 15.
$$\begin{array}{r} 2 \\ \times 8 \\ \hline \end{array}$$
 16.
$$\begin{array}{r} 8 \\ \times 2 \\ \hline \end{array}$$

17.
$$\begin{array}{r} 3 \\ \times 5 \\ \hline \end{array}$$
 18.
$$\begin{array}{r} 5 \\ \times 3 \\ \hline \end{array}$$
 19.
$$\begin{array}{r} 9 \\ \times 1 \\ \hline \end{array}$$
 20.
$$\begin{array}{r} 1 \\ \times 9 \\ \hline \end{array}$$
 21.
$$\begin{array}{r} 5 \\ \times 6 \\ \hline \end{array}$$

22.
$$\begin{array}{r} 6 \\ \times 5 \\ \hline \end{array}$$
 23.
$$\begin{array}{r} 7 \\ \times 4 \\ \hline \end{array}$$
 24.
$$\begin{array}{r} 4 \\ \times 7 \\ \hline \end{array}$$
 25.
$$\begin{array}{r} 8 \\ \times 3 \\ \hline \end{array}$$
 26.
$$\begin{array}{r} 3 \\ \times 8 \\ \hline \end{array}$$

$4 + 1 =$

$1 + 4 =$

$3 + 2 =$

$2 + 3 =$

$3 + 0 =$

$0 + 3 =$

$$\begin{array}{r} 2 \\ + 1 \\ \hline \end{array}$$

$$\begin{array}{r} 1 \\ + 2 \\ \hline \end{array}$$

$$\begin{array}{r} 3 \\ + 2 \\ \hline \end{array}$$

$$\begin{array}{r} 2 \\ + 3 \\ \hline \end{array}$$

$$\begin{array}{r} 5 \\ + 3 \\ \hline \end{array}$$

$$\begin{array}{r} 3 \\ + 5 \\ \hline \end{array}$$

$$\begin{array}{r} 6 \\ + 4 \\ \hline \end{array}$$

$$\begin{array}{r} 4 \\ + 6 \\ \hline \end{array}$$

$2 + 7 =$

$9 + 1 =$

$4 + 2 =$

$1 + 6 =$

$5 + 1 =$

$8 + 2 =$

$$\begin{array}{r} 1 \\ +4 \\ \hline \end{array}$$

$$\begin{array}{r} 9 \\ +2 \\ \hline \end{array}$$

$$\begin{array}{r} 1 \\ +2 \\ \hline \end{array}$$

$$\begin{array}{r} 1 \\ +6 \\ \hline \end{array}$$

$$\begin{array}{r} 5 \\ +1 \\ \hline \end{array}$$

$$\begin{array}{r} 1 \\ +8 \\ \hline \end{array}$$

$$\begin{array}{r} 10 \\ +2 \\ \hline \end{array}$$

$$\begin{array}{r} 6 \\ +2 \\ \hline \end{array}$$

$5 + 5 =$

$4 + 4 =$

$2 + 2 =$

$3 + 3 =$

$7 + 7 =$

$9 + 9 =$

$$\begin{array}{r} 8 \\ +8 \\ \hline \end{array}$$

$$\begin{array}{r} 0 \\ +0 \\ \hline \end{array}$$

$$\begin{array}{r} 1 \\ +1 \\ \hline \end{array}$$

$$\begin{array}{r} 6 \\ +6 \\ \hline \end{array}$$

$$\begin{array}{r} 3 \\ +3 \\ \hline \end{array}$$

$$\begin{array}{r} 5 \\ +5 \\ \hline \end{array}$$

$$\begin{array}{r} 4 \\ +4 \\ \hline \end{array}$$

$$\begin{array}{r} 2 \\ +2 \\ \hline \end{array}$$

$3 + 7 =$

$2 + 8 =$

$4 + 6 =$

$7 + 3 =$

$5 + 5 =$

$6 + 4 =$

$$\begin{array}{r} 9 \\ + 1 \\ \hline \end{array}$$

$$\begin{array}{r} 10 \\ + 0 \\ \hline \end{array}$$

$$\begin{array}{r} 3 \\ + 7 \\ \hline \end{array}$$

$$\begin{array}{r} 4 \\ + 6 \\ \hline \end{array}$$

$$\begin{array}{r} 8 \\ + 2 \\ \hline \end{array}$$

$$\begin{array}{r} 5 \\ + 5 \\ \hline \end{array}$$

$$\begin{array}{r} 1 \\ + 9 \\ \hline \end{array}$$

$$\begin{array}{r} 6 \\ + 4 \\ \hline \end{array}$$

$5 + 1 =$

$4 + 1 =$

$8 + 2 =$

$9 + 1 =$

$4 + 3 =$

$6 + 5 =$

$$\begin{array}{r} 3 \\ +6 \\ \hline \end{array}$$

$$\begin{array}{r} 4 \\ +8 \\ \hline \end{array}$$

$$\begin{array}{r} 6 \\ +4 \\ \hline \end{array}$$

$$\begin{array}{r} 7 \\ +2 \\ \hline \end{array}$$

$$\begin{array}{r} 8 \\ +2 \\ \hline \end{array}$$

$$\begin{array}{r} 5 \\ +5 \\ \hline \end{array}$$

$$\begin{array}{r} 10 \\ +0 \\ \hline \end{array}$$

$$\begin{array}{r} 9 \\ +1 \\ \hline \end{array}$$

$4 - 1 =$

$2 - 2 =$

$5 - 3 =$

$6 - 4 =$

$7 - 2 =$

$4 - 3 =$

$$\begin{array}{r} 5 \\ -4 \\ \hline \end{array}$$

$$\begin{array}{r} 9 \\ -3 \\ \hline \end{array}$$

$$\begin{array}{r} 6 \\ -2 \\ \hline \end{array}$$

$$\begin{array}{r} 8 \\ -5 \\ \hline \end{array}$$

$$\begin{array}{r} 2 \\ -2 \\ \hline \end{array}$$

$$\begin{array}{r} 5 \\ -4 \\ \hline \end{array}$$

$$\begin{array}{r} 7 \\ -3 \\ \hline \end{array}$$

$$\begin{array}{r} 3 \\ -1 \\ \hline \end{array}$$

$5 - 1 =$

$4 - 1 =$

$8 - 2 =$

$9 - 1 =$

$7 - 2 =$

$6 - 2 =$

$$\begin{array}{r} 3 \\ -2 \\ \hline \end{array}$$

$$\begin{array}{r} 4 \\ -1 \\ \hline \end{array}$$

$$\begin{array}{r} 6 \\ -1 \\ \hline \end{array}$$

$$\begin{array}{r} 7 \\ -1 \\ \hline \end{array}$$

$$\begin{array}{r} 8 \\ -1 \\ \hline \end{array}$$

$$\begin{array}{r} 5 \\ -1 \\ \hline \end{array}$$

$$\begin{array}{r} 10 \\ -2 \\ \hline \end{array}$$

$$\begin{array}{r} 2 \\ -1 \\ \hline \end{array}$$

$8 + 2 =$

$10 - 2 =$

$2 + 8 =$

$10 - 8 =$

$4 + 1 =$

$5 - 1 =$

$$\begin{array}{r} 1 \\ +4 \\ \hline \end{array}$$

$$\begin{array}{r} 5 \\ -4 \\ \hline \end{array}$$

$$\begin{array}{r} 7 \\ +2 \\ \hline \end{array}$$

$$\begin{array}{r} 9 \\ -2 \\ \hline \end{array}$$

$$\begin{array}{r} 9 \\ -7 \\ \hline \end{array}$$

$$\begin{array}{r} 8 \\ +1 \\ \hline \end{array}$$

$$\begin{array}{r} 9 \\ -1 \\ \hline \end{array}$$

$$\begin{array}{r} 9 \\ -8 \\ \hline \end{array}$$

$10 + 3 =$

$10 + 5 =$

$5 + 5 =$

$10 + 6 =$

$10 + 2 =$

$7 + 3 =$

$$\begin{array}{r} 6 \\ +4 \\ \hline \end{array}$$

$$\begin{array}{r} 10 \\ +1 \\ \hline \end{array}$$

$$\begin{array}{r} 10 \\ +9 \\ \hline \end{array}$$

$$\begin{array}{r} 8 \\ +2 \\ \hline \end{array}$$

$$\begin{array}{r} 10 \\ +7 \\ \hline \end{array}$$

$$\begin{array}{r} 10 \\ +4 \\ \hline \end{array}$$

$$\begin{array}{r} 10 \\ +8 \\ \hline \end{array}$$

$$\begin{array}{r} 5 \\ +5 \\ \hline \end{array}$$

$10 - 3 =$

$10 - 5 =$

$5 - 5 =$

$10 - 6 =$

$10 - 2 =$

$15 - 5 =$

$$\begin{array}{r} 5 \\ -2 \\ \hline \end{array}$$

$$\begin{array}{r} 10 \\ -1 \\ \hline \end{array}$$

$$\begin{array}{r} 10 \\ -9 \\ \hline \end{array}$$

$$\begin{array}{r} 8 \\ -2 \\ \hline \end{array}$$

$$\begin{array}{r} 10 \\ -7 \\ \hline \end{array}$$

$$\begin{array}{r} 10 \\ -4 \\ \hline \end{array}$$

$$\begin{array}{r} 10 \\ -8 \\ \hline \end{array}$$

$$\begin{array}{r} 15 \\ -5 \\ \hline \end{array}$$

$10 + 3 =$ $15 + 5 =$

$13 + 4 =$ $11 + 6 =$

$17 + 2 =$ $20 + 0 =$

$$\begin{array}{r} 12 \\ +3 \\ \hline \end{array}$$

$$\begin{array}{r} 10 \\ +7 \\ \hline \end{array}$$

$$\begin{array}{r} 14 \\ +5 \\ \hline \end{array}$$

$$\begin{array}{r} 16 \\ +4 \\ \hline \end{array}$$

$$\begin{array}{r} 13 \\ +7 \\ \hline \end{array}$$

$$\begin{array}{r} 15 \\ +3 \\ \hline \end{array}$$

$$\begin{array}{r} 18 \\ +1 \\ \hline \end{array}$$

$$\begin{array}{r} 17 \\ +2 \\ \hline \end{array}$$

$12 + 3 =$

$10 + 5 =$

$16 + 4 =$

$14 + 6 =$

$18 + 2 =$

$13 + 3 =$

$$\begin{array}{r} 18 \\ +4 \\ \hline \end{array}$$

$$\begin{array}{r} 11 \\ +6 \\ \hline \end{array}$$

$$\begin{array}{r} 15 \\ +5 \\ \hline \end{array}$$

$$\begin{array}{r} 17 \\ +0 \\ \hline \end{array}$$

$$\begin{array}{r} 13 \\ +7 \\ \hline \end{array}$$

$$\begin{array}{r} 19 \\ +3 \\ \hline \end{array}$$

$$\begin{array}{r} 18 \\ +5 \\ \hline \end{array}$$

$$\begin{array}{r} 20 \\ +2 \\ \hline \end{array}$$

$19 - 3 =$

$10 - 5 =$

$16 - 4 =$

$13 - 6 =$

$12 - 2 =$

$17 - 3 =$

14

11

15

10

-4

-6

-5

-0

13

19

17

20

-3

-2

-5

-2

$15 - 5 =$

$19 - 3 =$

$12 - 4 =$

$17 - 9 =$

$20 - 7 =$

$15 - 3 =$

$$\begin{array}{r} 18 \\ -2 \\ \hline \end{array}$$

$$\begin{array}{r} 14 \\ -5 \\ \hline \end{array}$$

$$\begin{array}{r} 11 \\ -8 \\ \hline \end{array}$$

$$\begin{array}{r} 20 \\ -5 \\ \hline \end{array}$$

$$\begin{array}{r} 15 \\ -4 \\ \hline \end{array}$$

$$\begin{array}{r} 16 \\ -3 \\ \hline \end{array}$$

$$\begin{array}{r} 13 \\ -5 \\ \hline \end{array}$$

$$\begin{array}{r} 17 \\ -7 \\ \hline \end{array}$$

$3 + 3 =$

$4 + 8 =$

$15 - 5 =$

$2 + 9 =$

$8 + 7 =$

$12 - 6 =$

$$\begin{array}{r} 12 \\ +3 \\ \hline \end{array}$$

$$\begin{array}{r} 7 \\ -5 \\ \hline \end{array}$$

$$\begin{array}{r} 14 \\ +4 \\ \hline \end{array}$$

$$\begin{array}{r} 6 \\ -3 \\ \hline \end{array}$$

$$\begin{array}{r} 7 \\ +7 \\ \hline \end{array}$$

$$\begin{array}{r} 15 \\ -6 \\ \hline \end{array}$$

$$\begin{array}{r} 13 \\ -4 \\ \hline \end{array}$$

$$\begin{array}{r} 8 \\ +8 \\ \hline \end{array}$$

$8 + 3 =$

$9 - 3 =$

$14 + 5 =$

$5 + 6 =$

$10 + 3 =$

$15 - 7 =$

$$\begin{array}{r} 19 \\ -4 \\ \hline \end{array}$$

$$\begin{array}{r} 3 \\ +8 \\ \hline \end{array}$$

$$\begin{array}{r} 12 \\ -5 \\ \hline \end{array}$$

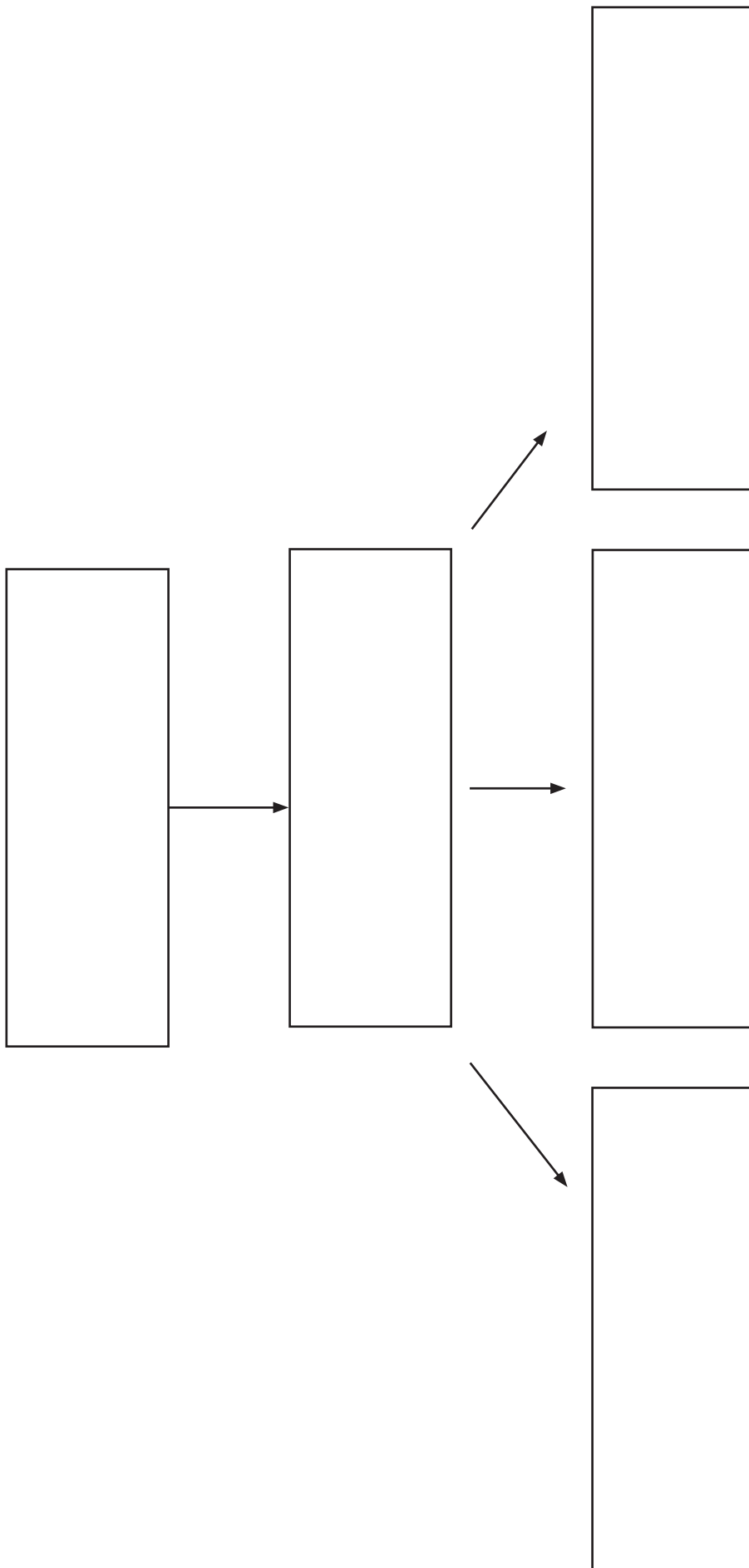
$$\begin{array}{r} 8 \\ -7 \\ \hline \end{array}$$

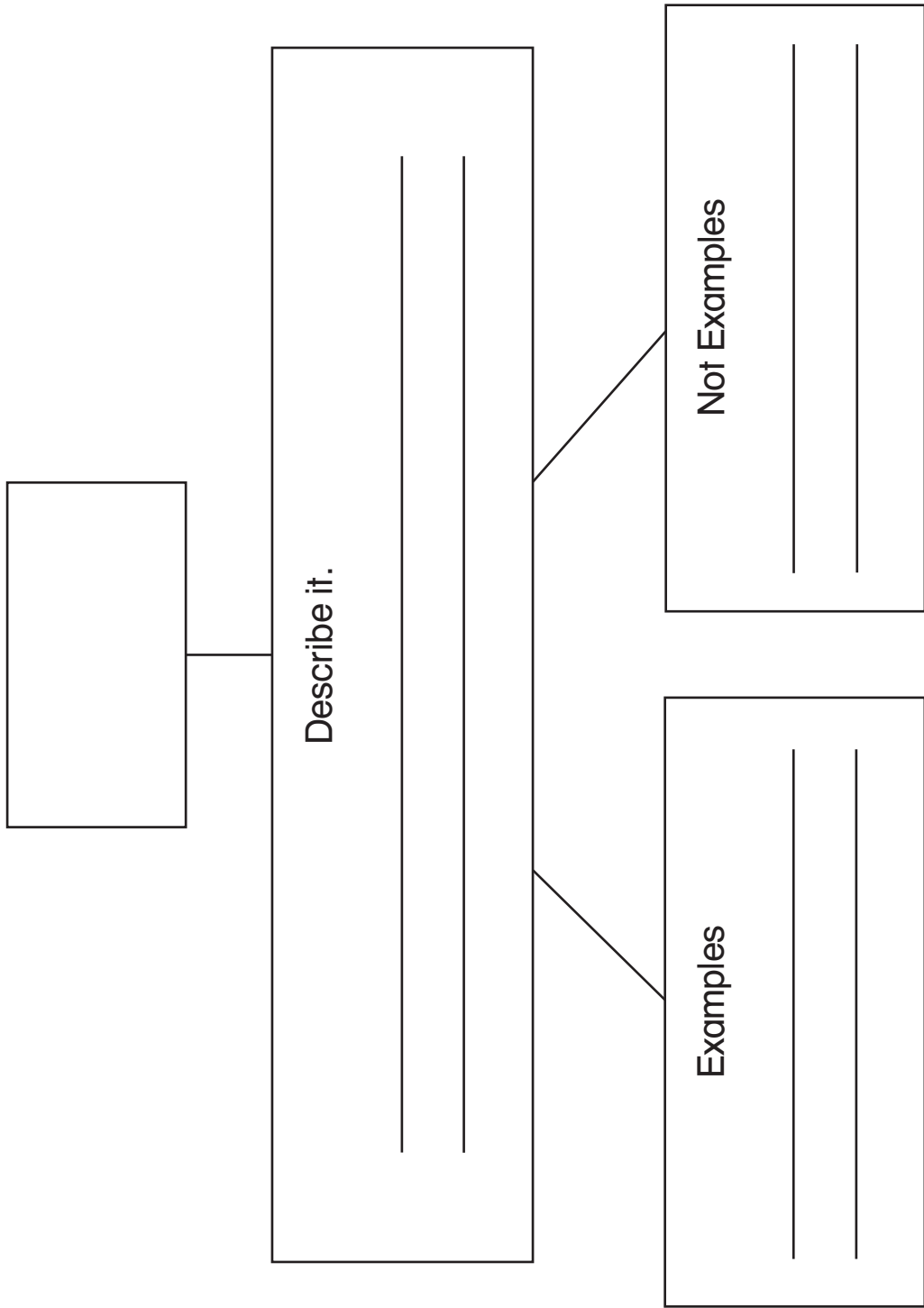
$$\begin{array}{r} 11 \\ -1 \\ \hline \end{array}$$

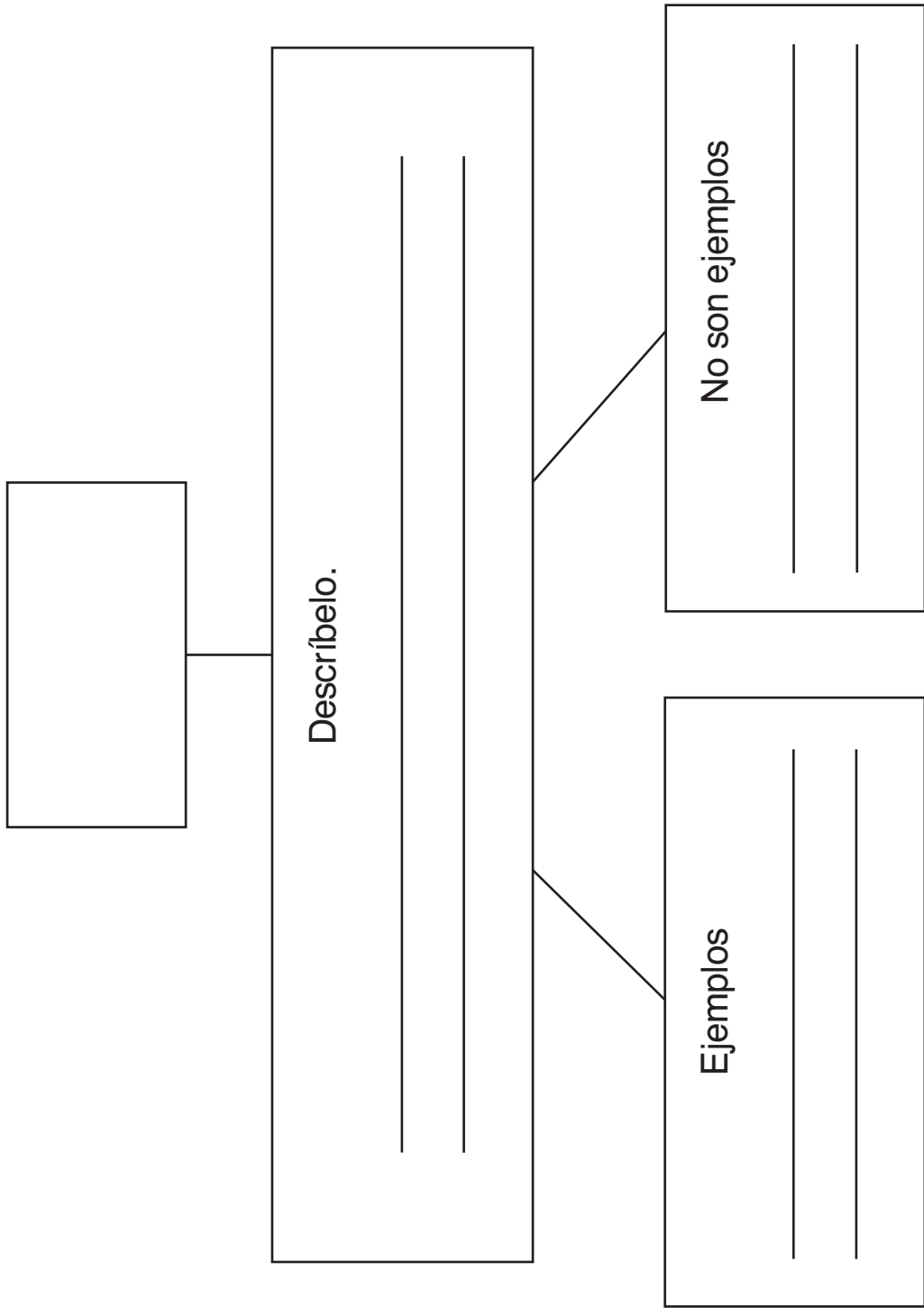
$$\begin{array}{r} 16 \\ +4 \\ \hline \end{array}$$

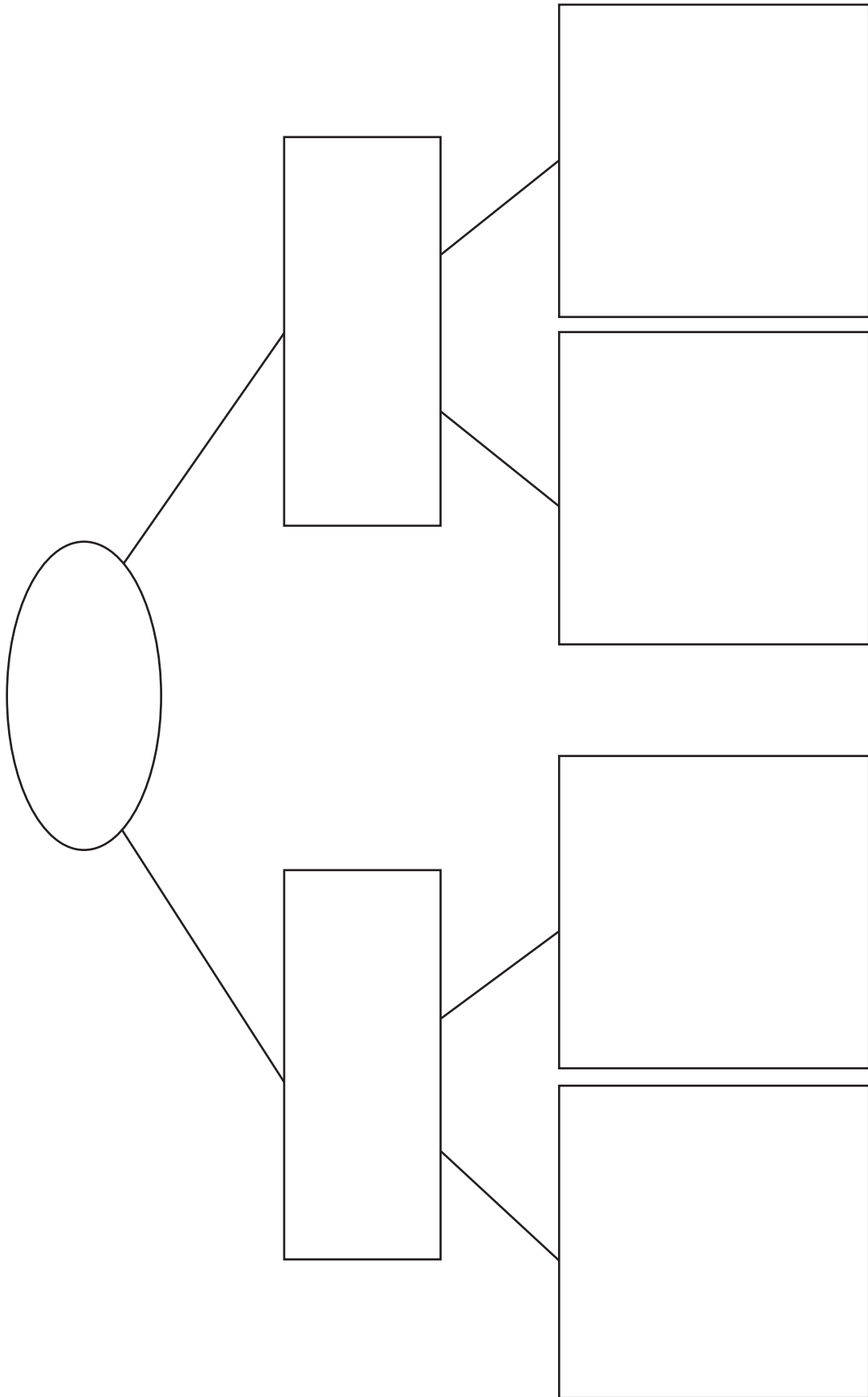
$$\begin{array}{r} 10 \\ +9 \\ \hline \end{array}$$

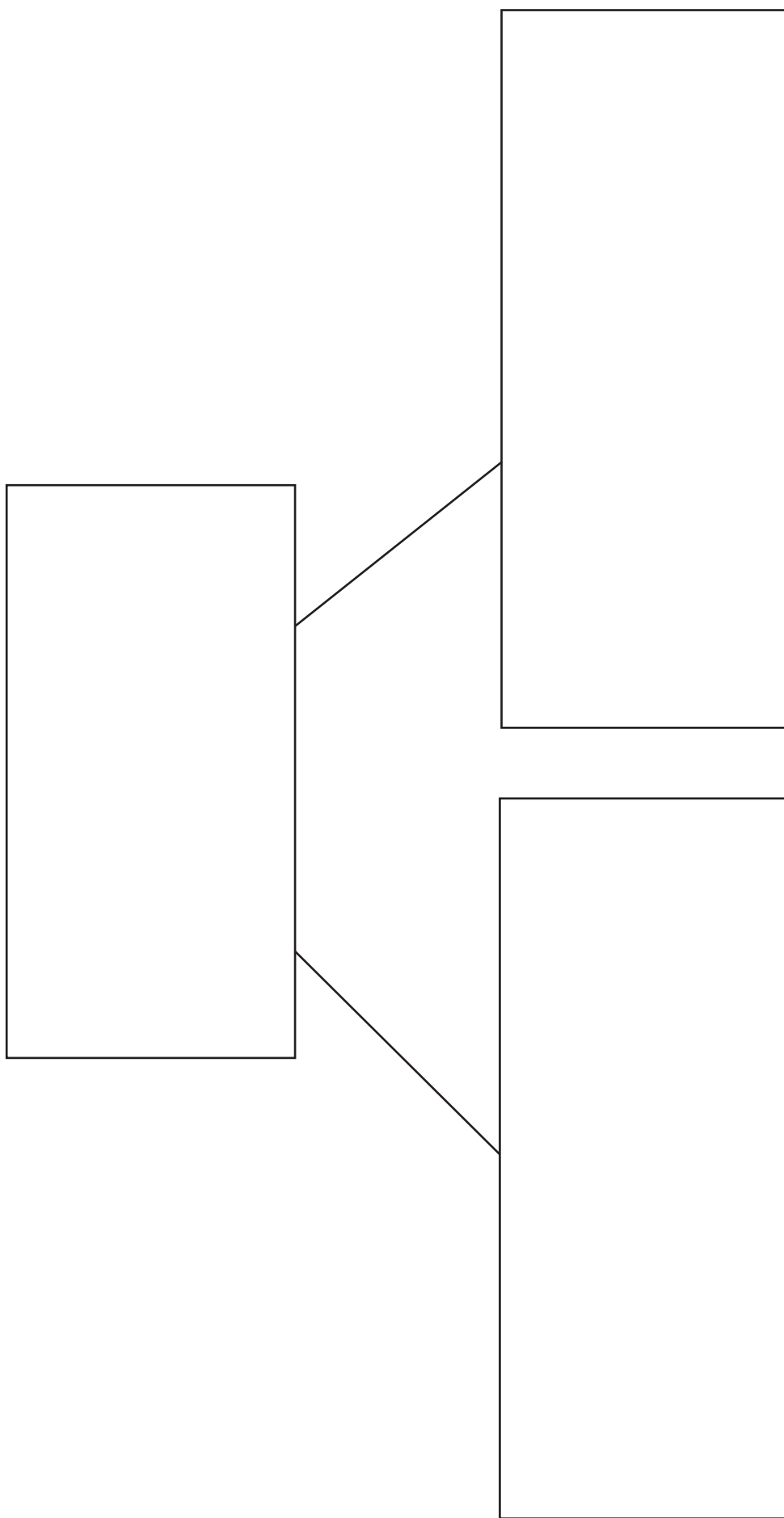
$$\begin{array}{r} 5 \\ -2 \\ \hline \end{array}$$















Not Examples

Examples

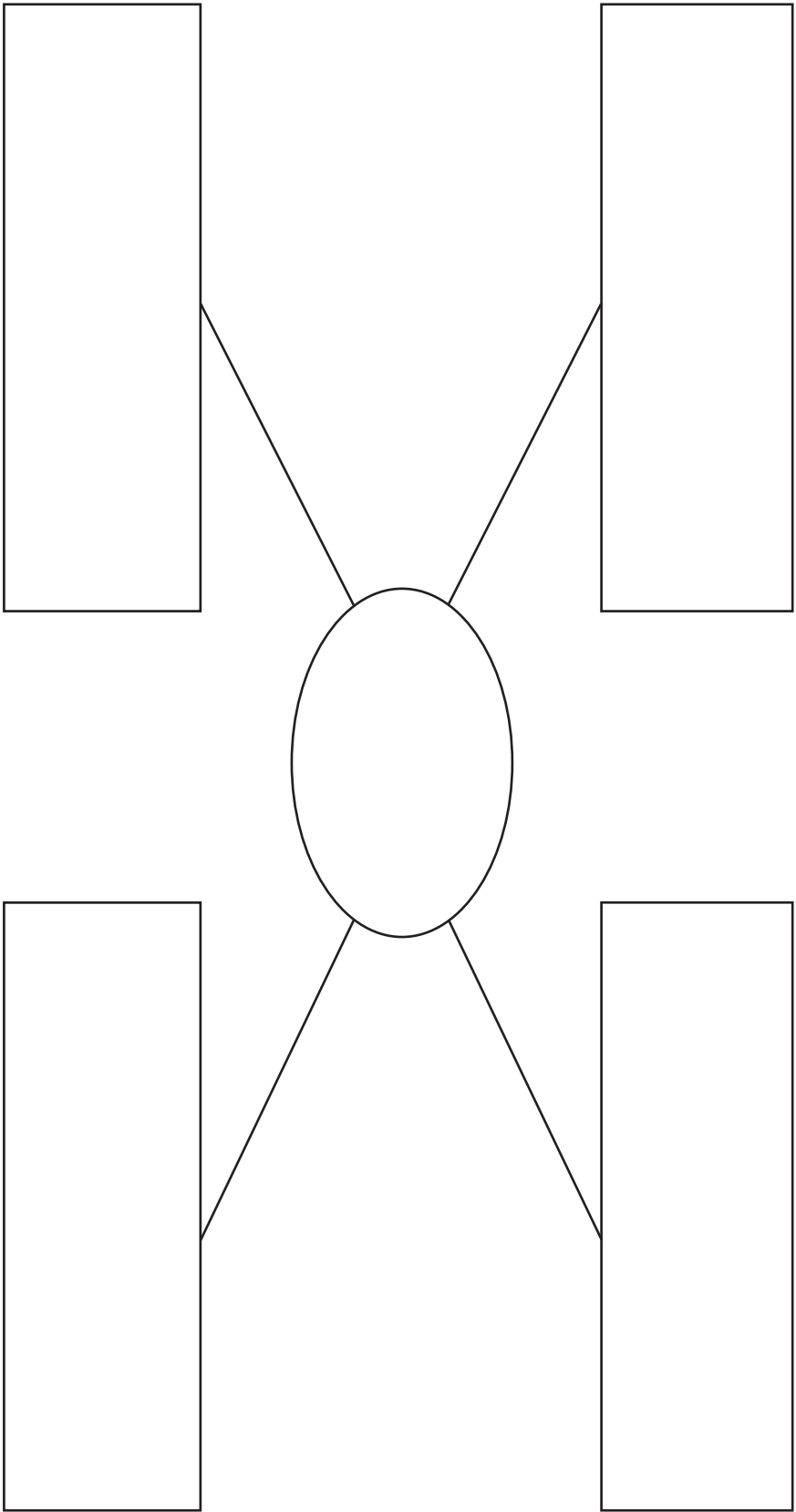


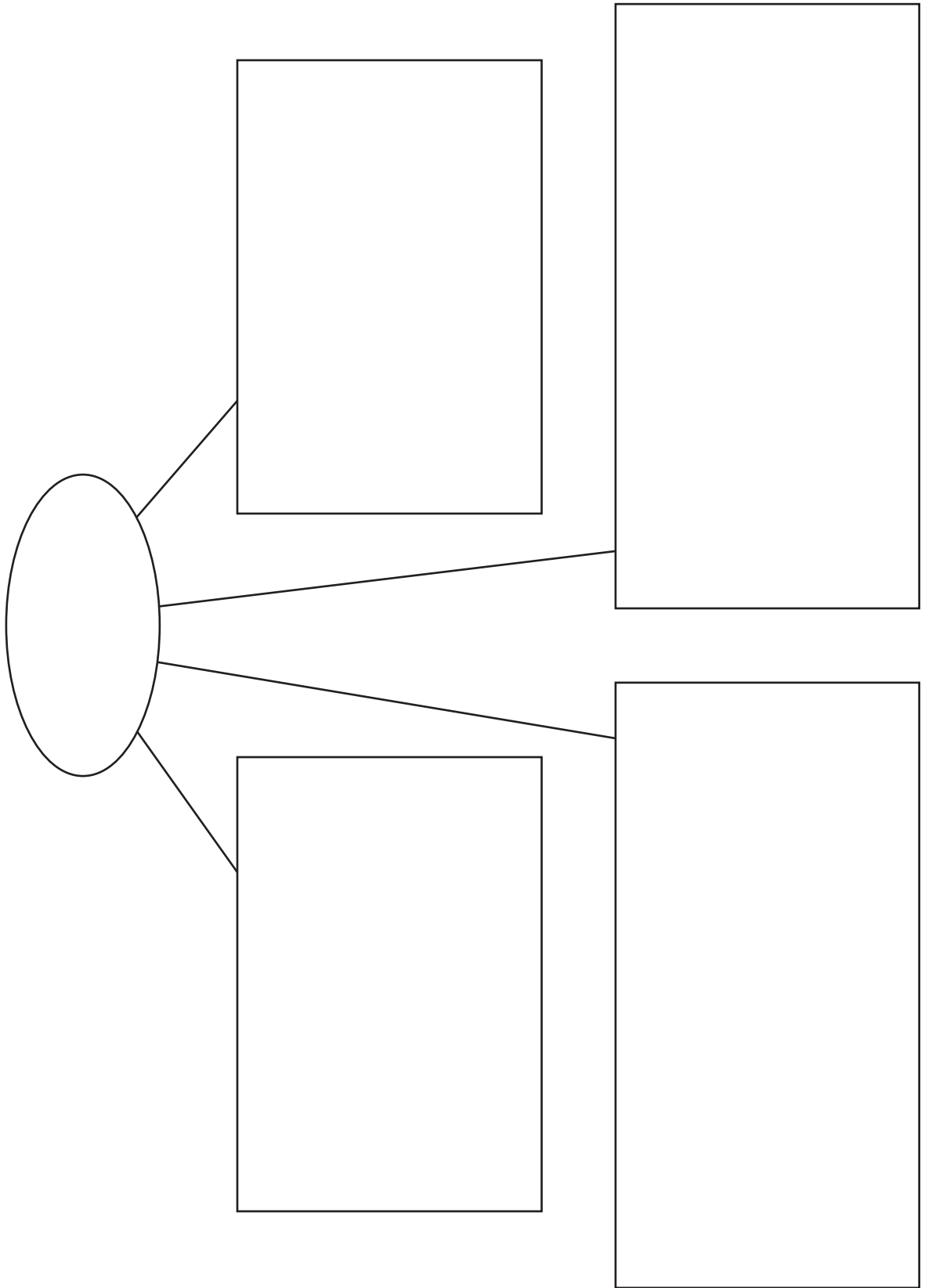
No son ejemplos

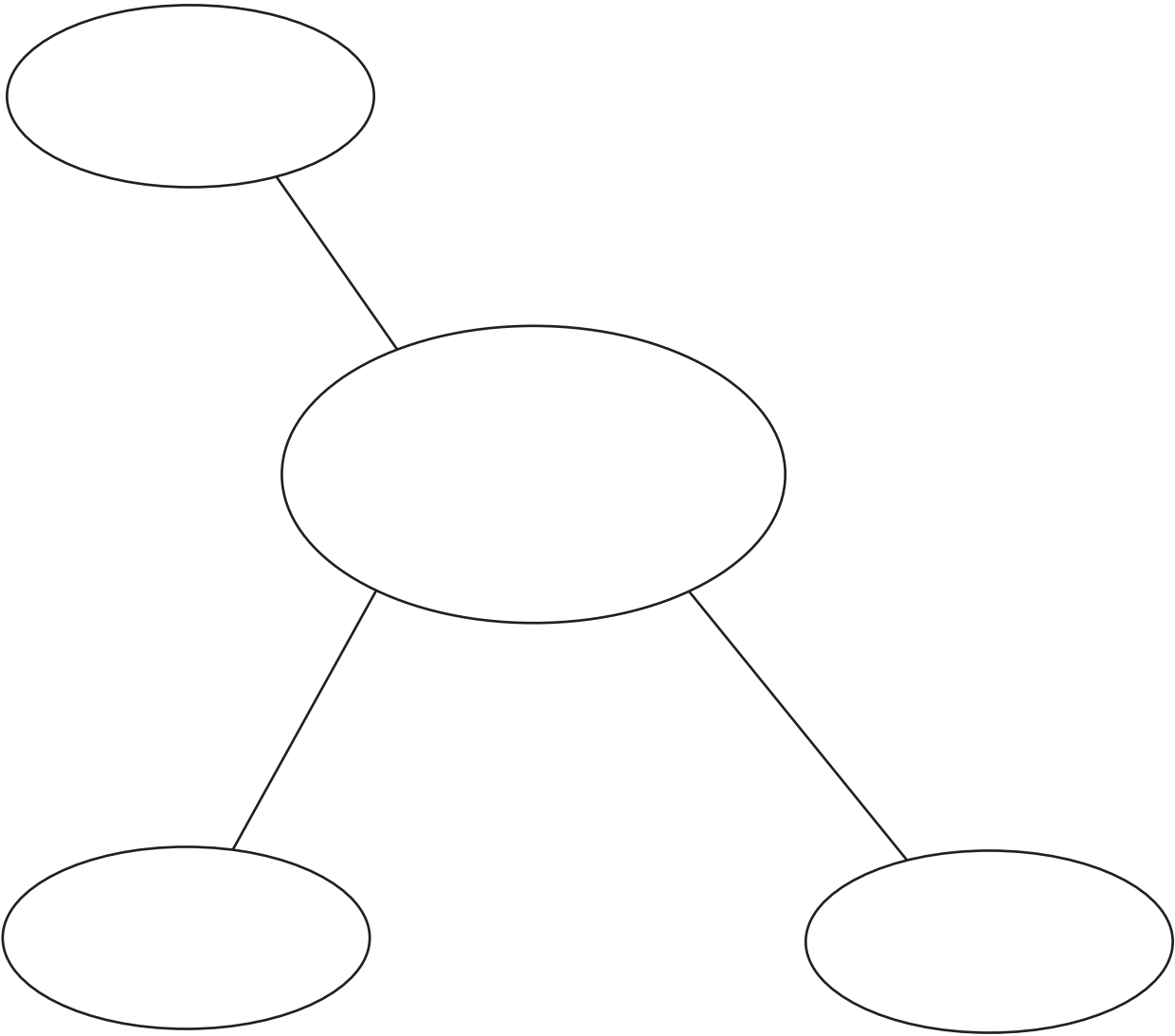
Ejemplos

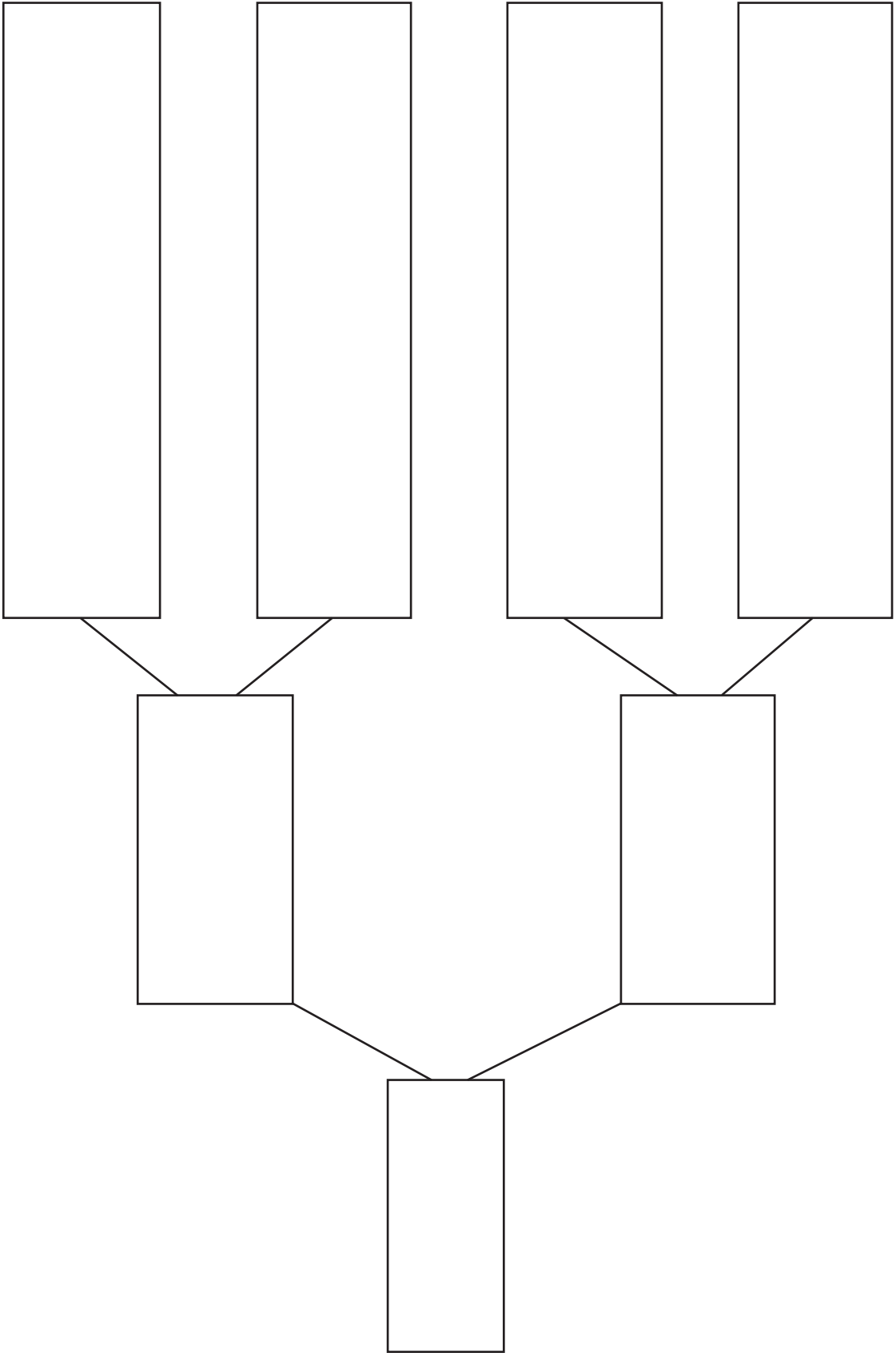
K Key Idea	I Information	M Memory Clue

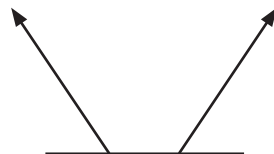


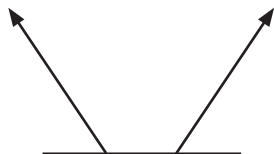

K Idea clave	I Información	M Pista de memoria

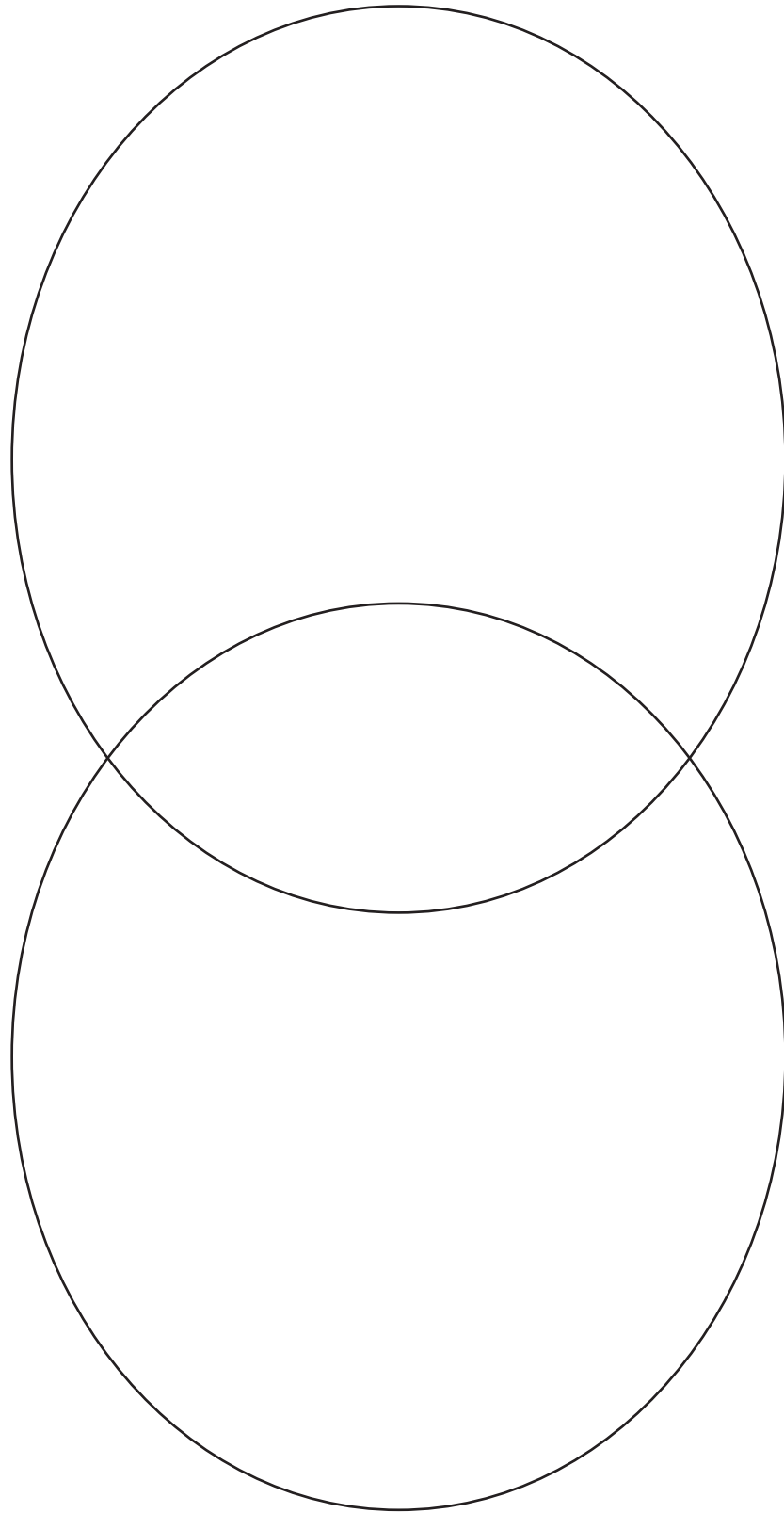


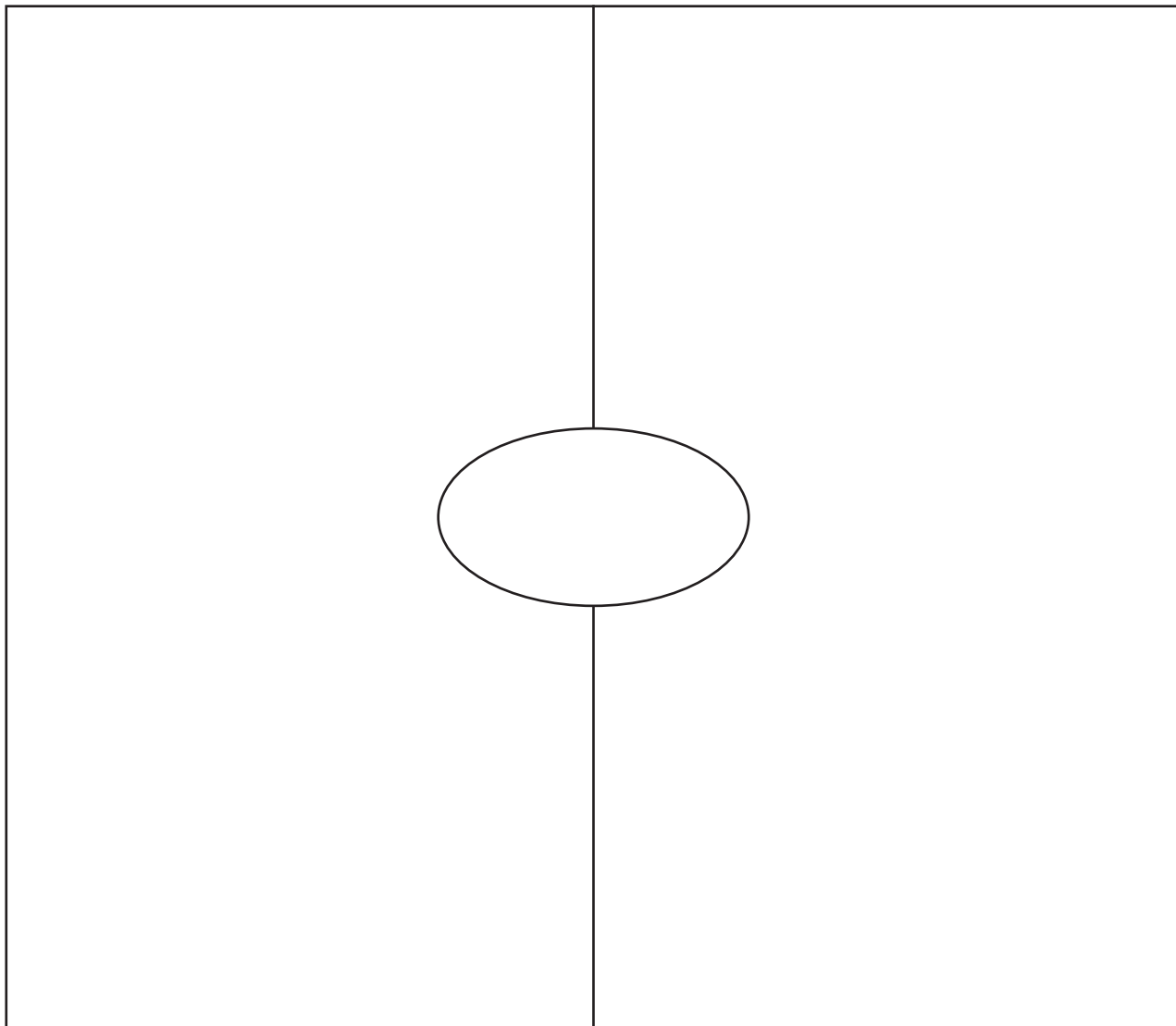












VOCABULARY CARDS

The vocabulary cards that appear on the following pages are the new vocabulary words that appear in *Go Math!* They appear in alphabetical order. Each word is listed with its corresponding definition or picture next to it. You can photocopy each page, fold the copy along the center line, and paste the two sides together to form a card with the word on the front and the definition or picture on the back.

Consider having students organize their vocabulary cards in Math Word Files—containers made from zip-top bags or small boxes, such as crayon boxes. Encourage students to consult their Math Word Files to confirm meanings and check spellings.



addend

addend
sumando

$5 + 7 = 12$
addends

A.M.

A.M.
a.m.

Times after midnight
and before noon are
written with **A.M.**

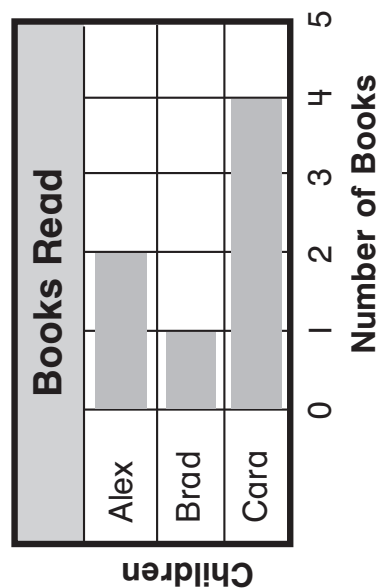
angle

angle
ángulo



bar graph

bar graph
gráfica de barras





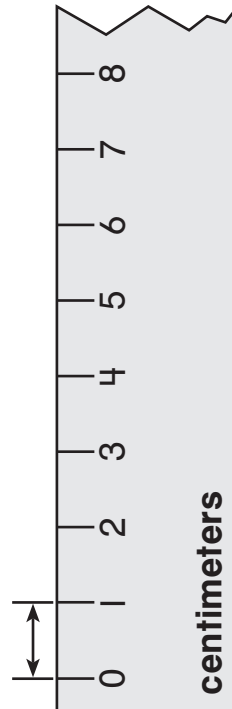
cent sign

cent sign
signo de centavo



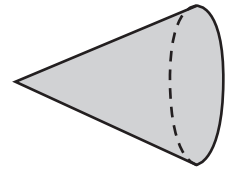
centimeter

centimeter
centímetro



cone

cone
cono



compare

compare
comparar

Use these symbols when
you **compare**: $>$, $<$, $=$.

$$241 > 234$$

$$123 < 128$$

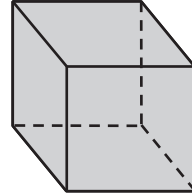
$$247 = 247$$





cube

cube
cubo



cylinder

cylinder
cilindro



decimal point

decimal point
punto decimal

\$1.00

decimal point

data

data
datos

Favorite Lunch	
Lunch	Number
pizza	4
sandwich	6
salad	3

The information in
this chart is called **data**.





digit

digit
dígito

0, 1, 2, 3, 4, 5, 6, 7, 8,
and 9 are **digits**.

difference


difference
diferencia

$$9 - 3 = 6$$

The **difference** is 6.

dollar

dollar
dólar



A **dollar** is worth 100 cents.

dime

dime
moneda de 10¢



or



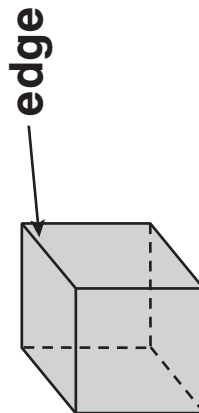
A **dime** is worth 10 cents.





edge

edge
arista



An **edge** is formed where two faces of a three-dimensional shape meet.

dollar sign

dollar sign
signo de dólar

\$1.00

dollar sign

even

even
par

2, 4, 6, 8, 10, . . .

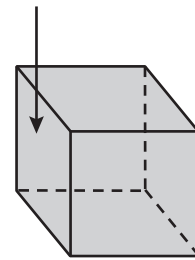
even numbers



face

face
cara

face



Each flat surface of this
cube is a **face**.



foot

foot
pie

1 foot is the same length
as 12 inches.

fourth of


fourth of
cuarto de



A fourth of the shape is shaded.

half of


half of
mitad de



A **half** of the shape is shaded.

fourths

fourths
cuartos



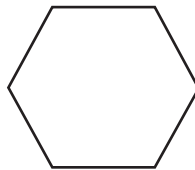
This shape has 4 equal parts.
These equal parts are called **fourths**.





hexagon


hexagon
hexágono



A two-dimensional shape with
6 sides is a **hexagon**.

halves

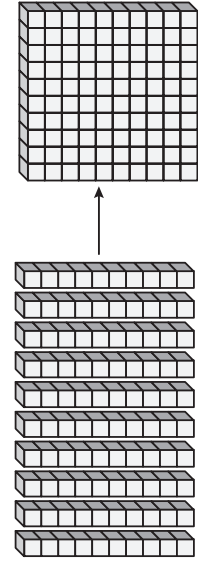
halves
mitades



This shape has 2 equal parts.
These equal parts are called **halves**.

hundred

hundred
centena

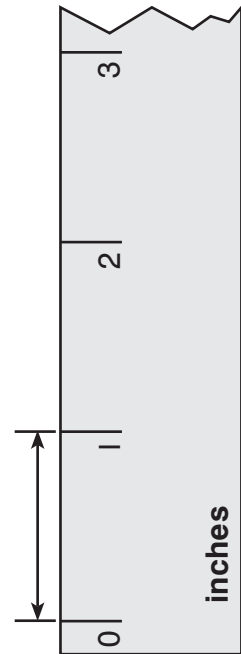


There are 10 tens in 1 hundred.



inch

inch
pulgada



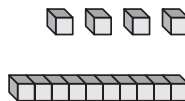
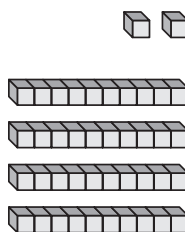


$(>)$
is greater than

$(=)$ is equal to

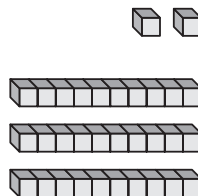
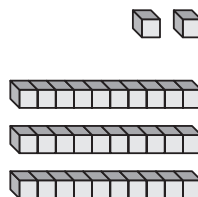
is greater than $(>)$
es mayor que

is equal to $(=)$
es igual a



42 is greater than 14.

$$42 > 14$$



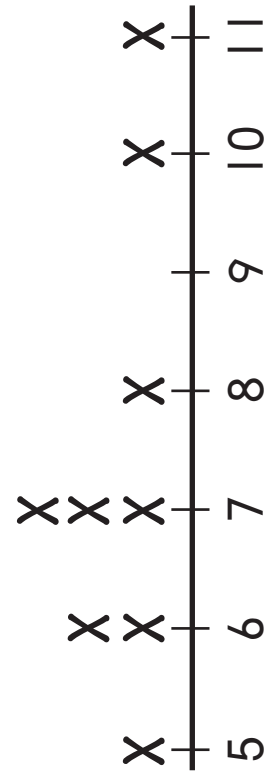
32 is equal to 32.

$$32 = 32$$

line plot

($>$) is less than ($<$)

line plot
diagrama de puntos



Lengths of Paintbrushes in Inches

is less than ($<$)
es menor que




12 is less than 21.
 $12 < 21$





measuring tape

measuring tape
cinta métrica



meter

meter
metro

1 **meter** is the same length
as 100 centimeters.

midnight

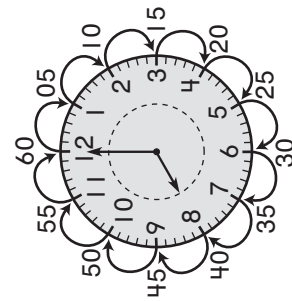
midnight
medianoche

Midnight is 12:00 at night.



minute

minute
minuto



There are **60 minutes** in an hour.



noon

nickel

noon
mediodía

nickel
moneda de 5¢

Noon is 12:00 in the daytime.



or



A nickel is worth 5 cents.

penny

penny
moneda de 1 ¢



or



A **penny** is worth 1 cent.

odd

odd
impar

1, 3, 5, 7, 9, 11, ...

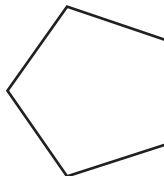
odd numbers





pentagon

pentagon
pentágono



A two-dimensional shape
with 5 sides is a **pentagon**.


picture graph

picture graph
gráfica con dibujos

Favorite Sandwich				
cheese	😊	😊		
ham	😊			
tuna	😊	😊	😊	

Key: Each 😊 stands for 1 child.



<p>P.M.</p>	<p>P.M. p.m.</p> <p>Times after noon and before midnight are written with P.M.</p>
<p>quadrilateral</p>	<p>quadrilateral cuadrilátero</p>  <p>A two-dimensional shape with 4 sides is a quadrilateral.</p>



quarter

quarter
moneda de 25¢



A **quarter** is worth 25 cents.

quarter of

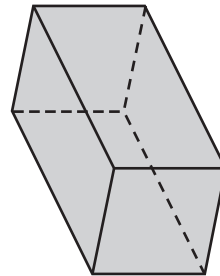
quarter of
cuarta parte de



A **quarter** of the shape is shaded.

**rectangular
prism**

rectangular prism
prisma rectangular



quarter past

quarter past
y cuarto



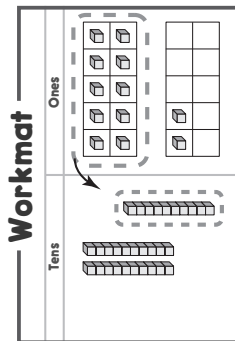
15 minutes after 8
quarter past 8





regroup

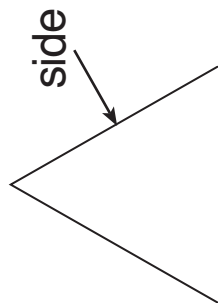
regroup
reagrupar



You can trade 10 ones for
1 ten to **regroup**.

side

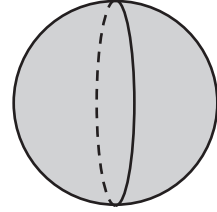
side
lado



This shape has 3 **sides**.

sphere

sphere
esfera



sum

sum
suma o total

$$7 + 6 = 13$$

The **sum** is 13.



Survey


survey
encuesta

Favorite Lunch	
Lunch	Tally
pizza	IIII
sandwich	## I
salad	III

A **survey** is a collection of data from answers to a question.

third of

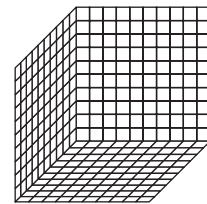
third of
un tercio de



A **third of** the shape is shaded.

thousand


thousand
millar



There are 10 hundreds
in 1 **thousand**.

thirds

thirds
tercios



This shape has 3 equal parts.
These equal parts are called **thirds**.





yardstick

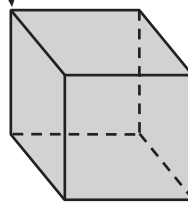
yardstick
regla de 1 yarda

A **yardstick** is a measuring tool that shows 3 feet.

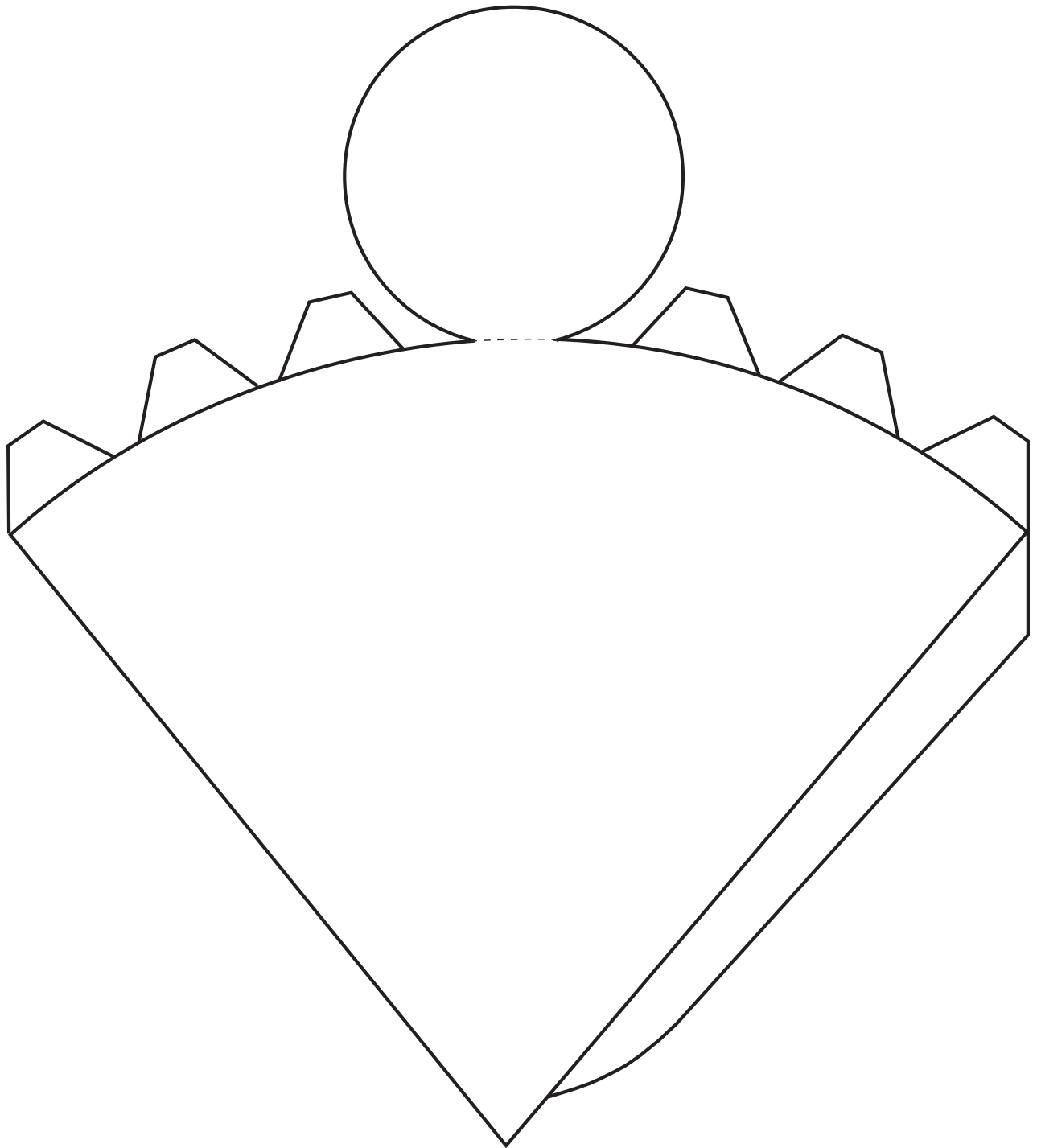
vertex / vertices

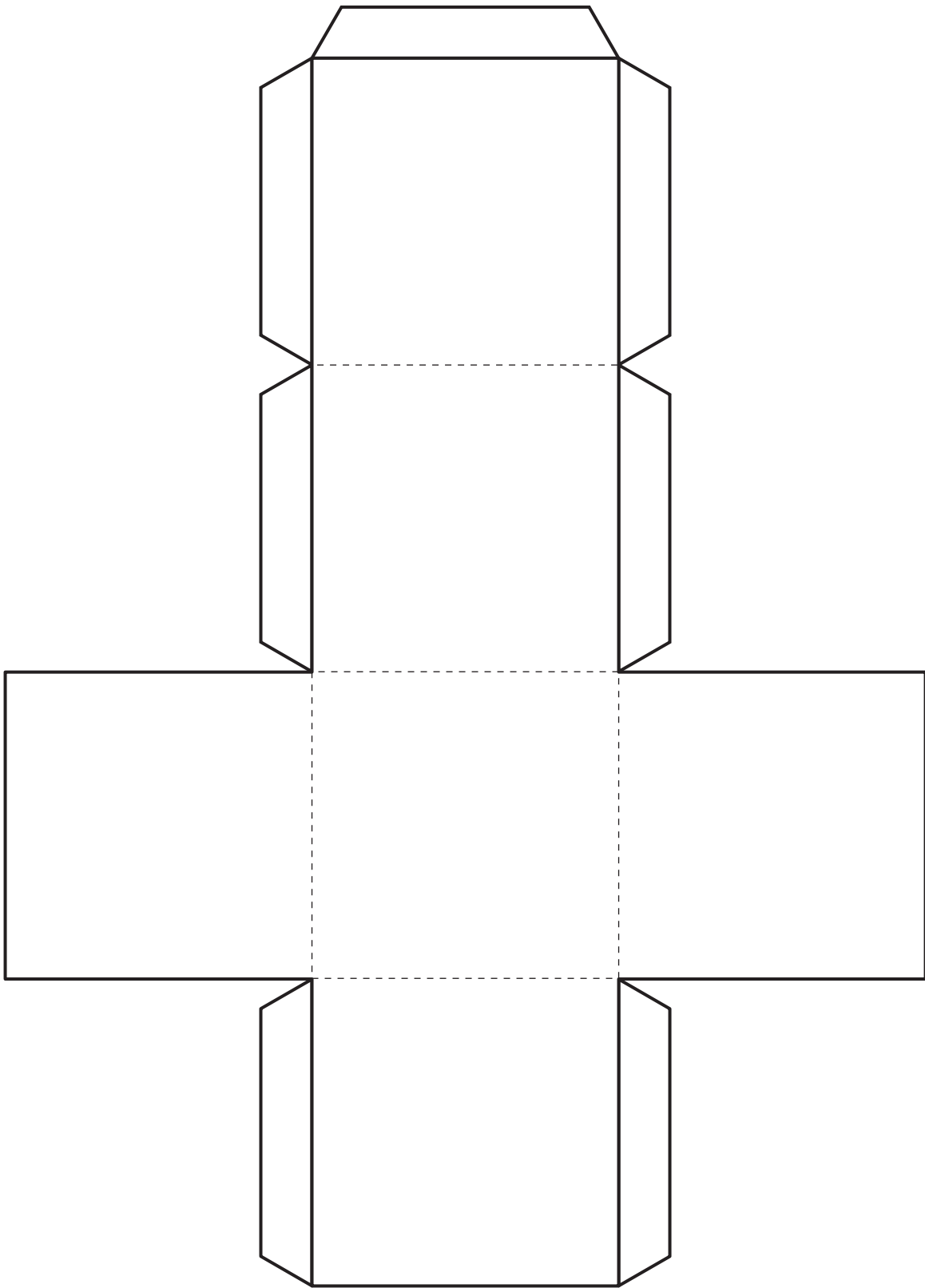
vertex / vertices
vértice / vértices

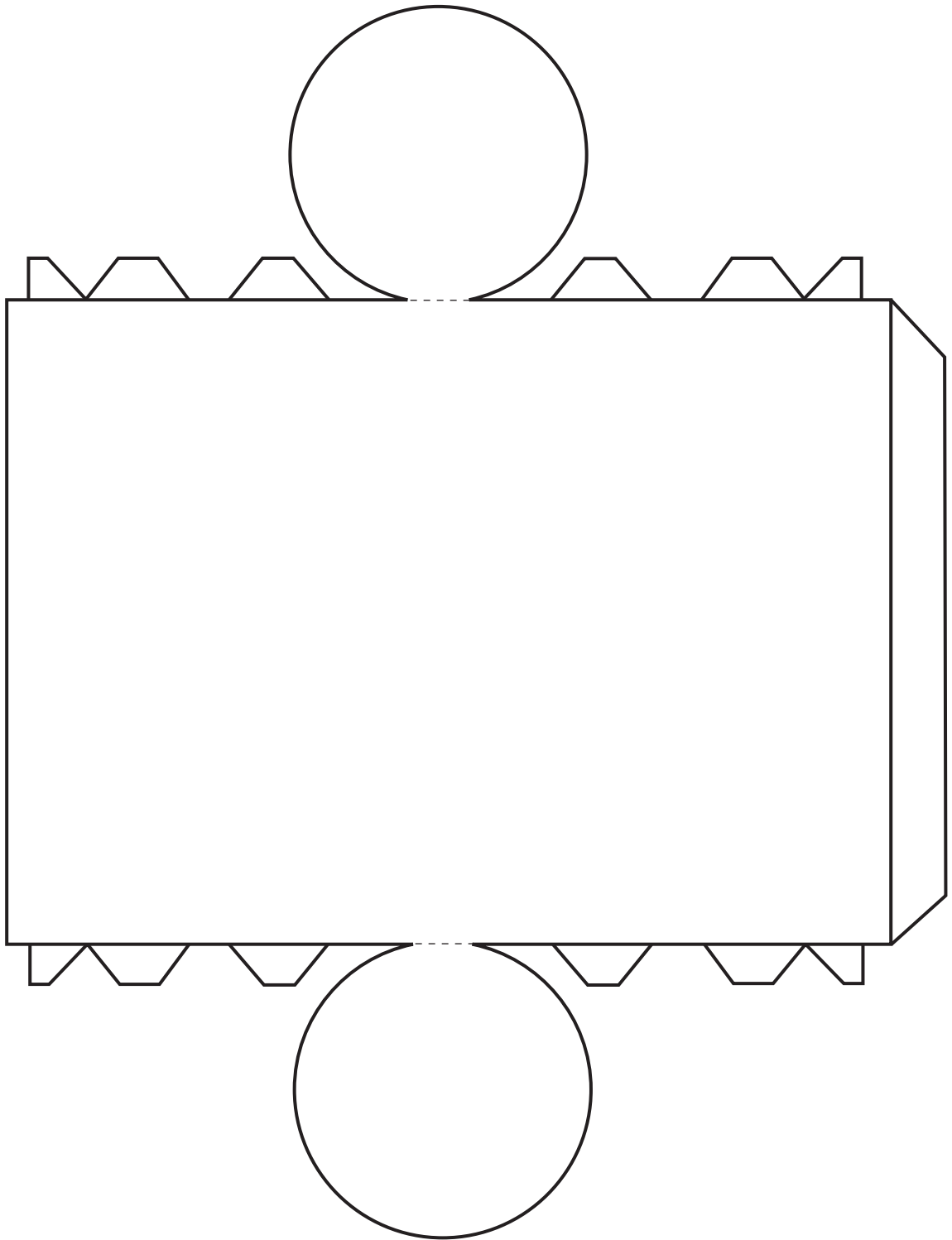
vertex

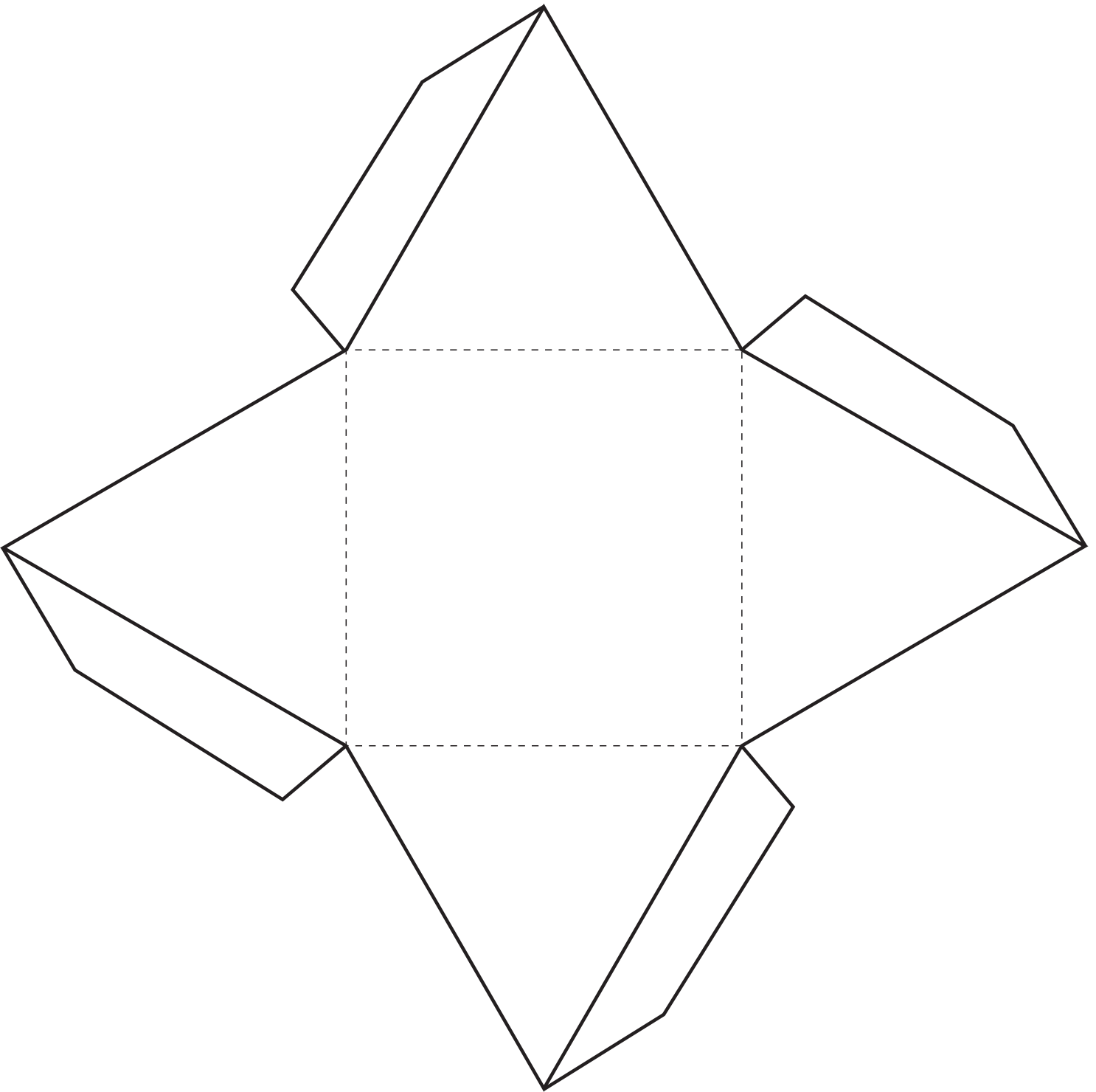


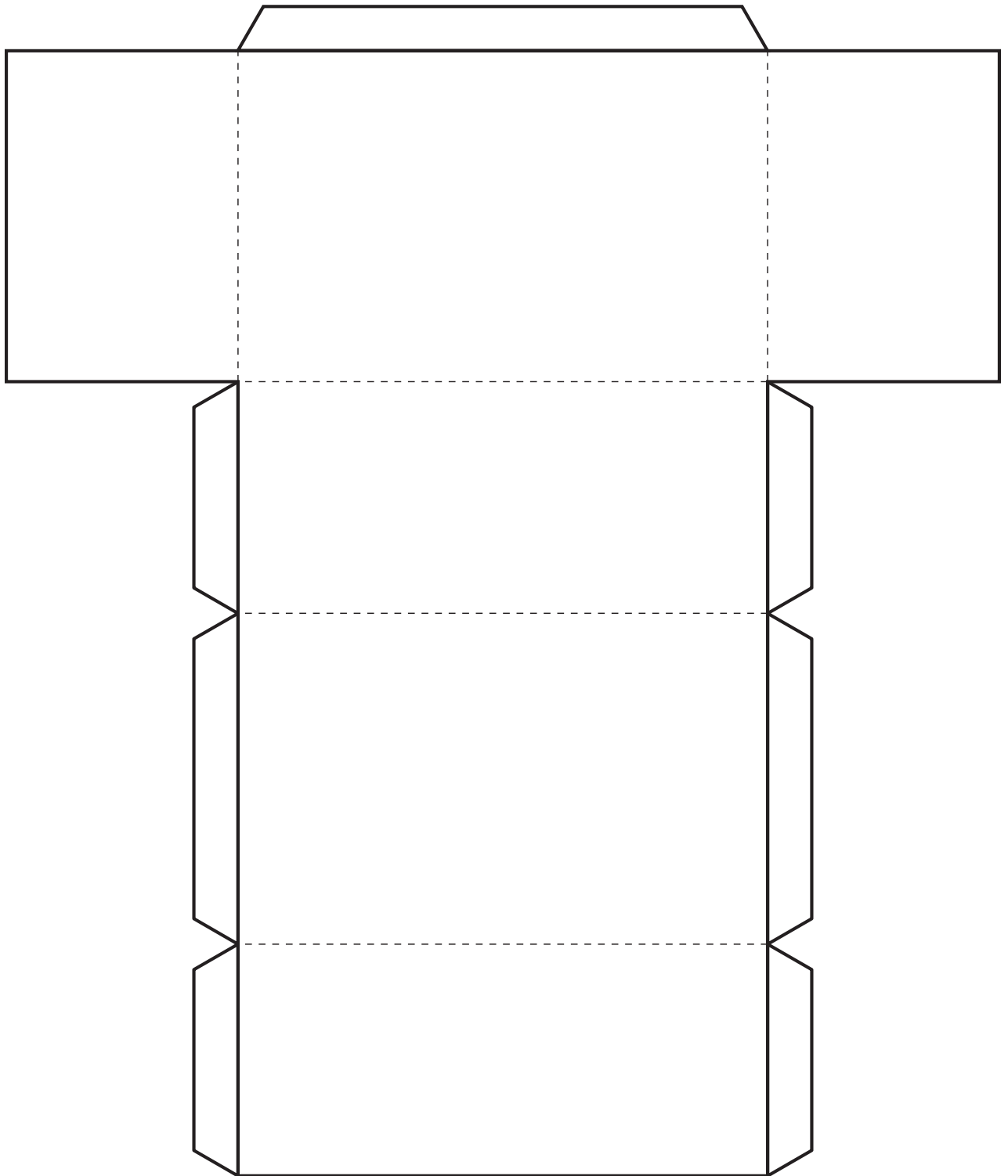
A corner point of a three-dimensional shape is a **vertex**.











Clue Cards



Cut along the dashed lines.

<p>There are 60 minutes in this. What is it?</p> <p>Answer: 1 hour</p>	<p>What does <i>noon</i> mean?</p> <p>Answer: 12:00 in the daytime</p>	<p>There are 7 days in this. What is it?</p> <p>Answer: 1 week</p>	<p>What is another way to say "12 o'clock at night?"</p> <p>Answer: midnight</p>
<p>What does <i>quarter past</i> mean?</p> <p>Answer: 15 minutes after the hour</p>	<p>There are about 52 weeks in this. What is it?</p> <p>Answer: 1 year</p>	<p>What does a.m. stand for?</p> <p>Answer: the times after midnight and before noon</p>	<p>How many seconds are in 1 minute?</p> <p>Answer: 60 seconds</p>
<p>This coin has a value of 5¢. What is it?</p> <p>Answer: nickel</p>	<p>This has a value of 100 cents. What is it?</p> <p>Answer: one dollar</p>	<p>What is the value of a dime?</p> <p>Answer: 10¢</p>	<p>This coin has a value of 25¢. What is it?</p> <p>Answer: quarter</p>
<p>What symbol stands for <i>dollars</i>?</p> <p>Answer: \$</p>	<p>What does p.m. stand for?</p> <p>Answer: the times after noon and before midnight</p>	<p>What symbol stands for <i>cents</i>?</p> <p>Answer: ¢</p>	<p>What is the value of a penny?</p> <p>Answer: 1¢</p>

Tarjetas con pistas



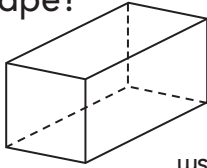
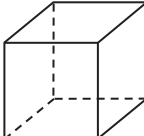
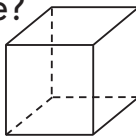


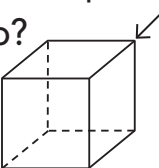
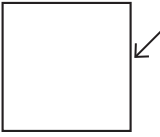
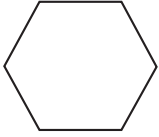

Recorta a lo largo de las líneas entrecortadas.

<p>Hay 60 minutos en esto. ¿Qué es?</p> <p>Respuesta: 1 hora</p>	<p>¿Qué significa <i>mediodía</i>?</p> <p>Respuesta: 12 del día</p>	<p>Hay 7 días en esto. ¿Qué es?</p> <p>Respuesta: 1 semana</p>	<p>¿Cuál es otra manera de decir "12 de la noche"?</p> <p>Respuesta: medianoche</p>
<p>¿Qué significa y <i>cuarto</i>?</p> <p>Respuesta: 15 minutos después de la hora</p>	<p>Hay alrededor de 52 semanas en esto. ¿Qué es?</p> <p>Respuesta: 1 año</p>	<p>¿Qué significa a. m.?</p> <p>Respuesta: las horas después de la medianoche y antes del mediodía</p>	<p>¿Cuántos segundos hay en 1 minuto?</p> <p>Respuesta: 60 segundos</p>
<p>Esta moneda tiene un valor de 5¢. ¿Qué es?</p> <p>Respuesta: moneda de cinco centavos</p>	<p>Esto tiene un valor de 100 centavos. ¿Qué es?</p> <p>Respuesta: un dólar</p>	<p>Esta moneda tiene un valor de 10¢. ¿Qué es?</p> <p>Respuesta: moneda de diez centavos</p>	<p>Esta moneda tiene un valor de 25¢. ¿Qué es?</p> <p>Respuesta: moneda de veinticinco centavos</p>
<p>¿Qué símbolo representa <i>dólares</i>?</p> <p>Respuesta: \$</p>	<p>¿Qué significa p. m.?</p> <p>Respuesta: las horas después del mediodía y antes de la medianoche</p>	<p>¿Qué símbolo representa <i>centavos</i>?</p> <p>Respuesta: ¢</p>	<p>Esta moneda tiene un valor de 1¢. ¿Qué es?</p> <p>Respuesta: moneda de 1 centavo</p>

Clue Cards



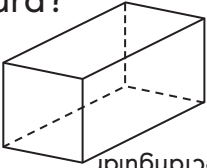
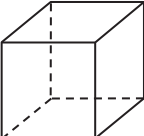
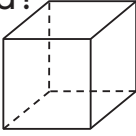


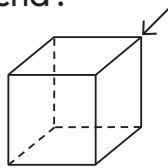
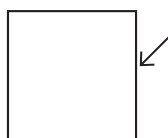
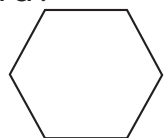

Cut along the dashed lines.

<p>What is this shape?</p>  <p>Answer: rectangular prism</p>	<p>What is this shape?</p>  <p>Answer: cube</p>	<p>How many faces does this shape have?</p>  <p>Answer: 6</p>	<p>What shape does a soccer ball have?</p> <p>Answer: sphere</p>
<p>What is this shape?</p>  <p>Answer: cylinder</p>	<p>What is this shape?</p>  <p>Answer: cone</p>	<p>What is the arrow pointing to?</p>  <p>Answer: vertex</p>	<p>What is a <i>vertex</i>?</p> <p>Answer: the corner point of a shape</p>
<p>How many sides does a quadrilateral have?</p> <p>Answer: 4</p>	<p>What two-dimensional shape has 5 sides and 5 vertices?</p> <p>Answer: pentagon</p>	<p>What is the arrow pointing to?</p>  <p>Answer: side</p>	<p>What is this shape?</p>  <p>Answer: hexagon</p>
<p>What is formed when two sides of a shape meet?</p> <p>Answer: angle</p>	<p>How many halves are in a whole?</p> <p>Answer: 2</p>	<p>What is the name of these equal parts?</p>  <p>Answer: thirds</p>	<p>How many fourths are in a whole?</p> <p>Answer: 4</p>

Tarjetas con pistas



Recorta a lo largo de las líneas entrecortadas.

<p>¿Qué es esta figura?</p>  <p>Respuesta: prisma rectangular</p>	<p>¿Qué es esta figura?</p>  <p>Respuesta: cubo</p>	<p>¿Cuántas caras tiene esta figura?</p>  <p>Respuesta: 6</p>	<p>¿Qué forma tiene un balón de fútbol?</p> <p>Respuesta: esfera</p>
<p>¿Qué es esta figura?</p>  <p>Respuesta: cilindro</p>	<p>¿Qué es esta figura?</p>  <p>Respuesta: cono</p>	<p>¿A qué apunta la flecha?</p>  <p>Respuesta: vértice</p>	<p>¿Qué es un vértice?</p> <p>Respuesta: el punto de la esquina de una figura</p>
<p>¿Cuántos lados tiene un cuadrilátero?</p> <p>Respuesta: 4</p>	<p>¿Qué figura bidimensional tiene 5 lados y 5 vértices?</p> <p>Respuesta: pentágono</p>	<p>¿A qué apunta la flecha?</p>  <p>Respuesta: lado</p>	<p>¿Qué es esta figura?</p>  <p>Respuesta: hexágono</p>
<p>¿Qué se forma cuando dos lados de una figura se encuentran?</p> <p>Respuesta: ángulo</p>	<p>¿Cuántos medios hay en un entero?</p> <p>Respuesta: 2</p>	<p>¿Cuál es el nombre de estas partes iguales?</p>  <p>Respuesta: tercios</p>	<p>¿Cuántos cuartos hay en un entero?</p> <p>Respuesta: 4</p>

BINGO

		FREE		

BINGO

		ESPACIO EN BLANCO		