

Name : _____

Score : _____

Teacher : _____

Date : _____

$$\begin{array}{r} 182 \\ + 728 \\ \hline \end{array}$$

$$\begin{array}{r} 409 \\ + 456 \\ \hline \end{array}$$

$$\begin{array}{r} 563 \\ + 152 \\ \hline \end{array}$$

$$\begin{array}{r} 541 \\ + 910 \\ \hline \end{array}$$

$$\begin{array}{r} 880 \\ + 119 \\ \hline \end{array}$$

$$\begin{array}{r} 796 \\ + 609 \\ \hline \end{array}$$

$$\begin{array}{r} 468 \\ + 847 \\ \hline \end{array}$$

$$\begin{array}{r} 178 \\ + 243 \\ \hline \end{array}$$

$$\begin{array}{r} 248 \\ + 654 \\ \hline \end{array}$$

$$\begin{array}{r} 804 \\ + 915 \\ \hline \end{array}$$

$$\begin{array}{r} 192 \\ + 454 \\ \hline \end{array}$$

$$\begin{array}{r} 241 \\ + 828 \\ \hline \end{array}$$

$$\begin{array}{r} 308 \\ + 746 \\ \hline \end{array}$$

$$\begin{array}{r} 344 \\ + 360 \\ \hline \end{array}$$

$$\begin{array}{r} 987 \\ + 821 \\ \hline \end{array}$$

$$\begin{array}{r} 328 \\ + 920 \\ \hline \end{array}$$

$$\begin{array}{r} 279 \\ + 417 \\ \hline \end{array}$$

$$\begin{array}{r} 673 \\ + 666 \\ \hline \end{array}$$

$$\begin{array}{r} 648 \\ + 680 \\ \hline \end{array}$$

$$\begin{array}{r} 513 \\ + 286 \\ \hline \end{array}$$

$$\begin{array}{r} 469 \\ + 139 \\ \hline \end{array}$$

$$\begin{array}{r} 514 \\ + 349 \\ \hline \end{array}$$

$$\begin{array}{r} 984 \\ + 202 \\ \hline \end{array}$$

$$\begin{array}{r} 435 \\ + 852 \\ \hline \end{array}$$

$$\begin{array}{r} 411 \\ + 649 \\ \hline \end{array}$$

$$\begin{array}{r} 574 \\ + 753 \\ \hline \end{array}$$

$$\begin{array}{r} 480 \\ + 888 \\ \hline \end{array}$$

$$\begin{array}{r} 966 \\ + 981 \\ \hline \end{array}$$

$$\begin{array}{r} 364 \\ + 203 \\ \hline \end{array}$$

$$\begin{array}{r} 215 \\ + 577 \\ \hline \end{array}$$



Name : _____

Score : _____

Teacher : _____

Date : _____

$$\begin{array}{r} 182 \\ + 728 \\ \hline 910 \end{array}$$
$$\begin{array}{r} 409 \\ + 456 \\ \hline 865 \end{array}$$
$$\begin{array}{r} 563 \\ + 152 \\ \hline 715 \end{array}$$
$$\begin{array}{r} 541 \\ + 910 \\ \hline 1451 \end{array}$$
$$\begin{array}{r} 880 \\ + 119 \\ \hline 999 \end{array}$$
$$\begin{array}{r} 796 \\ + 609 \\ \hline 1405 \end{array}$$

$$\begin{array}{r} 468 \\ + 847 \\ \hline 1315 \end{array}$$
$$\begin{array}{r} 178 \\ + 243 \\ \hline 421 \end{array}$$
$$\begin{array}{r} 248 \\ + 654 \\ \hline 902 \end{array}$$
$$\begin{array}{r} 804 \\ + 915 \\ \hline 1719 \end{array}$$
$$\begin{array}{r} 192 \\ + 454 \\ \hline 646 \end{array}$$
$$\begin{array}{r} 241 \\ + 828 \\ \hline 1069 \end{array}$$

$$\begin{array}{r} 308 \\ + 746 \\ \hline 1054 \end{array}$$
$$\begin{array}{r} 344 \\ + 360 \\ \hline 704 \end{array}$$
$$\begin{array}{r} 987 \\ + 821 \\ \hline 1808 \end{array}$$
$$\begin{array}{r} 328 \\ + 920 \\ \hline 1248 \end{array}$$
$$\begin{array}{r} 279 \\ + 417 \\ \hline 696 \end{array}$$
$$\begin{array}{r} 673 \\ + 666 \\ \hline 1339 \end{array}$$

$$\begin{array}{r} 648 \\ + 680 \\ \hline 1328 \end{array}$$
$$\begin{array}{r} 513 \\ + 286 \\ \hline 799 \end{array}$$
$$\begin{array}{r} 469 \\ + 139 \\ \hline 608 \end{array}$$
$$\begin{array}{r} 514 \\ + 349 \\ \hline 863 \end{array}$$
$$\begin{array}{r} 984 \\ + 202 \\ \hline 1186 \end{array}$$
$$\begin{array}{r} 435 \\ + 852 \\ \hline 1287 \end{array}$$

$$\begin{array}{r} 411 \\ + 649 \\ \hline 1060 \end{array}$$
$$\begin{array}{r} 574 \\ + 753 \\ \hline 1327 \end{array}$$
$$\begin{array}{r} 480 \\ + 888 \\ \hline 1368 \end{array}$$
$$\begin{array}{r} 966 \\ + 981 \\ \hline 1947 \end{array}$$
$$\begin{array}{r} 364 \\ + 203 \\ \hline 567 \end{array}$$
$$\begin{array}{r} 215 \\ + 577 \\ \hline 792 \end{array}$$



Name : _____

Score : _____

Teacher : _____

Date : _____

$$\begin{array}{r} 979 \\ - 143 \\ \hline \end{array}$$

$$\begin{array}{r} 745 \\ - 583 \\ \hline \end{array}$$

$$\begin{array}{r} 961 \\ - 578 \\ \hline \end{array}$$

$$\begin{array}{r} 353 \\ - 253 \\ \hline \end{array}$$

$$\begin{array}{r} 655 \\ - 531 \\ \hline \end{array}$$

$$\begin{array}{r} 971 \\ - 907 \\ \hline \end{array}$$

$$\begin{array}{r} 997 \\ - 250 \\ \hline \end{array}$$

$$\begin{array}{r} 614 \\ - 308 \\ \hline \end{array}$$

$$\begin{array}{r} 924 \\ - 505 \\ \hline \end{array}$$

$$\begin{array}{r} 578 \\ - 162 \\ \hline \end{array}$$

$$\begin{array}{r} 845 \\ - 538 \\ \hline \end{array}$$

$$\begin{array}{r} 883 \\ - 713 \\ \hline \end{array}$$

$$\begin{array}{r} 166 \\ - 138 \\ \hline \end{array}$$

$$\begin{array}{r} 942 \\ - 697 \\ \hline \end{array}$$

$$\begin{array}{r} 856 \\ - 262 \\ \hline \end{array}$$

$$\begin{array}{r} 829 \\ - 827 \\ \hline \end{array}$$

$$\begin{array}{r} 552 \\ - 129 \\ \hline \end{array}$$

$$\begin{array}{r} 846 \\ - 321 \\ \hline \end{array}$$

$$\begin{array}{r} 340 \\ - 181 \\ \hline \end{array}$$

$$\begin{array}{r} 932 \\ - 543 \\ \hline \end{array}$$

$$\begin{array}{r} 454 \\ - 425 \\ \hline \end{array}$$

$$\begin{array}{r} 643 \\ - 245 \\ \hline \end{array}$$

$$\begin{array}{r} 788 \\ - 755 \\ \hline \end{array}$$

$$\begin{array}{r} 480 \\ - 319 \\ \hline \end{array}$$

$$\begin{array}{r} 139 \\ - 112 \\ \hline \end{array}$$

$$\begin{array}{r} 411 \\ - 241 \\ \hline \end{array}$$

$$\begin{array}{r} 453 \\ - 331 \\ \hline \end{array}$$

$$\begin{array}{r} 902 \\ - 643 \\ \hline \end{array}$$

$$\begin{array}{r} 811 \\ - 715 \\ \hline \end{array}$$

$$\begin{array}{r} 465 \\ - 464 \\ \hline \end{array}$$



Name : _____

Score : _____

Teacher : _____

Date : _____

$$\begin{array}{r} 979 \\ - 143 \\ \hline 836 \end{array}$$

$$\begin{array}{r} 745 \\ - 583 \\ \hline 162 \end{array}$$

$$\begin{array}{r} 961 \\ - 578 \\ \hline 383 \end{array}$$

$$\begin{array}{r} 353 \\ - 253 \\ \hline 100 \end{array}$$

$$\begin{array}{r} 655 \\ - 531 \\ \hline 124 \end{array}$$

$$\begin{array}{r} 971 \\ - 907 \\ \hline 64 \end{array}$$

$$\begin{array}{r} 997 \\ - 250 \\ \hline 747 \end{array}$$

$$\begin{array}{r} 614 \\ - 308 \\ \hline 306 \end{array}$$

$$\begin{array}{r} 924 \\ - 505 \\ \hline 419 \end{array}$$

$$\begin{array}{r} 578 \\ - 162 \\ \hline 416 \end{array}$$

$$\begin{array}{r} 845 \\ - 538 \\ \hline 307 \end{array}$$

$$\begin{array}{r} 883 \\ - 713 \\ \hline 170 \end{array}$$

$$\begin{array}{r} 166 \\ - 138 \\ \hline 28 \end{array}$$

$$\begin{array}{r} 942 \\ - 697 \\ \hline 245 \end{array}$$

$$\begin{array}{r} 856 \\ - 262 \\ \hline 594 \end{array}$$

$$\begin{array}{r} 829 \\ - 827 \\ \hline 2 \end{array}$$

$$\begin{array}{r} 552 \\ - 129 \\ \hline 423 \end{array}$$

$$\begin{array}{r} 846 \\ - 321 \\ \hline 525 \end{array}$$

$$\begin{array}{r} 340 \\ - 181 \\ \hline 159 \end{array}$$

$$\begin{array}{r} 932 \\ - 543 \\ \hline 389 \end{array}$$

$$\begin{array}{r} 454 \\ - 425 \\ \hline 29 \end{array}$$

$$\begin{array}{r} 643 \\ - 245 \\ \hline 398 \end{array}$$

$$\begin{array}{r} 788 \\ - 755 \\ \hline 33 \end{array}$$

$$\begin{array}{r} 480 \\ - 319 \\ \hline 161 \end{array}$$

$$\begin{array}{r} 139 \\ - 112 \\ \hline 27 \end{array}$$

$$\begin{array}{r} 411 \\ - 241 \\ \hline 170 \end{array}$$

$$\begin{array}{r} 453 \\ - 331 \\ \hline 122 \end{array}$$

$$\begin{array}{r} 902 \\ - 643 \\ \hline 259 \end{array}$$

$$\begin{array}{r} 811 \\ - 715 \\ \hline 96 \end{array}$$

$$\begin{array}{r} 465 \\ - 464 \\ \hline 1 \end{array}$$



Name : _____

Score : _____

Teacher : _____

Date : _____

$$\begin{array}{r} 583 \\ - 112 \\ \hline \end{array}$$

$$\begin{array}{r} 497 \\ - 332 \\ \hline \end{array}$$

$$\begin{array}{r} 497 \\ - 180 \\ \hline \end{array}$$

$$\begin{array}{r} 373 \\ - 121 \\ \hline \end{array}$$

$$\begin{array}{r} 428 \\ - 213 \\ \hline \end{array}$$

$$\begin{array}{r} 366 \\ - 211 \\ \hline \end{array}$$

$$\begin{array}{r} 985 \\ - 740 \\ \hline \end{array}$$

$$\begin{array}{r} 794 \\ - 550 \\ \hline \end{array}$$

$$\begin{array}{r} 452 \\ - 140 \\ \hline \end{array}$$

$$\begin{array}{r} 976 \\ - 355 \\ \hline \end{array}$$

$$\begin{array}{r} 752 \\ - 441 \\ \hline \end{array}$$

$$\begin{array}{r} 426 \\ - 112 \\ \hline \end{array}$$

$$\begin{array}{r} 556 \\ - 215 \\ \hline \end{array}$$

$$\begin{array}{r} 356 \\ - 210 \\ \hline \end{array}$$

$$\begin{array}{r} 765 \\ - 510 \\ \hline \end{array}$$

$$\begin{array}{r} 886 \\ - 162 \\ \hline \end{array}$$

$$\begin{array}{r} 782 \\ - 361 \\ \hline \end{array}$$

$$\begin{array}{r} 429 \\ - 116 \\ \hline \end{array}$$

$$\begin{array}{r} 828 \\ - 513 \\ \hline \end{array}$$

$$\begin{array}{r} 656 \\ - 531 \\ \hline \end{array}$$

$$\begin{array}{r} 692 \\ - 250 \\ \hline \end{array}$$

$$\begin{array}{r} 643 \\ - 511 \\ \hline \end{array}$$

$$\begin{array}{r} 446 \\ - 112 \\ \hline \end{array}$$

$$\begin{array}{r} 878 \\ - 766 \\ \hline \end{array}$$

$$\begin{array}{r} 496 \\ - 311 \\ \hline \end{array}$$

$$\begin{array}{r} 252 \\ - 141 \\ \hline \end{array}$$

$$\begin{array}{r} 942 \\ - 120 \\ \hline \end{array}$$

$$\begin{array}{r} 793 \\ - 332 \\ \hline \end{array}$$

$$\begin{array}{r} 226 \\ - 112 \\ \hline \end{array}$$

$$\begin{array}{r} 589 \\ - 471 \\ \hline \end{array}$$



Name : _____

Score : _____

Teacher : _____

Date : _____

$$\begin{array}{r} 583 \\ - 112 \\ \hline 471 \end{array}$$
$$\begin{array}{r} 497 \\ - 332 \\ \hline 165 \end{array}$$
$$\begin{array}{r} 497 \\ - 180 \\ \hline 317 \end{array}$$
$$\begin{array}{r} 373 \\ - 121 \\ \hline 252 \end{array}$$
$$\begin{array}{r} 428 \\ - 213 \\ \hline 215 \end{array}$$
$$\begin{array}{r} 366 \\ - 211 \\ \hline 155 \end{array}$$

$$\begin{array}{r} 985 \\ - 740 \\ \hline 245 \end{array}$$
$$\begin{array}{r} 794 \\ - 550 \\ \hline 244 \end{array}$$
$$\begin{array}{r} 452 \\ - 140 \\ \hline 312 \end{array}$$
$$\begin{array}{r} 976 \\ - 355 \\ \hline 621 \end{array}$$
$$\begin{array}{r} 752 \\ - 441 \\ \hline 311 \end{array}$$
$$\begin{array}{r} 426 \\ - 112 \\ \hline 314 \end{array}$$

$$\begin{array}{r} 556 \\ - 215 \\ \hline 341 \end{array}$$
$$\begin{array}{r} 356 \\ - 210 \\ \hline 146 \end{array}$$
$$\begin{array}{r} 765 \\ - 510 \\ \hline 255 \end{array}$$
$$\begin{array}{r} 886 \\ - 162 \\ \hline 724 \end{array}$$
$$\begin{array}{r} 782 \\ - 361 \\ \hline 421 \end{array}$$
$$\begin{array}{r} 429 \\ - 116 \\ \hline 313 \end{array}$$

$$\begin{array}{r} 828 \\ - 513 \\ \hline 315 \end{array}$$
$$\begin{array}{r} 656 \\ - 531 \\ \hline 125 \end{array}$$
$$\begin{array}{r} 692 \\ - 250 \\ \hline 442 \end{array}$$
$$\begin{array}{r} 643 \\ - 511 \\ \hline 132 \end{array}$$
$$\begin{array}{r} 446 \\ - 112 \\ \hline 334 \end{array}$$
$$\begin{array}{r} 878 \\ - 766 \\ \hline 112 \end{array}$$

$$\begin{array}{r} 496 \\ - 311 \\ \hline 185 \end{array}$$
$$\begin{array}{r} 252 \\ - 141 \\ \hline 111 \end{array}$$
$$\begin{array}{r} 942 \\ - 120 \\ \hline 822 \end{array}$$
$$\begin{array}{r} 793 \\ - 332 \\ \hline 461 \end{array}$$
$$\begin{array}{r} 226 \\ - 112 \\ \hline 114 \end{array}$$
$$\begin{array}{r} 589 \\ - 471 \\ \hline 118 \end{array}$$



Name : _____

Score : _____

Teacher : _____

Date : _____

$$\begin{array}{r} 877 \\ - 443 \\ \hline \end{array}$$

$$\begin{array}{r} 293 \\ - 180 \\ \hline \end{array}$$

$$\begin{array}{r} 726 \\ + 162 \\ \hline \end{array}$$

$$\begin{array}{r} 577 \\ - 144 \\ \hline \end{array}$$

$$\begin{array}{r} 364 \\ - 130 \\ \hline \end{array}$$

$$\begin{array}{r} 387 \\ - 144 \\ \hline \end{array}$$

$$\begin{array}{r} 464 \\ - 122 \\ \hline \end{array}$$

$$\begin{array}{r} 471 \\ + 516 \\ \hline \end{array}$$

$$\begin{array}{r} 847 \\ - 321 \\ \hline \end{array}$$

$$\begin{array}{r} 326 \\ - 111 \\ \hline \end{array}$$

$$\begin{array}{r} 364 \\ + 125 \\ \hline \end{array}$$

$$\begin{array}{r} 262 \\ + 127 \\ \hline \end{array}$$

$$\begin{array}{r} 135 \\ + 522 \\ \hline \end{array}$$

$$\begin{array}{r} 345 \\ + 613 \\ \hline \end{array}$$

$$\begin{array}{r} 487 \\ + 112 \\ \hline \end{array}$$

$$\begin{array}{r} 243 \\ - 131 \\ \hline \end{array}$$

$$\begin{array}{r} 525 \\ - 112 \\ \hline \end{array}$$

$$\begin{array}{r} 343 \\ - 120 \\ \hline \end{array}$$

$$\begin{array}{r} 497 \\ - 282 \\ \hline \end{array}$$

$$\begin{array}{r} 833 \\ + 162 \\ \hline \end{array}$$

$$\begin{array}{r} 668 \\ - 426 \\ \hline \end{array}$$

$$\begin{array}{r} 614 \\ + 232 \\ \hline \end{array}$$

$$\begin{array}{r} 321 \\ + 316 \\ \hline \end{array}$$

$$\begin{array}{r} 686 \\ + 313 \\ \hline \end{array}$$

$$\begin{array}{r} 497 \\ - 274 \\ \hline \end{array}$$

$$\begin{array}{r} 947 \\ - 834 \\ \hline \end{array}$$

$$\begin{array}{r} 315 \\ + 531 \\ \hline \end{array}$$

$$\begin{array}{r} 482 \\ + 315 \\ \hline \end{array}$$

$$\begin{array}{r} 374 \\ + 125 \\ \hline \end{array}$$

$$\begin{array}{r} 237 \\ + 661 \\ \hline \end{array}$$



Name : _____

Score : _____

Teacher : _____

Date : _____

$$\begin{array}{r} 877 \\ - 443 \\ \hline 434 \end{array}$$

$$\begin{array}{r} 293 \\ - 180 \\ \hline 113 \end{array}$$

$$\begin{array}{r} 726 \\ + 162 \\ \hline 888 \end{array}$$

$$\begin{array}{r} 577 \\ - 144 \\ \hline 433 \end{array}$$

$$\begin{array}{r} 364 \\ - 130 \\ \hline 234 \end{array}$$

$$\begin{array}{r} 387 \\ - 144 \\ \hline 243 \end{array}$$

$$\begin{array}{r} 464 \\ - 122 \\ \hline 342 \end{array}$$

$$\begin{array}{r} 471 \\ + 516 \\ \hline 987 \end{array}$$

$$\begin{array}{r} 847 \\ - 321 \\ \hline 526 \end{array}$$

$$\begin{array}{r} 326 \\ - 111 \\ \hline 215 \end{array}$$

$$\begin{array}{r} 364 \\ + 125 \\ \hline 489 \end{array}$$

$$\begin{array}{r} 262 \\ + 127 \\ \hline 389 \end{array}$$

$$\begin{array}{r} 135 \\ + 522 \\ \hline 657 \end{array}$$

$$\begin{array}{r} 345 \\ + 613 \\ \hline 958 \end{array}$$

$$\begin{array}{r} 487 \\ + 112 \\ \hline 599 \end{array}$$

$$\begin{array}{r} 243 \\ - 131 \\ \hline 112 \end{array}$$

$$\begin{array}{r} 525 \\ - 112 \\ \hline 413 \end{array}$$

$$\begin{array}{r} 343 \\ - 120 \\ \hline 223 \end{array}$$

$$\begin{array}{r} 497 \\ - 282 \\ \hline 215 \end{array}$$

$$\begin{array}{r} 833 \\ + 162 \\ \hline 995 \end{array}$$

$$\begin{array}{r} 668 \\ - 426 \\ \hline 242 \end{array}$$

$$\begin{array}{r} 614 \\ + 232 \\ \hline 846 \end{array}$$

$$\begin{array}{r} 321 \\ + 316 \\ \hline 637 \end{array}$$

$$\begin{array}{r} 686 \\ + 313 \\ \hline 999 \end{array}$$

$$\begin{array}{r} 497 \\ - 274 \\ \hline 223 \end{array}$$

$$\begin{array}{r} 947 \\ - 834 \\ \hline 113 \end{array}$$

$$\begin{array}{r} 315 \\ + 531 \\ \hline 846 \end{array}$$

$$\begin{array}{r} 482 \\ + 315 \\ \hline 797 \end{array}$$

$$\begin{array}{r} 374 \\ + 125 \\ \hline 499 \end{array}$$

$$\begin{array}{r} 237 \\ + 661 \\ \hline 898 \end{array}$$



Name : _____

Score : _____

Teacher : _____

Date : _____

$$\begin{array}{r} 789 \\ - 392 \\ \hline \end{array}$$

$$\begin{array}{r} 975 \\ - 442 \\ \hline \end{array}$$

$$\begin{array}{r} 978 \\ - 531 \\ \hline \end{array}$$

$$\begin{array}{r} 887 \\ - 527 \\ \hline \end{array}$$

$$\begin{array}{r} 464 \\ - 289 \\ \hline \end{array}$$

$$\begin{array}{r} 641 \\ - 476 \\ \hline \end{array}$$

$$\begin{array}{r} 817 \\ - 409 \\ \hline \end{array}$$

$$\begin{array}{r} 507 \\ - 484 \\ \hline \end{array}$$

$$\begin{array}{r} 968 \\ - 713 \\ \hline \end{array}$$

$$\begin{array}{r} 789 \\ + 772 \\ \hline \end{array}$$

$$\begin{array}{r} 843 \\ + 326 \\ \hline \end{array}$$

$$\begin{array}{r} 838 \\ - 616 \\ \hline \end{array}$$

$$\begin{array}{r} 845 \\ - 163 \\ \hline \end{array}$$

$$\begin{array}{r} 290 \\ + 590 \\ \hline \end{array}$$

$$\begin{array}{r} 362 \\ + 244 \\ \hline \end{array}$$

$$\begin{array}{r} 373 \\ + 175 \\ \hline \end{array}$$

$$\begin{array}{r} 721 \\ - 352 \\ \hline \end{array}$$

$$\begin{array}{r} 154 \\ + 370 \\ \hline \end{array}$$

$$\begin{array}{r} 218 \\ + 645 \\ \hline \end{array}$$

$$\begin{array}{r} 985 \\ + 193 \\ \hline \end{array}$$

$$\begin{array}{r} 155 \\ + 162 \\ \hline \end{array}$$

$$\begin{array}{r} 502 \\ + 110 \\ \hline \end{array}$$

$$\begin{array}{r} 472 \\ + 443 \\ \hline \end{array}$$

$$\begin{array}{r} 501 \\ + 520 \\ \hline \end{array}$$

$$\begin{array}{r} 143 \\ + 771 \\ \hline \end{array}$$

$$\begin{array}{r} 980 \\ - 275 \\ \hline \end{array}$$

$$\begin{array}{r} 837 \\ - 589 \\ \hline \end{array}$$

$$\begin{array}{r} 302 \\ + 540 \\ \hline \end{array}$$

$$\begin{array}{r} 494 \\ + 505 \\ \hline \end{array}$$

$$\begin{array}{r} 939 \\ - 694 \\ \hline \end{array}$$



Name : _____

Score : _____

Teacher : _____

Date : _____

$$\begin{array}{r} 789 \\ - 392 \\ \hline 397 \end{array}$$

$$\begin{array}{r} 975 \\ - 442 \\ \hline 533 \end{array}$$

$$\begin{array}{r} 978 \\ - 531 \\ \hline 447 \end{array}$$

$$\begin{array}{r} 887 \\ - 527 \\ \hline 360 \end{array}$$

$$\begin{array}{r} 464 \\ - 289 \\ \hline 175 \end{array}$$

$$\begin{array}{r} 641 \\ - 476 \\ \hline 165 \end{array}$$

$$\begin{array}{r} 817 \\ - 409 \\ \hline 408 \end{array}$$

$$\begin{array}{r} 507 \\ - 484 \\ \hline 23 \end{array}$$

$$\begin{array}{r} 968 \\ - 713 \\ \hline 255 \end{array}$$

$$\begin{array}{r} 789 \\ + 772 \\ \hline 1561 \end{array}$$

$$\begin{array}{r} 843 \\ + 326 \\ \hline 1169 \end{array}$$

$$\begin{array}{r} 838 \\ - 616 \\ \hline 222 \end{array}$$

$$\begin{array}{r} 845 \\ - 163 \\ \hline 682 \end{array}$$

$$\begin{array}{r} 290 \\ + 590 \\ \hline 880 \end{array}$$

$$\begin{array}{r} 362 \\ + 244 \\ \hline 606 \end{array}$$

$$\begin{array}{r} 373 \\ + 175 \\ \hline 548 \end{array}$$

$$\begin{array}{r} 721 \\ - 352 \\ \hline 369 \end{array}$$

$$\begin{array}{r} 154 \\ + 370 \\ \hline 524 \end{array}$$

$$\begin{array}{r} 218 \\ + 645 \\ \hline 863 \end{array}$$

$$\begin{array}{r} 985 \\ + 193 \\ \hline 1178 \end{array}$$

$$\begin{array}{r} 155 \\ + 162 \\ \hline 317 \end{array}$$

$$\begin{array}{r} 502 \\ + 110 \\ \hline 612 \end{array}$$

$$\begin{array}{r} 472 \\ + 443 \\ \hline 915 \end{array}$$

$$\begin{array}{r} 501 \\ + 520 \\ \hline 1021 \end{array}$$

$$\begin{array}{r} 143 \\ + 771 \\ \hline 914 \end{array}$$

$$\begin{array}{r} 980 \\ - 275 \\ \hline 705 \end{array}$$

$$\begin{array}{r} 837 \\ - 589 \\ \hline 248 \end{array}$$

$$\begin{array}{r} 302 \\ + 540 \\ \hline 842 \end{array}$$

$$\begin{array}{r} 494 \\ + 505 \\ \hline 999 \end{array}$$

$$\begin{array}{r} 939 \\ - 694 \\ \hline 245 \end{array}$$



Name : _____

Score : _____

Teacher : _____

Date : _____

$$\begin{array}{r} 358 \\ + 511 \\ \hline \end{array}$$

$$\begin{array}{r} 655 \\ + 212 \\ \hline \end{array}$$

$$\begin{array}{r} 363 \\ + 611 \\ \hline \end{array}$$

$$\begin{array}{r} 845 \\ + 121 \\ \hline \end{array}$$

$$\begin{array}{r} 848 \\ + 111 \\ \hline \end{array}$$

$$\begin{array}{r} 487 \\ + 512 \\ \hline \end{array}$$

$$\begin{array}{r} 357 \\ + 421 \\ \hline \end{array}$$

$$\begin{array}{r} 344 \\ + 224 \\ \hline \end{array}$$

$$\begin{array}{r} 721 \\ + 162 \\ \hline \end{array}$$

$$\begin{array}{r} 845 \\ + 133 \\ \hline \end{array}$$

$$\begin{array}{r} 564 \\ + 315 \\ \hline \end{array}$$

$$\begin{array}{r} 278 \\ + 421 \\ \hline \end{array}$$

$$\begin{array}{r} 788 \\ + 111 \\ \hline \end{array}$$

$$\begin{array}{r} 335 \\ + 644 \\ \hline \end{array}$$

$$\begin{array}{r} 312 \\ + 175 \\ \hline \end{array}$$

$$\begin{array}{r} 534 \\ + 355 \\ \hline \end{array}$$

$$\begin{array}{r} 218 \\ + 531 \\ \hline \end{array}$$

$$\begin{array}{r} 616 \\ + 131 \\ \hline \end{array}$$

$$\begin{array}{r} 678 \\ + 211 \\ \hline \end{array}$$

$$\begin{array}{r} 483 \\ + 311 \\ \hline \end{array}$$

$$\begin{array}{r} 422 \\ + 412 \\ \hline \end{array}$$

$$\begin{array}{r} 357 \\ + 332 \\ \hline \end{array}$$

$$\begin{array}{r} 457 \\ + 122 \\ \hline \end{array}$$

$$\begin{array}{r} 536 \\ + 142 \\ \hline \end{array}$$

$$\begin{array}{r} 781 \\ + 112 \\ \hline \end{array}$$

$$\begin{array}{r} 855 \\ + 142 \\ \hline \end{array}$$

$$\begin{array}{r} 145 \\ + 334 \\ \hline \end{array}$$

$$\begin{array}{r} 546 \\ + 232 \\ \hline \end{array}$$

$$\begin{array}{r} 877 \\ + 111 \\ \hline \end{array}$$

$$\begin{array}{r} 747 \\ + 141 \\ \hline \end{array}$$



Name : _____

Score : _____

Teacher : _____

Date : _____

$$\begin{array}{r} 358 \\ + 511 \\ \hline 869 \end{array}$$

$$\begin{array}{r} 655 \\ + 212 \\ \hline 867 \end{array}$$

$$\begin{array}{r} 363 \\ + 611 \\ \hline 974 \end{array}$$

$$\begin{array}{r} 845 \\ + 121 \\ \hline 966 \end{array}$$

$$\begin{array}{r} 848 \\ + 111 \\ \hline 959 \end{array}$$

$$\begin{array}{r} 487 \\ + 512 \\ \hline 999 \end{array}$$

$$\begin{array}{r} 357 \\ + 421 \\ \hline 778 \end{array}$$

$$\begin{array}{r} 344 \\ + 224 \\ \hline 568 \end{array}$$

$$\begin{array}{r} 721 \\ + 162 \\ \hline 883 \end{array}$$

$$\begin{array}{r} 845 \\ + 133 \\ \hline 978 \end{array}$$

$$\begin{array}{r} 564 \\ + 315 \\ \hline 879 \end{array}$$

$$\begin{array}{r} 278 \\ + 421 \\ \hline 699 \end{array}$$

$$\begin{array}{r} 788 \\ + 111 \\ \hline 899 \end{array}$$

$$\begin{array}{r} 335 \\ + 644 \\ \hline 979 \end{array}$$

$$\begin{array}{r} 312 \\ + 175 \\ \hline 487 \end{array}$$

$$\begin{array}{r} 534 \\ + 355 \\ \hline 889 \end{array}$$

$$\begin{array}{r} 218 \\ + 531 \\ \hline 749 \end{array}$$

$$\begin{array}{r} 616 \\ + 131 \\ \hline 747 \end{array}$$

$$\begin{array}{r} 678 \\ + 211 \\ \hline 889 \end{array}$$

$$\begin{array}{r} 483 \\ + 311 \\ \hline 794 \end{array}$$

$$\begin{array}{r} 422 \\ + 412 \\ \hline 834 \end{array}$$

$$\begin{array}{r} 357 \\ + 332 \\ \hline 689 \end{array}$$

$$\begin{array}{r} 457 \\ + 122 \\ \hline 579 \end{array}$$

$$\begin{array}{r} 536 \\ + 142 \\ \hline 678 \end{array}$$

$$\begin{array}{r} 781 \\ + 112 \\ \hline 893 \end{array}$$

$$\begin{array}{r} 855 \\ + 142 \\ \hline 997 \end{array}$$

$$\begin{array}{r} 145 \\ + 334 \\ \hline 479 \end{array}$$

$$\begin{array}{r} 546 \\ + 232 \\ \hline 778 \end{array}$$

$$\begin{array}{r} 877 \\ + 111 \\ \hline 988 \end{array}$$

$$\begin{array}{r} 747 \\ + 141 \\ \hline 888 \end{array}$$




Name : _____

Score : _____

Teacher : _____

Date : _____

Find the value of each group of base ten blocks.



= 100




= 10

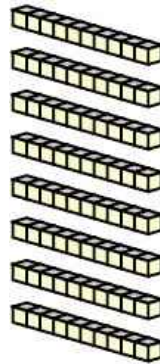


= 1

1)



_____ Hundreds




_____ Tens



_____ Ones

_____ Total

2)



_____ Hundreds




_____ Tens



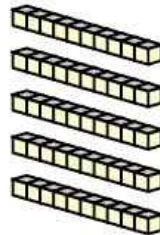
_____ Ones

_____ Total

3)



_____ Hundreds




_____ Tens



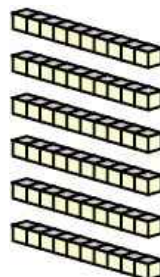
_____ Ones

_____ Total

4)



_____ Hundreds



_____ Tens



_____ Ones

_____ Total



Name : _____

Score : _____

Teacher : _____

Date : _____

Find the value of each group of base ten blocks.

1) 185

2) 718

3) 951

4) 162



Name : _____

Score : _____

Teacher : _____

Date : _____

Write the Numbers in Expanded Form.

1) 317

2) 781

3) 275

4) 593

5) 893

6) 515

7) 329

8) 340

9) 251

10) 239

11) 999

12) 170

13) 796

14) 721

15) 918



Name : _____

Score : _____

Teacher : _____

Date : _____

Write the Numbers in Expanded Form.

1) 317 300 + 10 + 7

2) 781 700 + 80 + 1

3) 275 200 + 70 + 5

4) 593 500 + 90 + 3

5) 893 800 + 90 + 3

6) 515 500 + 10 + 5

7) 329 300 + 20 + 9

8) 340 300 + 40 + 0

9) 251 200 + 50 + 1

10) 239 200 + 30 + 9

11) 999 900 + 90 + 9

12) 170 100 + 70 + 0

13) 796 700 + 90 + 6

14) 721 700 + 20 + 1

15) 918 900 + 10 + 8



Name : _____

Score : _____

Teacher : _____

Date : _____

Hundreds Table (1 - 100)

1	2	3	4	5		7		9	10
	12	13	14	15	16	17			
21		23	24	25	26		28	29	30
31	32	33	34	35		37	38		
41			44	45	46	47			50
	52	53				57	58	59	60
61		63	64		66	67	68	69	70
	72	73			76	77		79	
81	82	83				87	88	89	90
91	92	93		95	96	97	98	99	100



Name : _____

Score : _____

Teacher : _____

Date : _____

Hundreds Table (1 - 100)

1	2	3	4	5	6	7	8	9	10
11	12	13	14	15	16	17	18	19	20
21	22	23	24	25	26	27	28	29	30
31	32	33	34	35	36	37	38	39	40
41	42	43	44	45	46	47	48	49	50
51	52	53	54	55	56	57	58	59	60
61	62	63	64	65	66	67	68	69	70
71	72	73	74	75	76	77	78	79	80
81	82	83	84	85	86	87	88	89	90
91	92	93	94	95	96	97	98	99	100



Name : _____

Score : _____

Teacher : _____

Date : _____

Complete the Skip Counting Series

1) 49 , 59 , 69 , _____ , _____ , _____ , _____ , _____

2) 43 , _____ , _____ , 49 , _____ , _____ , _____ , 57

3) 52 , _____ , _____ , _____ , _____ , 102 , _____ , 122

4) 50 , _____ , 54 , _____ , _____ , _____ , _____ , 64

5) _____ , _____ , 58 , 60 , _____ , 64 , _____ , _____

6) _____ , _____ , _____ , 65 , _____ , 69 , 71 , _____

7) _____ , 60 , _____ , 70 , _____ , _____ , 85 , _____

8) _____ , _____ , _____ , _____ , 82 , 92 , 102 , _____

9) _____ , _____ , 51 , 56 , _____ , _____ , _____ , 76

10) 47 , _____ , _____ , _____ , 87 , _____ , _____ , 117

11) _____ , 62 , _____ , 72 , 77 , _____ , _____ , _____

12) 56 , _____ , _____ , 71 , _____ , _____ , 86 , _____



Name : _____

Score : _____

Teacher : _____

Date : _____

Complete the Skip Counting Series

1) 49 , 59 , 69 , 79 , 89 , 99 , 109 , 119

2) 43 , 45 , 47 , 49 , 51 , 53 , 55 , 57

3) 52 , 62 , 72 , 82 , 92 , 102 , 112 , 122

4) 50 , 52 , 54 , 56 , 58 , 60 , 62 , 64

5) 54 , 56 , 58 , 60 , 62 , 64 , 66 , 68

6) 59 , 61 , 63 , 65 , 67 , 69 , 71 , 73

7) 55 , 60 , 65 , 70 , 75 , 80 , 85 , 90

8) 42 , 52 , 62 , 72 , 82 , 92 , 102 , 112

9) 41 , 46 , 51 , 56 , 61 , 66 , 71 , 76

10) 47 , 57 , 67 , 77 , 87 , 97 , 107 , 117

11) 57 , 62 , 67 , 72 , 77 , 82 , 87 , 92

12) 56 , 61 , 66 , 71 , 76 , 81 , 86 , 91



Name : _____

Score : _____

Teacher : _____

Date : _____

Complete the Skip Counting Series

- 1) 90 , 100 , 110 , _____ , _____ , _____ , _____ , _____
- 2) _____ , _____ , 99 , _____ , _____ , 105 , 107 , _____
- 3) 82 , _____ , _____ , _____ , _____ , 92 , 94 , _____
- 4) _____ , _____ , _____ , 97 , _____ , 101 , _____ , 105
- 5) _____ , 90 , _____ , _____ , _____ , 98 , 100 , _____
- 6) 98 , _____ , 118 , _____ , 138 , _____ , _____ , _____
- 7) _____ , _____ , _____ , _____ , 113 , 118 , 123 , _____
- 8) 94 , _____ , _____ , 109 , _____ , _____ , 124 , _____
- 9) 80 , _____ , _____ , _____ , 120 , _____ , _____ , 150
- 10) 84 , 94 , _____ , _____ , _____ , _____ , 144 , _____
- 11) 83 , _____ , 93 , 98 , _____ , _____ , _____ , _____
- 12) _____ , 90 , 95 , _____ , _____ , 110 , _____ , _____



Name : _____

Score : _____

Teacher : _____

Date : _____

Complete the Skip Counting Series

- 1) 90 , 100 , 110 , 120 , 130 , 140 , 150 , 160
- 2) 95 , 97 , 99 , 101 , 103 , 105 , 107 , 109
- 3) 82 , 84 , 86 , 88 , 90 , 92 , 94 , 96
- 4) 91 , 93 , 95 , 97 , 99 , 101 , 103 , 105
- 5) 88 , 90 , 92 , 94 , 96 , 98 , 100 , 102
- 6) 98 , 108 , 118 , 128 , 138 , 148 , 158 , 168
- 7) 93 , 98 , 103 , 108 , 113 , 118 , 123 , 128
- 8) 94 , 99 , 104 , 109 , 114 , 119 , 124 , 129
- 9) 80 , 90 , 100 , 110 , 120 , 130 , 140 , 150
- 10) 84 , 94 , 104 , 114 , 124 , 134 , 144 , 154
- 11) 83 , 88 , 93 , 98 , 103 , 108 , 113 , 118
- 12) 85 , 90 , 95 , 100 , 105 , 110 , 115 , 120



Name : _____

Score : _____

Teacher : _____

Date : _____

Complete the Skip Counting Series

1) 10 , 12 , 14 , _____ , _____ , _____ , _____ , _____

2) _____ , _____ , 9 , 11 , 13 , _____ , _____ , _____

3) _____ , _____ , 29 , 39 , 49 , _____ , _____ , _____

4) 17 , _____ , _____ , 32 , _____ , 42 , _____ , _____

5) _____ , 13 , 18 , _____ , _____ , _____ , _____ , 43

6) 7 , 17 , _____ , _____ , _____ , _____ , _____ , 77

7) _____ , _____ , 28 , _____ , _____ , 43 , 48 , _____

8) 12 , _____ , _____ , _____ , 20 , _____ , _____ , 26

9) 4 , _____ , _____ , 19 , _____ , 29 , _____ , _____

10) _____ , 25 , _____ , 45 , _____ , _____ , 75 , _____

11) _____ , _____ , 31 , _____ , 51 , _____ , 71 , _____

12) _____ , 21 , 23 , _____ , 27 , _____ , _____ , _____



Name : _____

Score : _____

Teacher : _____

Date : _____

Complete the Skip Counting Series

1) 10 , 12 , 14 , 16 , 18 , 20 , 22 , 24

2) 5 , 7 , 9 , 11 , 13 , 15 , 17 , 19

3) 9 , 19 , 29 , 39 , 49 , 59 , 69 , 79

4) 17 , 22 , 27 , 32 , 37 , 42 , 47 , 52

5) 8 , 13 , 18 , 23 , 28 , 33 , 38 , 43

6) 7 , 17 , 27 , 37 , 47 , 57 , 67 , 77

7) 18 , 23 , 28 , 33 , 38 , 43 , 48 , 53

8) 12 , 14 , 16 , 18 , 20 , 22 , 24 , 26

9) 4 , 9 , 14 , 19 , 24 , 29 , 34 , 39

10) 15 , 25 , 35 , 45 , 55 , 65 , 75 , 85

11) 11 , 21 , 31 , 41 , 51 , 61 , 71 , 81

12) 19 , 21 , 23 , 25 , 27 , 29 , 31 , 33



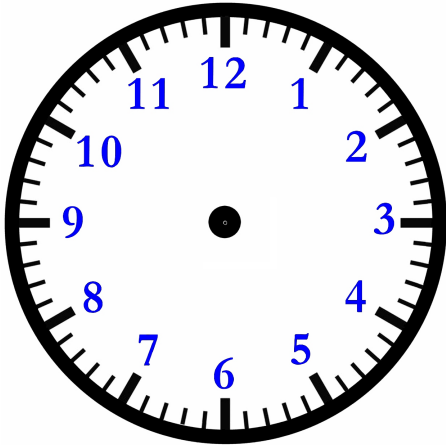
Name : _____

Score : _____

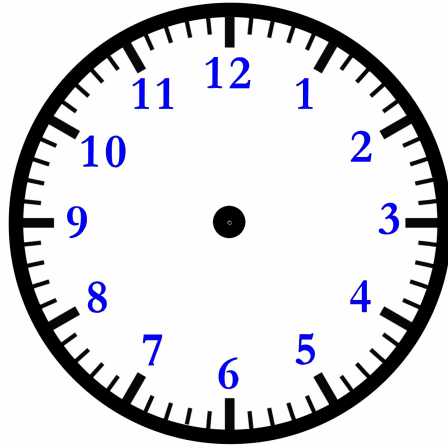
Teacher : _____

Date : _____

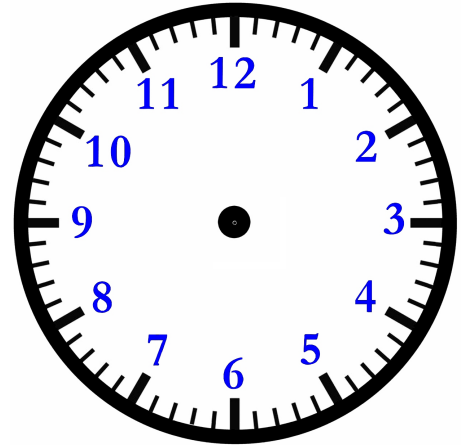
Draw the Hands on the Clock Face



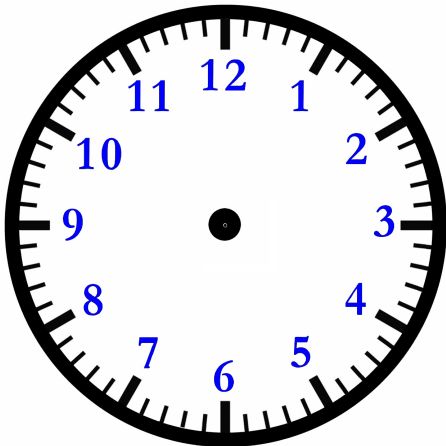
8:45



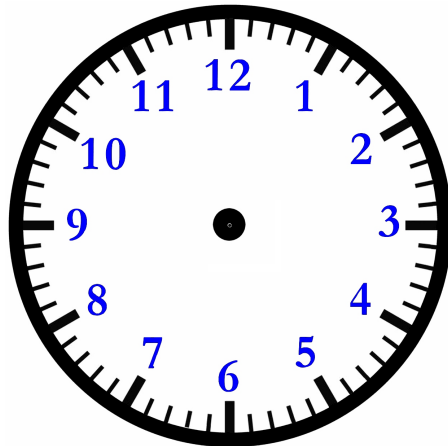
10:00



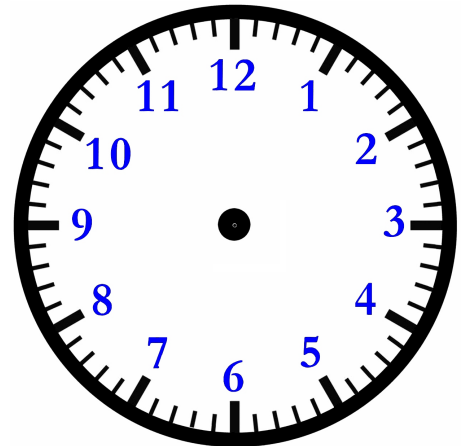
1:00



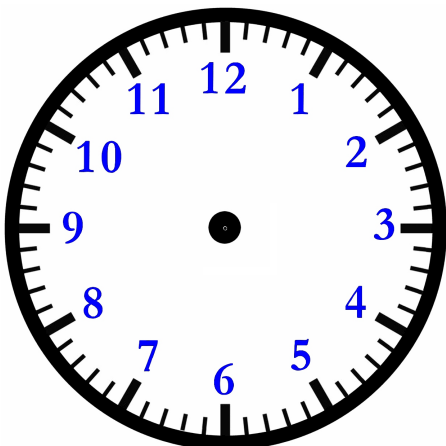
12:50



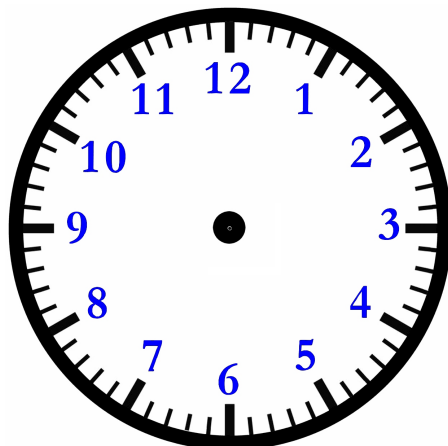
6:20



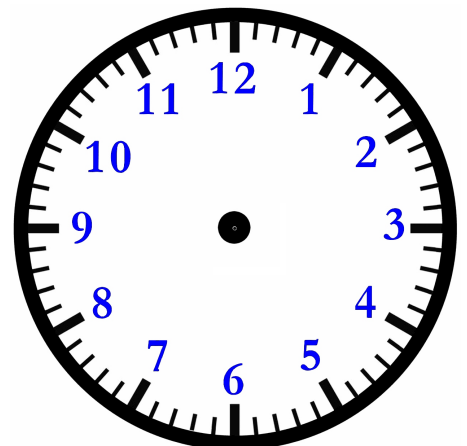
3:55



11:10



5:05



4:35



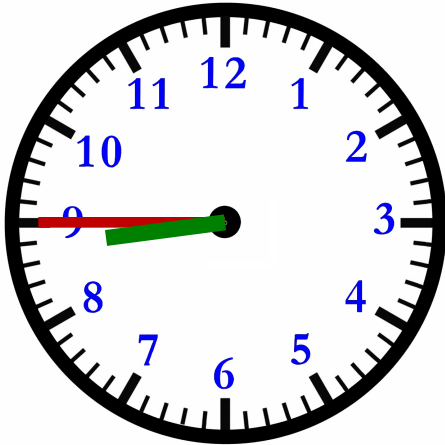
Name : _____

Score : _____

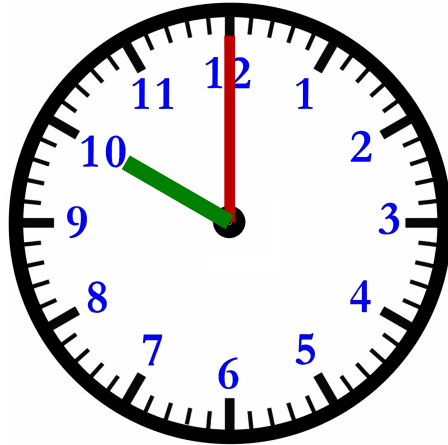
Teacher : _____

Date : _____

Draw the Hands on the Clock Face



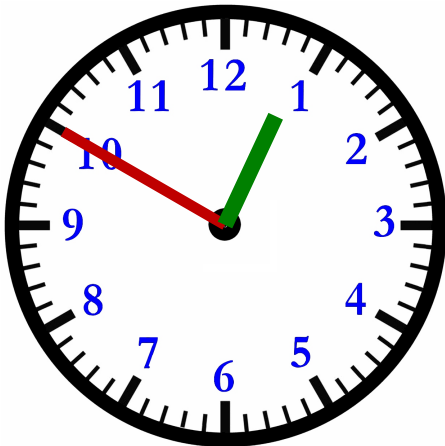
8:45



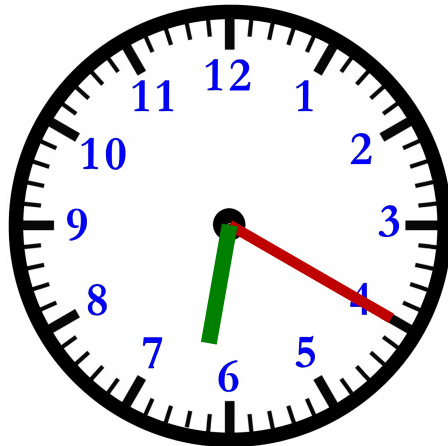
10:00



1:00



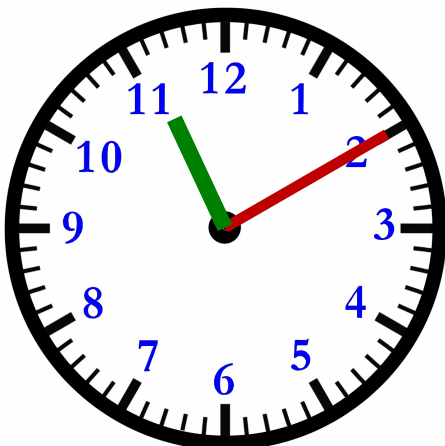
12:50



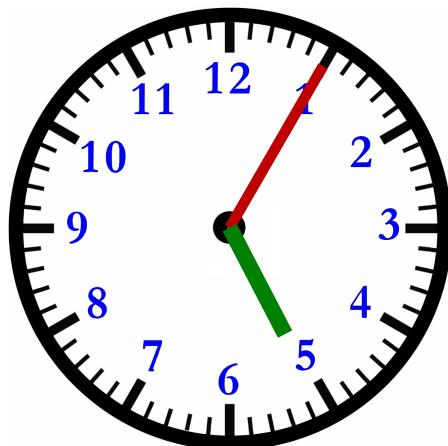
6:20



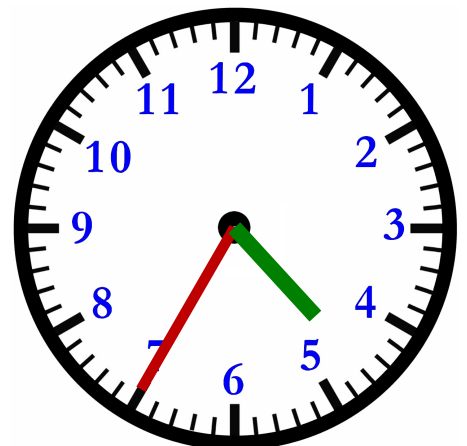
3:55



11:10



5:05



4:35



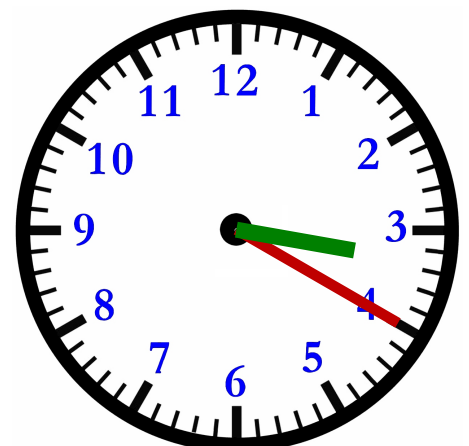
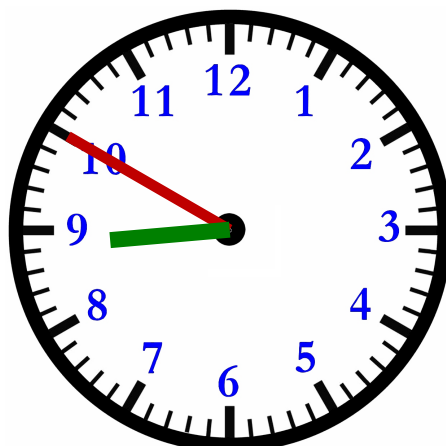
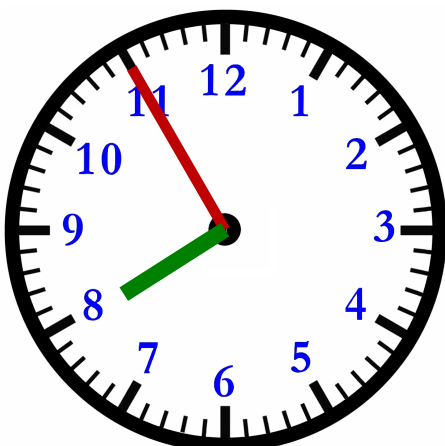
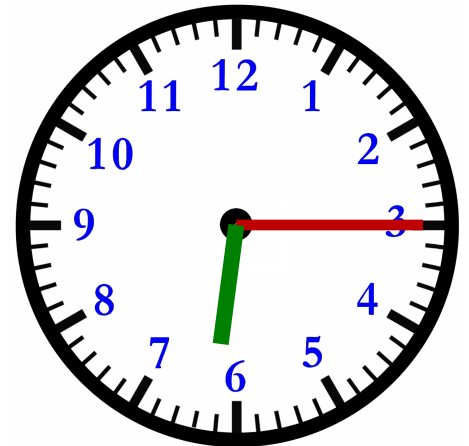
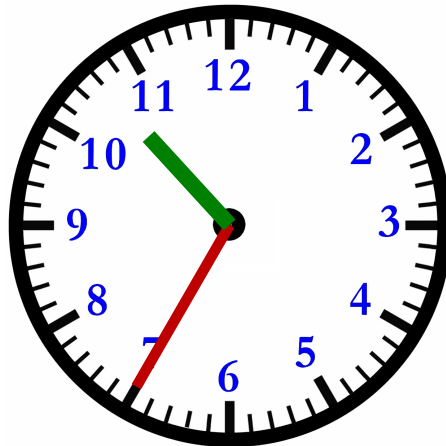
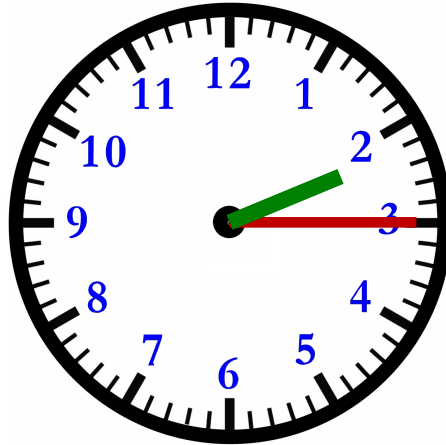
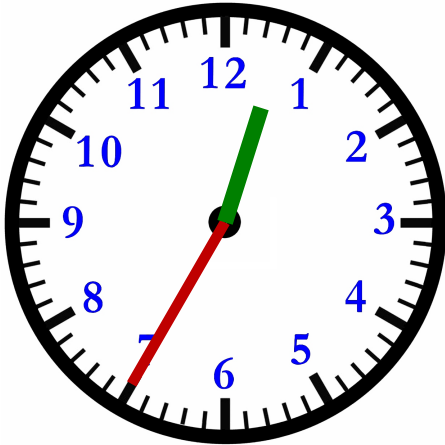
Name : _____

Score : _____

Teacher : _____

Date : _____

What Time Is It ?



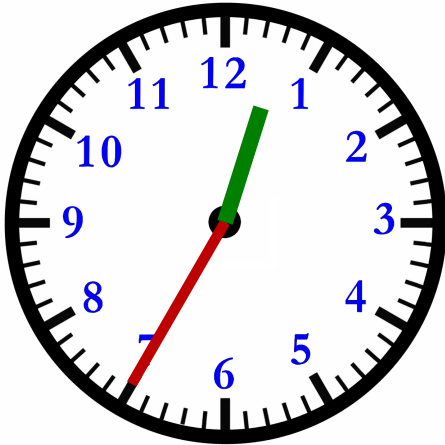
Name : _____

Score : _____

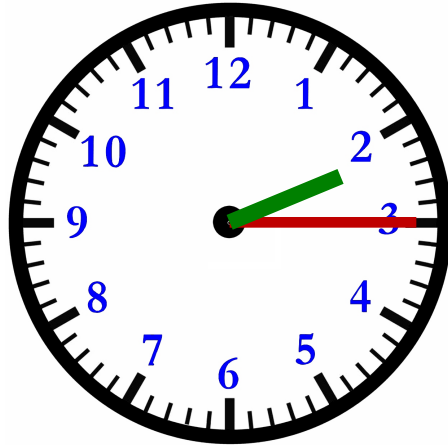
Teacher : _____

Date : _____

What Time Is It ?



12:35



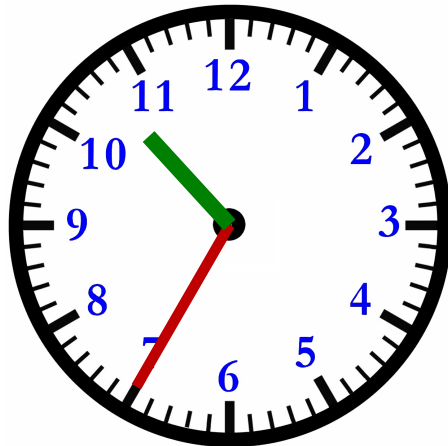
2:15



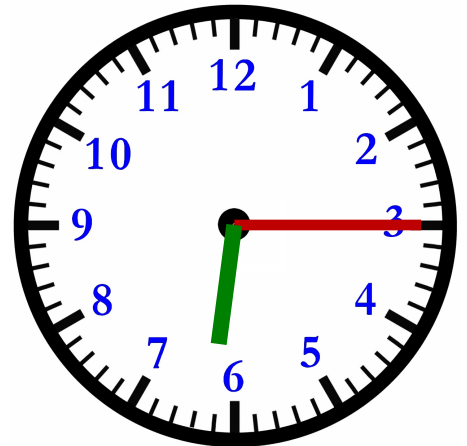
1:00



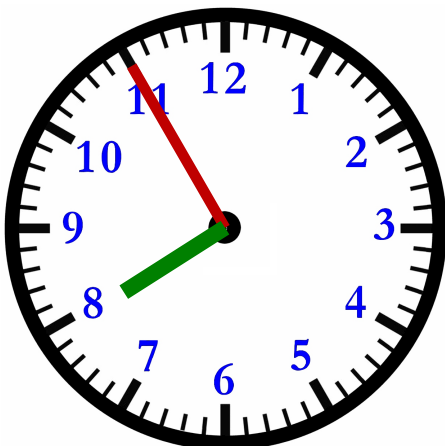
4:30



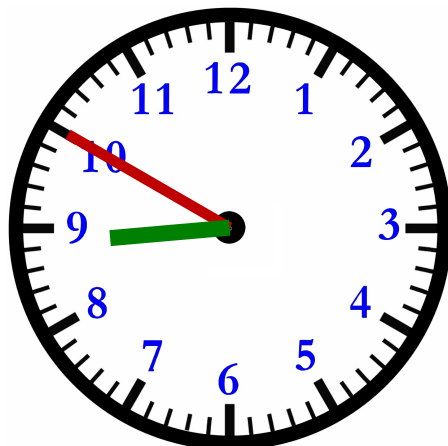
10:35



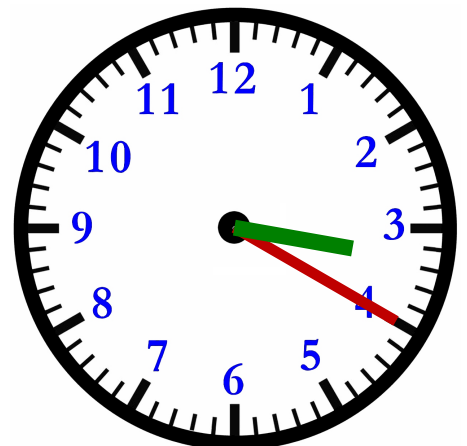
6:15



7:55



8:50



3:20



Name : _____

Score : _____

Teacher : _____

Date : _____

$$\begin{array}{r} 6 \\ - 1 \\ \hline \end{array}$$

$$\begin{array}{r} 8 \\ - 0 \\ \hline \end{array}$$

$$\begin{array}{r} 6 \\ - 5 \\ \hline \end{array}$$

$$\begin{array}{r} 6 \\ - 2 \\ \hline \end{array}$$

$$\begin{array}{r} 9 \\ - 9 \\ \hline \end{array}$$

$$\begin{array}{r} 5 \\ - 2 \\ \hline \end{array}$$

$$\begin{array}{r} 1 \\ - 1 \\ \hline \end{array}$$

$$\begin{array}{r} 9 \\ - 0 \\ \hline \end{array}$$

$$\begin{array}{r} 4 \\ - 0 \\ \hline \end{array}$$

$$\begin{array}{r} 4 \\ - 0 \\ \hline \end{array}$$

$$\begin{array}{r} 6 \\ - 4 \\ \hline \end{array}$$

$$\begin{array}{r} 8 \\ - 5 \\ \hline \end{array}$$

$$\begin{array}{r} 9 \\ - 1 \\ \hline \end{array}$$

$$\begin{array}{r} 5 \\ - 1 \\ \hline \end{array}$$

$$\begin{array}{r} 4 \\ - 0 \\ \hline \end{array}$$

$$\begin{array}{r} 6 \\ - 6 \\ \hline \end{array}$$

$$\begin{array}{r} 9 \\ - 3 \\ \hline \end{array}$$

$$\begin{array}{r} 3 \\ - 3 \\ \hline \end{array}$$

$$\begin{array}{r} 9 \\ - 6 \\ \hline \end{array}$$

$$\begin{array}{r} 4 \\ - 4 \\ \hline \end{array}$$

$$\begin{array}{r} 8 \\ - 5 \\ \hline \end{array}$$

$$\begin{array}{r} 9 \\ - 1 \\ \hline \end{array}$$

$$\begin{array}{r} 9 \\ - 0 \\ \hline \end{array}$$

$$\begin{array}{r} 4 \\ - 3 \\ \hline \end{array}$$

$$\begin{array}{r} 5 \\ - 3 \\ \hline \end{array}$$

$$\begin{array}{r} 8 \\ - 0 \\ \hline \end{array}$$

$$\begin{array}{r} 4 \\ - 2 \\ \hline \end{array}$$

$$\begin{array}{r} 9 \\ - 1 \\ \hline \end{array}$$

$$\begin{array}{r} 3 \\ - 0 \\ \hline \end{array}$$

$$\begin{array}{r} 7 \\ - 7 \\ \hline \end{array}$$



Name : _____

Score : _____

Teacher : _____

Date : _____

$$\begin{array}{r} 6 \\ - 1 \\ \hline 5 \end{array}$$

$$\begin{array}{r} 8 \\ - 0 \\ \hline 8 \end{array}$$

$$\begin{array}{r} 6 \\ - 5 \\ \hline 1 \end{array}$$

$$\begin{array}{r} 6 \\ - 2 \\ \hline 4 \end{array}$$

$$\begin{array}{r} 9 \\ - 9 \\ \hline 0 \end{array}$$

$$\begin{array}{r} 5 \\ - 2 \\ \hline 3 \end{array}$$

$$\begin{array}{r} 1 \\ - 1 \\ \hline 0 \end{array}$$

$$\begin{array}{r} 9 \\ - 0 \\ \hline 9 \end{array}$$

$$\begin{array}{r} 4 \\ - 0 \\ \hline 4 \end{array}$$

$$\begin{array}{r} 4 \\ - 0 \\ \hline 4 \end{array}$$

$$\begin{array}{r} 6 \\ - 4 \\ \hline 2 \end{array}$$

$$\begin{array}{r} 8 \\ - 5 \\ \hline 3 \end{array}$$

$$\begin{array}{r} 9 \\ - 1 \\ \hline 8 \end{array}$$

$$\begin{array}{r} 5 \\ - 1 \\ \hline 4 \end{array}$$

$$\begin{array}{r} 4 \\ - 0 \\ \hline 4 \end{array}$$

$$\begin{array}{r} 6 \\ - 6 \\ \hline 0 \end{array}$$

$$\begin{array}{r} 9 \\ - 3 \\ \hline 6 \end{array}$$

$$\begin{array}{r} 3 \\ - 3 \\ \hline 0 \end{array}$$

$$\begin{array}{r} 9 \\ - 6 \\ \hline 3 \end{array}$$

$$\begin{array}{r} 4 \\ - 4 \\ \hline 0 \end{array}$$

$$\begin{array}{r} 8 \\ - 5 \\ \hline 3 \end{array}$$

$$\begin{array}{r} 9 \\ - 1 \\ \hline 8 \end{array}$$

$$\begin{array}{r} 9 \\ - 0 \\ \hline 9 \end{array}$$

$$\begin{array}{r} 4 \\ - 3 \\ \hline 1 \end{array}$$

$$\begin{array}{r} 5 \\ - 3 \\ \hline 2 \end{array}$$

$$\begin{array}{r} 8 \\ - 0 \\ \hline 8 \end{array}$$

$$\begin{array}{r} 4 \\ - 2 \\ \hline 2 \end{array}$$

$$\begin{array}{r} 9 \\ - 1 \\ \hline 8 \end{array}$$

$$\begin{array}{r} 3 \\ - 0 \\ \hline 3 \end{array}$$

$$\begin{array}{r} 7 \\ - 7 \\ \hline 0 \end{array}$$



Name : _____

Score : _____

Teacher : _____

Date : _____

$$\begin{array}{r} 5 \\ + 5 \\ \hline \end{array}$$

$$\begin{array}{r} 4 \\ + 9 \\ \hline \end{array}$$

$$\begin{array}{r} 8 \\ + 5 \\ \hline \end{array}$$

$$\begin{array}{r} 3 \\ + 1 \\ \hline \end{array}$$

$$\begin{array}{r} 2 \\ + 4 \\ \hline \end{array}$$

$$\begin{array}{r} 5 \\ + 4 \\ \hline \end{array}$$

$$\begin{array}{r} 7 \\ + 0 \\ \hline \end{array}$$

$$\begin{array}{r} 4 \\ + 6 \\ \hline \end{array}$$

$$\begin{array}{r} 7 \\ + 0 \\ \hline \end{array}$$

$$\begin{array}{r} 3 \\ + 4 \\ \hline \end{array}$$

$$\begin{array}{r} 7 \\ + 5 \\ \hline \end{array}$$

$$\begin{array}{r} 4 \\ + 2 \\ \hline \end{array}$$

$$\begin{array}{r} 2 \\ + 3 \\ \hline \end{array}$$

$$\begin{array}{r} 3 \\ + 9 \\ \hline \end{array}$$

$$\begin{array}{r} 6 \\ + 9 \\ \hline \end{array}$$

$$\begin{array}{r} 1 \\ + 3 \\ \hline \end{array}$$

$$\begin{array}{r} 2 \\ + 5 \\ \hline \end{array}$$

$$\begin{array}{r} 8 \\ + 8 \\ \hline \end{array}$$

$$\begin{array}{r} 6 \\ + 9 \\ \hline \end{array}$$

$$\begin{array}{r} 5 \\ + 9 \\ \hline \end{array}$$

$$\begin{array}{r} 8 \\ + 7 \\ \hline \end{array}$$

$$\begin{array}{r} 5 \\ + 5 \\ \hline \end{array}$$

$$\begin{array}{r} 2 \\ + 6 \\ \hline \end{array}$$

$$\begin{array}{r} 4 \\ + 8 \\ \hline \end{array}$$

$$\begin{array}{r} 4 \\ + 8 \\ \hline \end{array}$$

$$\begin{array}{r} 8 \\ + 0 \\ \hline \end{array}$$

$$\begin{array}{r} 3 \\ + 8 \\ \hline \end{array}$$

$$\begin{array}{r} 7 \\ + 6 \\ \hline \end{array}$$

$$\begin{array}{r} 6 \\ + 1 \\ \hline \end{array}$$

$$\begin{array}{r} 3 \\ + 3 \\ \hline \end{array}$$

Name : _____

Score : _____

Teacher : _____

Date : _____

$$\begin{array}{r} 5 \\ + 5 \\ \hline 10 \end{array}$$

$$\begin{array}{r} 4 \\ + 9 \\ \hline 13 \end{array}$$

$$\begin{array}{r} 8 \\ + 5 \\ \hline 13 \end{array}$$

$$\begin{array}{r} 3 \\ + 1 \\ \hline 4 \end{array}$$

$$\begin{array}{r} 2 \\ + 4 \\ \hline 6 \end{array}$$

$$\begin{array}{r} 5 \\ + 4 \\ \hline 9 \end{array}$$

$$\begin{array}{r} 7 \\ + 0 \\ \hline 7 \end{array}$$

$$\begin{array}{r} 4 \\ + 6 \\ \hline 10 \end{array}$$

$$\begin{array}{r} 7 \\ + 0 \\ \hline 7 \end{array}$$

$$\begin{array}{r} 3 \\ + 4 \\ \hline 7 \end{array}$$

$$\begin{array}{r} 7 \\ + 5 \\ \hline 12 \end{array}$$

$$\begin{array}{r} 4 \\ + 2 \\ \hline 6 \end{array}$$

$$\begin{array}{r} 2 \\ + 3 \\ \hline 5 \end{array}$$

$$\begin{array}{r} 3 \\ + 9 \\ \hline 12 \end{array}$$

$$\begin{array}{r} 6 \\ + 9 \\ \hline 15 \end{array}$$

$$\begin{array}{r} 1 \\ + 3 \\ \hline 4 \end{array}$$

$$\begin{array}{r} 2 \\ + 5 \\ \hline 7 \end{array}$$

$$\begin{array}{r} 8 \\ + 8 \\ \hline 16 \end{array}$$

$$\begin{array}{r} 6 \\ + 9 \\ \hline 15 \end{array}$$

$$\begin{array}{r} 5 \\ + 9 \\ \hline 14 \end{array}$$

$$\begin{array}{r} 8 \\ + 7 \\ \hline 15 \end{array}$$

$$\begin{array}{r} 5 \\ + 5 \\ \hline 10 \end{array}$$

$$\begin{array}{r} 2 \\ + 6 \\ \hline 8 \end{array}$$

$$\begin{array}{r} 4 \\ + 8 \\ \hline 12 \end{array}$$

$$\begin{array}{r} 4 \\ + 8 \\ \hline 12 \end{array}$$

$$\begin{array}{r} 8 \\ + 0 \\ \hline 8 \end{array}$$

$$\begin{array}{r} 3 \\ + 8 \\ \hline 11 \end{array}$$

$$\begin{array}{r} 7 \\ + 6 \\ \hline 13 \end{array}$$

$$\begin{array}{r} 6 \\ + 1 \\ \hline 7 \end{array}$$

$$\begin{array}{r} 3 \\ + 3 \\ \hline 6 \end{array}$$

Name : _____

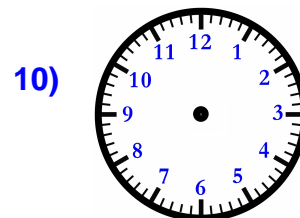
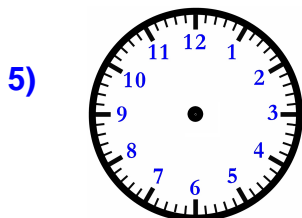
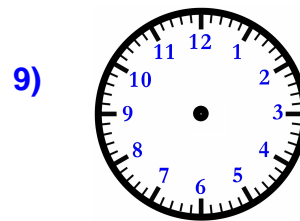

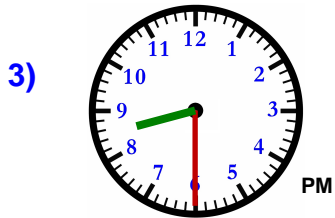
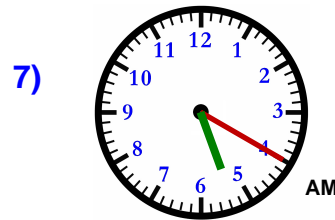
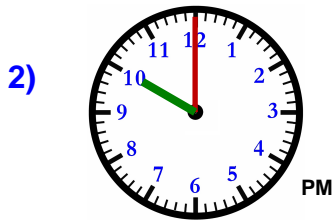

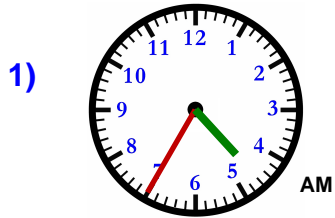
Score : _____

Teacher : _____

Date : _____

Filling In Time On Clocks

Fill out each missing clock based off the time of its pair.



Name : _____

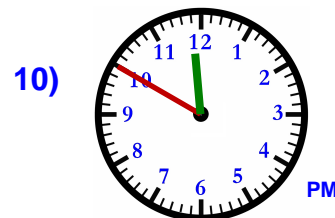
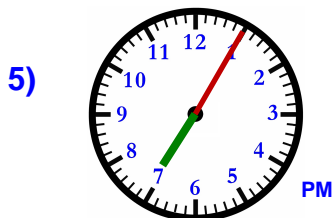
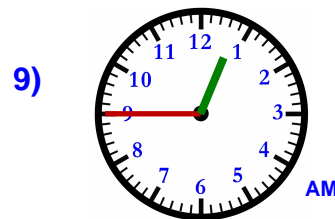
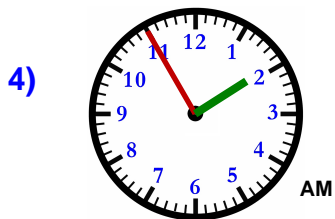
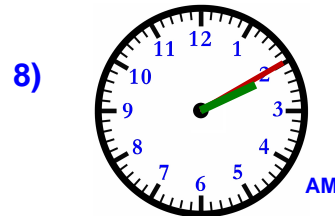
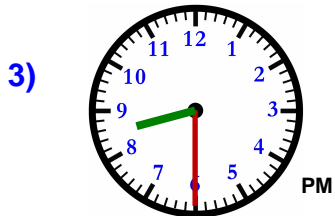
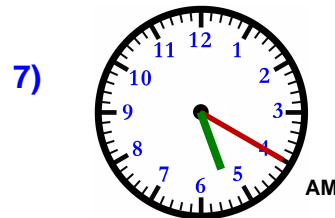
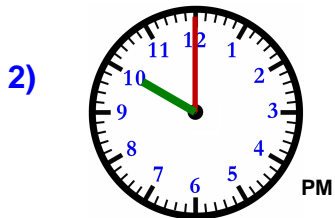
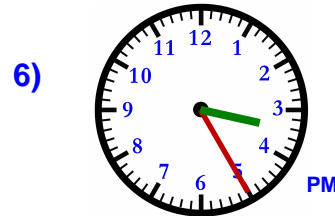
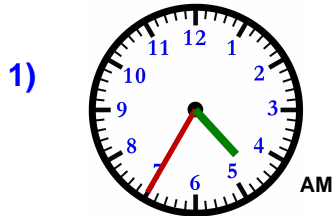
Score : _____

Teacher : _____

Date : _____

Filling In Time On Clocks

Fill out each missing clock based off the time of its pair.



Name : _____

Score : _____

Teacher : _____

Date : _____

Word Problems

- 1) There are 8 pencils in the drawer. Sally placed 3 more pencils in the drawer.
How many pencils are now there in total ? _____
- 2) A restaurant served 9 pizzas during lunch and 6 during dinner today.
How many pizzas were served today ? _____
- 3) Dan had 7 pennies in his bank. His sister borrowed 4 of his pennies.
How many pennies does Dan have now ? _____
- 4) Keith picked 3 oranges and Joan picked 4 oranges from the orange tree.
How many oranges were picked in all ? _____
- 5) Mike has eight black balloons but lost three of them.
How many black balloons does Mike have now ? _____
- 6) Keith grew six potatoes. Sam grew seven potatoes. How many
potatoes did they grow in total ? _____
- 7) Sara found eight seashells but two were broken.
How many unbroken seashells did Sara find ? _____
- 8) There are four rose bushes currently in the park. Park workers will plant seven more
rose bushes today. How many rose bushes will the park have when the
workers are finished ? _____
- 9) Sandy's cat had nine kittens. She gave four to her friends.
How many kittens does she have now ? _____
- 10) There were a total of 8 hockey games this year. Alyssa missed 4 of the games.
How many hockey games did Alyssa go to in total ? _____



Name : _____

Score : _____

Teacher : _____

Date : _____

Word Problems

- 1) There are 8 pencils in the drawer. Sally placed 3 more pencils in the drawer.
How many pencils are now there in total ? 11 pencils

- 2) A restaurant served 9 pizzas during lunch and 6 during dinner today.
How many pizzas were served today ? 15 pizzas

- 3) Dan had 7 pennies in his bank. His sister borrowed 4 of his pennies.
How many pennies does Dan have now ? 3 pennies

- 4) Keith picked 3 oranges and Joan picked 4 oranges from the orange tree.
How many oranges were picked in all ? 7 oranges

- 5) Mike has eight black balloons but lost three of them.
How many black balloons does Mike have now ? 5 black balloons

- 6) Keith grew six potatoes. Sam grew seven potatoes. How many
potatoes did they grow in total ? 13 potatoes

- 7) Sara found eight seashells but two were broken.
How many unbroken seashells did Sara find ? 6 seashells

- 8) There are four rose bushes currently in the park. Park workers will plant seven more
rose bushes today. How many rose bushes will the park have when the
workers are finished ? 11 rose bushes

- 9) Sandy's cat had nine kittens. She gave four to her friends.
How many kittens does she have now ? 5 kittens

- 10) There were a total of 8 hockey games this year. Alyssa missed 4 of the games.
How many hockey games did Alyssa go to in total ? 4 games



Name : _____

Score : _____

Teacher : _____

Date : _____

Word Problems

- 1) Alyssa grew twenty-two watermelons. Nancy grew forty-one watermelons. How many watermelons did they grow in all ? _____
- 2) There are 28 rose bushes currently in the park. Park workers will plant 16 more rose bushes today. How many rose bushes will the park have when the workers are finished ? _____
- 3) Sandy picked thirty-one lemons and Benny picked thirteen lemons from the lemon tree. How many lemons were picked in total ? _____
- 4) Dan has 49 baseball cards. Jessica bought 26 of Dan's baseball cards. How many baseball cards does Dan have now ? _____
- 5) Jason had 35 quarters in his bank. He spent 17 of his quarters. How many quarters does he have now ? _____
- 6) Sam found thirty-one seashells on the beach, he gave Tom twenty-six of the seashells. How many seashells does he now have ? _____
- 7) Sam has forty-two red balloons, he gave Joan twenty-one of the balloons. How many red balloons does he now have ? _____
- 8) Joan's high school played thirty-seven hockey games this year. She attended twenty-six games. How many hockey games did Joan miss ? _____
- 9) Jessica has 34 books. Mike has 15 books. How many books do they have together ? _____
- 10) There are 11 crayons in the drawer. Melanie placed 35 more crayons in the drawer. How many crayons are now there in all ? _____



Name : _____

Score : _____

Teacher : _____

Date : _____

Word Problems

- 1) Alyssa grew twenty-two watermelons. Nancy grew forty-one watermelons. How many watermelons did they grow in all ? 63 watermelons

- 2) There are 28 rose bushes currently in the park. Park workers will plant 16 more rose bushes today. How many rose bushes will the park have when the workers are finished ? 44 rose bushes

- 3) Sandy picked thirty-one lemons and Benny picked thirteen lemons from the lemon tree. How many lemons were picked in total ? 44 lemons

- 4) Dan has 49 baseball cards. Jessica bought 26 of Dan's baseball cards. How many baseball cards does Dan have now ? 23 baseball cards

- 5) Jason had 35 quarters in his bank. He spent 17 of his quarters. How many quarters does he have now ? 18 quarters

- 6) Sam found thirty-one seashells on the beach, he gave Tom twenty-six of the seashells. How many seashells does he now have ? 5 seashells

- 7) Sam has forty-two red balloons, he gave Joan twenty-one of the balloons. How many red balloons does he now have ? 21 red balloons

- 8) Joan's high school played thirty-seven hockey games this year. She attended twenty-six games. How many hockey games did Joan miss ? 11 games

- 9) Jessica has 34 books. Mike has 15 books. How many books do they have together ? 49 books

- 10) There are 11 crayons in the drawer. Melanie placed 35 more crayons in the drawer. How many crayons are now there in all ? 46 crayons



Name : _____

Score : _____

Teacher : _____

Date : _____

1)



\$ _____

2)



\$ _____

3)



\$ _____

4)



\$ _____

5)



\$ _____



Name : _____

Score : _____

Teacher : _____

Date : _____

1)



\$ 1.09

2)



\$ 1.23

3)



\$ 1.02

4)



\$ 0.89

5)



\$ 1.33

